



Solve each problem.

1)  $5 + 0 = \underline{\quad}$

2)  $4 + 0 = \underline{\quad}$

3)  $1 + 4 = \underline{\quad}$

4)  $4 + 1 = \underline{\quad}$

5)  $1 + 1 = \underline{\quad}$

6)  $3 + 1 = \underline{\quad}$

7)  $3 + 2 = \underline{\quad}$

8)  $2 + 1 = \underline{\quad}$

9)  $5 - 4 = \underline{\quad}$

10)  $3 - 3 = \underline{\quad}$

11)  $3 - 1 = \underline{\quad}$

12)  $5 - 5 = \underline{\quad}$

13)  $5 - 3 = \underline{\quad}$

14)  $4 - 2 = \underline{\quad}$

15)  $2 - 2 = \underline{\quad}$

16)  $4 - 3 = \underline{\quad}$

**Answers**

1. \_\_\_\_\_

2. \_\_\_\_\_

3. \_\_\_\_\_

4. \_\_\_\_\_

5. \_\_\_\_\_

6. \_\_\_\_\_

7. \_\_\_\_\_

8. \_\_\_\_\_

9. \_\_\_\_\_

10. \_\_\_\_\_

11. \_\_\_\_\_

12. \_\_\_\_\_

13. \_\_\_\_\_

14. \_\_\_\_\_

15. \_\_\_\_\_

16. \_\_\_\_\_



Solve each problem.

1)  $5 + 0 = \underline{5}$

2)  $4 + 0 = \underline{4}$

3)  $1 + 4 = \underline{5}$

4)  $4 + 1 = \underline{5}$

5)  $1 + 1 = \underline{2}$

6)  $3 + 1 = \underline{4}$

7)  $3 + 2 = \underline{5}$

8)  $2 + 1 = \underline{3}$

9)  $5 - 4 = \underline{1}$

10)  $3 - 3 = \underline{0}$

11)  $3 - 1 = \underline{2}$

12)  $5 - 5 = \underline{0}$

13)  $5 - 3 = \underline{2}$

14)  $4 - 2 = \underline{2}$

15)  $2 - 2 = \underline{0}$

16)  $4 - 3 = \underline{1}$

**Answers**1. 52. 43. 54. 55. 26. 47. 58. 39. 110. 011. 212. 013. 214. 215. 016. 1



Solve each problem.

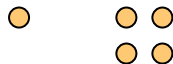
1) 5 + 0 = \_\_\_\_\_



2) 4 + 0 = \_\_\_\_\_



3) 1 + 4 = \_\_\_\_\_



4) 4 + 1 = \_\_\_\_\_



5) 1 + 1 = \_\_\_\_\_



6) 3 + 1 = \_\_\_\_\_



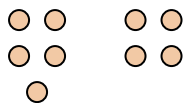
7) 3 + 2 = \_\_\_\_\_



8) 2 + 1 = \_\_\_\_\_



9) 5 - 4 = \_\_\_\_\_



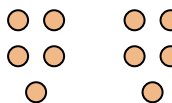
10) 3 - 3 = \_\_\_\_\_



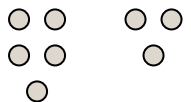
11) 3 - 1 = \_\_\_\_\_



12) 5 - 5 = \_\_\_\_\_



13) 5 - 3 = \_\_\_\_\_



14) 4 - 2 = \_\_\_\_\_



15) 2 - 2 = \_\_\_\_\_



16) 4 - 3 = \_\_\_\_\_



**Answers**

1. \_\_\_\_\_

2. \_\_\_\_\_

3. \_\_\_\_\_

4. \_\_\_\_\_

5. \_\_\_\_\_

6. \_\_\_\_\_

7. \_\_\_\_\_

8. \_\_\_\_\_

9. \_\_\_\_\_

10. \_\_\_\_\_

11. \_\_\_\_\_

12. \_\_\_\_\_

13. \_\_\_\_\_

14. \_\_\_\_\_

15. \_\_\_\_\_

16. \_\_\_\_\_