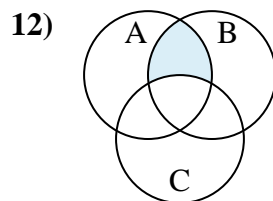
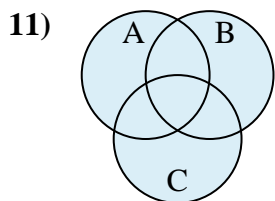
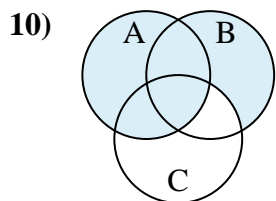
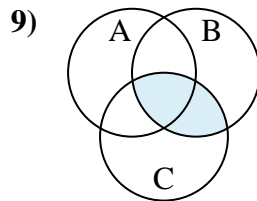
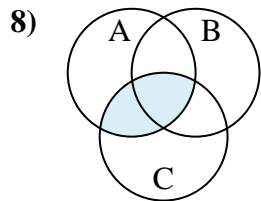
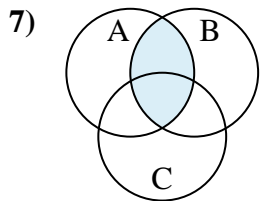
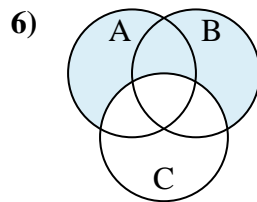
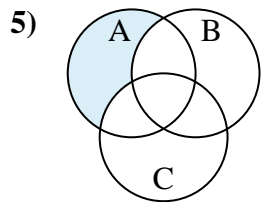
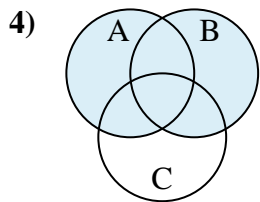
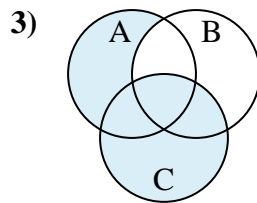
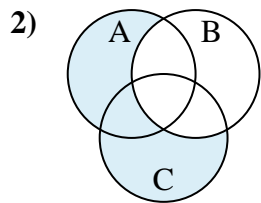
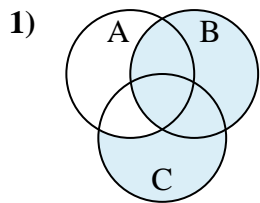




Determine the shaded region of each diagram.



Answers

1. \_\_\_\_\_

2. \_\_\_\_\_

3. \_\_\_\_\_

4. \_\_\_\_\_

5. \_\_\_\_\_

6. \_\_\_\_\_

7. \_\_\_\_\_

8. \_\_\_\_\_

9. \_\_\_\_\_

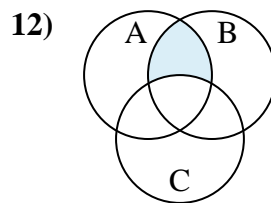
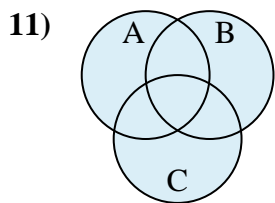
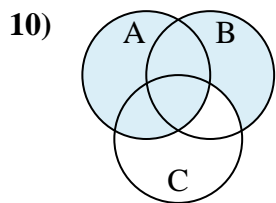
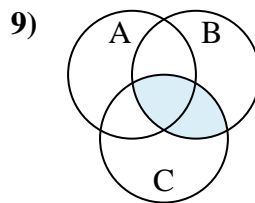
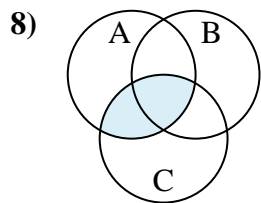
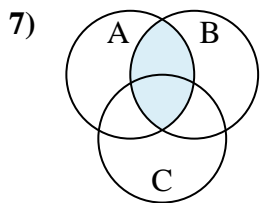
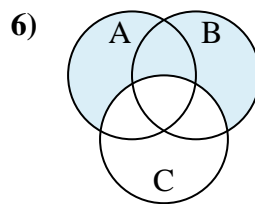
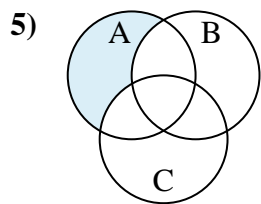
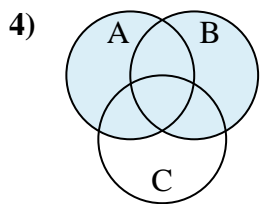
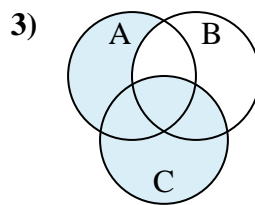
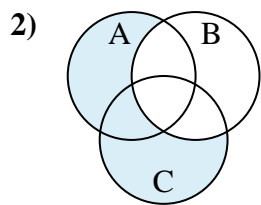
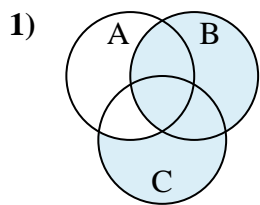
10. \_\_\_\_\_

11. \_\_\_\_\_

12. \_\_\_\_\_



Determine the shaded region of each diagram.



Answers

1.  $B \cup (C - A)$

2.  $(C \cup A) - B$

3.  $C \cup (A - B)$

4.  $A \cup B$

5.  $A - (B \cup C)$

6.  $(A \cup B) - C$

7.  $A \cap B$

8.  $C \cap A$

9.  $C \cap B$

10.  $A \cup (B - C)$

11.  $A \cup C \cup B$

12.  $(B \cap A) - C$