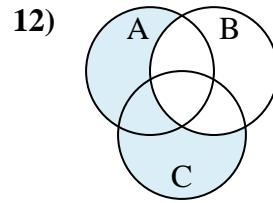
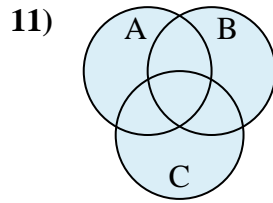
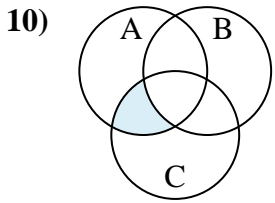
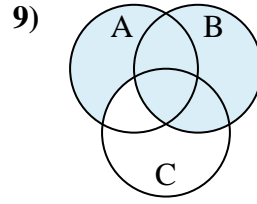
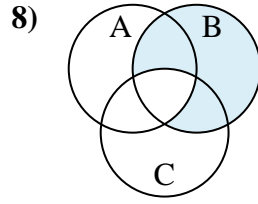
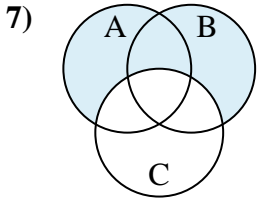
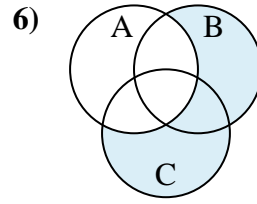
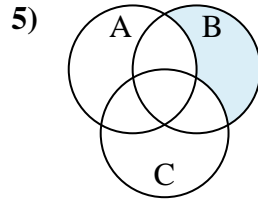
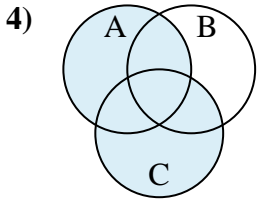
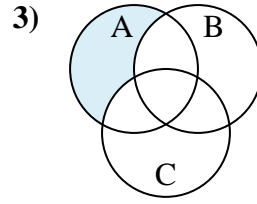
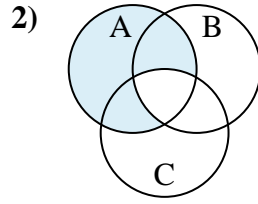
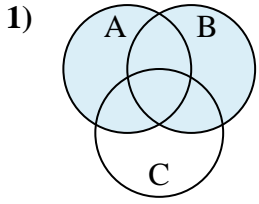




Determine the shaded region of each diagram.

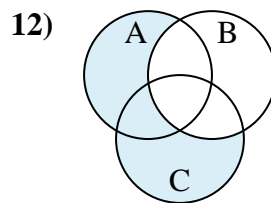
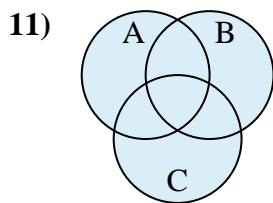
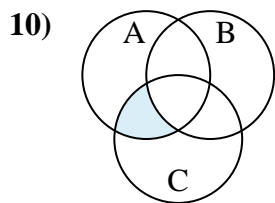
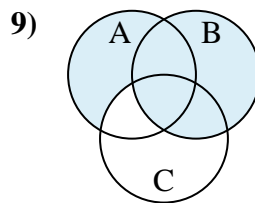
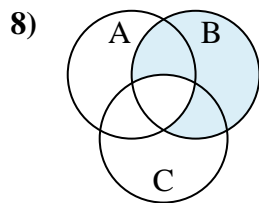
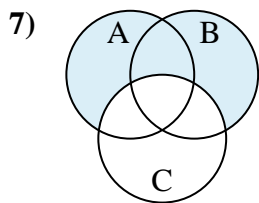
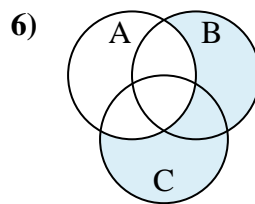
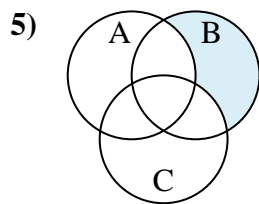
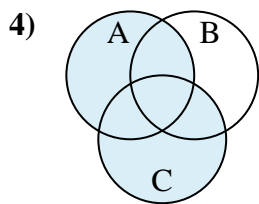
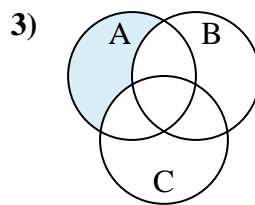
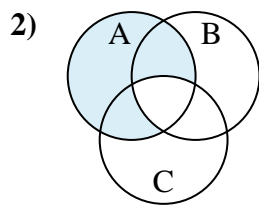
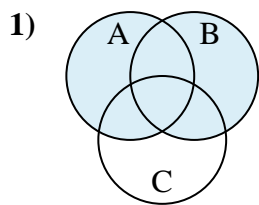
Answers



1. _____
2. _____
3. _____
4. _____
5. _____
6. _____
7. _____
8. _____
9. _____
10. _____
11. _____
12. _____



Determine the shaded region of each diagram.



Answers

1. $B \cup A$
2. $A - (B \cap C)$
3. $A - (C \cup B)$
4. $C \cup A$
5. $B - (C \cup A)$
6. $(C \cup B) - A$
7. $(B \cup A) - C$
8. $B - (C \cap A)$
9. $B \cup (A - C)$
10. $A \cap (C - B)$
11. $B \cup A \cup C$
12. $(A \cup C) - B$