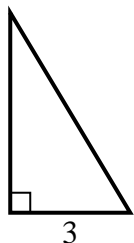


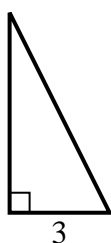


Find the value of X.

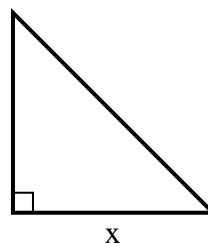
1) area =  $7.5 u^2$



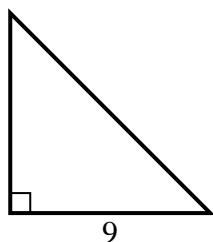
2) area =  $9 u^2$



3) area =  $32 u^2$



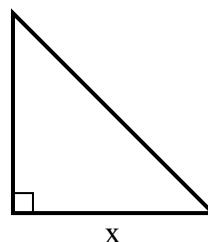
4) area =  $40.5 u^2$



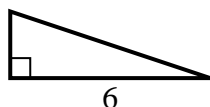
5) area =  $9 u^2$



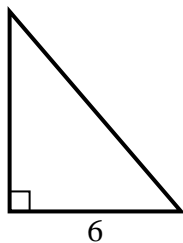
6) area =  $24.5 u^2$



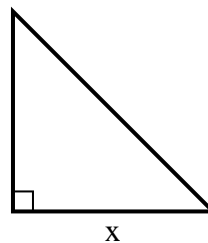
7) area =  $6 u^2$



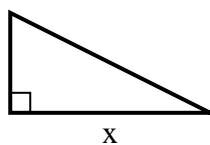
8) area =  $21 u^2$



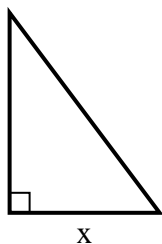
9) area =  $18 u^2$



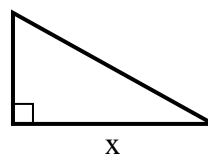
10) area =  $16 u^2$



11) area =  $6 u^2$



12) area =  $22.5 u^2$



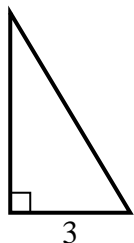
**Answers**

1. \_\_\_\_\_
2. \_\_\_\_\_
3. \_\_\_\_\_
4. \_\_\_\_\_
5. \_\_\_\_\_
6. \_\_\_\_\_
7. \_\_\_\_\_
8. \_\_\_\_\_
9. \_\_\_\_\_
10. \_\_\_\_\_
11. \_\_\_\_\_
12. \_\_\_\_\_

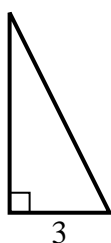


Find the value of X.

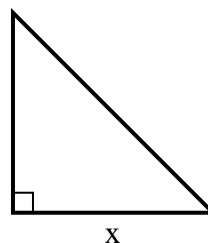
1) area =  $7.5 u^2$



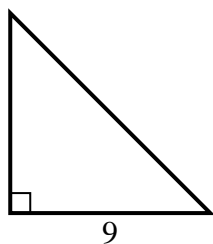
2) area =  $9 u^2$



3) area =  $32 u^2$



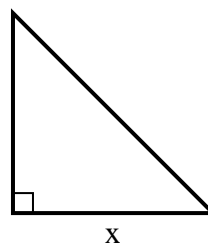
4) area =  $40.5 u^2$



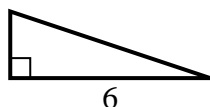
5) area =  $9 u^2$



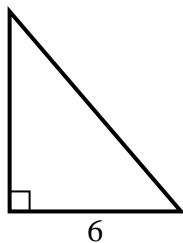
6) area =  $24.5 u^2$



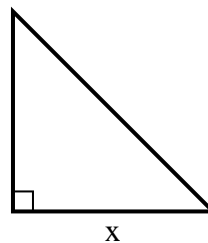
7) area =  $6 u^2$



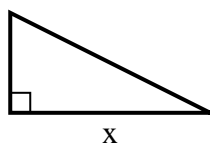
8) area =  $21 u^2$



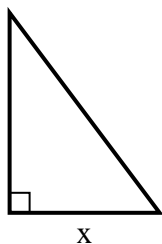
9) area =  $18 u^2$



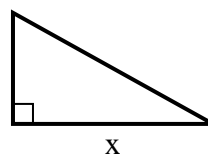
10) area =  $16 u^2$



11) area =  $6 u^2$



12) area =  $22.5 u^2$



Answers

1. 5

2. 6

3. 8

4. 9

5. 9

6. 7

7. 2

8. 7

9. 6

10. 8

11. 3

12. 9