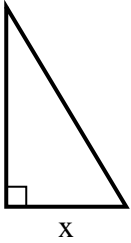


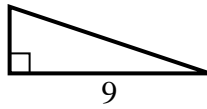


Find the value of X.

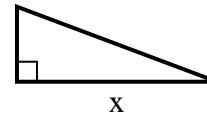
1) area =  $7.5 u^2$



2) area =  $13.5 u^2$



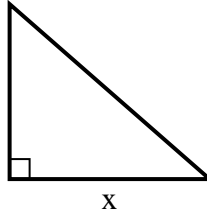
3) area =  $12 u^2$



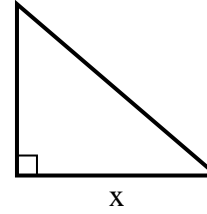
4) area =  $9 u^2$



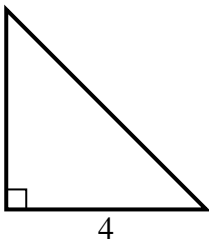
5) area =  $28 u^2$



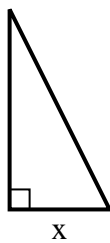
6) area =  $21 u^2$



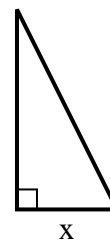
7) area =  $8 u^2$



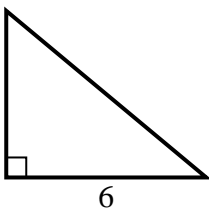
8) area =  $4 u^2$



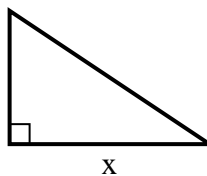
9) area =  $9 u^2$



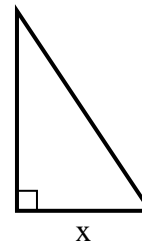
10) area =  $15 u^2$



11) area =  $12 u^2$



12) area =  $12 u^2$



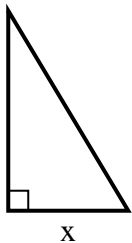
**Answers**

1. \_\_\_\_\_
2. \_\_\_\_\_
3. \_\_\_\_\_
4. \_\_\_\_\_
5. \_\_\_\_\_
6. \_\_\_\_\_
7. \_\_\_\_\_
8. \_\_\_\_\_
9. \_\_\_\_\_
10. \_\_\_\_\_
11. \_\_\_\_\_
12. \_\_\_\_\_

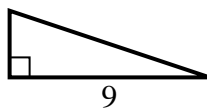


Find the value of X.

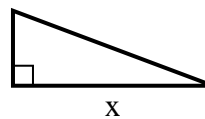
1) area =  $7.5 u^2$



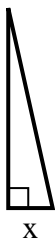
2) area =  $13.5 u^2$



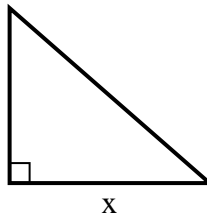
3) area =  $12 u^2$



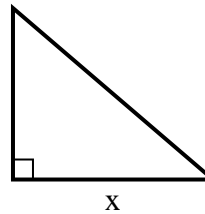
4) area =  $9 u^2$



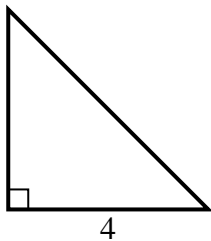
5) area =  $28 u^2$



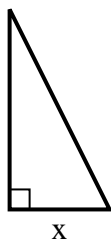
6) area =  $21 u^2$



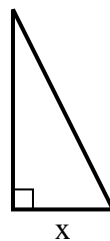
7) area =  $8 u^2$



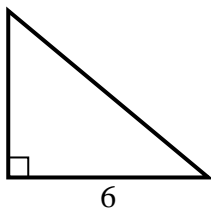
8) area =  $4 u^2$



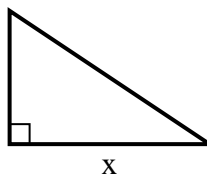
9) area =  $9 u^2$



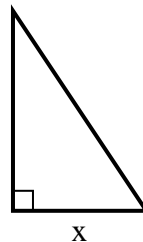
10) area =  $15 u^2$



11) area =  $12 u^2$



12) area =  $12 u^2$



Answers

1. 3

2. 3

3. 8

4. 2

5. 8

6. 7

7. 4

8. 2

9. 3

10. 5

11. 6

12. 4