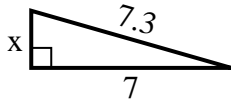


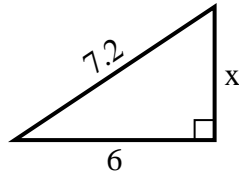


Find the value of X.

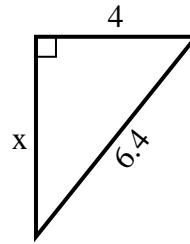
1) perimeter = 16.3 u



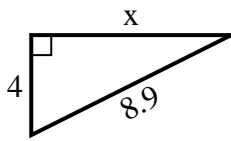
2) perimeter = 17.2 u



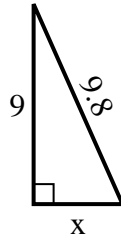
3) perimeter = 15.4 u



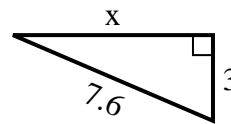
4) perimeter = 20.9 u



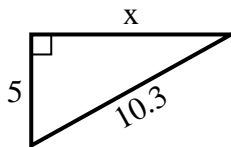
5) perimeter = 22.8 u



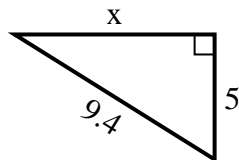
6) perimeter = 17.6 u



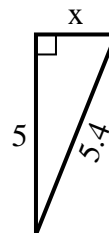
7) perimeter = 24.3 u



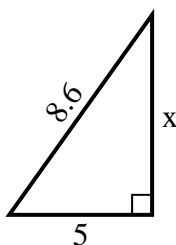
8) perimeter = 22.4 u



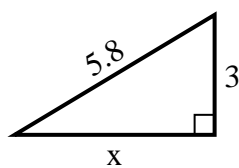
9) perimeter = 12.4 u



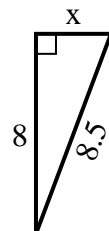
10) perimeter = 20.6 u



11) perimeter = 13.8 u



12) perimeter = 19.5 u



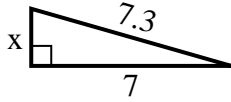
**Answers**

1. \_\_\_\_\_
2. \_\_\_\_\_
3. \_\_\_\_\_
4. \_\_\_\_\_
5. \_\_\_\_\_
6. \_\_\_\_\_
7. \_\_\_\_\_
8. \_\_\_\_\_
9. \_\_\_\_\_
10. \_\_\_\_\_
11. \_\_\_\_\_
12. \_\_\_\_\_

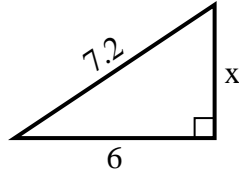


Find the value of X.

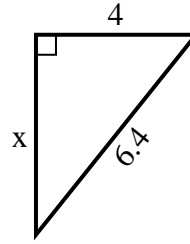
1) perimeter = 16.3 u



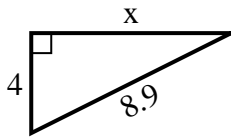
2) perimeter = 17.2 u



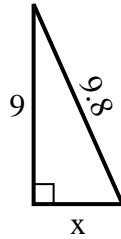
3) perimeter = 15.4 u



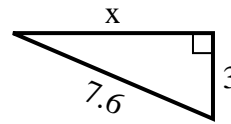
4) perimeter = 20.9 u



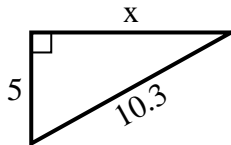
5) perimeter = 22.8 u



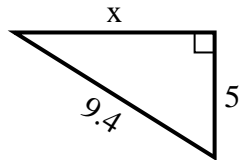
6) perimeter = 17.6 u



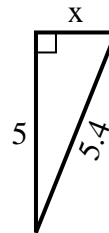
7) perimeter = 24.3 u



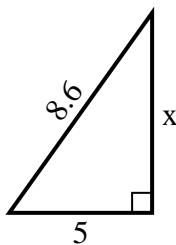
8) perimeter = 22.4 u



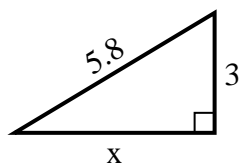
9) perimeter = 12.4 u



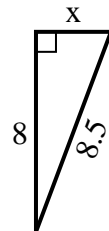
10) perimeter = 20.6 u



11) perimeter = 13.8 u



12) perimeter = 19.5 u



Answers

1. 2

2. 4

3. 5

4. 8

5. 4

6. 7

7. 9

8. 8

9. 2

10. 7

11. 5

12. 3