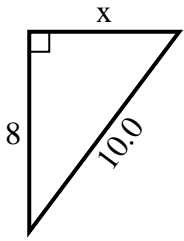


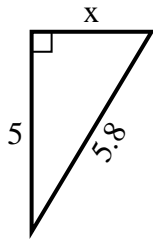


Find the value of X.

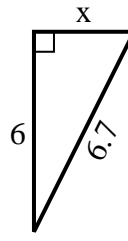
1) perimeter = 24 u



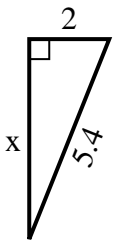
2) perimeter = 13.8 u



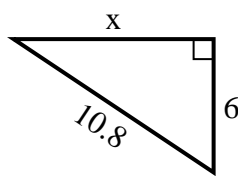
3) perimeter = 15.7 u



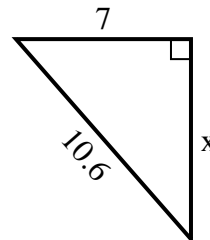
4) perimeter = 12.4 u



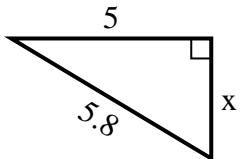
5) perimeter = 25.8 u



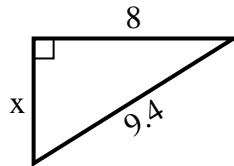
6) perimeter = 25.6 u



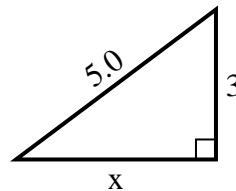
7) perimeter = 13.8 u



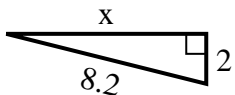
8) perimeter = 22.4 u



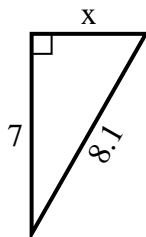
9) perimeter = 12 u



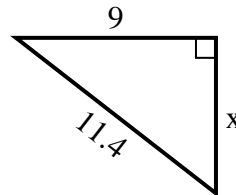
10) perimeter = 18.2 u



11) perimeter = 19.1 u



12) perimeter = 27.4 u



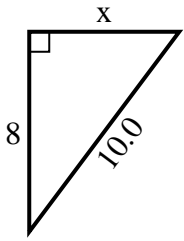
Answers

1. _____
2. _____
3. _____
4. _____
5. _____
6. _____
7. _____
8. _____
9. _____
10. _____
11. _____
12. _____

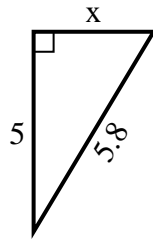


Find the value of X.

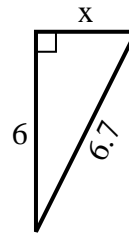
1) perimeter = 24 u



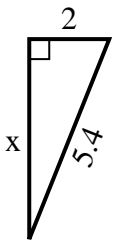
2) perimeter = 13.8 u



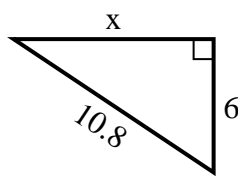
3) perimeter = 15.7 u



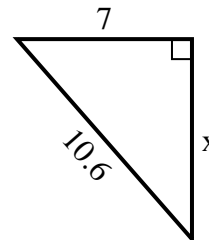
4) perimeter = 12.4 u



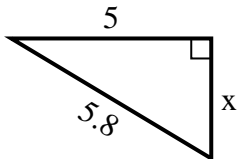
5) perimeter = 25.8 u



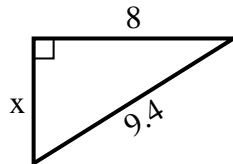
6) perimeter = 25.6 u



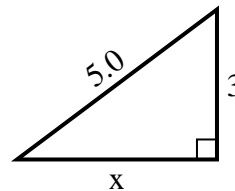
7) perimeter = 13.8 u



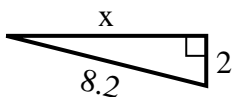
8) perimeter = 22.4 u



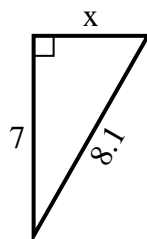
9) perimeter = 12 u



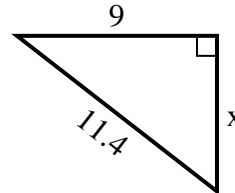
10) perimeter = 18.2 u



11) perimeter = 19.1 u



12) perimeter = 27.4 u



Answers

1. 6

2. 3

3. 3

4. 5

5. 9

6. 8

7. 3

8. 5

9. 4

10. 8

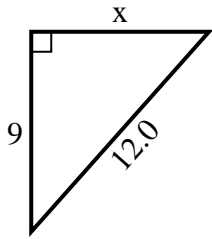
11. 4

12. 7

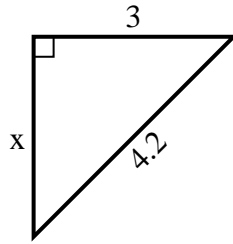


Find the value of X.

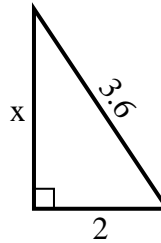
1) perimeter = 29 u



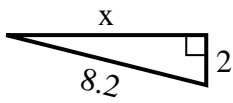
2) perimeter = 10.2 u



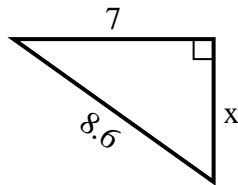
3) perimeter = 8.6 u



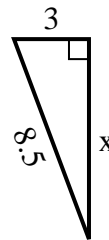
4) perimeter = 18.2 u



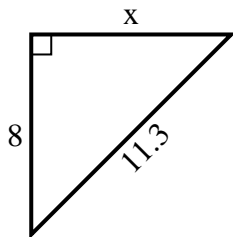
5) perimeter = 20.6 u



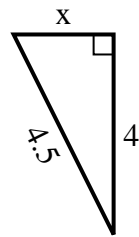
6) perimeter = 19.5 u



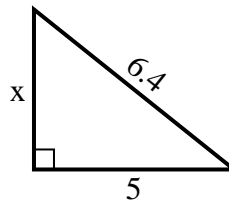
7) perimeter = 27.3 u



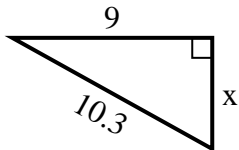
8) perimeter = 10.5 u



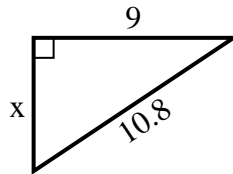
9) perimeter = 15.4 u



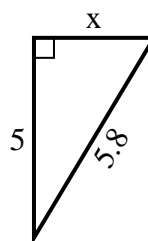
10) perimeter = 24.3 u



11) perimeter = 25.8 u



12) perimeter = 13.8 u



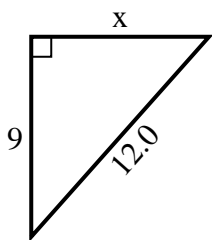
Answers

1. _____
2. _____
3. _____
4. _____
5. _____
6. _____
7. _____
8. _____
9. _____
10. _____
11. _____
12. _____

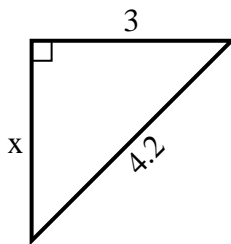


Find the value of X.

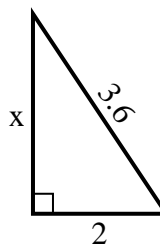
1) perimeter = 29 u



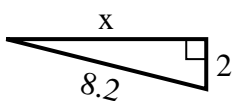
2) perimeter = 10.2 u



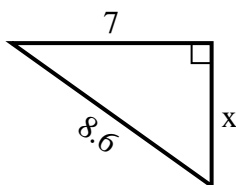
3) perimeter = 8.6 u



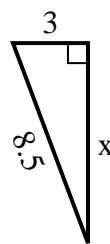
4) perimeter = 18.2 u



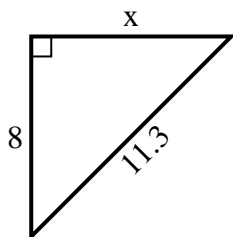
5) perimeter = 20.6 u



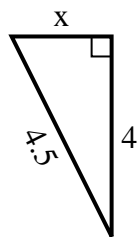
6) perimeter = 19.5 u



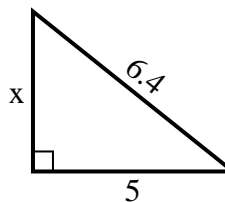
7) perimeter = 27.3 u



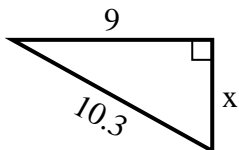
8) perimeter = 10.5 u



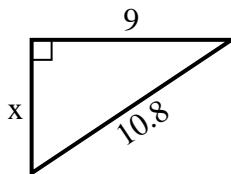
9) perimeter = 15.4 u



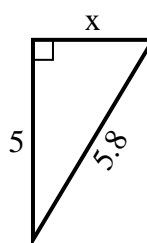
10) perimeter = 24.3 u



11) perimeter = 25.8 u



12) perimeter = 13.8 u



Answers

1. 8

2. 3

3. 3

4. 8

5. 5

6. 8

7. 8

8. 2

9. 4

10. 5

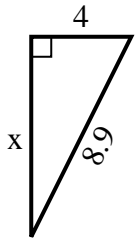
11. 6

12. 3

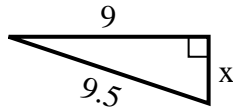


Find the value of X.

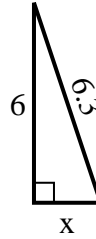
1) perimeter = 20.9 u



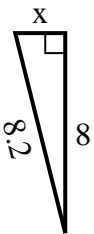
2) perimeter = 21.5 u



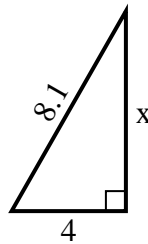
3) perimeter = 14.3 u



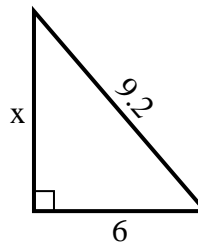
4) perimeter = 18.2 u



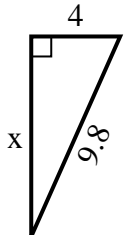
5) perimeter = 19.1 u



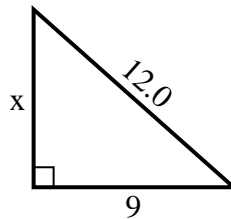
6) perimeter = 22.2 u



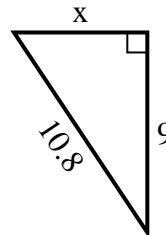
7) perimeter = 22.8 u



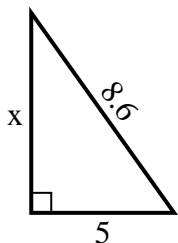
8) perimeter = 29 u



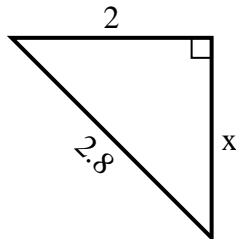
9) perimeter = 25.8 u



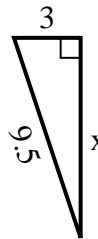
10) perimeter = 20.6 u



11) perimeter = 6.8 u



12) perimeter = 21.5 u



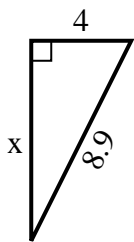
Answers

1. _____
2. _____
3. _____
4. _____
5. _____
6. _____
7. _____
8. _____
9. _____
10. _____
11. _____
12. _____

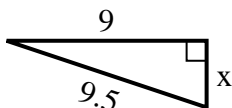


Find the value of X.

1) perimeter = 20.9 u



2) perimeter = 21.5 u



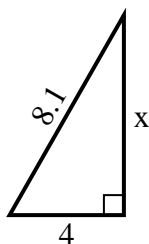
3) perimeter = 14.3 u



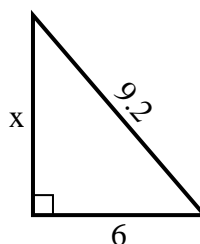
4) perimeter = 18.2 u



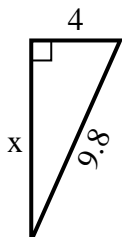
5) perimeter = 19.1 u



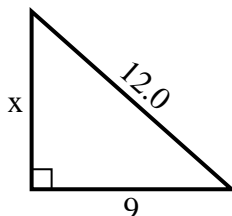
6) perimeter = 22.2 u



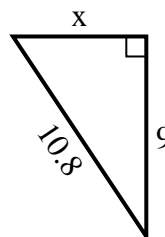
7) perimeter = 22.8 u



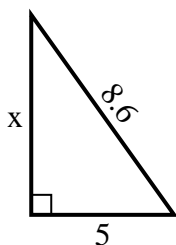
8) perimeter = 29 u



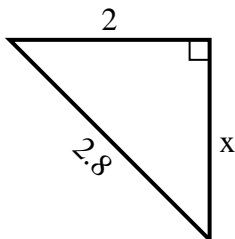
9) perimeter = 25.8 u



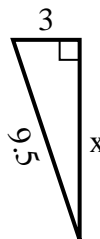
10) perimeter = 20.6 u



11) perimeter = 6.8 u



12) perimeter = 21.5 u



Answers

1. 8

2. 3

3. 2

4. 2

5. 7

6. 7

7. 9

8. 8

9. 6

10. 7

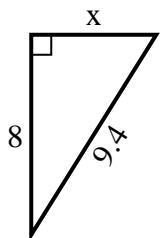
11. 2

12. 9

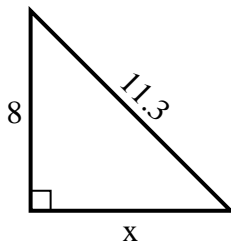


Find the value of X.

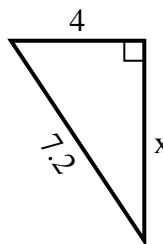
1) perimeter = 22.4 u



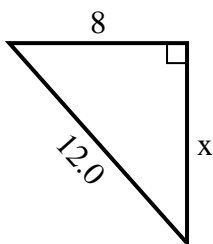
2) perimeter = 27.3 u



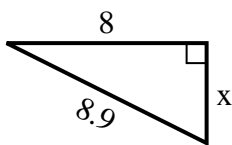
3) perimeter = 17.2 u



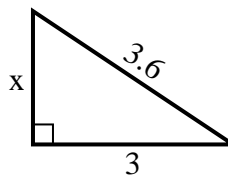
4) perimeter = 29 u



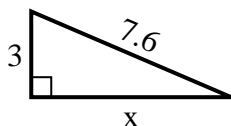
5) perimeter = 20.9 u



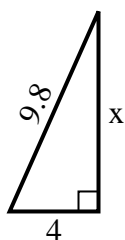
6) perimeter = 8.6 u



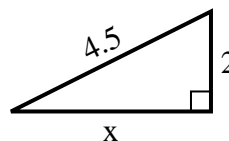
7) perimeter = 17.6 u



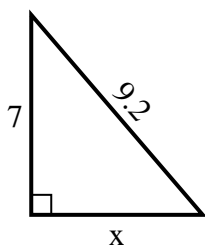
8) perimeter = 22.8 u



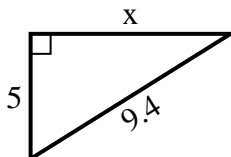
9) perimeter = 10.5 u



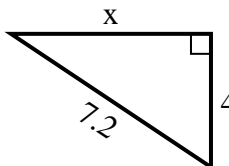
10) perimeter = 22.2 u



11) perimeter = 22.4 u



12) perimeter = 17.2 u



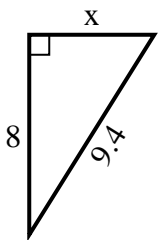
Answers

1. _____
2. _____
3. _____
4. _____
5. _____
6. _____
7. _____
8. _____
9. _____
10. _____
11. _____
12. _____

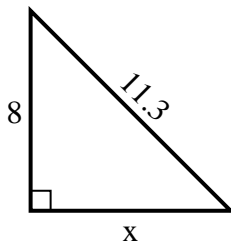


Find the value of X.

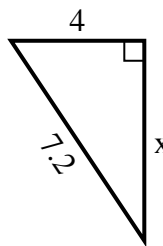
1) perimeter = 22.4 u



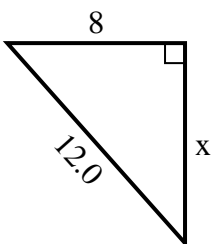
2) perimeter = 27.3 u



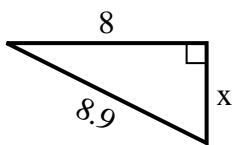
3) perimeter = 17.2 u



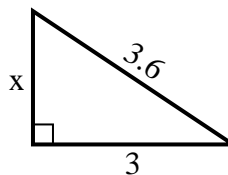
4) perimeter = 29 u



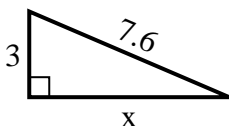
5) perimeter = 20.9 u



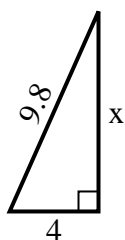
6) perimeter = 8.6 u



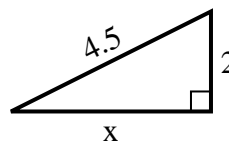
7) perimeter = 17.6 u



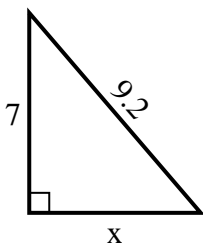
8) perimeter = 22.8 u



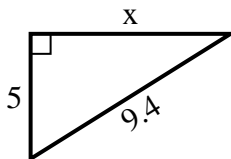
9) perimeter = 10.5 u



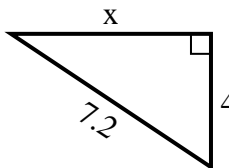
10) perimeter = 22.2 u



11) perimeter = 22.4 u



12) perimeter = 17.2 u



Answers

1. 5

2. 8

3. 6

4. 9

5. 4

6. 2

7. 7

8. 9

9. 4

10. 6

11. 8

12. 6

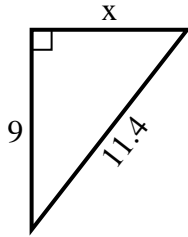


Find the value of X.

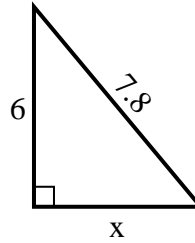
1) perimeter = 20.2 u



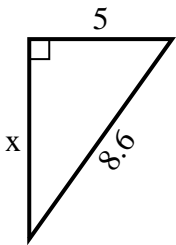
2) perimeter = 27.4 u



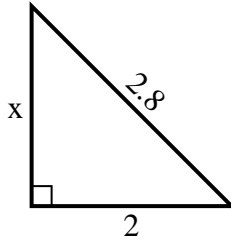
3) perimeter = 18.8 u



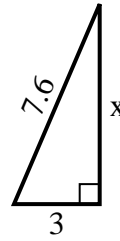
4) perimeter = 20.6 u



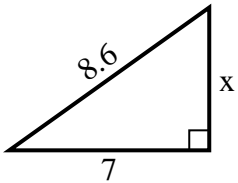
5) perimeter = 6.8 u



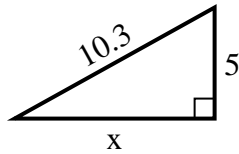
6) perimeter = 17.6 u



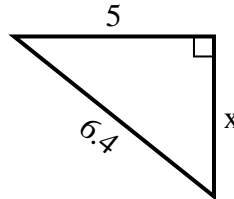
7) perimeter = 20.6 u



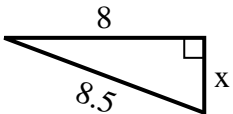
8) perimeter = 24.3 u



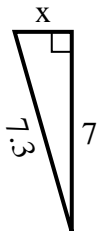
9) perimeter = 15.4 u



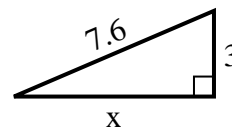
10) perimeter = 19.5 u



11) perimeter = 16.3 u



12) perimeter = 17.6 u



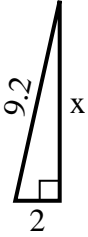
Answers

1. _____
2. _____
3. _____
4. _____
5. _____
6. _____
7. _____
8. _____
9. _____
10. _____
11. _____
12. _____

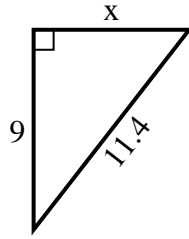


Find the value of X.

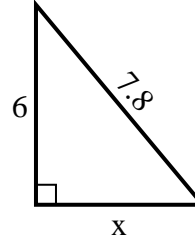
1) perimeter = 20.2 u



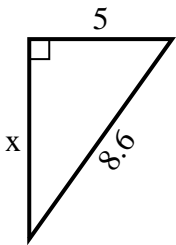
2) perimeter = 27.4 u



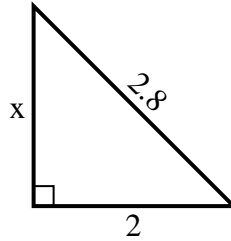
3) perimeter = 18.8 u



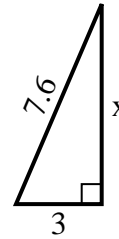
4) perimeter = 20.6 u



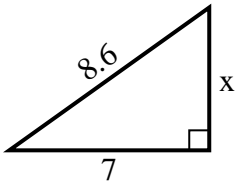
5) perimeter = 6.8 u



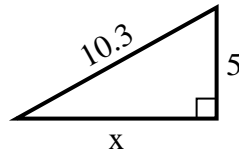
6) perimeter = 17.6 u



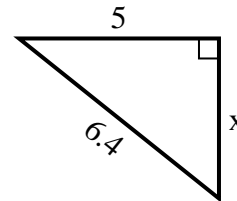
7) perimeter = 20.6 u



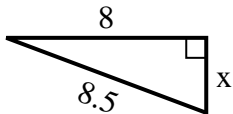
8) perimeter = 24.3 u



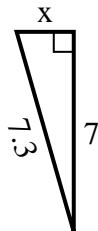
9) perimeter = 15.4 u



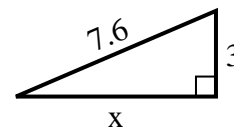
10) perimeter = 19.5 u



11) perimeter = 16.3 u



12) perimeter = 17.6 u



Answers

1. 9

2. 7

3. 5

4. 7

5. 2

6. 7

7. 5

8. 9

9. 4

10. 3

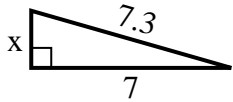
11. 2

12. 7

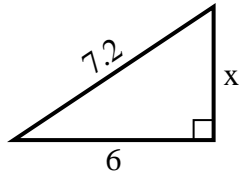


Find the value of X.

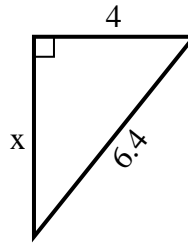
1) perimeter = 16.3 u



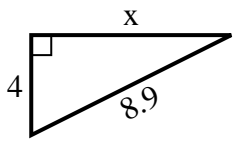
2) perimeter = 17.2 u



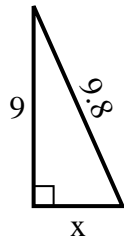
3) perimeter = 15.4 u



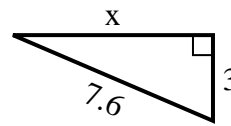
4) perimeter = 20.9 u



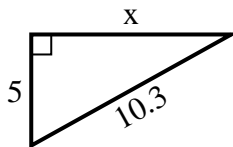
5) perimeter = 22.8 u



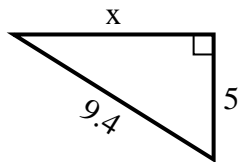
6) perimeter = 17.6 u



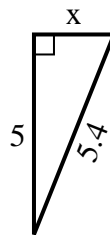
7) perimeter = 24.3 u



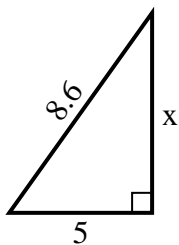
8) perimeter = 22.4 u



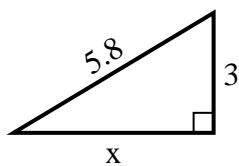
9) perimeter = 12.4 u



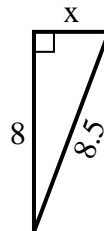
10) perimeter = 20.6 u



11) perimeter = 13.8 u



12) perimeter = 19.5 u



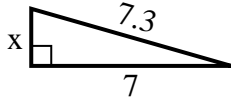
Answers

1. _____
2. _____
3. _____
4. _____
5. _____
6. _____
7. _____
8. _____
9. _____
10. _____
11. _____
12. _____

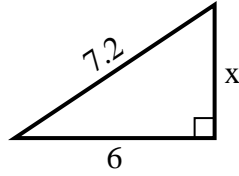


Find the value of X.

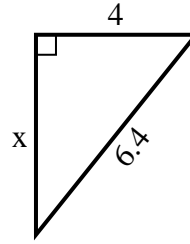
1) perimeter = 16.3 u



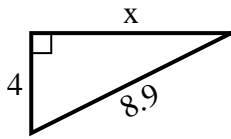
2) perimeter = 17.2 u



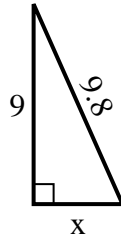
3) perimeter = 15.4 u



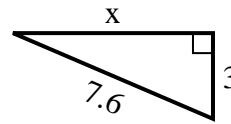
4) perimeter = 20.9 u



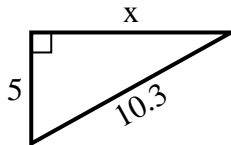
5) perimeter = 22.8 u



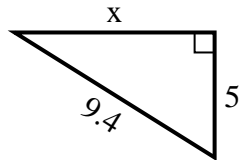
6) perimeter = 17.6 u



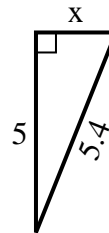
7) perimeter = 24.3 u



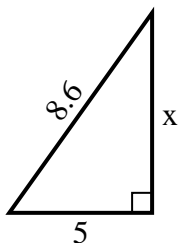
8) perimeter = 22.4 u



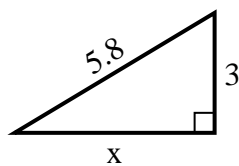
9) perimeter = 12.4 u



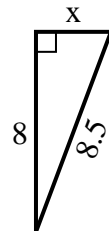
10) perimeter = 20.6 u



11) perimeter = 13.8 u



12) perimeter = 19.5 u



Answers

1. 2

2. 4

3. 5

4. 8

5. 4

6. 7

7. 9

8. 8

9. 2

10. 7

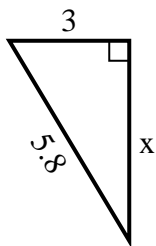
11. 5

12. 3

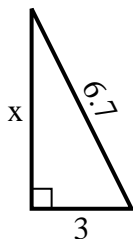


Find the value of X.

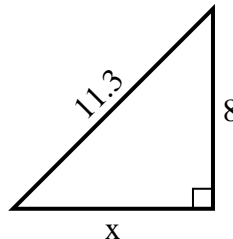
1) perimeter = 13.8 u



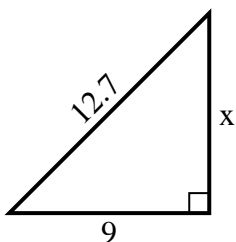
2) perimeter = 15.7 u



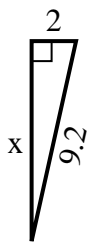
3) perimeter = 27.3 u



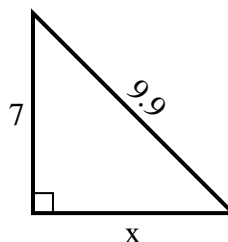
4) perimeter = 30.7 u



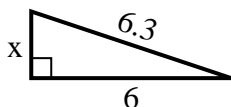
5) perimeter = 20.2 u



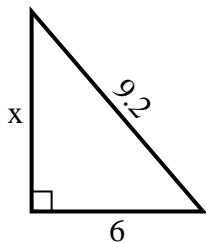
6) perimeter = 23.9 u



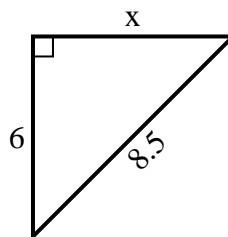
7) perimeter = 14.3 u



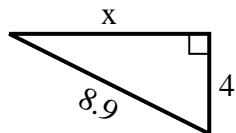
8) perimeter = 22.2 u



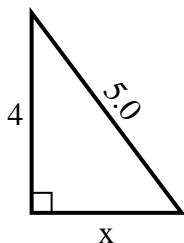
9) perimeter = 20.5 u



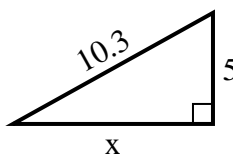
10) perimeter = 20.9 u



11) perimeter = 12 u



12) perimeter = 24.3 u



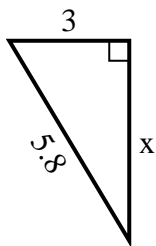
Answers

1. _____
2. _____
3. _____
4. _____
5. _____
6. _____
7. _____
8. _____
9. _____
10. _____
11. _____
12. _____

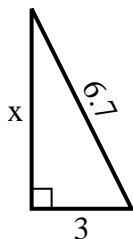


Find the value of X.

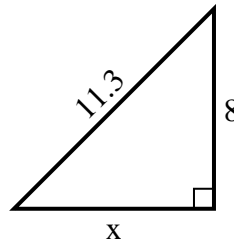
1) perimeter = 13.8 u



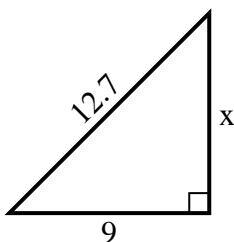
2) perimeter = 15.7 u



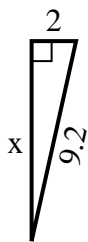
3) perimeter = 27.3 u



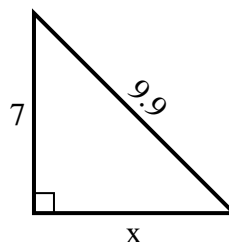
4) perimeter = 30.7 u



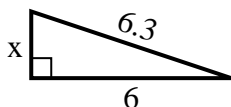
5) perimeter = 20.2 u



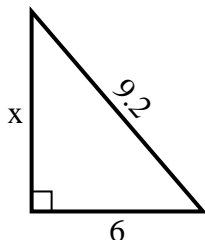
6) perimeter = 23.9 u



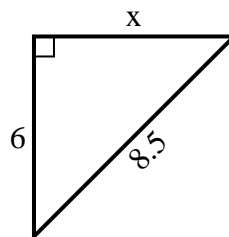
7) perimeter = 14.3 u



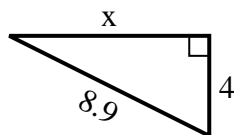
8) perimeter = 22.2 u



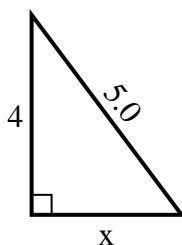
9) perimeter = 20.5 u



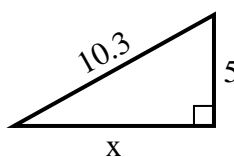
10) perimeter = 20.9 u



11) perimeter = 12 u



12) perimeter = 24.3 u



Answers

1. 5

2. 6

3. 8

4. 9

5. 9

6. 7

7. 2

8. 7

9. 6

10. 8

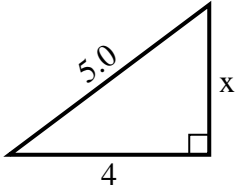
11. 3

12. 9

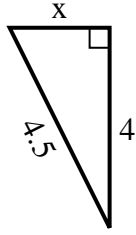


Find the value of X.

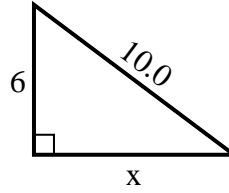
1) perimeter = 12 u



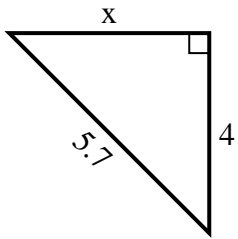
2) perimeter = 10.5 u



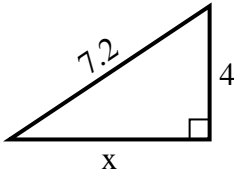
3) perimeter = 24 u



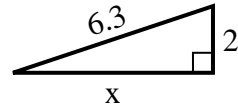
4) perimeter = 13.7 u



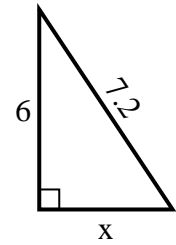
5) perimeter = 17.2 u



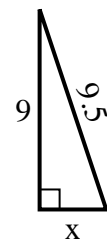
6) perimeter = 14.3 u



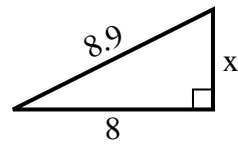
7) perimeter = 17.2 u



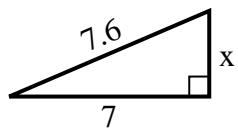
8) perimeter = 21.5 u



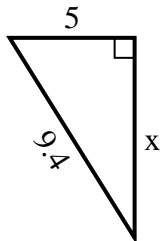
9) perimeter = 20.9 u



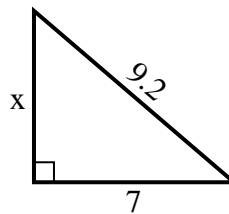
10) perimeter = 17.6 u



11) perimeter = 22.4 u



12) perimeter = 22.2 u



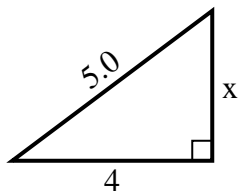
Answers

1. _____
2. _____
3. _____
4. _____
5. _____
6. _____
7. _____
8. _____
9. _____
10. _____
11. _____
12. _____

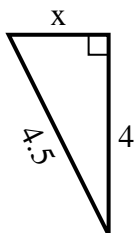


Find the value of X.

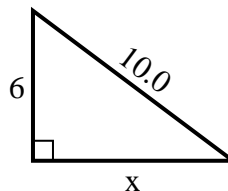
1) perimeter = 12 u



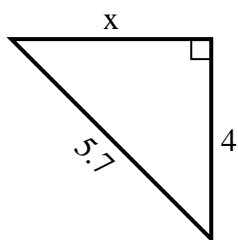
2) perimeter = 10.5 u



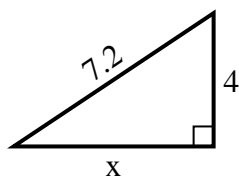
3) perimeter = 24 u



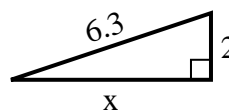
4) perimeter = 13.7 u



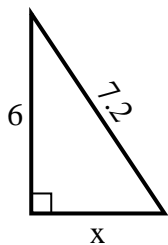
5) perimeter = 17.2 u



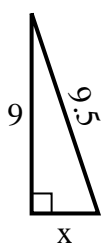
6) perimeter = 14.3 u



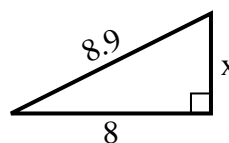
7) perimeter = 17.2 u



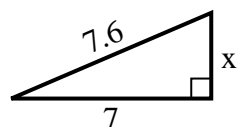
8) perimeter = 21.5 u



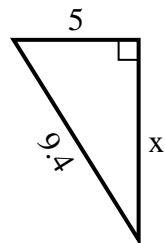
9) perimeter = 20.9 u



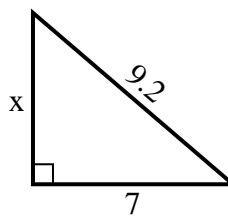
10) perimeter = 17.6 u



11) perimeter = 22.4 u



12) perimeter = 22.2 u



Answers

1. 3

2. 2

3. 8

4. 4

5. 6

6. 6

7. 4

8. 3

9. 4

10. 3

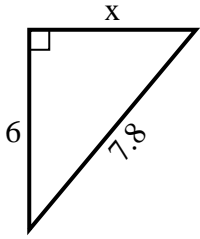
11. 8

12. 6

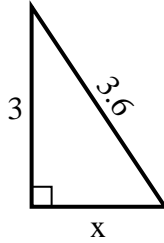


Find the value of X.

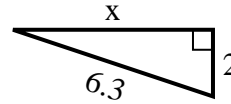
1) perimeter = 18.8 u



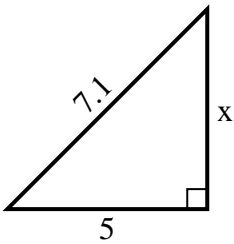
2) perimeter = 8.6 u



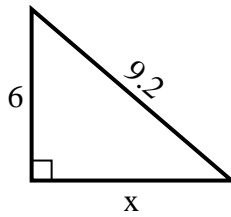
3) perimeter = 14.3 u



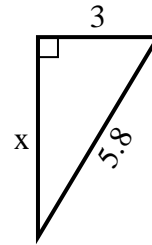
4) perimeter = 17.1 u



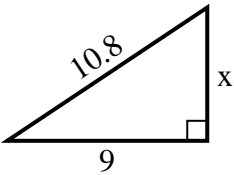
5) perimeter = 22.2 u



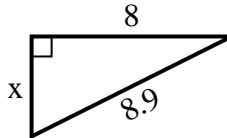
6) perimeter = 13.8 u



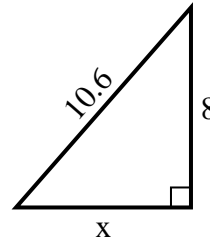
7) perimeter = 25.8 u



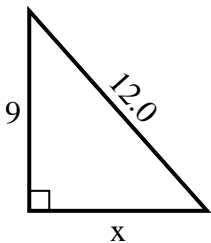
8) perimeter = 20.9 u



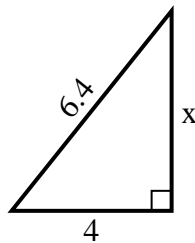
9) perimeter = 25.6 u



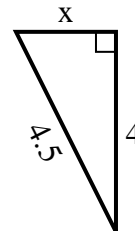
10) perimeter = 29 u



11) perimeter = 15.4 u



12) perimeter = 10.5 u



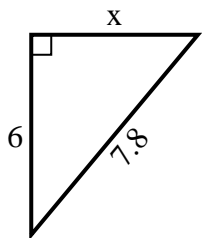
Answers

1. _____
2. _____
3. _____
4. _____
5. _____
6. _____
7. _____
8. _____
9. _____
10. _____
11. _____
12. _____

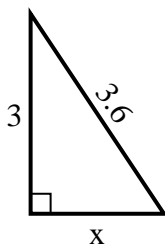


Find the value of X.

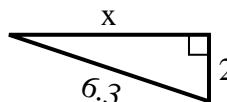
1) perimeter = 18.8 u



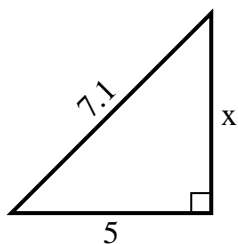
2) perimeter = 8.6 u



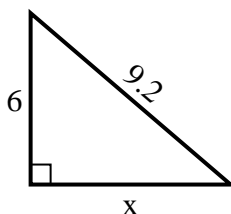
3) perimeter = 14.3 u



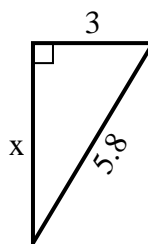
4) perimeter = 17.1 u



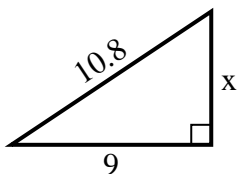
5) perimeter = 22.2 u



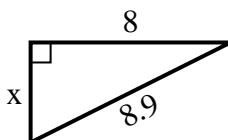
6) perimeter = 13.8 u



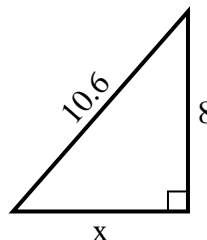
7) perimeter = 25.8 u



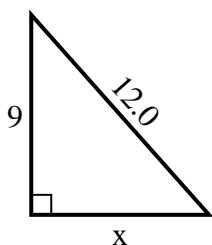
8) perimeter = 20.9 u



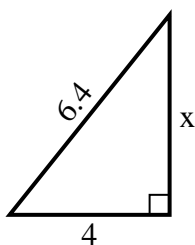
9) perimeter = 25.6 u



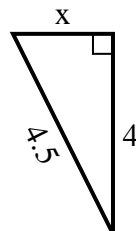
10) perimeter = 29 u



11) perimeter = 15.4 u



12) perimeter = 10.5 u



Answers

1. 5

2. 2

3. 6

4. 5

5. 7

6. 5

7. 6

8. 4

9. 7

10. 8

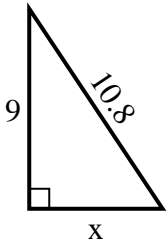
11. 5

12. 2

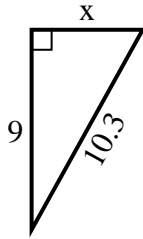


Find the value of X.

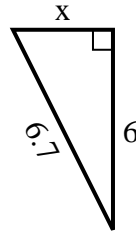
1) perimeter = 25.8 u



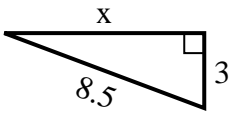
2) perimeter = 24.3 u



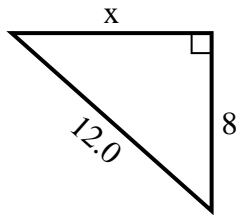
3) perimeter = 15.7 u



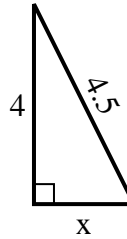
4) perimeter = 19.5 u



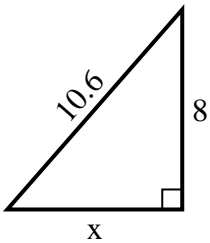
5) perimeter = 29 u



6) perimeter = 10.5 u



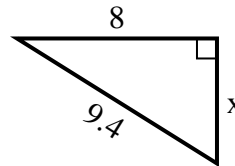
7) perimeter = 25.6 u



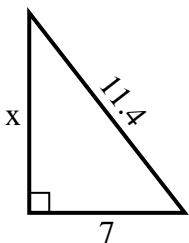
8) perimeter = 14.3 u



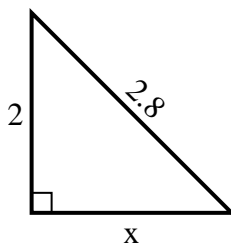
9) perimeter = 22.4 u



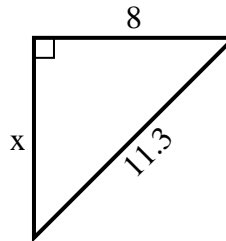
10) perimeter = 27.4 u



11) perimeter = 6.8 u



12) perimeter = 27.3 u



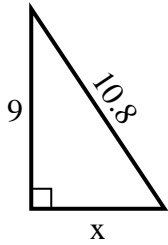
Answers

1. _____
2. _____
3. _____
4. _____
5. _____
6. _____
7. _____
8. _____
9. _____
10. _____
11. _____
12. _____

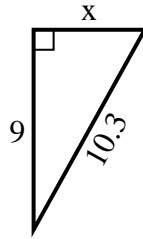


Find the value of X.

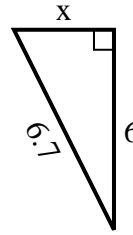
1) perimeter = 25.8 u



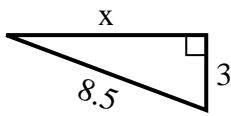
2) perimeter = 24.3 u



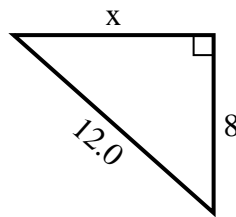
3) perimeter = 15.7 u



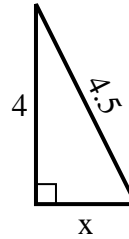
4) perimeter = 19.5 u



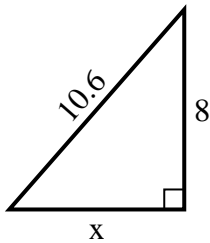
5) perimeter = 29 u



6) perimeter = 10.5 u



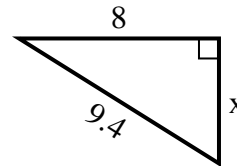
7) perimeter = 25.6 u



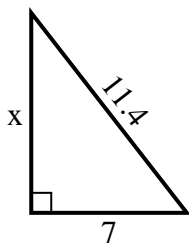
8) perimeter = 14.3 u



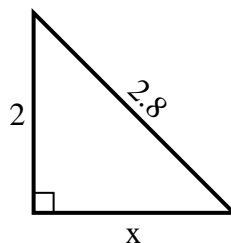
9) perimeter = 22.4 u



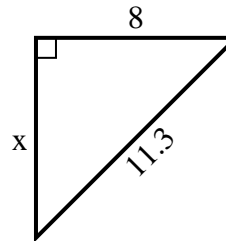
10) perimeter = 27.4 u



11) perimeter = 6.8 u



12) perimeter = 27.3 u



Answers

1. 6

2. 5

3. 3

4. 8

5. 9

6. 2

7. 7

8. 2

9. 5

10. 9

11. 2

12. 8