



Solve each problem using a tape diagram.

Answers

Ex) Sarah was trying to determine the weight of a small rock. She determined the small rock was $\frac{3}{9}$ as heavy as a medium rock. The medium rock was $\frac{9}{10}$ as heavy as a large rock. The large rock weighed 120 grams. How heavy was the small rock?

Ex. 36

1. _____

2. _____

3. _____

4. _____

1) A chef was ordering vegetables for his restaurant. He order \$432 worth of potatoes. He also spent $\frac{2}{9}$ as much on tomatoes. Finally he spent $\frac{1}{2}$ as much on green beans as he did on tomatoes. How much did he spend on green beans?

2) Two years ago the fair had $\frac{1}{2}$ as many people as 1 year ago. 1 year ago the fair had $\frac{2}{7}$ as many people as this year. This year the fair had 154 people. How many people did the fair have 2 years ago?

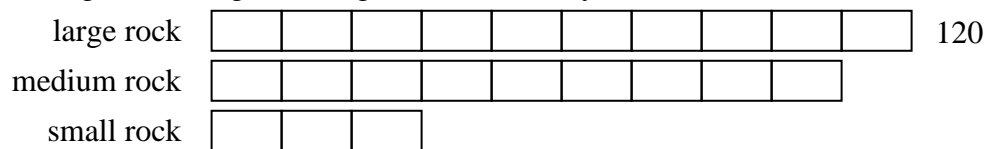
3) At the school fundraiser Adam earned \$215. Bianca earned $\frac{2}{5}$ as much as Adam. And Cathy earned $\frac{1}{2}$ as much as Bianca. How much did Cathy earn?

4) Maria was looking at her Nintendo collection. She had 784 wiiU games. She had $\frac{4}{8}$ as many DS games and $\frac{1}{4}$ as many 3ds games as DS games. How many 3ds games does she have?




Solve each problem using a tape diagram.

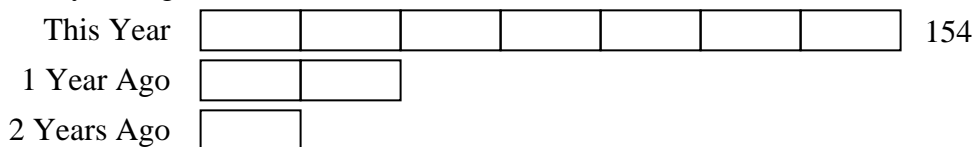
Ex) Sarah was trying to determine the weight of a small rock. She determined the small rock was $\frac{3}{9}$ as heavy as a medium rock. The medium rock was $\frac{9}{10}$ as heavy as a large rock. The large rock weighed 120 grams. How heavy was the small rock?



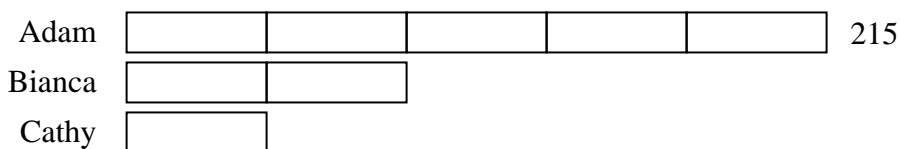
1) A chef was ordering vegetables for his restaurant. He order \$432 worth of potatoes. He also spent $\frac{2}{9}$ as much on tomatoes. Finally he spent $\frac{1}{2}$ as much on green beans as he did on tomatoes. How much did he spend on green beans?



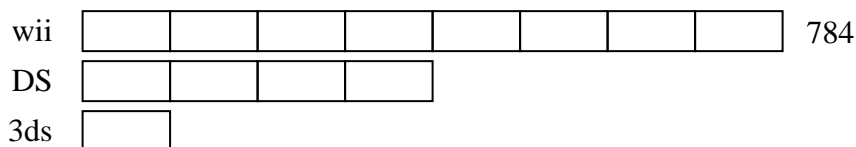
2) Two years ago the fair had $\frac{1}{2}$ as many people as 1 year ago. 1 year ago the fair had $\frac{2}{7}$ as many people as this year. This year the fair had 154 people. How many people did the fair have 2 years ago?



3) At the school fundraiser Adam earned \$215. Bianca earned $\frac{2}{5}$ as much as Adam. And Cathy earned $\frac{1}{2}$ as much as Bianca. How much did Cathy earn?



4) Maria was looking at her Nintendo collection. She had 784 wiiU games. She had $\frac{4}{8}$ as many DS games and $\frac{1}{4}$ as many 3ds games as DS games. How many 3ds games does she have?



Answers

Ex. 36

1. 48

2. 22

3. 43

4. 98