



Solve each problem using a tape diagram.

Answers

- 1) Faye uploaded a video to youtube that was 13 minutes long. The next week she uploaded a video that was 9 minutes longer. Then the following week she uploaded a video that was 5 times as long as the first week. How many minutes did she upload total?
- 2) On Monday morning a store had 23 customer. In the afternoon they had 5 fewer customers than the morning. In the evening they had 3 times as many customers as the morning. How many customers did they have total?
- 3) A musician spent 30 hours practicing in January. In February he practiced for 8 hours longer than he did in January. Then in March he practiced for 2 times as long as January. How hours did he spend practicing?
- 4) In April, Larry's Lawn Care mowed 10 lawns. They mowed 5 times as many in May and 5 fewer in June. How many lawns did they mow over those three months?
- 5) Amy, Billy and Carl were working on a school project. Amy spent 28 minutes on her portion. Billy spent 8 times as long on his portion. And Carl spent 3 minutes fewer than Billy did. How many minutes total were they working?

1. _____

2. _____

3. _____

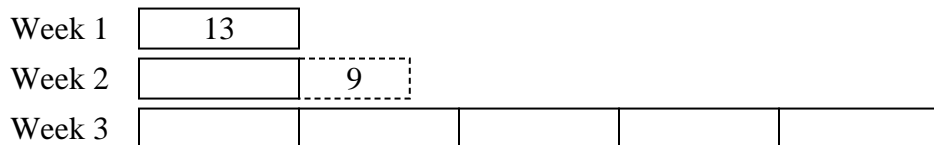
4. _____

5. _____

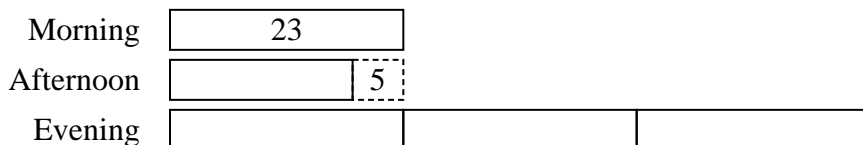


Solve each problem using a tape diagram.

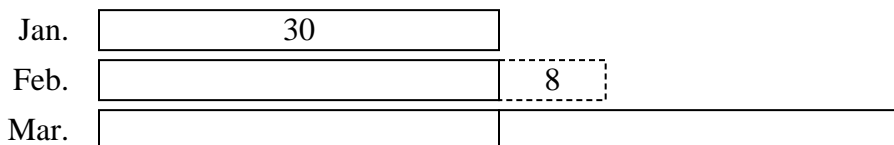
- 1) Faye uploaded a video to youtube that was 13 minutes long. The next week she uploaded a video that was 9 minutes longer. Then the following week she uploaded a video that was 5 times as long as the first week. How many minutes did she upload total?




- 2) On Monday morning a store had 23 customer. In the afternoon they had 5 fewer customers than the morning. In the evening they had 3 times as many customers as the morning. How many customers did they have total?



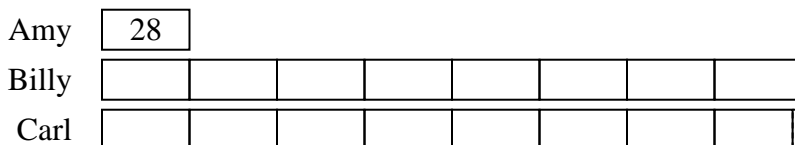
- 3) A musician spent 30 hours practicing in January. In February he practiced for 8 hours longer than he did in January. Then in March he practiced for 2 times as long as January. How hours did he spend practicing?



- 4) In April, Larry's Lawn Care mowed 10 lawns. They mowed 5 times as many in May and 5 fewer in June. How many lawns did they mow over those three months?



- 5) Amy, Billy and Carl were working on a school project. Amy spent 28 minutes on her portion. Billy spent 8 times as long on his portion. And Carl spent 3 minutes fewer than Billy did. How many minutes total were they working?



Answers

1. 100

2. 110

3. 128

4. 65

5. 473



Solve each problem using a tape diagram.

Answers

- 1) At the fair the ring toss booth took in \$20 the first hour. The second hour they took \$10 less than the first hour. And the third hour they took 5 times the amount in the first hour. How much money did the ring toss booth take in the first 3 hours.

- 2) In October a pet store sold 27 kittens. In November they sold 8 times as many kittens as in October. Then in December they sold 2 fewer kittens as in November. How many kittens did they sell across the three months?

- 3) Maria was organizing her pictures on her computer. In folder 1 she had 22 pictures. In folder 2 she had 5 more pictures than folder 1. And in folder 3 she had 3 times as many pictures as folder 1. How many pictures does she have total?

- 4) On Friday a game store sold 26 copies of the new Mario game. On Saturday they sold 2 times as many as on Friday. And then on Sunday they sold 7 less than the amount on Friday. How many did they sell total?

- 5) A musician spent 28 hours practicing in January. In February he practiced for 6 hours longer than he did in January. Then in March he practiced for 5 times as long as January. How hours did he spend practicing?

1. _____
2. _____
3. _____
4. _____
5. _____



Solve each problem using a tape diagram.

- 1) At the fair the ring toss booth took in \$20 the first hour. The second hour they took \$10 less than the first hour. And the third hour they took 5 times the amount in the first hour. How much money did the ring toss booth take in the first 3 hours.

First Hour

20

Second Hour

	10
--	----

Third Hour

--	--	--	--	--

- 2) In October a pet store sold 27 kittens. In November they sold 8 times as many kittens as in October. Then in December they sold 2 fewer kittens as in November. How many kittens did they sell across the three months?

October

27

November

--	--	--	--	--	--	--	--

December

--	--	--	--	--	--	--	--

- 3) Maria was organizing her pictures on her computer. In folder 1 she had 22 pictures. In folder 2 she had 5 more pictures than folder 1. And in folder 3 she had 3 times as many pictures as folder 1. How many pictures does she have total?

Folder 1

22

Folder 2

	5
--	---

Folder 3

--	--

- 4) On Friday a game store sold 26 copies of the new Mario game. On Saturday they sold 2 times as many as on Friday. And then on Sunday they sold 7 less than the amount on Friday. How many did they sell total?

Friday

26

Sunday

	7
--	---

Saturday

--	--

- 5) A musician spent 28 hours practicing in January. In February he practiced for 6 hours longer than he did in January. Then in March he practiced for 5 times as long as January. How hours did he spend practicing?

Jan.

28

Feb.

	6
--	---

Mar.

--	--	--	--	--

Answers

1. 130
2. 457
3. 115
4. 97
5. 202



Solve each problem using a tape diagram.

Answers

- 1) Faye's TV emporium was running a contest to see which employee could sell the most TVs. Frank sold 9 times as many TVs as Danny. Edward sold 2 fewer than Frank. And Danny sold 27 TVs. How many TVs did they sell total?

- 2) Alice, Bobby and Charles were collecting cans. Charles collected 2 times as many cans as Alice. Alice collected 14 cans. And Bobby collected 8 more cans than Alice. How many cans did they collect total?

- 3) Janet uploaded a video to youtube that was 11 minutes long. The next week she uploaded a video that was 9 minutes longer. Then the following week she uploaded a video that was 2 times as long as the first week. How many minutes did she upload total?

- 4) On Monday morning a store had 16 customer. In the afternoon they had 5 fewer customers than the morning. In the evening they had 4 times as many customers as the morning. How many customers did they have total?

- 5) In a school district the elementary school earned \$11 fundraising. The high school earned 3 times as much as the elementary school and the middle school earned \$9 less than the elementary. How much did they earn total?

1. _____

2. _____

3. _____

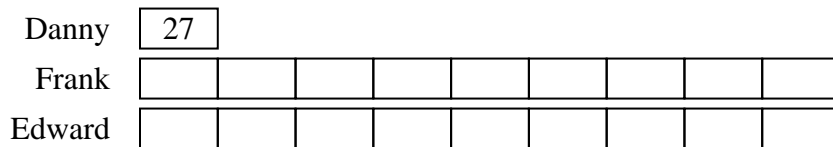
4. _____

5. _____




Solve each problem using a tape diagram.


- 1) Faye's TV emporium was running a contest to see which employee could sell the most TVs. Frank sold 9 times as many TVs as Danny. Edward sold 2 fewer than Frank. And Danny sold 27 TVs. How many TVs did they sell total?



- 2) Alice, Bobby and Charles were collecting cans. Charles collected 2 times as many cans as Alice. Alice collected 14 cans. And Bobby collected 8 more cans than Alice. How many cans did they collect total?



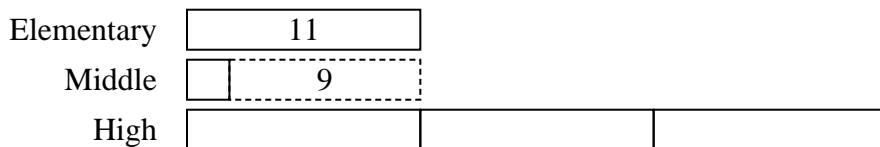
- 3) Janet uploaded a video to youtube that was 11 minutes long. The next week she uploaded a video that was 9 minutes longer. Then the following week she uploaded a video that was 2 times as long as the first week. How many minutes did she upload total?



- 4) On Monday morning a store had 16 customer. In the afternoon they had 5 fewer customers than the morning. In the evening they had 4 times as many customers as the morning. How many customers did they have total?



- 5) In a school district the elementary school earned \$11 fundraising. The high school earned 3 times as much as the elementary school and the middle school earned \$9 less than the elementary. How much did they earn total?



Answers

1. 511

2. 64

3. 53

4. 91

5. 46



Solve each problem using a tape diagram.

Answers

1) Alice, Bobby and Charles were collecting cans. Charles collected 3 times as many cans as Alice. Alice collected 17 cans. And Bobby collected 5 more cans than Alice. How many cans did they collect total?

1. _____

2. _____

3. _____

4. _____

2) In one day a restaurant used 19 knives. They used 9 more forks than they used knives. They also used 4 as many spoons as knives. How many utensils do they use in a day?

5. _____

3) The school book fair sold 20 books on Wednesday. On Friday they sold 5 fewer than Thursday. On Thursday they sold 10 times as many as on Wednesday. How many books did they sell in those three days?

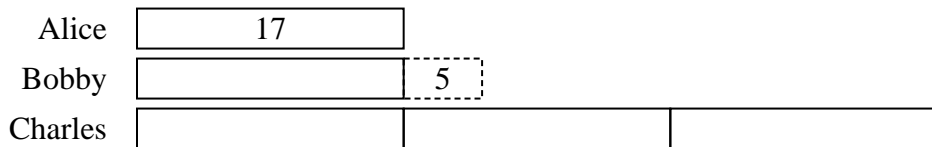
4) Debby's TV emporium was running a contest to see which employee could sell the most TVs. Frank sold 7 times as many TVs as Danny. Edward sold 5 fewer than Frank. And Danny sold 22 TVs. How many TVs did they sell total?

5) At the fair the ring toss booth took in \$22 the first hour. The second hour they took \$10 less than the first hour. And the third hour they took 3 times the amount in the first hour. How much money did the ring toss booth take in the first 3 hours.

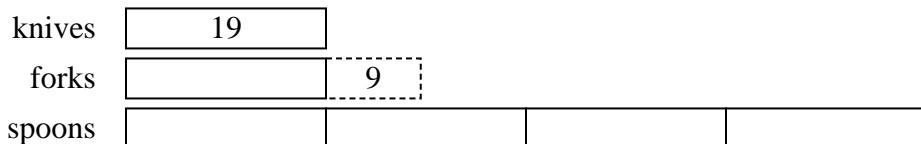


Solve each problem using a tape diagram.

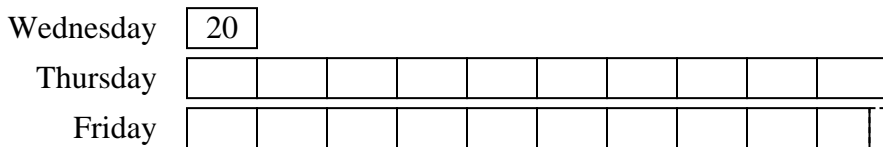
- 1) Alice, Bobby and Charles were collecting cans. Charles collected 3 times as many cans as Alice. Alice collected 17 cans. And Bobby collected 5 more cans than Alice. How many cans did they collect total?



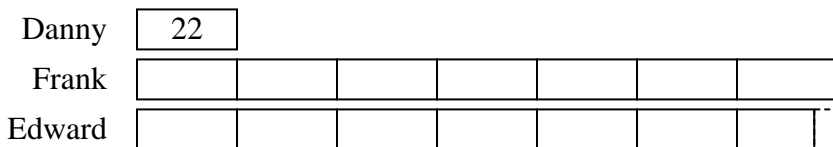
- 2) In one day a restaurant used 19 knives. They used 9 more forks than they used knives. They also used 4 as many spoons as knives. How many utensils do they use in a day?



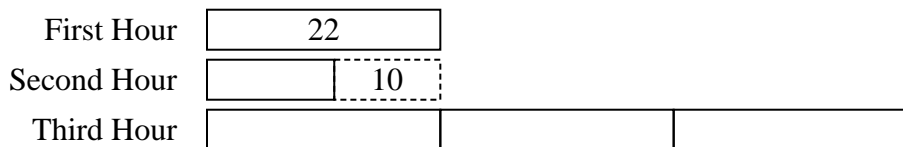
- 3) The school book fair sold 20 books on Wednesday. On Friday they sold 5 fewer than Thursday. On Thursday they sold 10 times as many as on Wednesday. How many books did they sell in those three days?



- 4) Debby's TV emporium was running a contest to see which employee could sell the most TVs. Frank sold 7 times as many TVs as Danny. Edward sold 5 fewer than Frank. And Danny sold 22 TVs. How many TVs did they sell total?



- 5) At the fair the ring toss booth took in \$22 the first hour. The second hour they took \$10 less than the first hour. And the third hour they took 3 times the amount in the first hour. How much money did the ring toss booth take in the first 3 hours.



Answers

1. 90

2. 123

3. 415

4. 325

5. 100



Solve each problem using a tape diagram.

Answers

- 1) Amy was organizing her pictures on her computer. In folder 1 she had 18 pictures. In folder 2 she had 10 more pictures than folder 1. And in folder 3 she had 4 times as many pictures as folder 1. How many pictures does she have total?

- 2) Alice, Bobby and Charles were collecting cans. Charles collected 5 times as many cans as Alice. Alice collected 15 cans. And Bobby collected 6 more cans than Alice. How many cans did they collect total?

- 3) The school book fair sold 21 books on Wednesday. On Friday they sold 3 fewer than Thursday. On Thursday they sold 8 times as many as on Wednesday. How many books did they sell in those three days?

- 4) Amy, Billy and Carl were working on a school project. Amy spent 20 minutes on her portion. Billy spent 8 times as long on his portion. And Carl spent 2 minutes fewer than Billy did. How many minutes total were they working?

- 5) On Friday a game store sold 17 copies of the new Mario game. On Saturday they sold 3 times as many as on Friday. And then on Sunday they sold 10 less than the amount on Friday. How many did they sell total?

1. _____

2. _____

3. _____

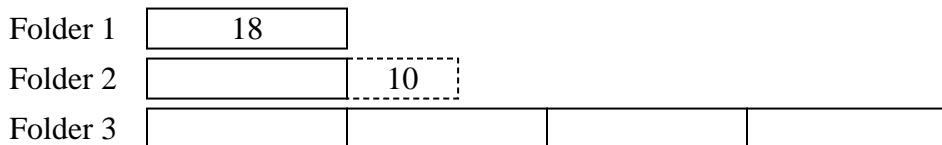
4. _____

5. _____




Solve each problem using a tape diagram.

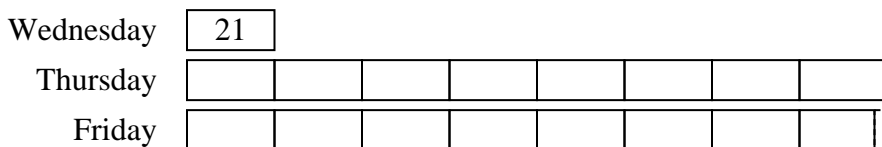
- 1) Amy was organizing her pictures on her computer. In folder 1 she had 18 pictures. In folder 2 she had 10 more pictures than folder 1. And in folder 3 she had 4 times as many pictures as folder 1. How many pictures does she have total?



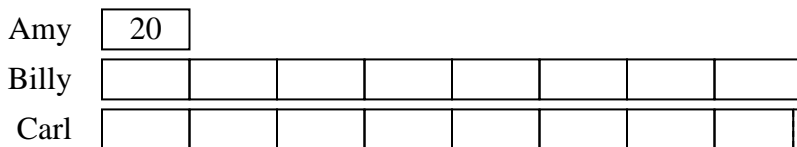
- 2) Alice, Bobby and Charles were collecting cans. Charles collected 5 times as many cans as Alice. Alice collected 15 cans. And Bobby collected 6 more cans than Alice. How many cans did they collect total?



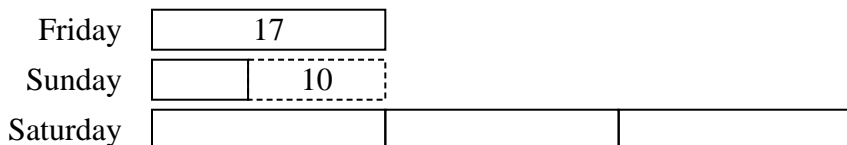
- 3) The school book fair sold 21 books on Wednesday. On Friday they sold 3 fewer than Thursday. On Thursday they sold 8 times as many as on Wednesday. How many books did they sell in those three days?



- 4) Amy, Billy and Carl were working on a school project. Amy spent 20 minutes on her portion. Billy spent 8 times as long on his portion. And Carl spent 2 minutes fewer than Billy did. How many minutes total were they working?



- 5) On Friday a game store sold 17 copies of the new Mario game. On Saturday they sold 3 times as many as on Friday. And then on Sunday they sold 10 less than the amount on Friday. How many did they sell total?



Answers

1. 118

2. 111

3. 354

4. 338

5. 75



Solve each problem using a tape diagram.

Answers

- 1) Debby created an app that she put on the app store. In the first day 15 people downloaded it. On the second day she had 5 times as many downloads. On the third day she had 5 fewer downloads than day 2. How many people downloaded the app in the first 3 days?

- 2) Olivia uploaded a video to youtube that was 14 minutes long. The next week she uploaded a video that was 6 minutes longer. Then the following week she uploaded a video that was 2 times as long as the first week. How many minutes did she upload total?

- 3) In one day a restaurant used 13 knives. They used 5 more forks than they used knives. They also used 5 as many spoons as knives. How many utensils do they use in a day?

- 4) At the fair the ring toss booth took in \$11 the first hour. The second hour they took \$5 less than the first hour. And the third hour they took 4 times the amount in the first hour. How much money did the ring toss booth take in the first 3 hours.

- 5) Adam was reading a book. He read 25 pages on Monday and 9 times as many pages on Tuesday. On Wednesday he read 5 fewer pages than the amount he read on Tuesday. How many pages did he read total?

1. _____

2. _____

3. _____

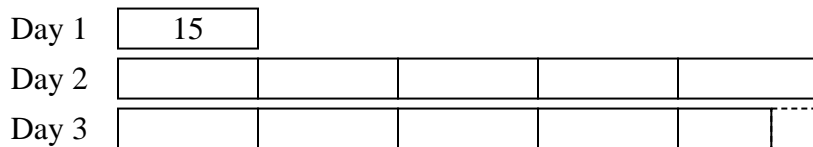
4. _____

5. _____

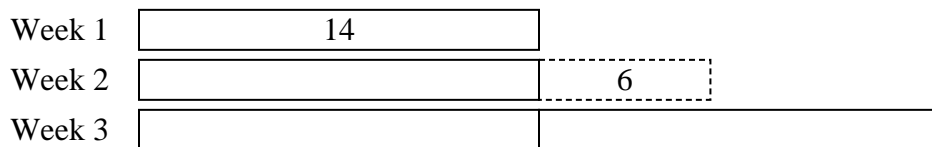


Solve each problem using a tape diagram.


- 1) Debby created an app that she put on the app store. In the first day 15 people downloaded it. On the second day she had 5 times as many downloads. On the third day she had 5 fewer downloads than day 2. How many people downloaded the app in the first 3 days?



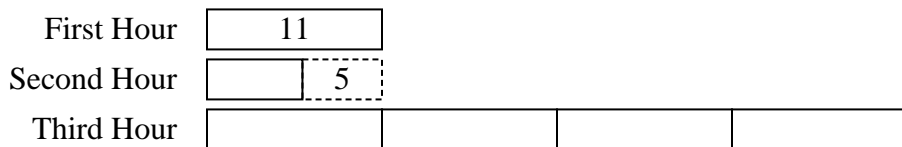
- 2) Olivia uploaded a video to youtube that was 14 minutes long. The next week she uploaded a video that was 6 minutes longer. Then the following week she uploaded a video that was 2 times as long as the first week. How many minutes did she upload total?



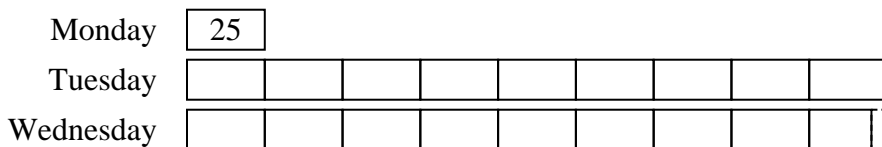
- 3) In one day a restaurant used 13 knives. They used 5 more forks than they used knives. They also used 5 as many spoons as knives. How many utensils do they use in a day?



- 4) At the fair the ring toss booth took in \$11 the first hour. The second hour they took \$5 less than the first hour. And the third hour they took 4 times the amount in the first hour. How much money did the ring toss booth take in the first 3 hours.



- 5) Adam was reading a book. He read 25 pages on Monday and 9 times as many pages on Tuesday. On Wednesday he read 5 fewer pages than the amount he read on Tuesday. How many pages did he read total?



Answers

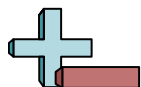
1. 160

2. 62

3. 96

4. 61

5. 470



Solve each problem using a tape diagram.

Answers

- 1) In April, Larry's Lawn Care mowed 16 lawns. They mowed 4 times as many in May and 10 fewer in June. How many lawns did they mow over those three months?
- 2) In a school district the elementary school earned \$10 fundraising. The high school earned 2 times as much as the elementary school and the middle school earned \$6 less than the elementary. How much did they earn total?
- 3) A musician spent 16 hours practicing in January. In February he practiced for 5 hours longer than he did in January. Then in March he practiced for 5 times as long as January. How hours did he spend practicing?
- 4) Kaleb was reading a book. He read 10 pages on Monday and 10 times as many pages on Tuesday. On Wednesday he read 4 fewer pages than the amount he read on Tuesday. How many pages did he read total?
- 5) While playing a video game Aaron, Bianca and Cathy counted the enemies they defeated. Aaron defeated 13. Bianca defeated 9 more than Aaron. And Cathy defeated 5 times as many as Aaron. How many enemies did they defeat total?

1. _____

2. _____

3. _____


4. _____

5. _____

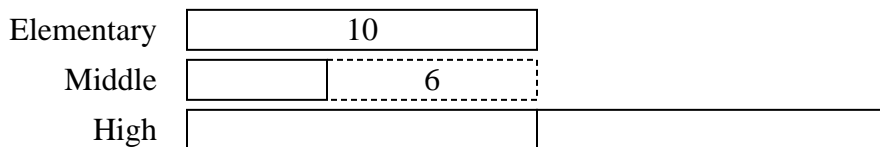


Solve each problem using a tape diagram.


- 1) In April, Larry's Lawn Care mowed 16 lawns. They mowed 4 times as many in May and 10 fewer in June. How many lawns did they mow over those three months?



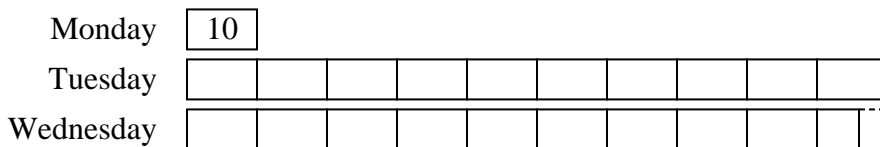
- 2) In a school district the elementary school earned \$10 fundraising. The high school earned 2 times as much as the elementary school and the middle school earned \$6 less than the elementary. How much did they earn total?



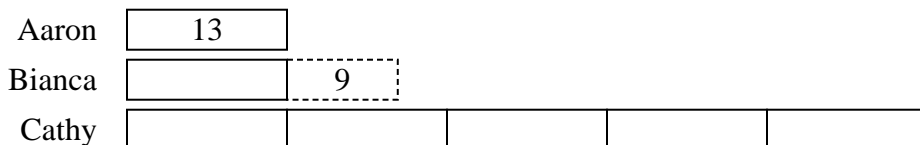
- 3) A musician spent 16 hours practicing in January. In February he practiced for 5 hours longer than he did in January. Then in March he practiced for 5 times as long as January. How hours did he spend practicing?



- 4) Kaleb was reading a book. He read 10 pages on Monday and 10 times as many pages on Tuesday. On Wednesday he read 4 fewer pages than the amount he read on Tuesday. How many pages did he read total?



- 5) While playing a video game Aaron, Bianca and Cathy counted the enemies they defeated. Aaron defeated 13. Bianca defeated 9 more than Aaron. And Cathy defeated 5 times as many as Aaron. How many enemies did they defeat total?



Answers

1. 86

2. 34

3. 117

4. 206

5. 100



Solve each problem using a tape diagram.

Answers

1) In April, Larry's Lawn Care mowed 17 lawns. They mowed 5 times as many in May and 8 fewer in June. How many lawns did they mow over those three months?

1. _____

2. _____

3. _____

4. _____

2) The school book fair sold 15 books on Wednesday. On Friday they sold 4 fewer than Thursday. On Thursday they sold 7 times as many as on Wednesday. How many books did they sell in those three days?

5. _____

3) Faye uploaded a video to youtube that was 25 minutes long. The next week she uploaded a video that was 5 minutes longer. Then the following week she uploaded a video that was 3 times as long as the first week. How many minutes did she upload total?

4) In a school district the elementary school earned \$27 fundraising. The high school earned 4 times as much as the elementary school and the middle school earned \$5 less than the elementary. How much did they earn total?

5) While playing a video game Aaron, Bianca and Cathy counted the enemies they defeated. Aaron defeated 12. Bianca defeated 7 more than Aaron. And Cathy defeated 4 times as many as Aaron. How many enemies did they defeat total?



Solve each problem using a tape diagram.

- 1) In April, Larry's Lawn Care mowed 17 lawns. They mowed 5 times as many in May and 8 fewer in June. How many lawns did they mow over those three months?

April

June

May

- 2) The school book fair sold 15 books on Wednesday. On Friday they sold 4 fewer than Thursday. On Thursday they sold 7 times as many as on Wednesday. How many books did they sell in those three days?

Wednesday

Thursday

Friday

- 3) Faye uploaded a video to youtube that was 25 minutes long. The next week she uploaded a video that was 5 minutes longer. Then the following week she uploaded a video that was 3 times as long as the first week. How many minutes did she upload total?

Week 1

Week 2

Week 3

- 4) In a school district the elementary school earned \$27 fundraising. The high school earned 4 times as much as the elementary school and the middle school earned \$5 less than the elementary. How much did they earn total?

Elementary

Middle

High

- 5) While playing a video game Aaron, Bianca and Cathy counted the enemies they defeated. Aaron defeated 12. Bianca defeated 7 more than Aaron. And Cathy defeated 4 times as many as Aaron. How many enemies did they defeat total?

Aaron

Bianca

Cathy

Answers

1. 111

2. 221

3. 130

4. 157

5. 79



Solve each problem using a tape diagram.

Answers

- 1) On Friday a game store sold 16 copies of the new Mario game. On Saturday they sold 5 times as many as on Friday. And then on Sunday they sold 5 less than the amount on Friday. How many did they sell total?

- 2) Amy, Billy and Carl were working on a school project. Amy spent 17 minutes on her portion. Billy spent 9 times as long on his portion. And Carl spent 5 minutes fewer than Billy did. How many minutes total were they working?

- 3) Katie was organizing her pictures on her computer. In folder 1 she had 27 pictures. In folder 2 she had 10 more pictures than folder 1. And in folder 3 she had 2 times as many pictures as folder 1. How many pictures does she have total?

- 4) In one day a restaurant used 11 knives. They used 10 more forks than they used knives. They also used 5 as many spoons as knives. How many utensils do they use in a day?

- 5) In one day George's Pizza Palace sold 21 sausage pizzas. They sold 8 fewer cheese pizzas and 2 times as many pepperoni pizzas. How many pizzas did they sell total?

1. _____

2. _____

3. _____


4. _____

5. _____

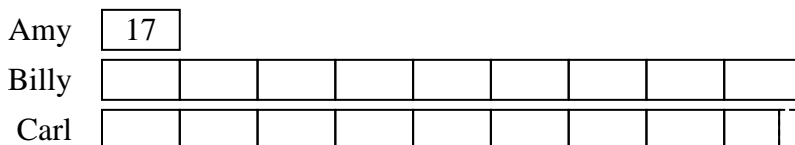


Solve each problem using a tape diagram.


- 1) On Friday a game store sold 16 copies of the new Mario game. On Saturday they sold 5 times as many as on Friday. And then on Sunday they sold 5 less than the amount on Friday. How many did they sell total?



- 2) Amy, Billy and Carl were working on a school project. Amy spent 17 minutes on her portion. Billy spent 9 times as long on his portion. And Carl spent 5 minutes fewer than Billy did. How many minutes total were they working?



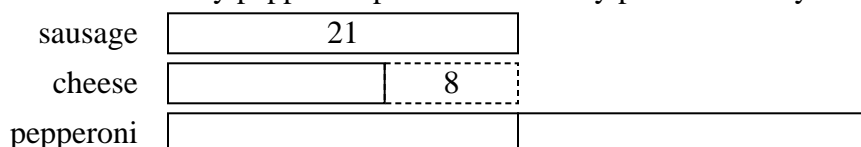
- 3) Katie was organizing her pictures on her computer. In folder 1 she had 27 pictures. In folder 2 she had 10 more pictures than folder 1. And in folder 3 she had 2 times as many pictures as folder 1. How many pictures does she have total?



- 4) In one day a restaurant used 11 knives. They used 10 more forks than they used knives. They also used 5 as many spoons as knives. How many utensils do they use in a day?



- 5) In one day George's Pizza Palace sold 21 sausage pizzas. They sold 8 fewer cheese pizzas and 2 times as many pepperoni pizzas. How many pizzas did they sell total?



Answers

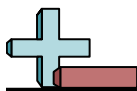
1. **107**

2. **318**

3. **118**

4. **87**

5. **76**



Solve each problem using a tape diagram.

Answers

1) At the fair the ring toss booth took in \$18 the first hour. The second hour they took \$5 less than the first hour. And the third hour they took 4 times the amount in the first hour. How much money did the ring toss booth take in the first 3 hours.

1. _____

2. _____

3. _____

4. _____

2) In one day a restaurant used 29 knives. They used 6 more forks than they used knives. They also used 2 as many spoons as knives. How many utensils do they use in a day?

5. _____

3) Amy, Billy and Carl were working on a school project. Amy spent 23 minutes on her portion. Billy spent 6 times as long on his portion. And Carl spent 2 minutes fewer than Billy did. How many minutes total were they working?

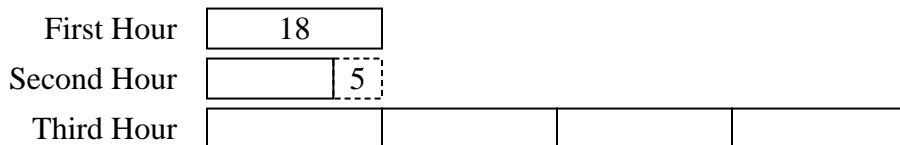
4) While playing a video game Aaron, Bianca and Cathy counted the enemies they defeated. Aaron defeated 18. Bianca defeated 9 more than Aaron. And Cathy defeated 3 times as many as Aaron. How many enemies did they defeat total?

5) Emily's TV emporium was running a contest to see which employee could sell the most TVs. Frank sold 8 times as many TVs as Danny. Edward sold 4 fewer than Frank. And Danny sold 18 TVs. How many TVs did they sell total?




Solve each problem using a tape diagram.


- 1) At the fair the ring toss booth took in \$18 the first hour. The second hour they took \$5 less than the first hour. And the third hour they took 4 times the amount in the first hour. How much money did the ring toss booth take in the first 3 hours.



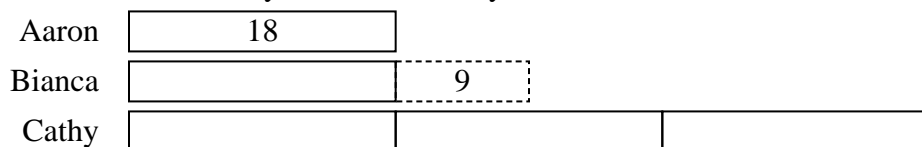
- 2) In one day a restaurant used 29 knives. They used 6 more forks than they used knives. They also used 2 as many spoons as knives. How many utensils do they use in a day?



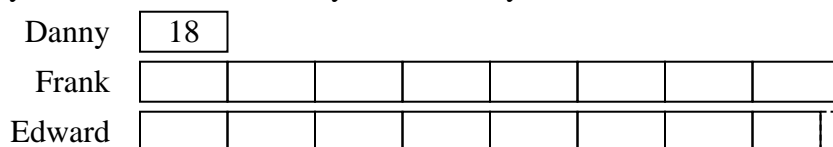
- 3) Amy, Billy and Carl were working on a school project. Amy spent 23 minutes on her portion. Billy spent 6 times as long on his portion. And Carl spent 2 minutes fewer than Billy did. How many minutes total were they working?



- 4) While playing a video game Aaron, Bianca and Cathy counted the enemies they defeated. Aaron defeated 18. Bianca defeated 9 more than Aaron. And Cathy defeated 3 times as many as Aaron. How many enemies did they defeat total?



- 5) Emily's TV emporium was running a contest to see which employee could sell the most TVs. Frank sold 8 times as many TVs as Danny. Edward sold 4 fewer than Frank. And Danny sold 18 TVs. How many TVs did they sell total?



Answers

1. **103**
2. **122**
3. **297**
4. **99**
5. **302**