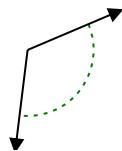




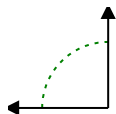
Determine if the angle shown is acute, obtuse, right or straight.

Answers

Ex)



1)



2)



Ex. **obtuse**

1. _____

2. _____

3. _____

4. _____

5. _____

6. _____

7. _____

8. _____

9. _____

10. _____

11. _____

12. _____

13. _____

14. _____

15. _____

16. _____

17. _____

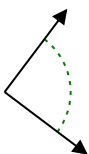
18. _____

19. _____

20. _____

20. _____

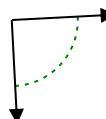
3)



4)



5)



6)



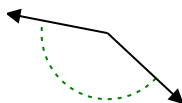
7)



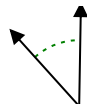
8)



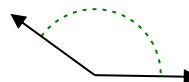
9)



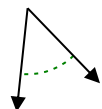
10)



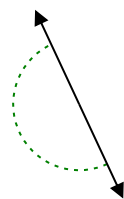
11)



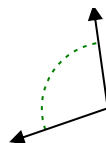
12)



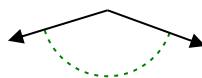
13)



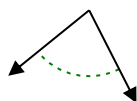
14)



15)



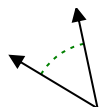
16)



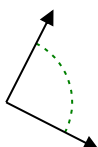
17)



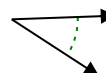
18)



19)



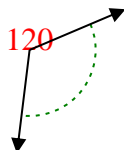
20)



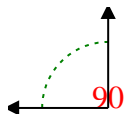


Determine if the angle shown is acute, obtuse, right or straight.

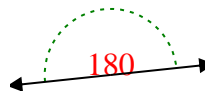
Ex)



1)



2)



Answers

Ex. **obtuse**

1. **right**

2. **straight**

3. **right**

4. **acute**

5. **right**

6. **obtuse**

7. **obtuse**

8. **acute**

9. **obtuse**

10. **acute**

11. **obtuse**

12. **acute**

13. **straight**

14. **obtuse**

15. **obtuse**

16. **acute**

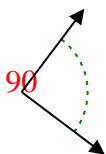
17. **acute**

18. **acute**

19. **right**

20. **acute**

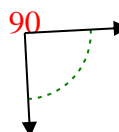
3)



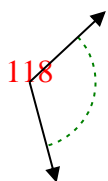
4)



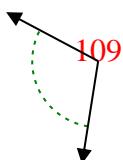
5)



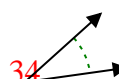
6)



7)



8)



9)



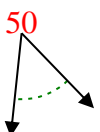
10)



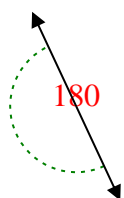
11)



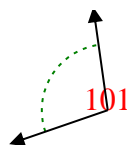
12)



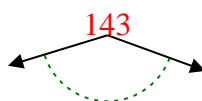
13)



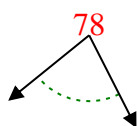
14)



15)



16)



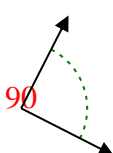
17)



18)



19)



20)

