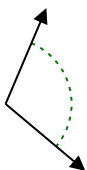




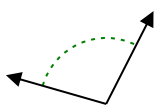
Determine if the angle shown is acute, obtuse, right or straight.

Answers

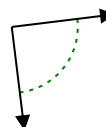
Ex)



1)



2)



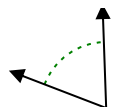
Ex.

**obtuse**

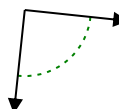
3)



4)



5)



1.

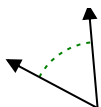
2.

3.

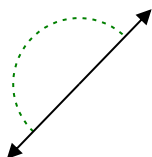
4.

5.

6)



7)



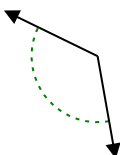
8)



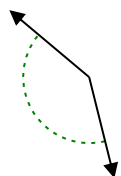
6.

7.

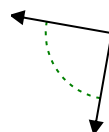
9)



10)



11)



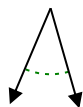
8.

9.

10.

11.

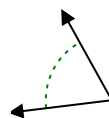
12)



13)



14)

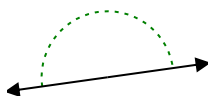


12.

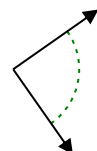
13.

14.

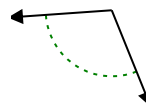
15)



16)



17)



15.

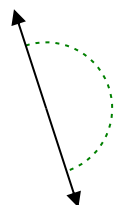
16.

17.

18)



19)



20)



18.

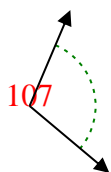
19.

20.

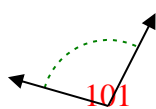


Determine if the angle shown is acute, obtuse, right or straight.

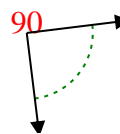
Ex)



1)



2)



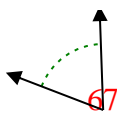
Ex.

**obtuse**

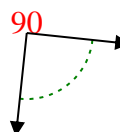
3)



4)



5)



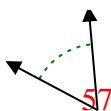
1.

**obtuse**

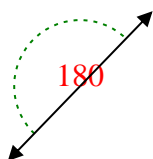
2.

**right**

6)



7)



8)



3.

**acute**

4.

**acute**

5.

**right**

6.

**acute**

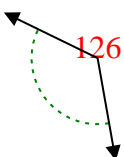
7.

**straight**

8.

**acute**

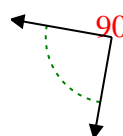
9)



10)



11)



9.

**obtuse**

10.

**obtuse**

11.

**right**

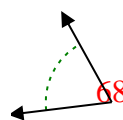
12)



13)



14)



12.

**acute**

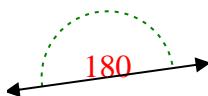
13.

**acute**

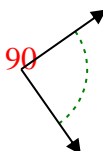
14.

**acute**

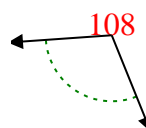
15)



16)



17)



15.

**straight**

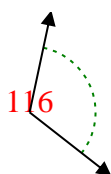
16.

**right**

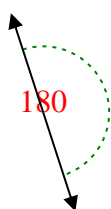
17.

**obtuse**

18)



19)



20)



18.

**obtuse**

19.

**straight**

20.

**obtuse**