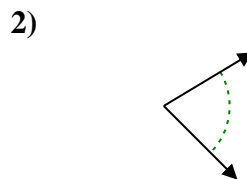

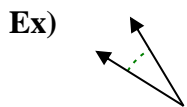




Determine if the angle shown is acute, obtuse, right or straight.

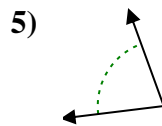
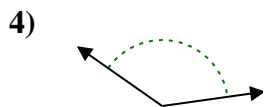
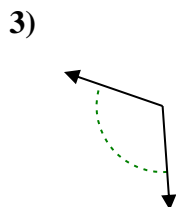
Answers



Ex. **acute**

1. _____

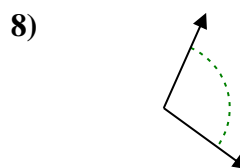
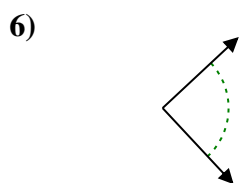
2. _____



3. _____

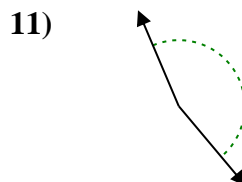
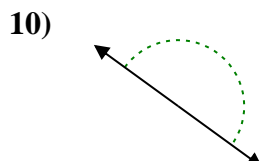
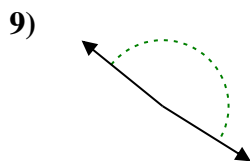
4. _____

5. _____



6. _____

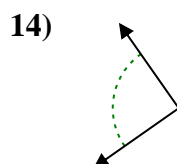
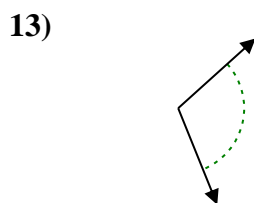
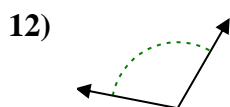
7. _____



8. _____

9. _____

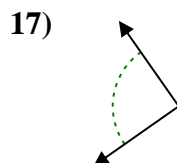
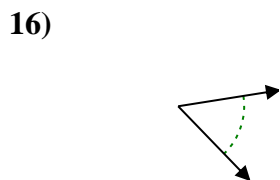
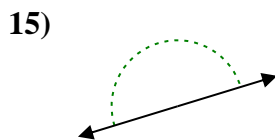
10. _____



11. _____

12. _____

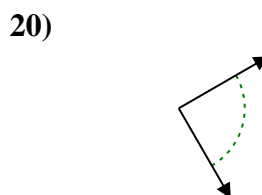
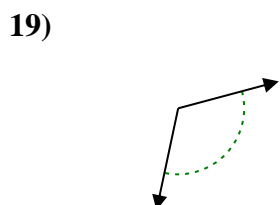
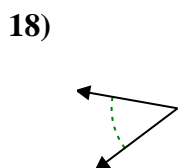
13. _____



14. _____

15. _____

16. _____



17. _____

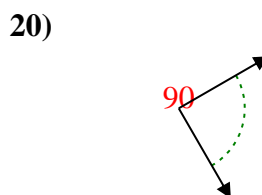
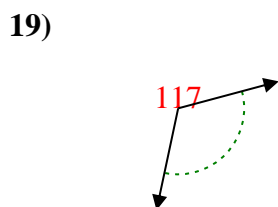
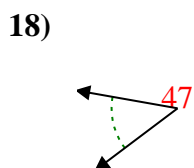
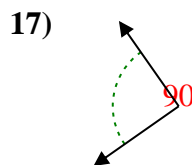
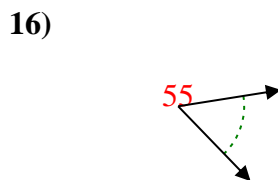
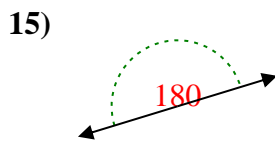
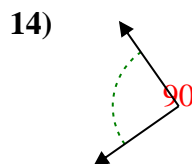
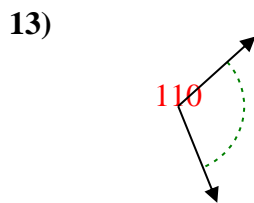
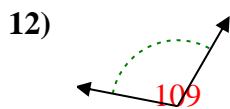
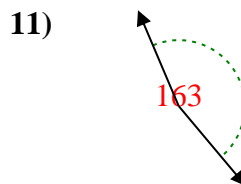
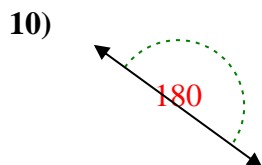
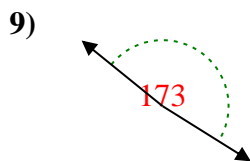
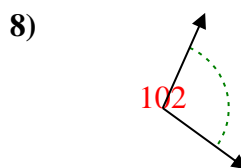
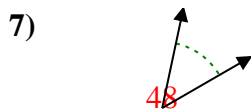
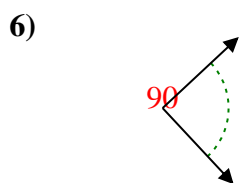
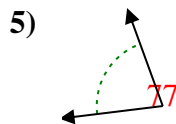
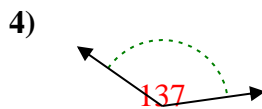
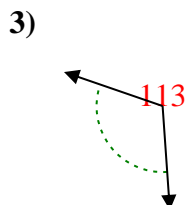
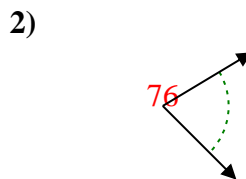
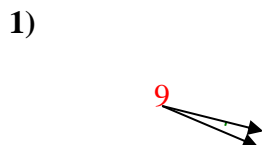
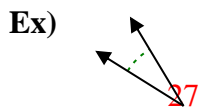
18. _____

19. _____

20. _____



Determine if the angle shown is acute, obtuse, right or straight.



Answers

Ex. **acute**

1. **acute**

2. **acute**

3. **obtuse**

4. **obtuse**

5. **acute**

6. **right**

7. **acute**

8. **obtuse**

9. **obtuse**

10. **straight**

11. **obtuse**

12. **obtuse**

13. **obtuse**

14. **right**

15. **straight**

16. **acute**

17. **right**

18. **acute**

19. **obtuse**

20. **right**