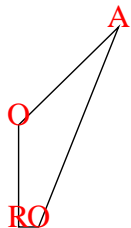


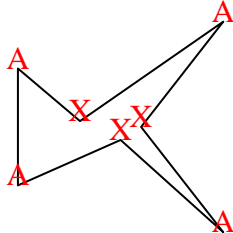


Count the number of Acute, Obtuse, Right and Reflex angles in each shape.

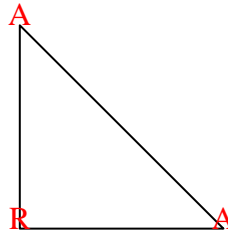
Ex)



1)



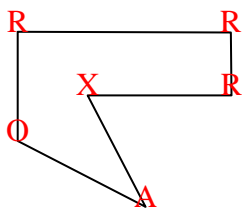
2)



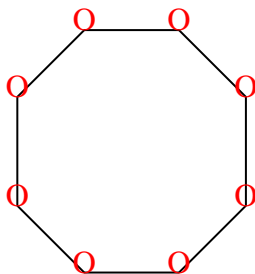
Answers

Ex.	<u>1</u>	<u>2</u>	<u>1</u>	<u>0</u>
1.	<u>4</u>	<u>0</u>	<u>0</u>	<u>3</u>
2.	<u>2</u>	<u>0</u>	<u>1</u>	<u>0</u>
3.	<u>1</u>	<u>1</u>	<u>3</u>	<u>1</u>
4.	<u>0</u>	<u>8</u>	<u>0</u>	<u>0</u>
5.	<u>0</u>	<u>0</u>	<u>8</u>	<u>4</u>
6.	<u>2</u>	<u>1</u>	<u>2</u>	<u>2</u>
7.	<u>0</u>	<u>0</u>	<u>6</u>	<u>0</u>
8.	<u>5</u>	<u>0</u>	<u>0</u>	<u>5</u>
9.	<u>2</u>	<u>3</u>	<u>0</u>	<u>1</u>
10.	<u>0</u>	<u>0</u>	<u>4</u>	<u>0</u>
11.	<u>2</u>	<u>2</u>	<u>0</u>	<u>1</u>

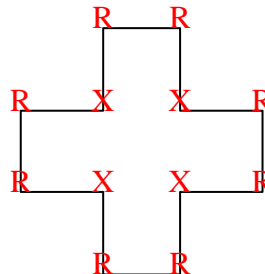
3)



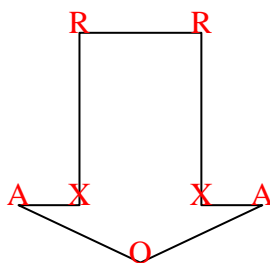
4)



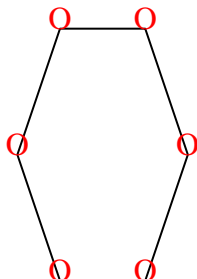
5)



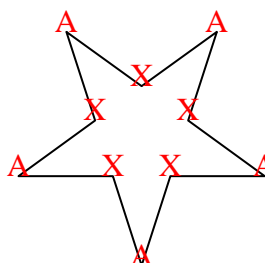
6)



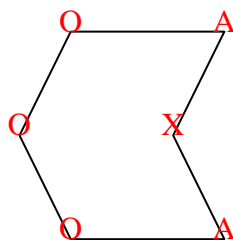
7)



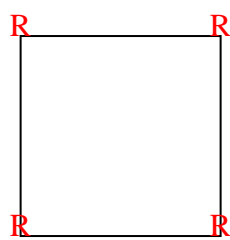
8)



9)



10)



11)

