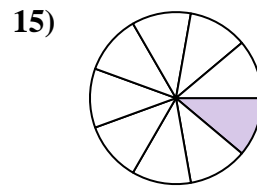
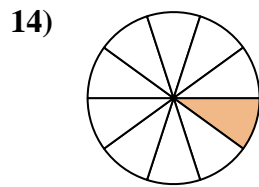
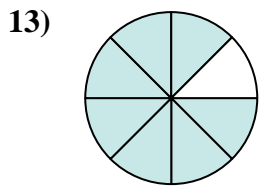
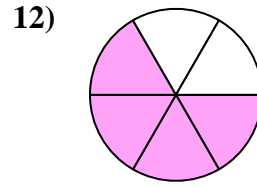
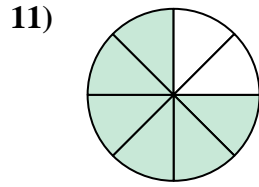
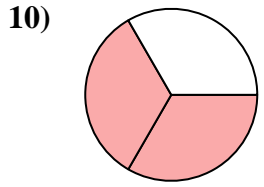
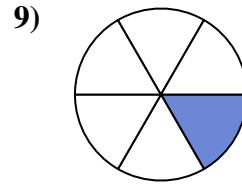
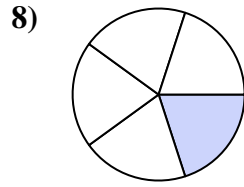
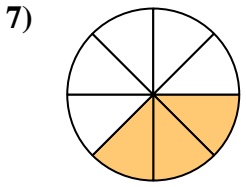
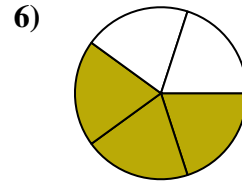
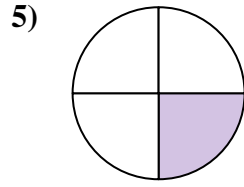
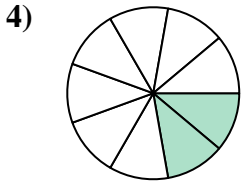
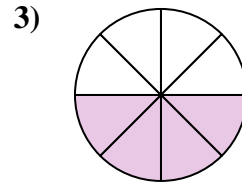
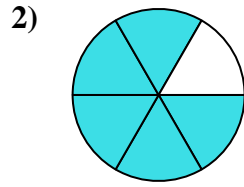
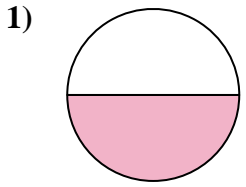




Find the angle (in degrees) of the shaded portion of the circle.

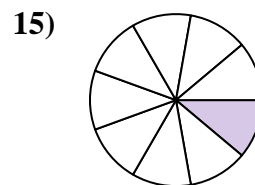
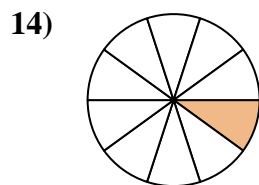
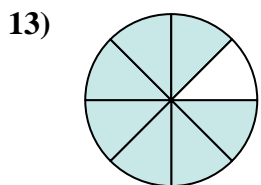
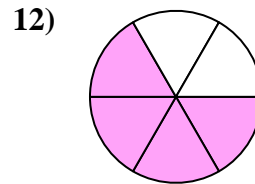
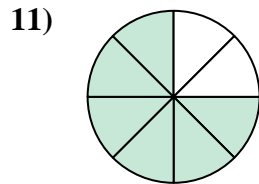
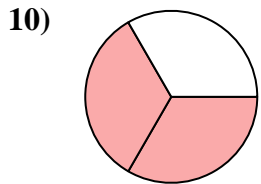
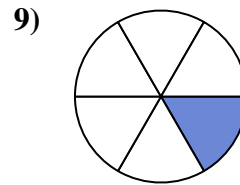
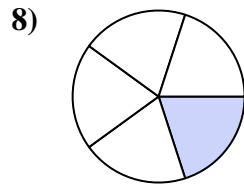
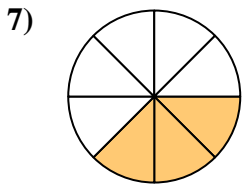
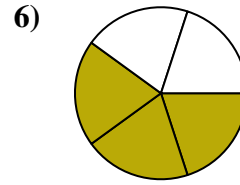
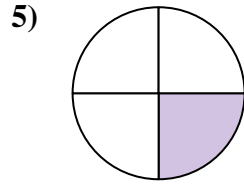
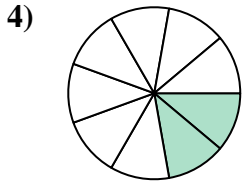
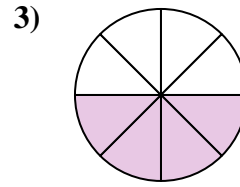
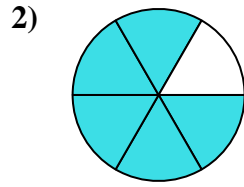
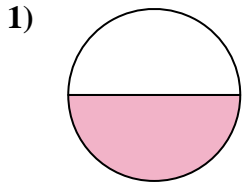
Answers



1. _____
2. _____
3. _____
4. _____
5. _____
6. _____
7. _____
8. _____
9. _____
10. _____
11. _____
12. _____
13. _____
14. _____
15. _____



Find the angle (in degrees) of the shaded portion of the circle.



Answers

1. 180

2. 300

3. 180

4. 80

5. 90

6. 216

7. 135

8. 72

9. 60

10. 240

11. 270

12. 240

13. 315

14. 36

15. 40



Find the angle (in degrees) of the shaded portion of the circle.

Answers

135

72

80

60

90

216

270

240

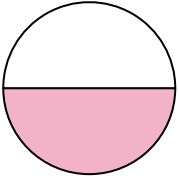
180

180

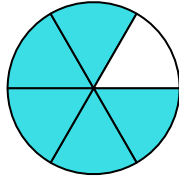
240

300

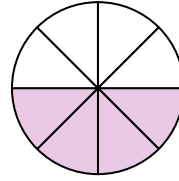
1)



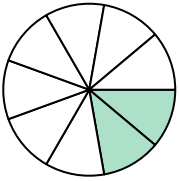
2)



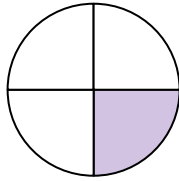
3)



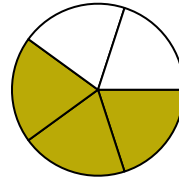
4)



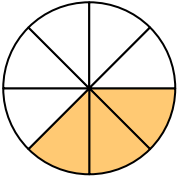
5)



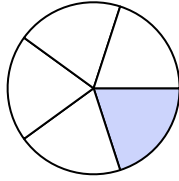
6)



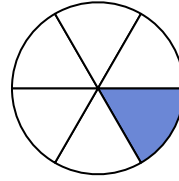
7)



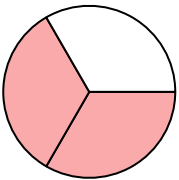
8)



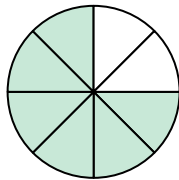
9)



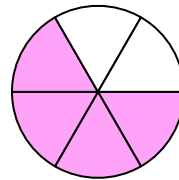
10)



11)



12)



1. _____

2. _____

3. _____

4. _____

5. _____

6. _____

7. _____

8. _____

9. _____

10. _____

11. _____

12. _____