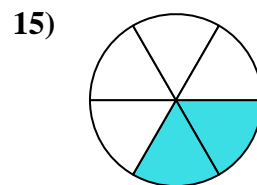
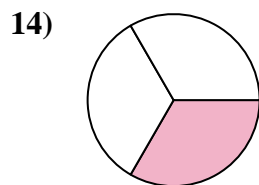
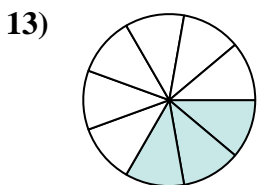
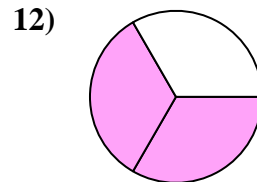
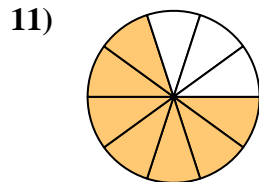
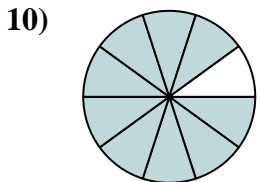
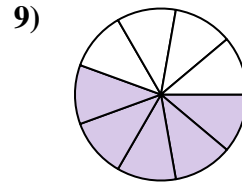
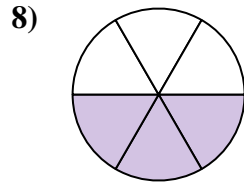
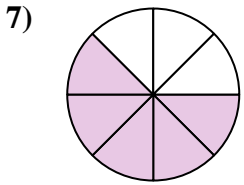
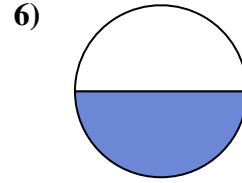
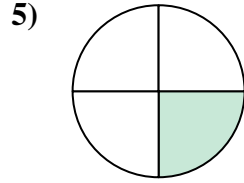
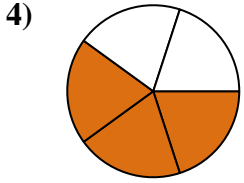
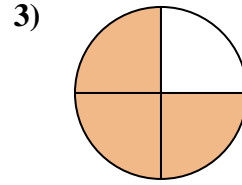
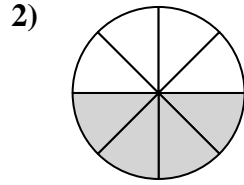
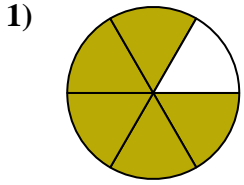




Find the angle (in degrees) of the shaded portion of the circle.

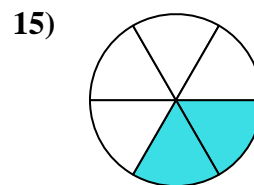
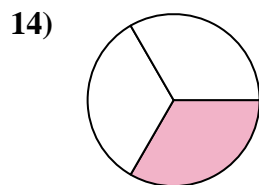
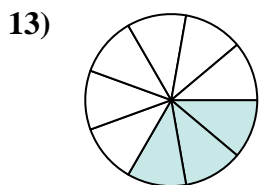
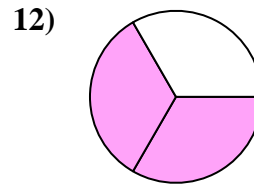
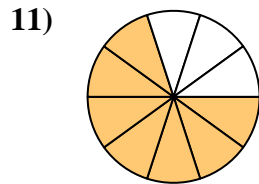
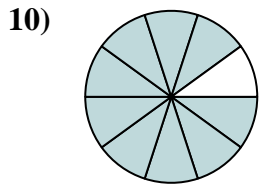
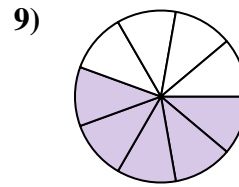
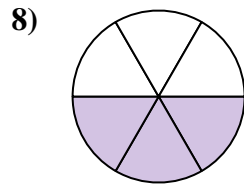
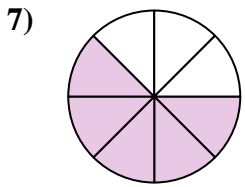
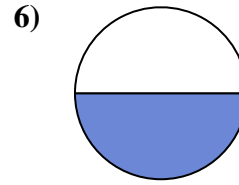
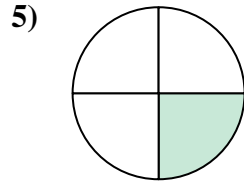
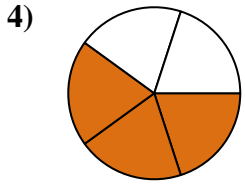
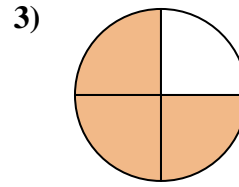
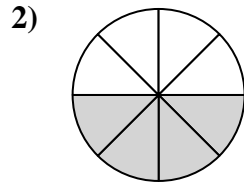
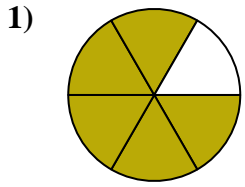
Answers



1. _____
2. _____
3. _____
4. _____
5. _____
6. _____
7. _____
8. _____
9. _____
10. _____
11. _____
12. _____
13. _____
14. _____
15. _____



Find the angle (in degrees) of the shaded portion of the circle.



Answers

1. 300

2. 180

3. 270

4. 216

5. 90

6. 180

7. 225

8. 180

9. 200

10. 324

11. 252

12. 240

13. 120

14. 120

15. 120



Find the angle (in degrees) of the shaded portion of the circle.

Answers

300

216

270

180

240

90

180

200

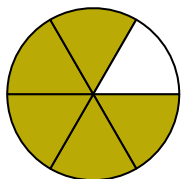
252

180

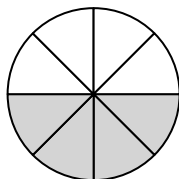
324

225

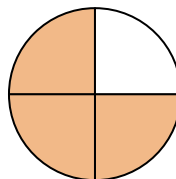
1)



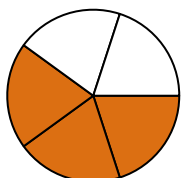
2)



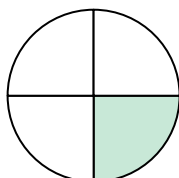
3)



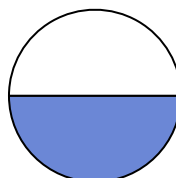
4)



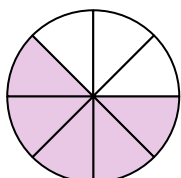
5)



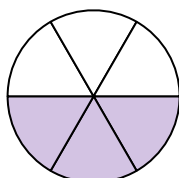
6)



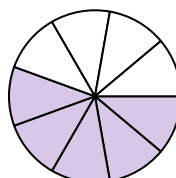
7)



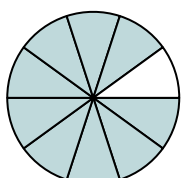
8)



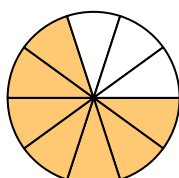
9)



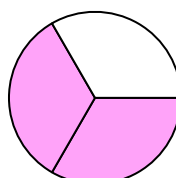
10)



11)



12)



1. _____

2. _____

3. _____

4. _____

5. _____

6. _____

7. _____

8. _____

9. _____

10. _____

11. _____

12. _____