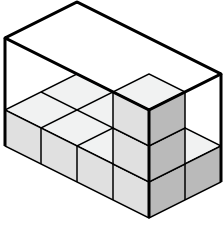




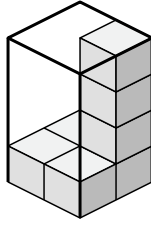
Create an expression to determine the volume of each box.

Answers

1)



2)



1. _____

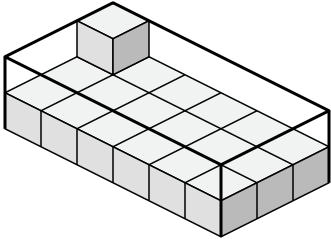
2. _____

3. _____

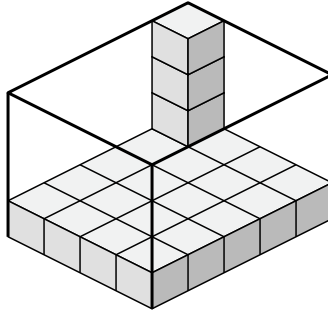
4. _____

5. _____

3)



4)

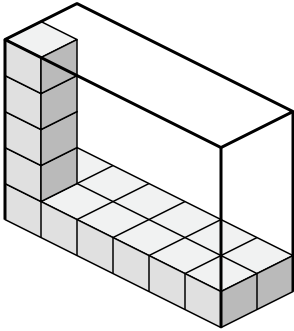


6. _____

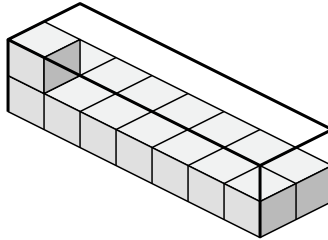
7. _____

8. _____

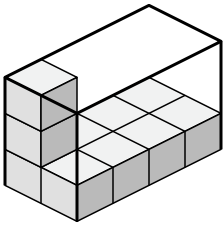
5)



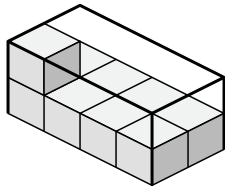
6)



7)



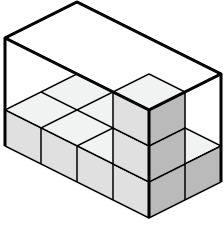
8)



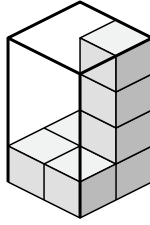


Create an expression to determine the volume of each box.

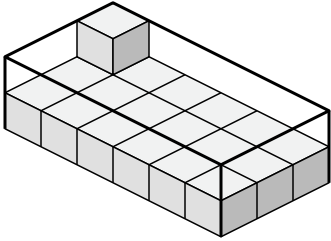
1)



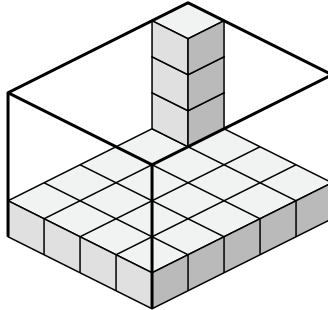
2)



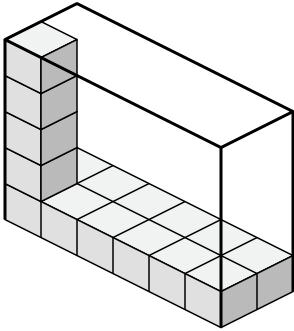
3)



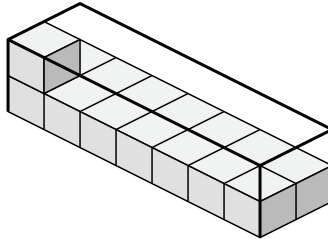
4)



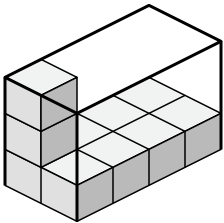
5)



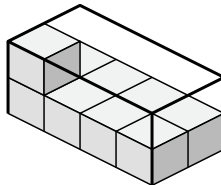
6)



7)



8)



Answers

1. 4×2×3

2. 2×2×4

3. 6×3×2

4. 4×5×4

5. 6×2×5

6. 7×2×2

7. 2×4×3

8. 4×2×2