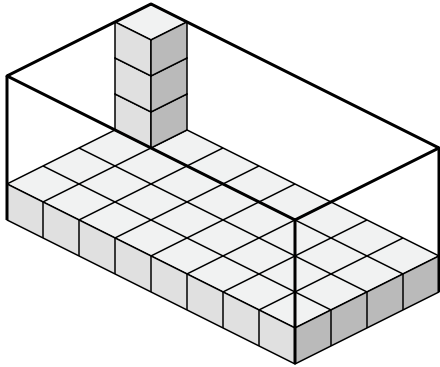




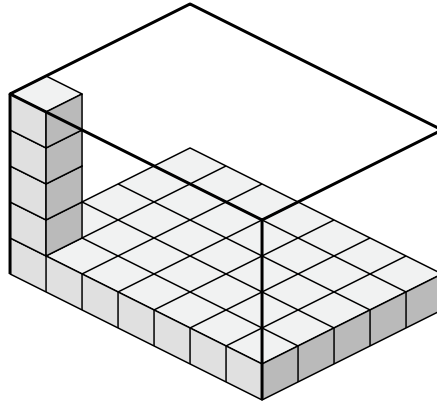
Create an expression to determine the volume of each box.

Answers

1)



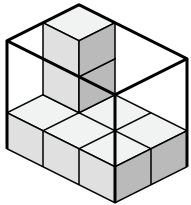
2)



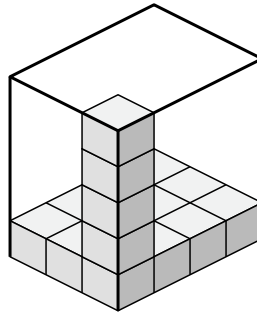
1. \_\_\_\_\_

2. \_\_\_\_\_

3)



4)



3. \_\_\_\_\_

4. \_\_\_\_\_

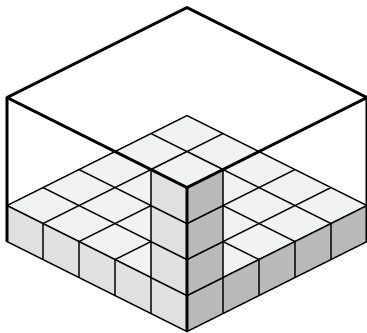
5. \_\_\_\_\_

6. \_\_\_\_\_

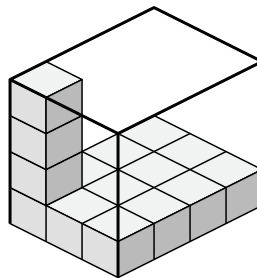
7. \_\_\_\_\_

8. \_\_\_\_\_

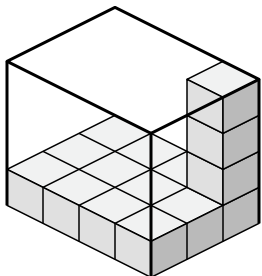
5)



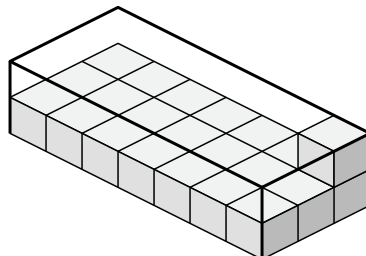
6)



7)



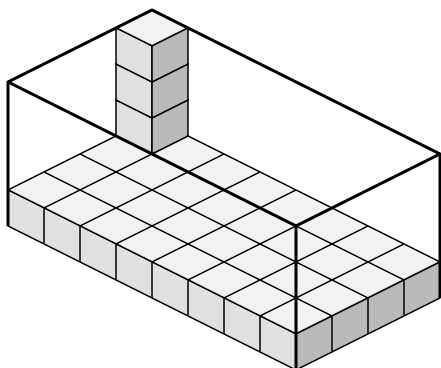
8)



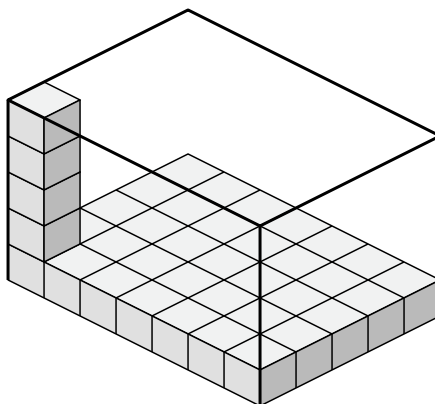


Create an expression to determine the volume of each box.

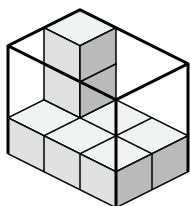
1)



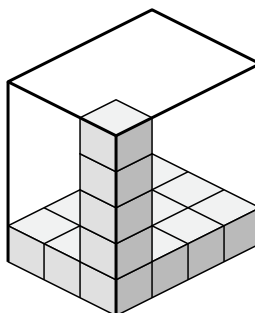
2)



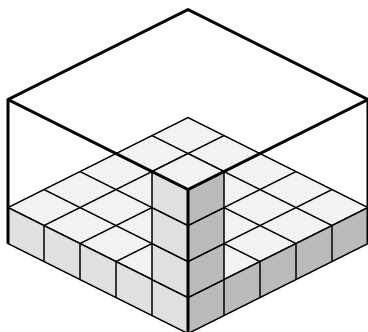
3)



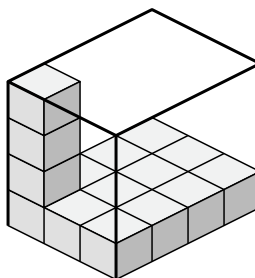
4)



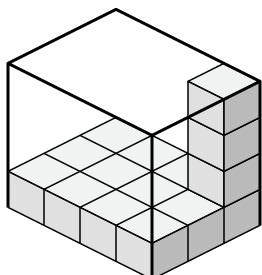
5)



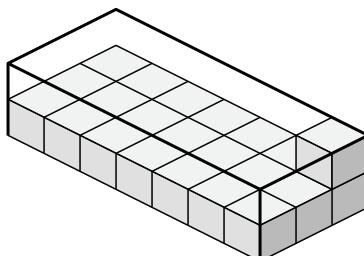
6)



7)



8)



Answers

1.  $8 \times 4 \times 4$

2.  $7 \times 5 \times 5$

3.  $3 \times 2 \times 3$

4.  $3 \times 4 \times 5$

5.  $5 \times 5 \times 4$

6.  $3 \times 4 \times 4$

7.  $4 \times 3 \times 4$

8.  $7 \times 3 \times 2$