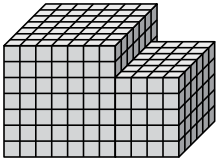




Find the total volume of each figure. Measurement is in cm (not to scale).

Answers

1)



1. _____

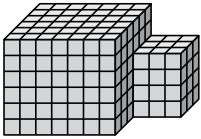
2. _____

3. _____

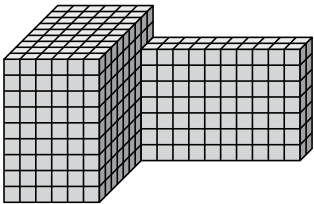
4. _____

5. _____

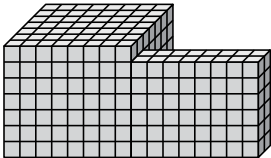
2)



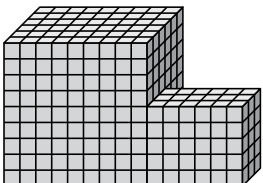
3)



4)



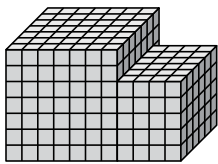
5)





Find the total volume of each figure. Measurement is in cm (not to scale).

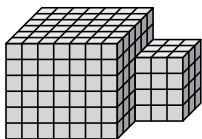
1)



$$7 \times 7 \times 7 = 343$$

$$4 \times 6 \times 5 = 120$$

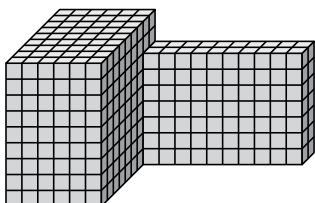
2)



$$7 \times 6 \times 6 = 252$$

$$3 \times 3 \times 4 = 36$$

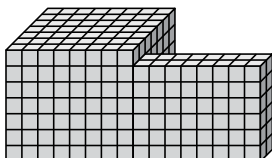
3)



$$6 \times 9 \times 9 = 486$$

$$10 \times 2 \times 7 = 140$$

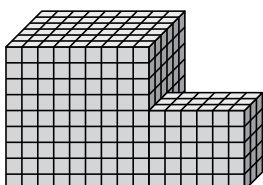
4)



$$8 \times 7 \times 7 = 392$$

$$8 \times 2 \times 6 = 96$$

5)



$$9 \times 6 \times 9 = 486$$

$$6 \times 3 \times 5 = 90$$

Answers

1. 463 cm³

2. 288 cm³

3. 626 cm³

4. 488 cm³

5. 576 cm³