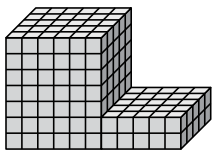




Find the total volume of each figure. Measurement is in cm (not to scale).

Answers

1)



1. \_\_\_\_\_

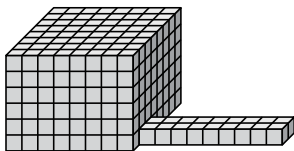
2. \_\_\_\_\_

3. \_\_\_\_\_

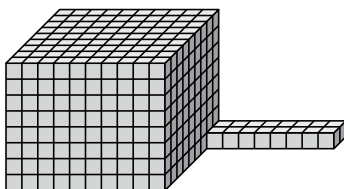
4. \_\_\_\_\_

5. \_\_\_\_\_

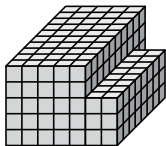
2)



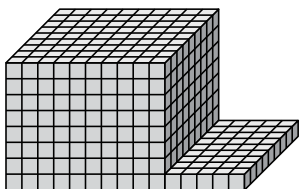
3)



4)

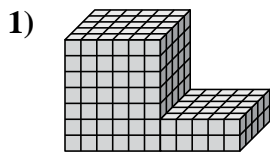


5)

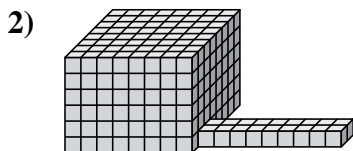




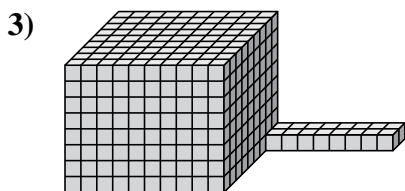
Find the total volume of each figure. Measurement is in cm (not to scale).



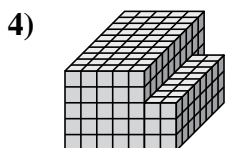
$$6 \times 5 \times 7 = 210$$
$$5 \times 5 \times 2 = 50$$



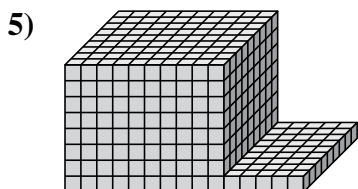
$$8 \times 8 \times 6 = 384$$
$$9 \times 2 \times 1 = 18$$



$$10 \times 9 \times 8 = 720$$
$$8 \times 2 \times 1 = 16$$



$$5 \times 10 \times 5 = 250$$
$$2 \times 8 \times 3 = 48$$



$$10 \times 9 \times 8 = 720$$
$$5 \times 9 \times 1 = 45$$

**Answers**

1. 260 cm<sup>3</sup>

2. 402 cm<sup>3</sup>

3. 736 cm<sup>3</sup>

4. 298 cm<sup>3</sup>

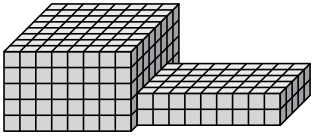
5. 765 cm<sup>3</sup>



Find the total volume of each figure. Measurement is in cm (not to scale).

Answers

1)



1. \_\_\_\_\_

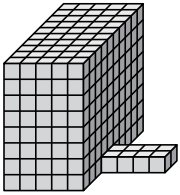
2. \_\_\_\_\_

3. \_\_\_\_\_

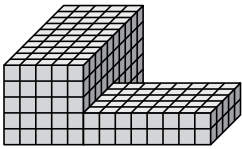
4. \_\_\_\_\_

5. \_\_\_\_\_

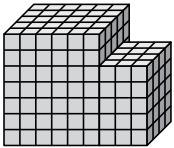
2)



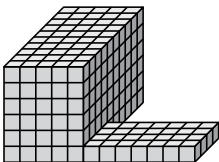
3)



4)



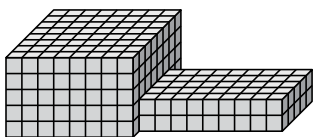
5)





Find the total volume of each figure. Measurement is in cm (not to scale).

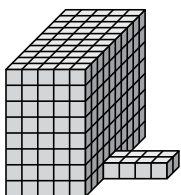
1)



$$8 \times 8 \times 5 = 320$$

$$9 \times 5 \times 2 = 90$$

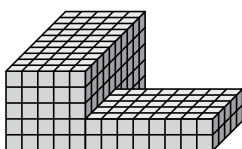
2)



$$5 \times 10 \times 8 = 400$$

$$4 \times 2 \times 1 = 8$$


3)



$$5 \times 10 \times 5 = 250$$

$$8 \times 5 \times 2 = 80$$

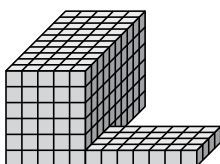
4)



$$6 \times 5 \times 7 = 210$$

$$3 \times 4 \times 5 = 60$$

5)



$$5 \times 10 \times 6 = 300$$

$$7 \times 4 \times 1 = 28$$

**Answers**

1. 410 cm<sup>3</sup>

2. 408 cm<sup>3</sup>

3. 330 cm<sup>3</sup>

4. 270 cm<sup>3</sup>

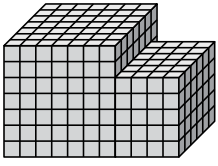
5. 328 cm<sup>3</sup>



Find the total volume of each figure. Measurement is in cm (not to scale).

Answers

1)



1. \_\_\_\_\_

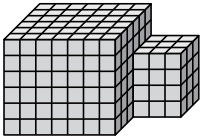
2. \_\_\_\_\_

3. \_\_\_\_\_

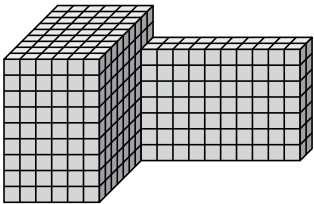
4. \_\_\_\_\_

5. \_\_\_\_\_

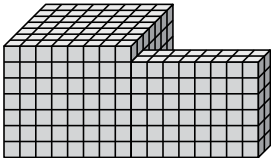
2)



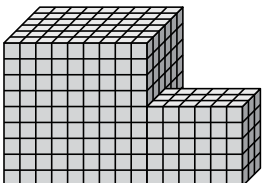
3)



4)

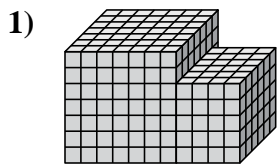


5)

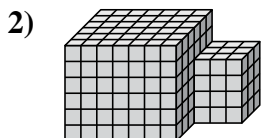




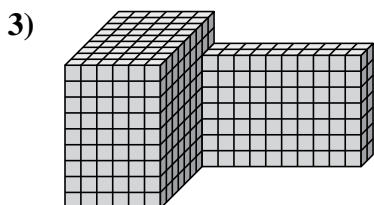
Find the total volume of each figure. Measurement is in cm (not to scale).



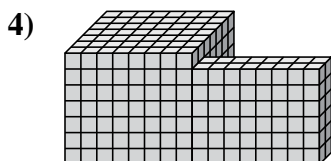
$$7 \times 7 \times 7 = 343$$
$$4 \times 6 \times 5 = 120$$



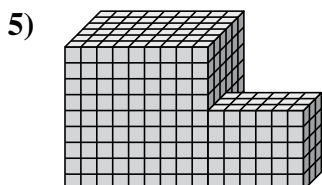
$$7 \times 6 \times 6 = 252$$
$$3 \times 3 \times 4 = 36$$



$$6 \times 9 \times 9 = 486$$
$$10 \times 2 \times 7 = 140$$



$$8 \times 7 \times 7 = 392$$
$$8 \times 2 \times 6 = 96$$



$$9 \times 6 \times 9 = 486$$
$$6 \times 3 \times 5 = 90$$

**Answers**

1. 463 cm<sup>3</sup>

2. 288 cm<sup>3</sup>

3. 626 cm<sup>3</sup>

4. 488 cm<sup>3</sup>

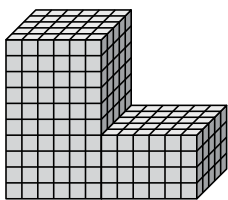
5. 576 cm<sup>3</sup>



Find the total volume of each figure. Measurement is in cm (not to scale).

Answers

1)



1. \_\_\_\_\_

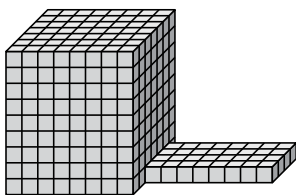
2. \_\_\_\_\_

3. \_\_\_\_\_

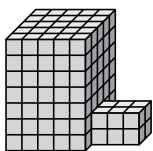
4. \_\_\_\_\_

5. \_\_\_\_\_


2)



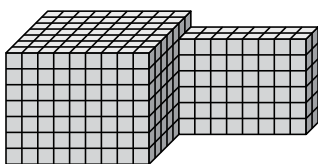
3)



4)

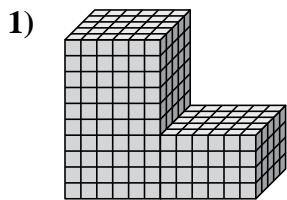


5)



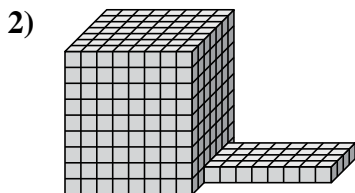


Find the total volume of each figure. Measurement is in cm (not to scale).



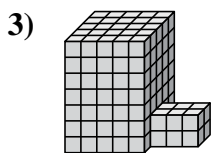
$$6 \times 5 \times 10 = 300$$

$$6 \times 5 \times 4 = 120$$



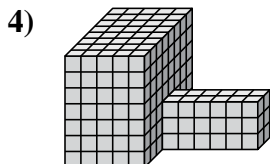
$$8 \times 7 \times 9 = 504$$

$$8 \times 4 \times 1 = 32$$



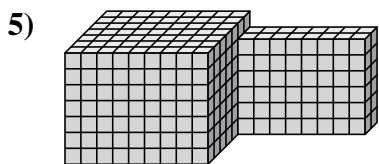
$$5 \times 5 \times 7 = 175$$

$$3 \times 2 \times 2 = 12$$



$$5 \times 8 \times 7 = 280$$

$$6 \times 2 \times 3 = 36$$



$$9 \times 7 \times 7 = 441$$

$$8 \times 2 \times 6 = 96$$

Answers

1. 420 cm<sup>3</sup>

2. 536 cm<sup>3</sup>

3. 187 cm<sup>3</sup>

4. 316 cm<sup>3</sup>

5. 537 cm<sup>3</sup>

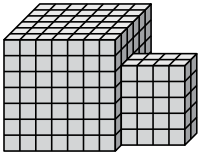




Find the total volume of each figure. Measurement is in cm (not to scale).

Answers

1)



1. \_\_\_\_\_

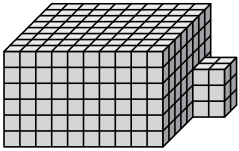
2. \_\_\_\_\_

3. \_\_\_\_\_

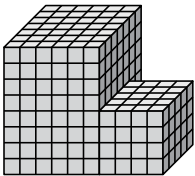
4. \_\_\_\_\_

5. \_\_\_\_\_

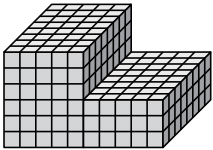
2)



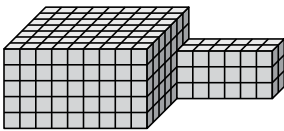
3)



4)

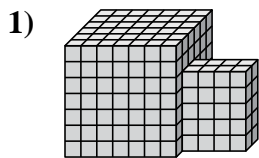


5)

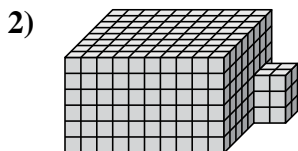




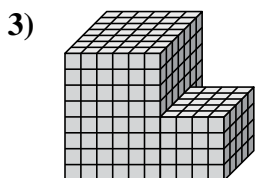
Find the total volume of each figure. Measurement is in cm (not to scale).



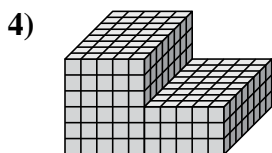
$$7 \times 6 \times 7 = 294$$
$$4 \times 2 \times 5 = 40$$



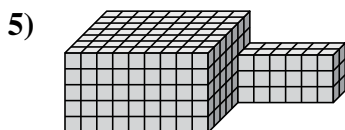
$$10 \times 8 \times 6 = 480$$
$$2 \times 2 \times 3 = 12$$



$$6 \times 7 \times 8 = 336$$
$$4 \times 5 \times 4 = 80$$



$$5 \times 8 \times 6 = 240$$
$$5 \times 8 \times 3 = 120$$



$$9 \times 7 \times 5 = 315$$
$$6 \times 2 \times 3 = 36$$

**Answers**

1. 334 cm<sup>3</sup>

2. 492 cm<sup>3</sup>

3. 416 cm<sup>3</sup>

4. 360 cm<sup>3</sup>

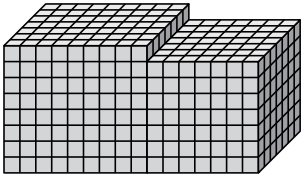
5. 351 cm<sup>3</sup>



Find the total volume of each figure. Measurement is in cm (not to scale).

Answers

1)



1. \_\_\_\_\_

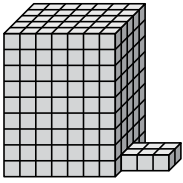
2. \_\_\_\_\_

3. \_\_\_\_\_

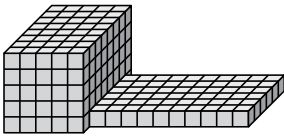
4. \_\_\_\_\_

5. \_\_\_\_\_

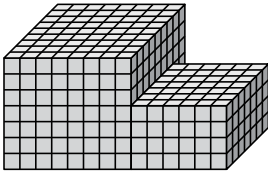
2)



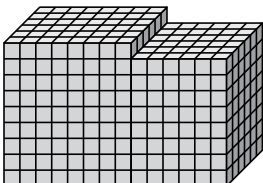
3)



4)

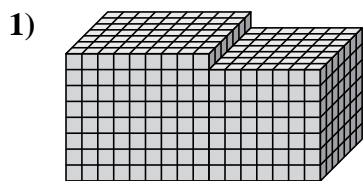


5)

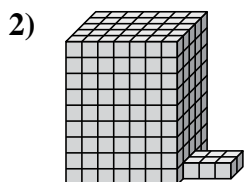




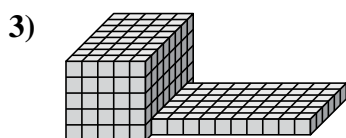
Find the total volume of each figure. Measurement is in cm (not to scale).



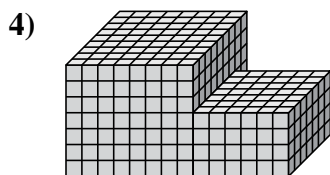
$$9 \times 7 \times 8 = 504$$
$$7 \times 7 \times 7 = 343$$



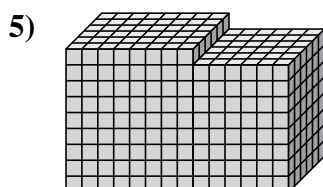
$$7 \times 5 \times 9 = 315$$
$$3 \times 2 \times 1 = 6$$



$$5 \times 8 \times 5 = 200$$
$$10 \times 6 \times 1 = 60$$



$$8 \times 9 \times 7 = 504$$
$$6 \times 7 \times 4 = 168$$



$$8 \times 6 \times 9 = 432$$
$$6 \times 6 \times 8 = 288$$

**Answers**

1. 847 cm<sup>3</sup>

2. 321 cm<sup>3</sup>

3. 260 cm<sup>3</sup>

4. 672 cm<sup>3</sup>

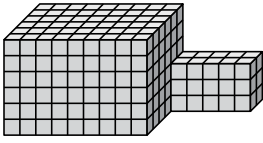
5. 720 cm<sup>3</sup>



Find the total volume of each figure. Measurement is in cm (not to scale).

Answers

1)



1. \_\_\_\_\_

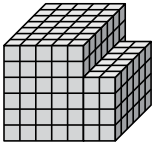
2. \_\_\_\_\_

3. \_\_\_\_\_

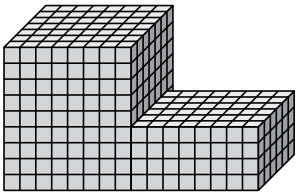
4. \_\_\_\_\_

5. \_\_\_\_\_

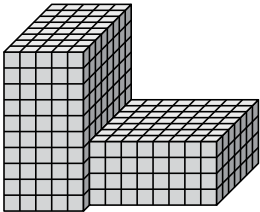
2)



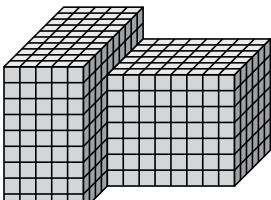
3)



4)

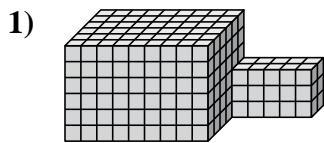


5)



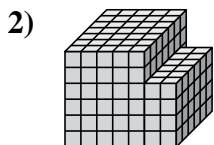


Find the total volume of each figure. Measurement is in cm (not to scale).



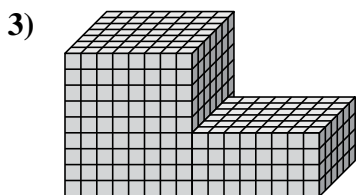
$$9 \times 6 \times 6 = 324$$

$$5 \times 2 \times 3 = 30$$



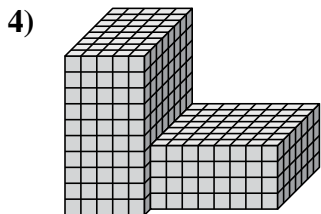
$$5 \times 7 \times 6 = 210$$

$$2 \times 6 \times 4 = 48$$



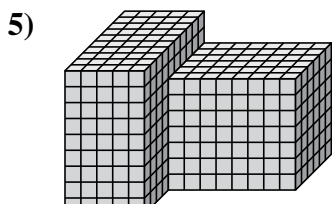
$$8 \times 7 \times 9 = 504$$

$$8 \times 6 \times 4 = 192$$



$$5 \times 8 \times 10 = 400$$

$$8 \times 7 \times 4 = 224$$



$$5 \times 10 \times 9 = 450$$

$$8 \times 6 \times 7 = 336$$

Answers

1. 354 cm<sup>3</sup>

2. 258 cm<sup>3</sup>

3. 696 cm<sup>3</sup>

4. 624 cm<sup>3</sup>

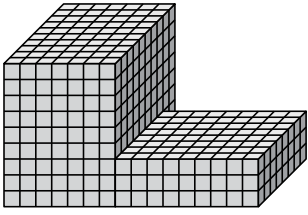
5. 786 cm<sup>3</sup>



Find the total volume of each figure. Measurement is in cm (not to scale).

Answers

1)



1. \_\_\_\_\_

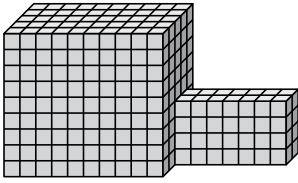
2. \_\_\_\_\_

3. \_\_\_\_\_

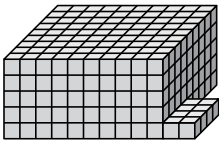
4. \_\_\_\_\_

5. \_\_\_\_\_

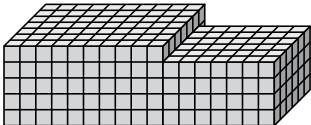
2)



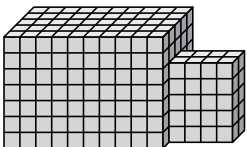
3)



4)



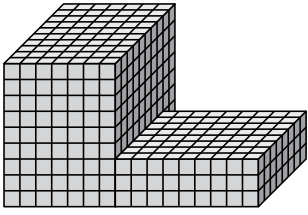
5)





Find the total volume of each figure. Measurement is in cm (not to scale).

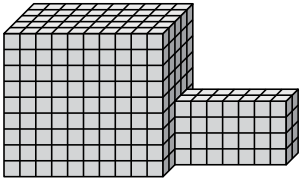
1)



$$7 \times 10 \times 9 = 630$$

$$9 \times 8 \times 3 = 216$$

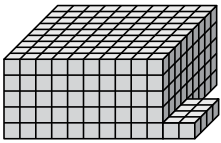
2)



$$10 \times 5 \times 9 = 450$$

$$7 \times 2 \times 4 = 56$$

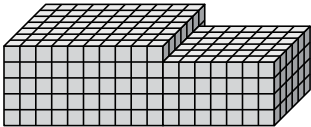
3)



$$10 \times 9 \times 5 = 450$$

$$2 \times 4 \times 1 = 8$$

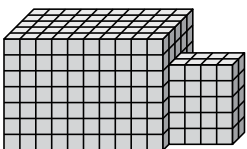
4)



$$10 \times 7 \times 5 = 350$$

$$7 \times 6 \times 4 = 168$$

5)



$$10 \times 5 \times 7 = 350$$

$$4 \times 2 \times 5 = 40$$

**Answers**

1. 846 cm<sup>3</sup>

2. 506 cm<sup>3</sup>

3. 458 cm<sup>3</sup>

4. 518 cm<sup>3</sup>

5. 390 cm<sup>3</sup>

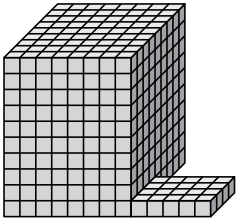




Find the total volume of each figure. Measurement is in cm (not to scale).

Answers

1)



1. \_\_\_\_\_

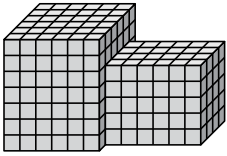
2. \_\_\_\_\_

3. \_\_\_\_\_

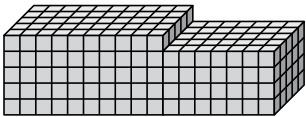
4. \_\_\_\_\_

5. \_\_\_\_\_

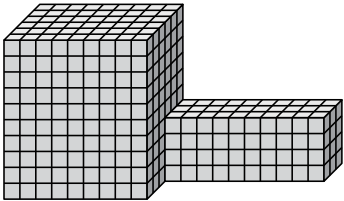
2)



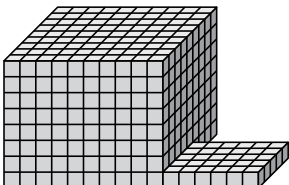
3)



4)



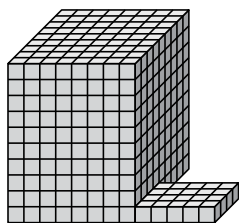
5)





Find the total volume of each figure. Measurement is in cm (not to scale).

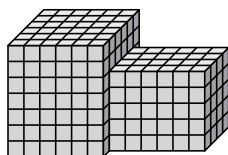
1)



$$8 \times 9 \times 10 = 720$$

$$5 \times 4 \times 1 = 20$$

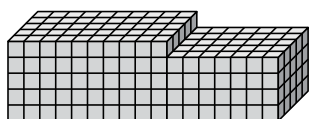
2)



$$6 \times 6 \times 7 = 252$$

$$6 \times 4 \times 5 = 120$$

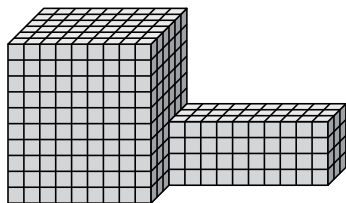
3)



$$10 \times 5 \times 5 = 250$$

$$7 \times 5 \times 4 = 140$$

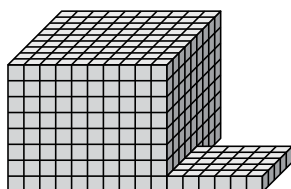
4)



$$9 \times 6 \times 10 = 540$$

$$10 \times 3 \times 4 = 120$$

5)



$$10 \times 9 \times 8 = 720$$

$$6 \times 5 \times 1 = 30$$

Answers

1. 740 cm<sup>3</sup>

2. 372 cm<sup>3</sup>

3. 390 cm<sup>3</sup>

4. 660 cm<sup>3</sup>

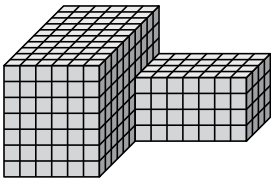
5. 750 cm<sup>3</sup>



Find the total volume of each figure. Measurement is in cm (not to scale).

Answers

1)



1. \_\_\_\_\_

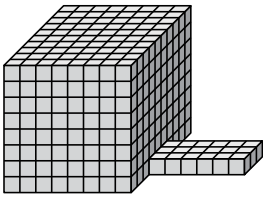
2. \_\_\_\_\_

3. \_\_\_\_\_

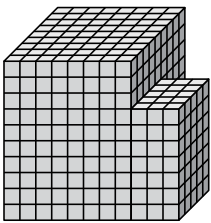
4. \_\_\_\_\_

5. \_\_\_\_\_

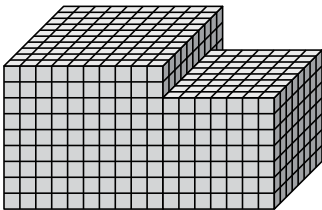
2)



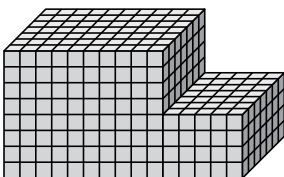
3)



4)



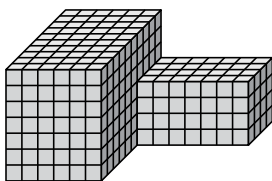
5)





Find the total volume of each figure. Measurement is in cm (not to scale).

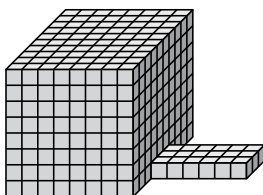
1)



$$6 \times 10 \times 7 = 420$$

$$7 \times 4 \times 4 = 112$$

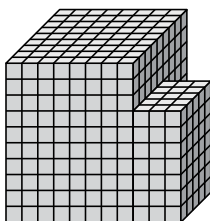
2)



$$8 \times 10 \times 8 = 640$$

$$6 \times 3 \times 1 = 18$$

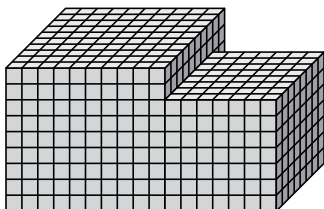
3)



$$8 \times 9 \times 10 = 720$$

$$3 \times 5 \times 7 = 105$$

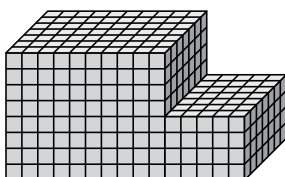
4)



$$10 \times 10 \times 9 = 900$$

$$7 \times 8 \times 7 = 392$$

5)



$$10 \times 7 \times 8 = 560$$

$$5 \times 7 \times 4 = 140$$

Answers

1. 532 cm<sup>3</sup>

2. 658 cm<sup>3</sup>

3. 825 cm<sup>3</sup>

4. 1292 cm<sup>3</sup>

5. 700 cm<sup>3</sup>