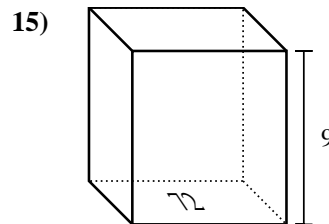
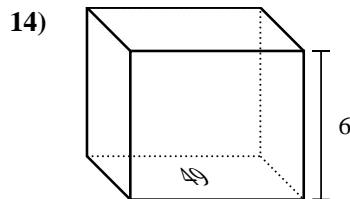
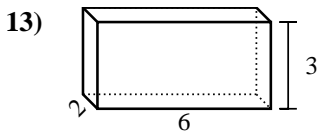
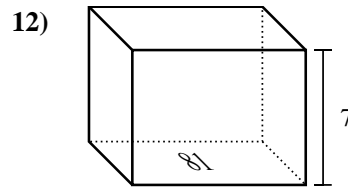
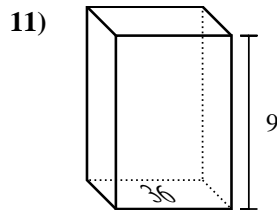
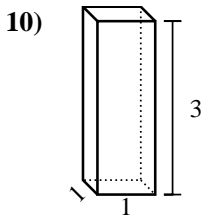
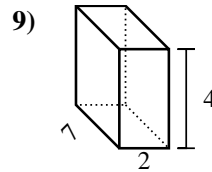
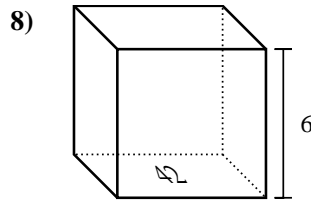
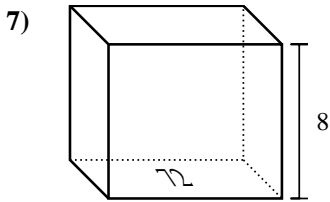
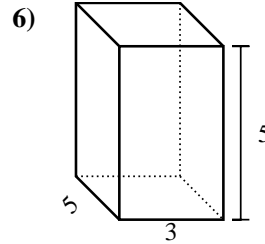
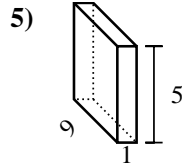
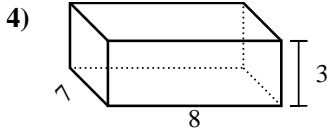
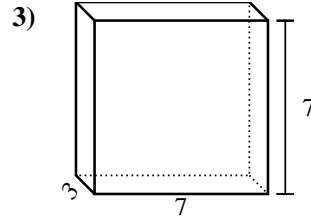
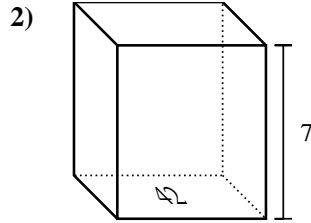
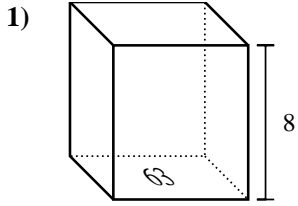




Find the volume of each rectangular prism. Units are in cm (not to scale). Remember $V = BH$ and $V = L \times W \times H$

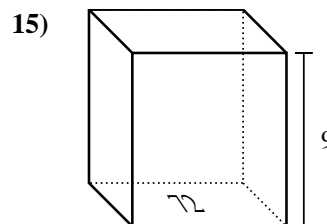
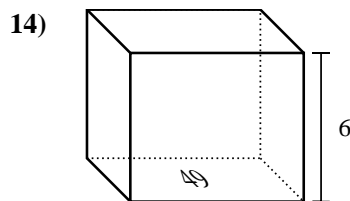
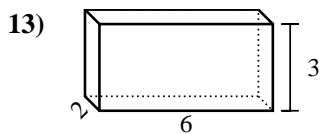
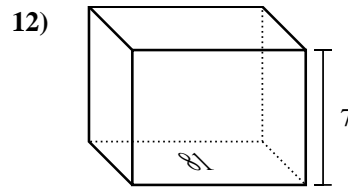
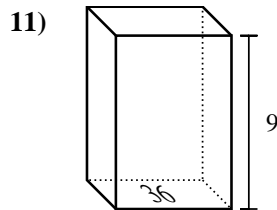
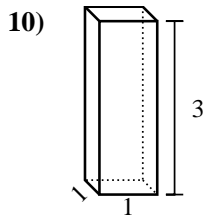
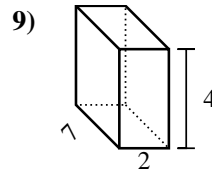
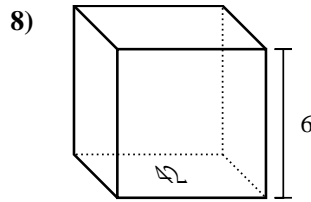
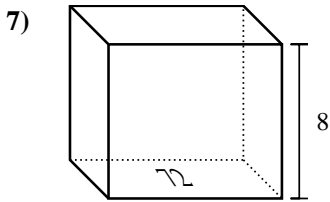
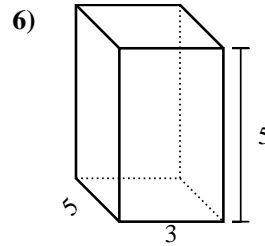
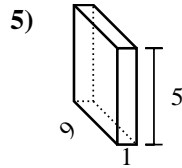
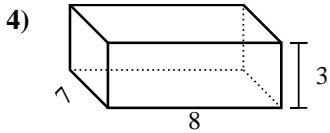
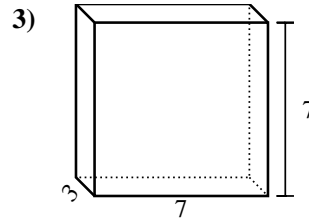
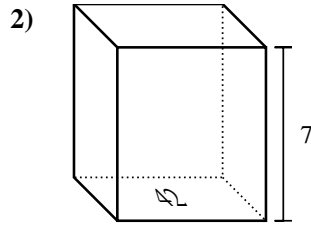
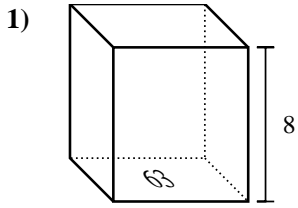
Answers



1. _____
2. _____
3. _____
4. _____
5. _____
6. _____
7. _____
8. _____
9. _____
10. _____
11. _____
12. _____
13. _____
14. _____
15. _____



Find the volume of each rectangular prism. Units are in cm (not to scale). Remember $V = BH$ and $V = L \times W \times H$



Answers

1. **504 cm³**

2. **294 cm³**

3. **147 cm³**

4. **168 cm³**

5. **45 cm³**

6. **75 cm³**

7. **576 cm³**

8. **252 cm³**

9. **56 cm³**

10. **3 cm³**

11. **324 cm³**

12. **567 cm³**

13. **36 cm³**

14. **294 cm³**

15. **648 cm³**