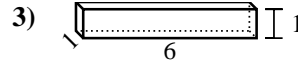
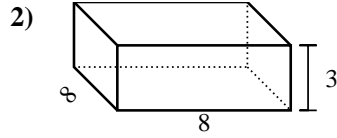
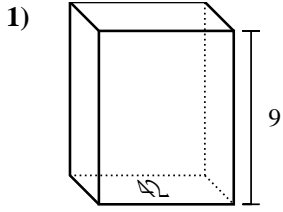




Find the volume of each rectangular prism. Units are in cm (not to scale). Remember $V = BH$ and $V = L \times W \times H$

Answers

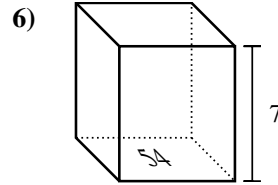
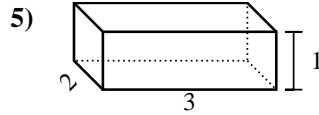
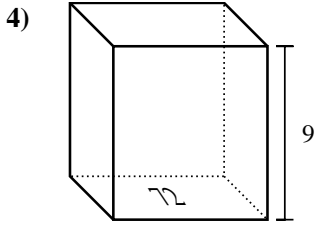


1. _____

2. _____

3. _____

4. _____

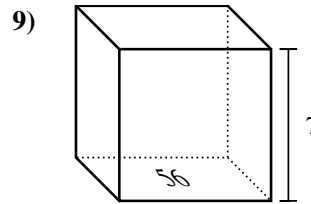
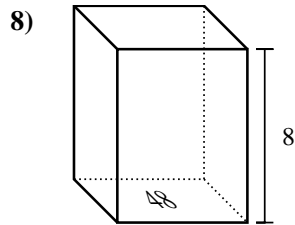
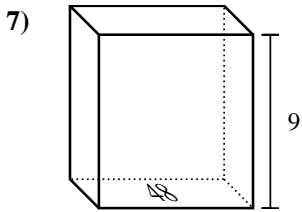


5. _____

6. _____

7. _____

8. _____

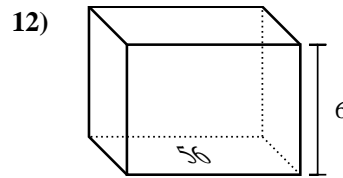
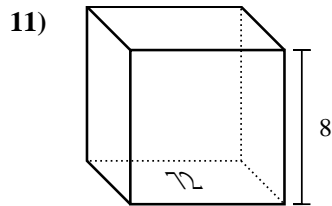
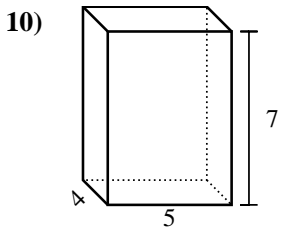


9. _____

10. _____

11. _____

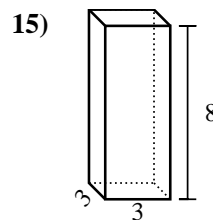
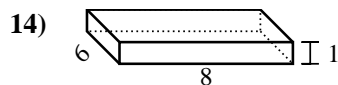
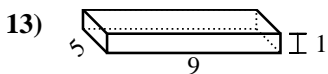
12. _____



13. _____

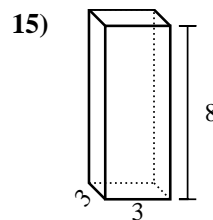
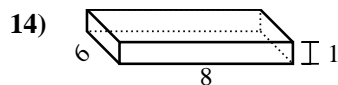
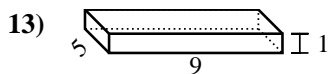
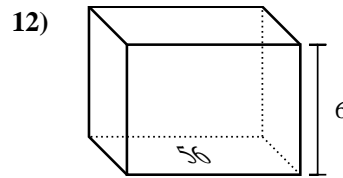
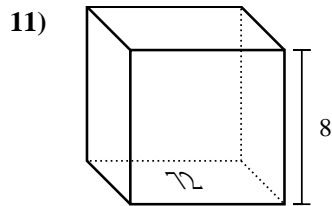
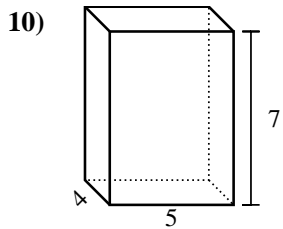
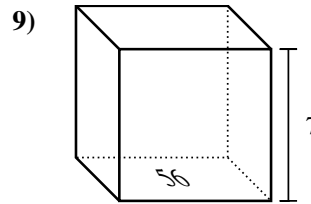
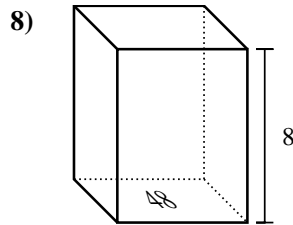
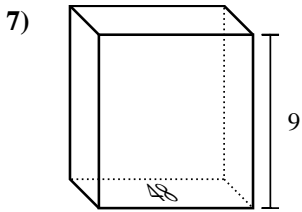
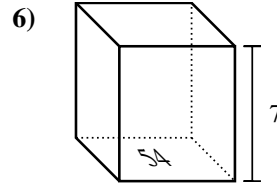
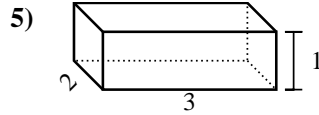
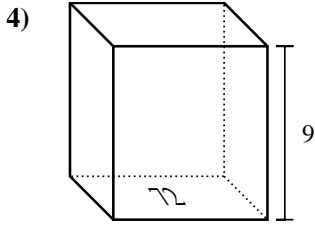
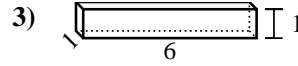
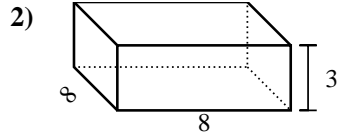
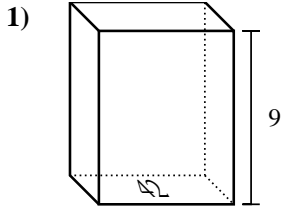
14. _____

15. _____





Find the volume of each rectangular prism. Units are in cm (not to scale). Remember $V = BH$ and $V = L \times W \times H$



Answers

1. **378 cm³**

2. **192 cm³**

3. **6 cm³**

4. **648 cm³**

5. **6 cm³**

6. **378 cm³**

7. **432 cm³**

8. **384 cm³**

9. **392 cm³**

10. **140 cm³**

11. **576 cm³**

12. **336 cm³**

13. **45 cm³**

14. **48 cm³**

15. **72 cm³**