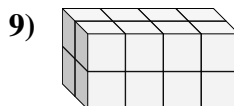
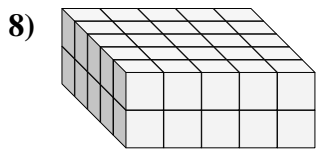
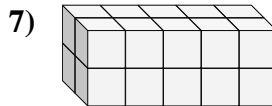
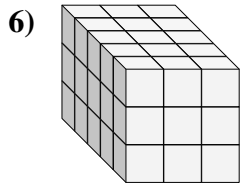
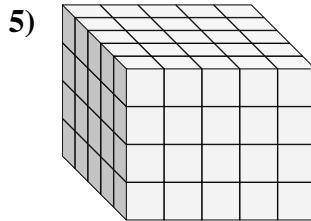
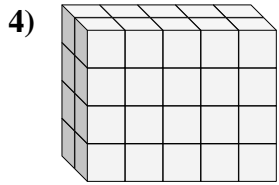
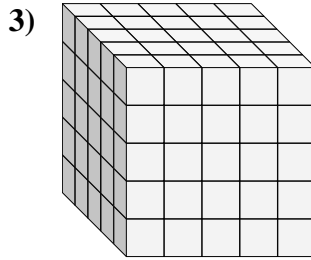
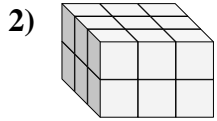
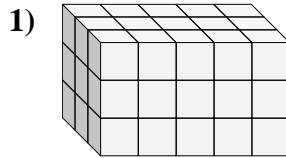
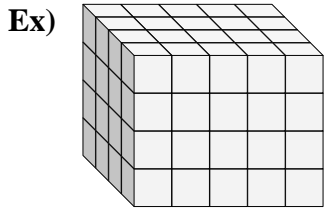




Find the length, width and height of the rectangular prism. Then find the volume.



Answers

Ex. 4 5 4 80

1. _____

2. _____

3. _____

4. _____

5. _____

6. _____

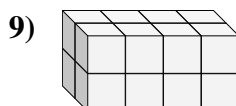
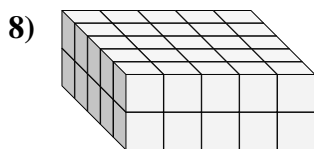
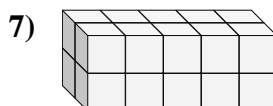
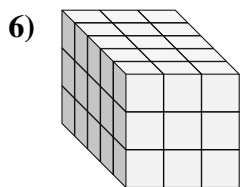
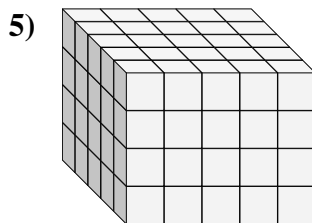
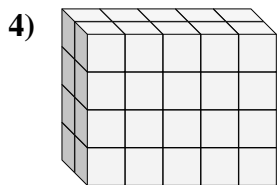
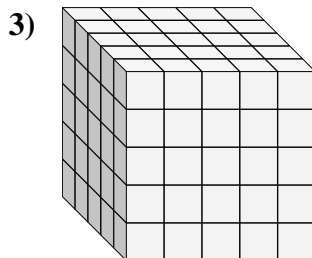
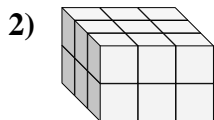
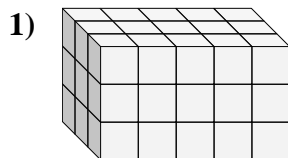
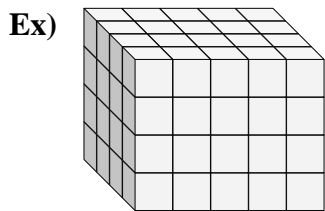
7. _____

8. _____

9. _____



Find the length, width and height of the rectangular prism. Then find the volume.



Answers

Ex. 4 5 4 80

1. 3 5 3 45

2. 3 3 2 18

3. 5 5 5 125

4. 2 5 4 40

5. 5 5 4 100

6. 5 3 3 45

7. 2 5 2 20

8. 5 5 2 50

9. 2 4 2 16