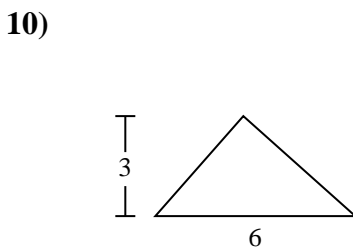
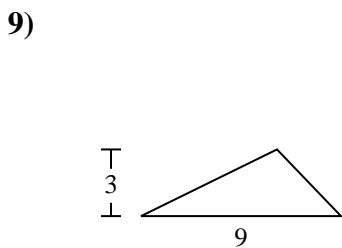
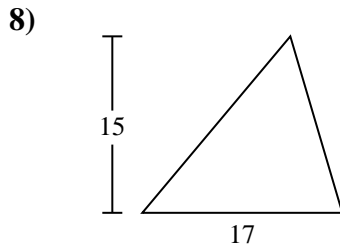
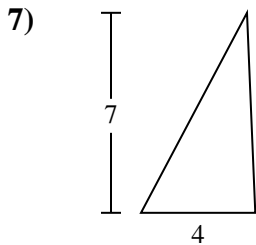
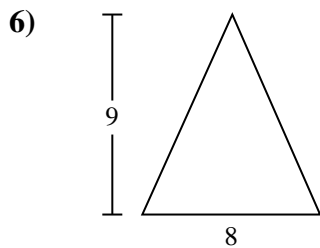
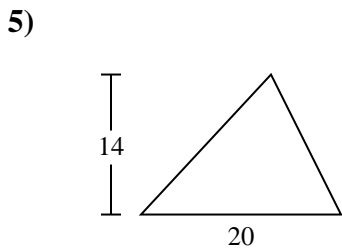
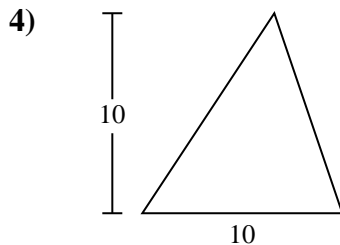
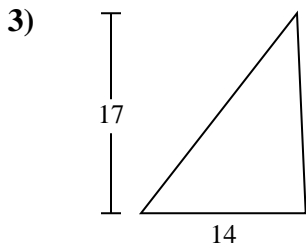
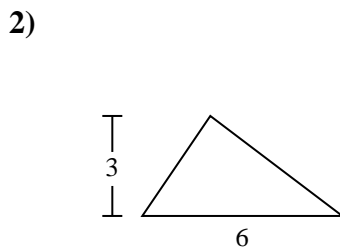
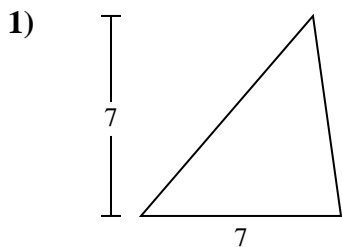




Find the area of the triangle. Round your answer to the nearest 10th.

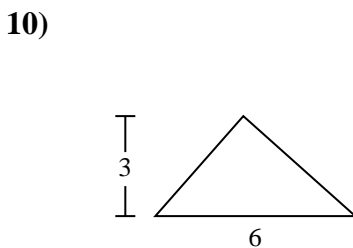
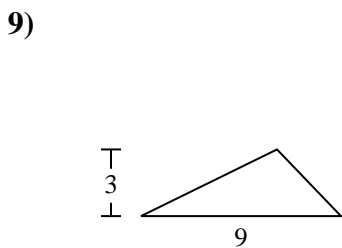
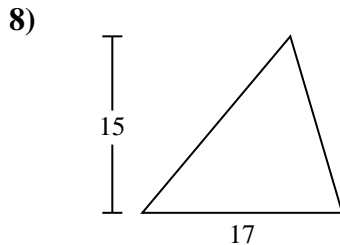
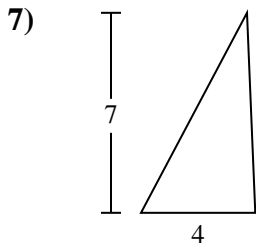
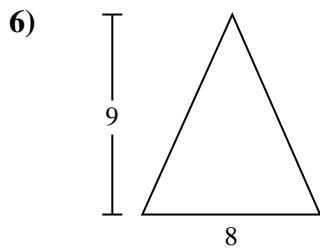
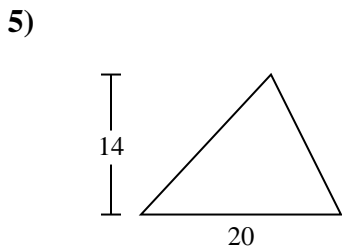
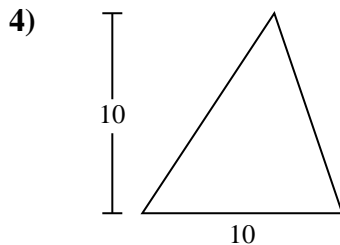
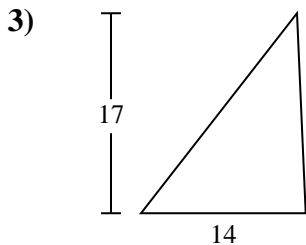
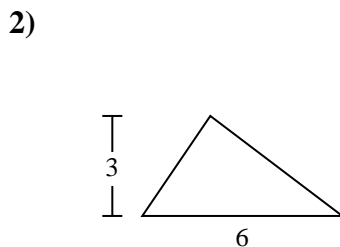
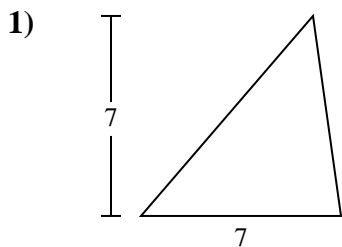


Answers

- 1. \_\_\_\_\_
- 2. \_\_\_\_\_
- 3. \_\_\_\_\_
- 4. \_\_\_\_\_
- 5. \_\_\_\_\_
- 6. \_\_\_\_\_
- 7. \_\_\_\_\_
- 8. \_\_\_\_\_
- 9. \_\_\_\_\_
- 10. \_\_\_\_\_



Find the area of the triangle. Round your answer to the nearest 10th.



Answers

1. 24.5

2. 9

3. 119

4. 50

5. 140

6. 36

7. 14

8. 127.5

9. 13.5

10. 9



Find the area of the triangle. Round your answer to the nearest 10th.

127.5

13.5

119

140

14

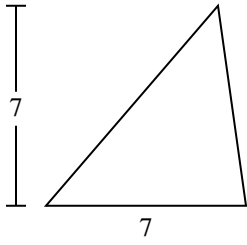
24.5

9

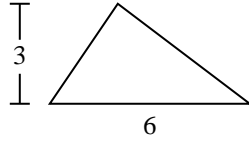
36

50

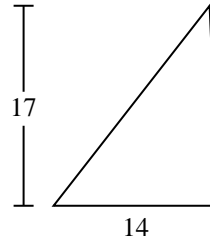
1)



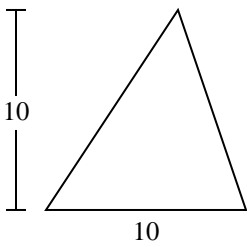
2)



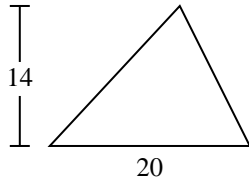
3)



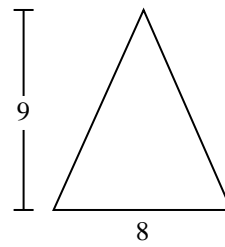
4)



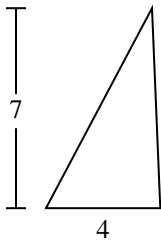
5)



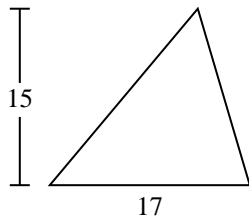
6)



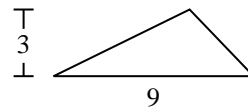
7)



8)



9)



Answers

1. \_\_\_\_\_
2. \_\_\_\_\_
3. \_\_\_\_\_
4. \_\_\_\_\_
5. \_\_\_\_\_
6. \_\_\_\_\_
7. \_\_\_\_\_
8. \_\_\_\_\_
9. \_\_\_\_\_