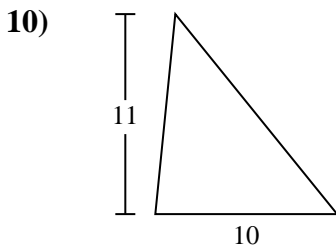
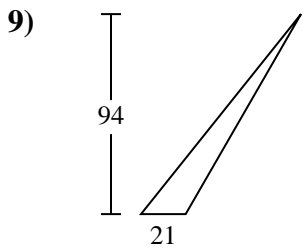
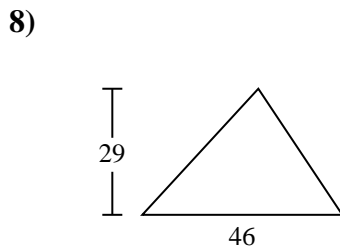
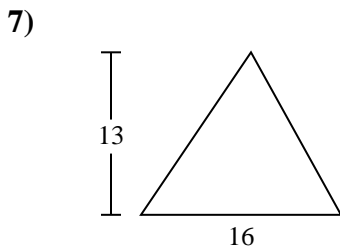
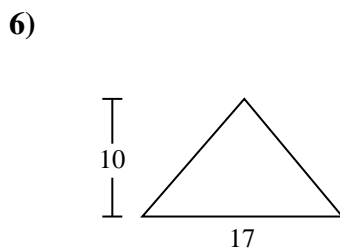
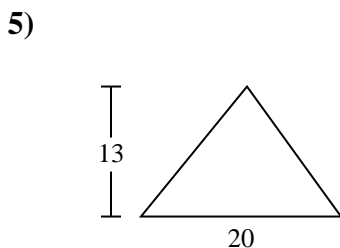
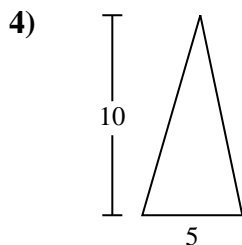
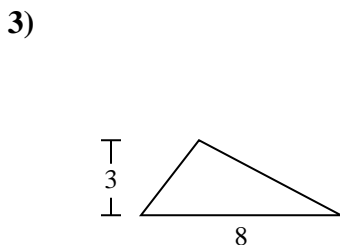
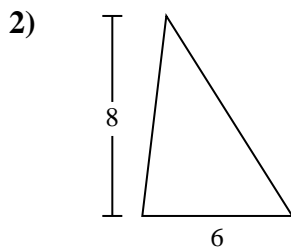
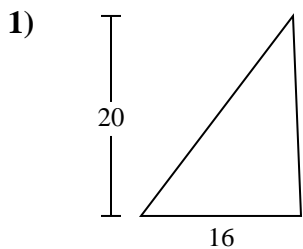




Find the area of the triangle. Round your answer to the nearest 10th.

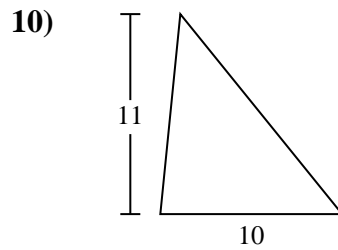
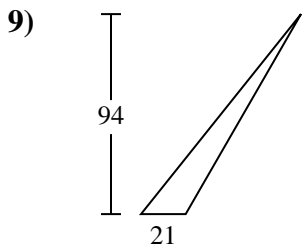
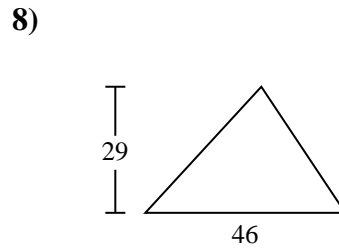
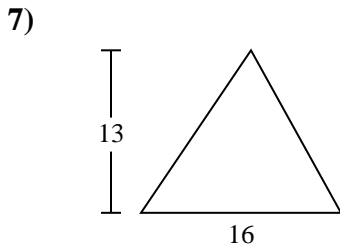
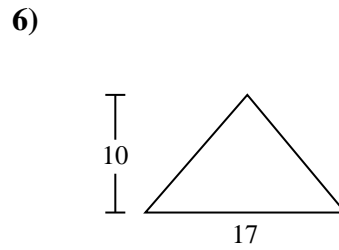
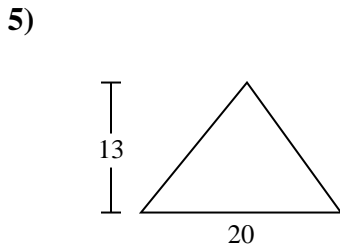
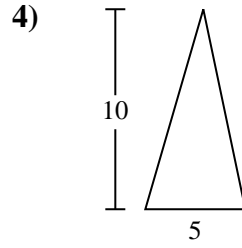
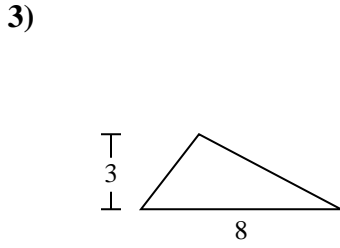
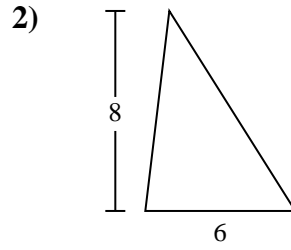
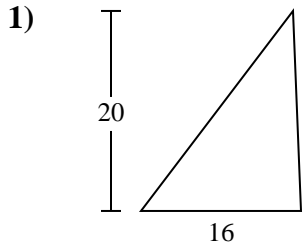


Answers

1. _____
2. _____
3. _____
4. _____
5. _____
6. _____
7. _____
8. _____
9. _____
10. _____



Find the area of the triangle. Round your answer to the nearest 10th.



Answers

- 1. 160
- 2. 24
- 3. 12
- 4. 25
- 5. 130
- 6. 85
- 7. 104
- 8. 667
- 9. 987
- 10. 55



Find the area of the triangle. Round your answer to the nearest 10th.

25	160	85	24	667
987	104	12	130	

Answers

1. _____
2. _____
3. _____
4. _____
5. _____
6. _____
7. _____
8. _____
9. _____

