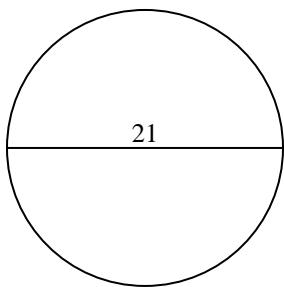


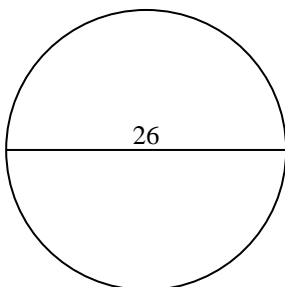


Find the circumference (in cm) of the circle. Circles are not to scale.

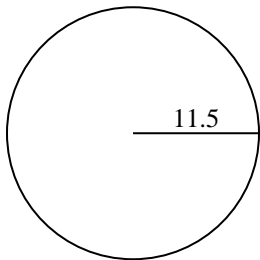
1)



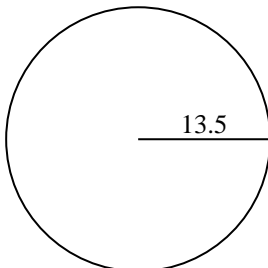
2)



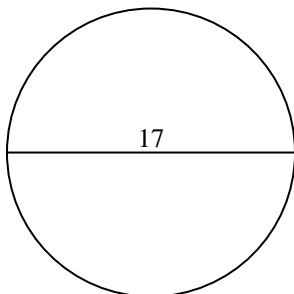
3)



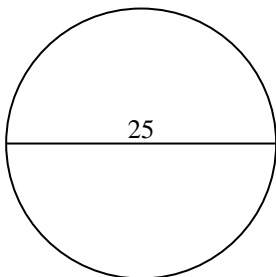
4)



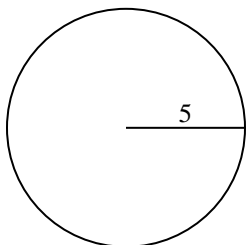
5)



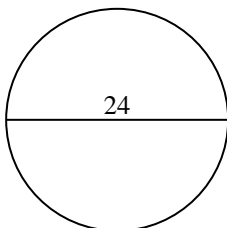
6)



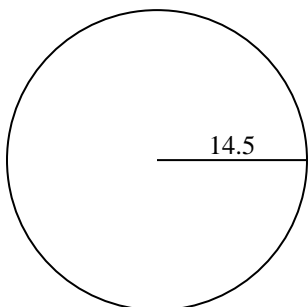
7)



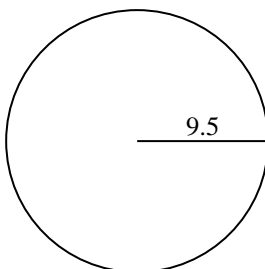
8)



9)



10)



Answers

1. _____

2. _____

3. _____

4. _____

5. _____

6. _____

7. _____

8. _____

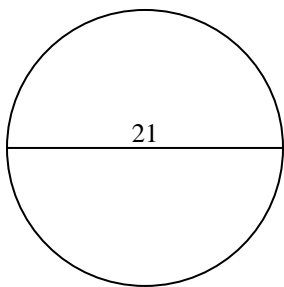
9. _____

10. _____

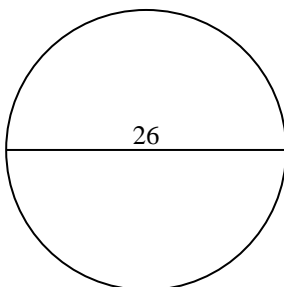


Find the circumference (in cm) of the circle. Circles are not to scale.

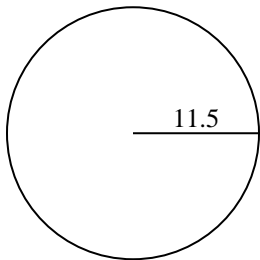
1)



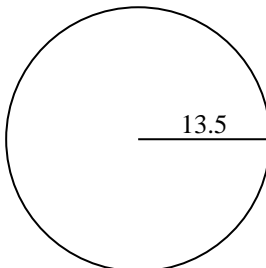
2)



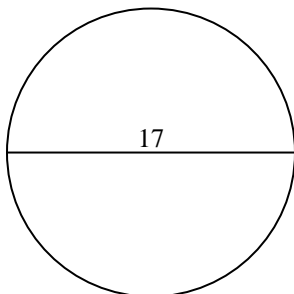
3)



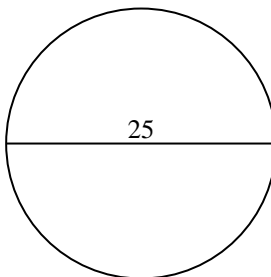
4)



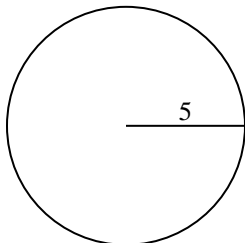
5)



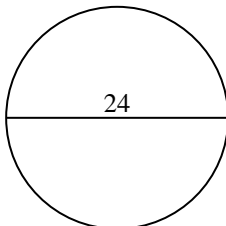
6)



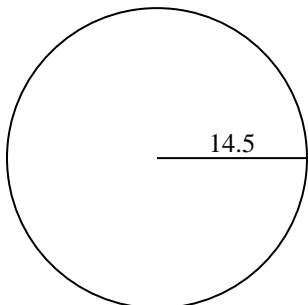
7)



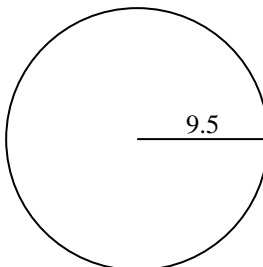
8)



9)



10)

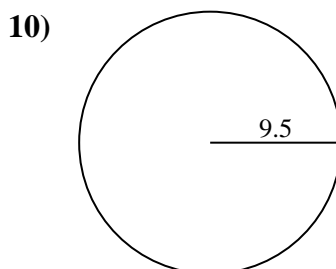
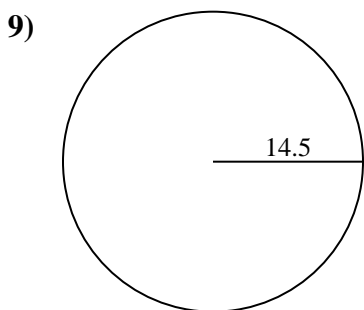
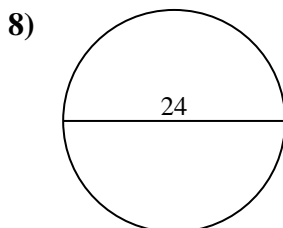
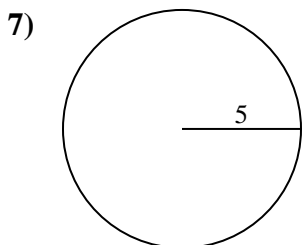
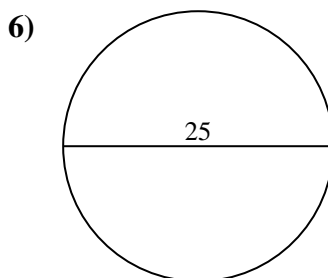
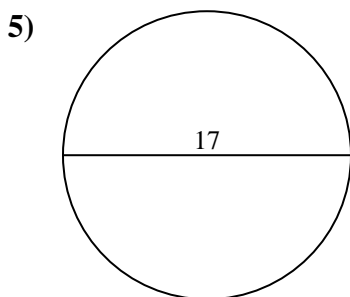
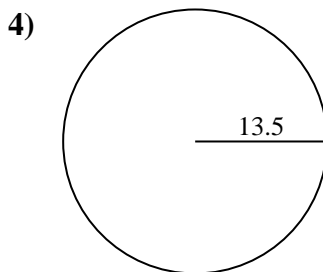
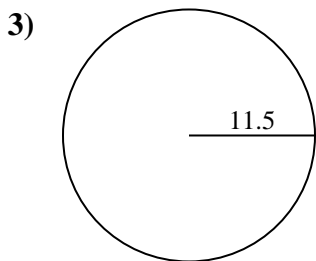
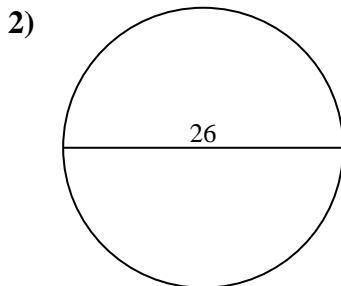
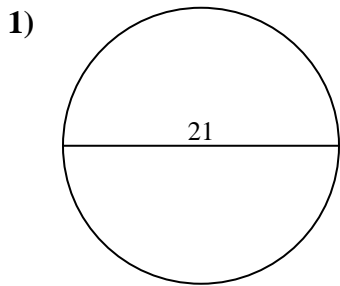
**Answers**

1. 65.97 cm
2. 81.68 cm
3. 72.26 cm
4. 84.82 cm
5. 53.41 cm
6. 78.54 cm
7. 31.42 cm
8. 75.4 cm
9. 91.11 cm
10. 59.69 cm



Find the circumference (in cm) of the circle. Circles are not to scale.

- | | | | | |
|----------|----------|----------|----------|----------|
| 84.82 cm | 78.54 cm | 53.41 cm | 65.97 cm | 91.11 cm |
| 72.26 cm | 31.42 cm | 75.4 cm | 59.69 cm | 81.68 cm |



Answers

1. _____
2. _____
3. _____
4. _____
5. _____
6. _____
7. _____
8. _____
9. _____
10. _____