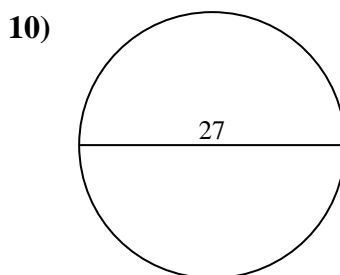
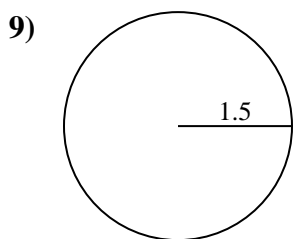
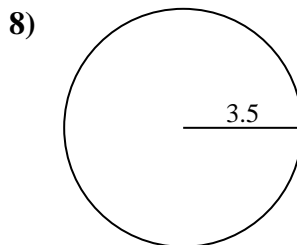
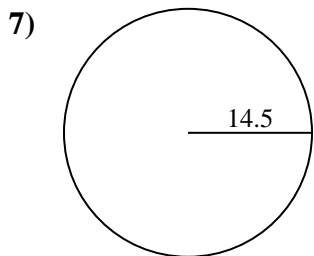
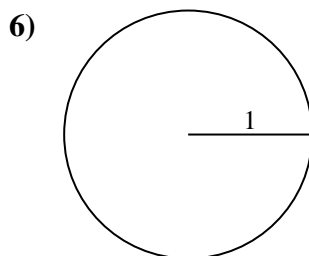
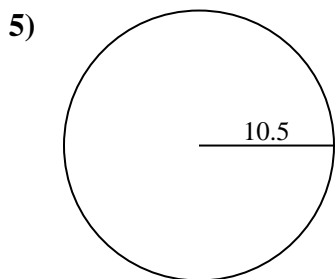
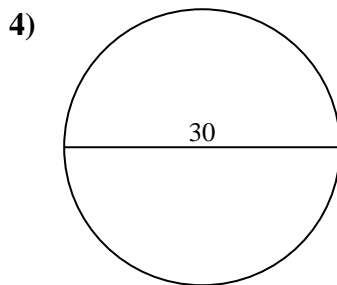
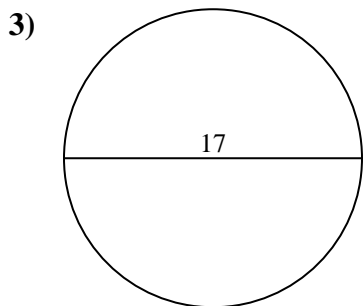
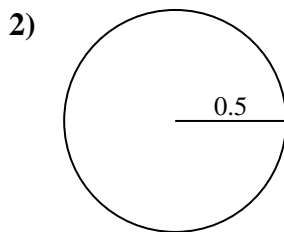
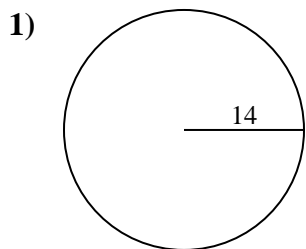




Find the circumference (in cm) of the circle. Circles are not to scale.

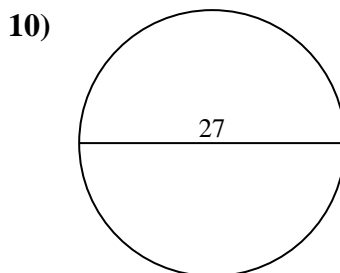
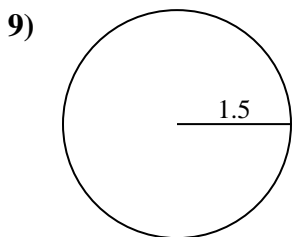
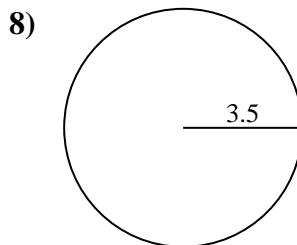
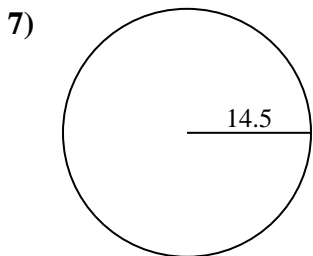
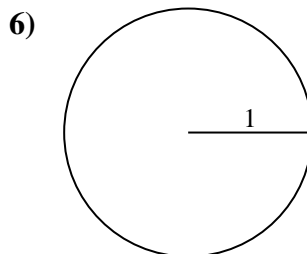
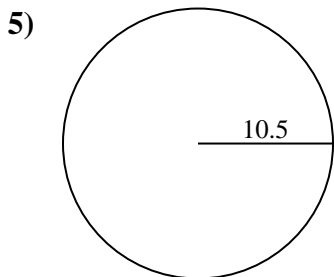
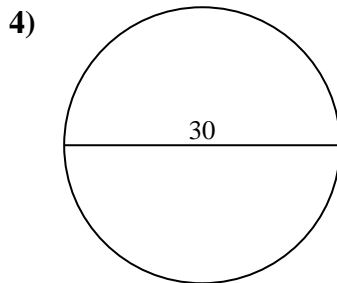
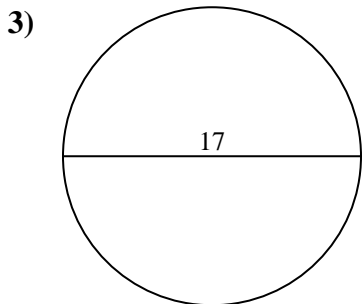
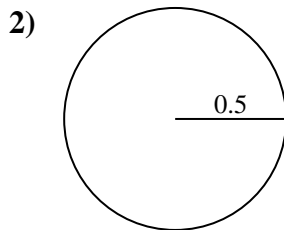
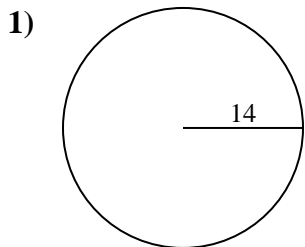


Answers

- 1. _____
- 2. _____
- 3. _____
- 4. _____
- 5. _____
- 6. _____
- 7. _____
- 8. _____
- 9. _____
- 10. _____



Find the circumference (in cm) of the circle. Circles are not to scale.

**Answers**

1. 87.96 cm
2. 3.14 cm
3. 53.41 cm
4. 94.25 cm
5. 65.97 cm
6. 6.28 cm
7. 91.11 cm
8. 21.99 cm
9. 9.42 cm
10. 84.82 cm



Find the circumference (in cm) of the circle. Circles are not to scale.

21.99 cm

6.28 cm

94.25 cm

53.41 cm

9.42 cm

3.14 cm

87.96 cm

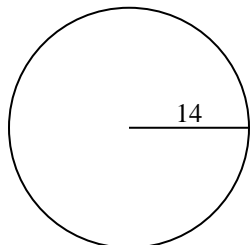
84.82 cm

65.97 cm

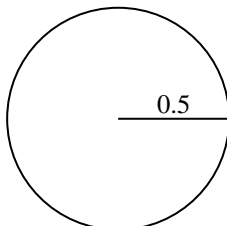
91.11 cm

Answers

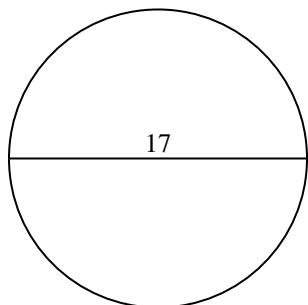
1)



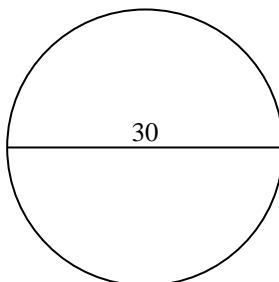
2)



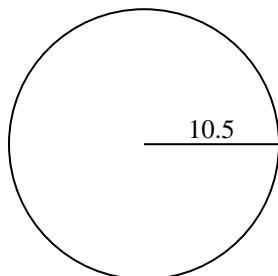
3)



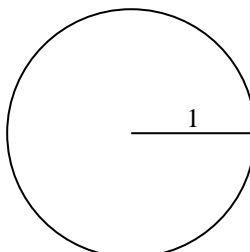
4)



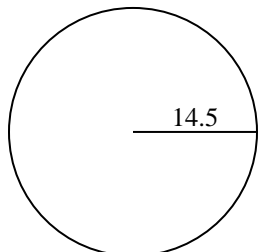
5)



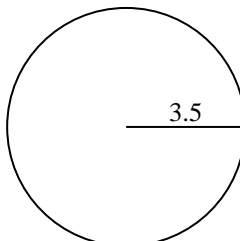
6)



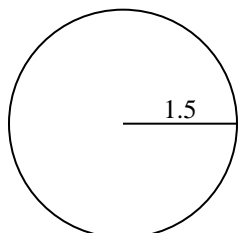
7)



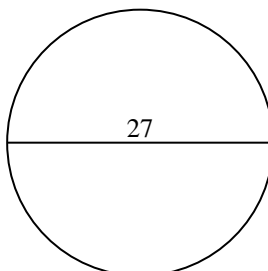
8)



9)



10)



- 1. _____
- 2. _____
- 3. _____
- 4. _____
- 5. _____
- 6. _____
- 7. _____
- 8. _____
- 9. _____
- 10. _____