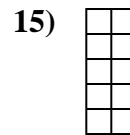
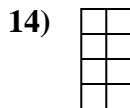
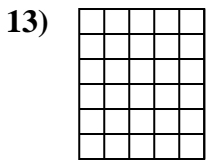
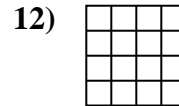
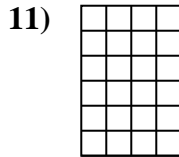
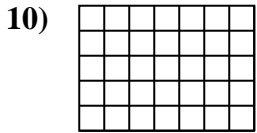
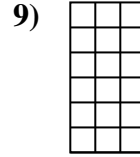

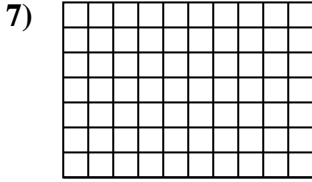
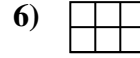
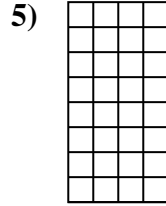
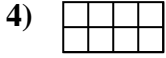
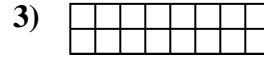
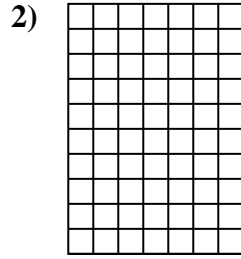
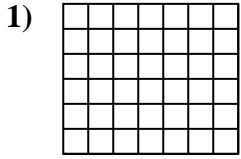




Determine the area. Each **SVGREPLACE** = 1 square unit ( $u^2$ ).



**Answers**

1. \_\_\_\_\_

2. \_\_\_\_\_

3. \_\_\_\_\_

4. \_\_\_\_\_

5. \_\_\_\_\_

6. \_\_\_\_\_

7. \_\_\_\_\_

8. \_\_\_\_\_

9. \_\_\_\_\_

10. \_\_\_\_\_

11. \_\_\_\_\_

12. \_\_\_\_\_

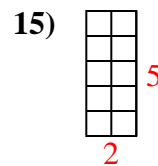
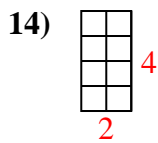
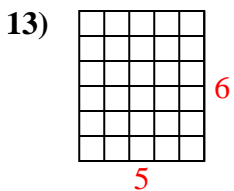
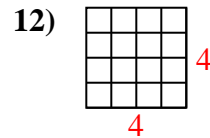
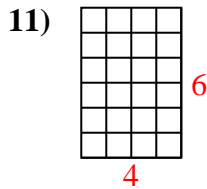
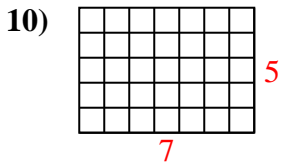
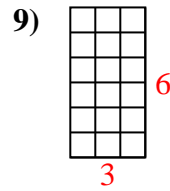
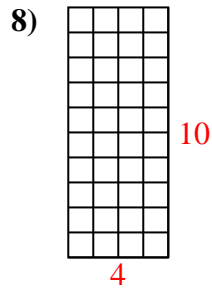
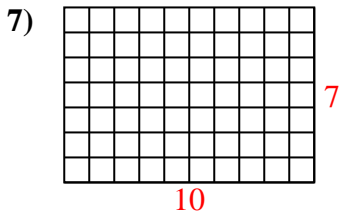
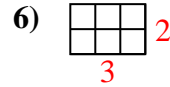
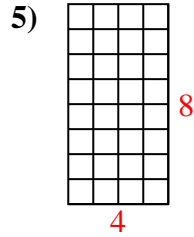
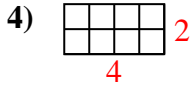
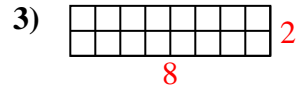
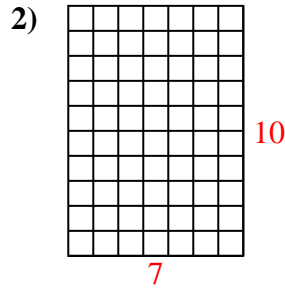
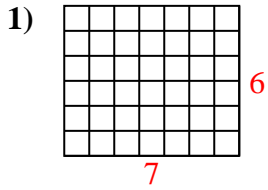
13. \_\_\_\_\_

14. \_\_\_\_\_

15. \_\_\_\_\_



Determine the area. Each **SVGREPLACE** = 1 square unit ( $u^2$ ).



Answers

1. 42  $u^2$

2. 70  $u^2$

3. 16  $u^2$

4. 8  $u^2$

5. 32  $u^2$

6. 6  $u^2$

7. 70  $u^2$

8. 40  $u^2$

9. 18  $u^2$

10. 35  $u^2$

11. 24  $u^2$

12. 16  $u^2$

13. 30  $u^2$

14. 8  $u^2$

15. 10  $u^2$