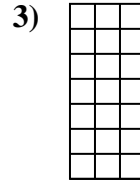
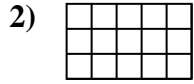





Determine the area. Each **SVGREPLACE** = 1 square unit ( $u^2$ ).


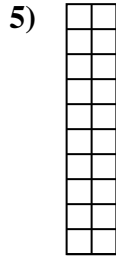
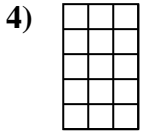
**Answers**



1. \_\_\_\_\_

2. \_\_\_\_\_

3. \_\_\_\_\_

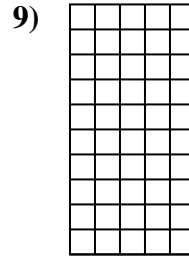
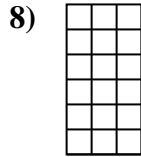
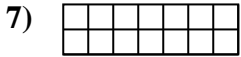


4. \_\_\_\_\_

5. \_\_\_\_\_

6. \_\_\_\_\_

7. \_\_\_\_\_

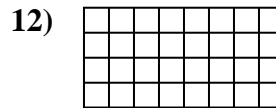
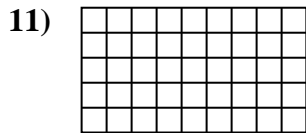
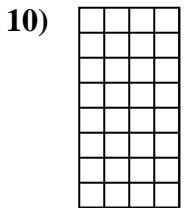


8. \_\_\_\_\_

9. \_\_\_\_\_

10. \_\_\_\_\_

11. \_\_\_\_\_

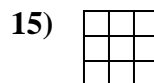
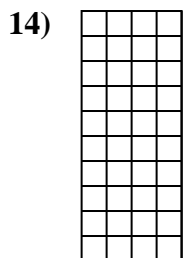
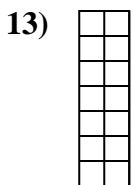


12. \_\_\_\_\_

13. \_\_\_\_\_

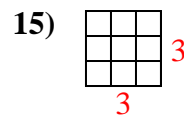
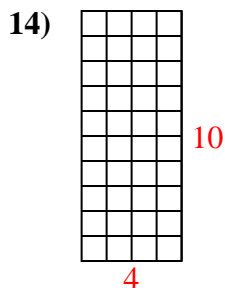
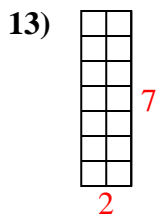
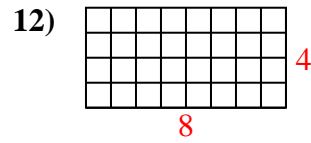
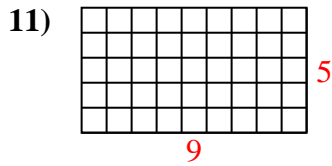
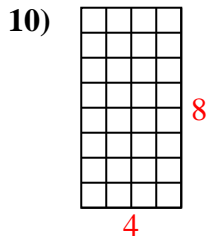
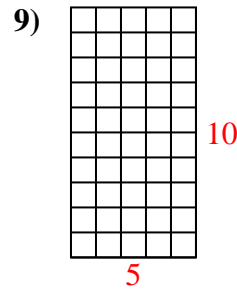
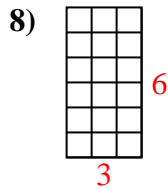
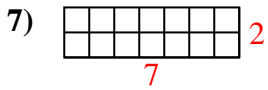
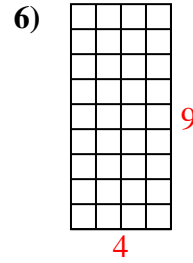
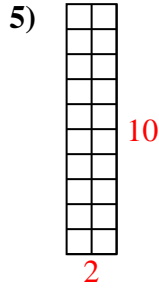
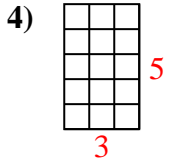
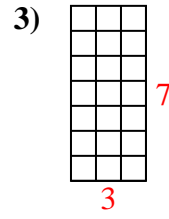
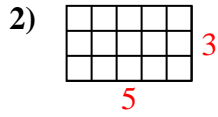
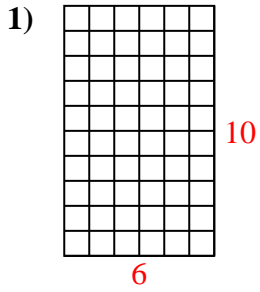
14. \_\_\_\_\_

15. \_\_\_\_\_





Determine the area. Each **SVGREPLACE** = 1 square unit ( $u^2$ ).



Answers

1. 60  $u^2$

2. 15  $u^2$

3. 21  $u^2$

4. 15  $u^2$

5. 20  $u^2$

6. 36  $u^2$

7. 14  $u^2$

8. 18  $u^2$

9. 50  $u^2$

10. 32  $u^2$

11. 45  $u^2$

12. 32  $u^2$

13. 14  $u^2$

14. 40  $u^2$

15. 9  $u^2$