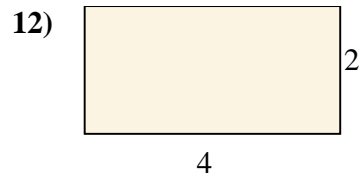
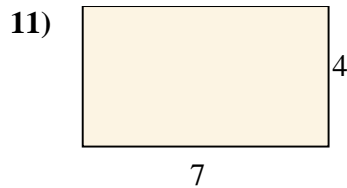
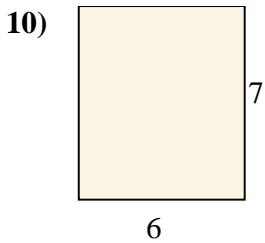
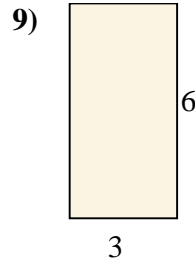
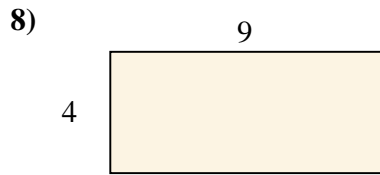
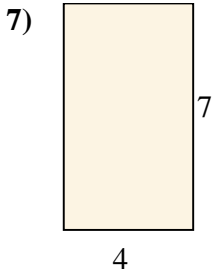
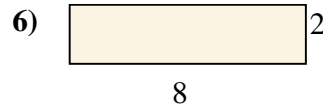
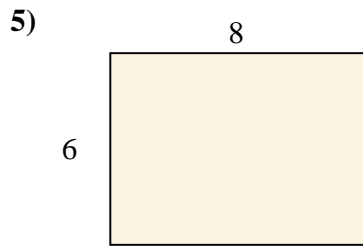
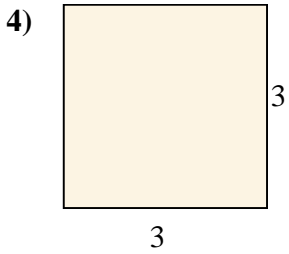

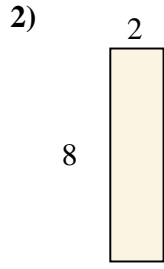
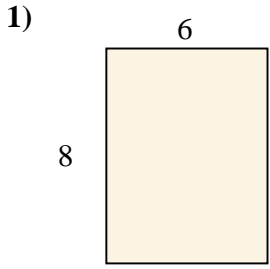




Find the area (in cm) of the rectangle shown.

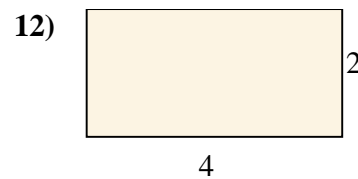
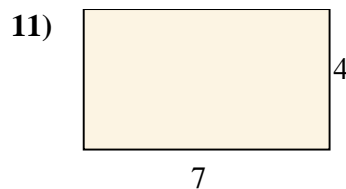
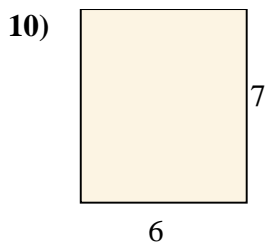
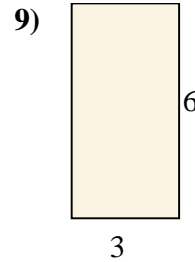
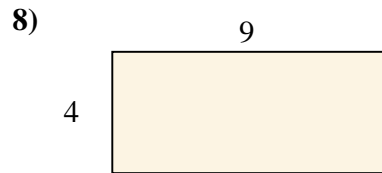
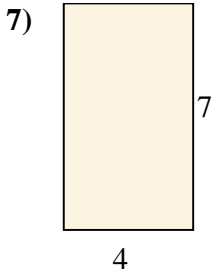
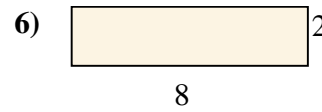
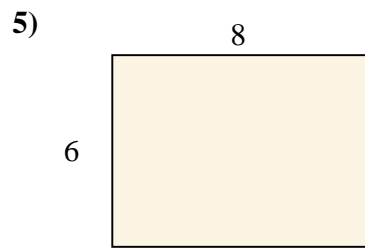
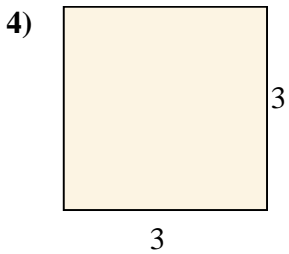
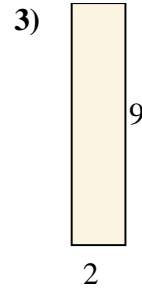
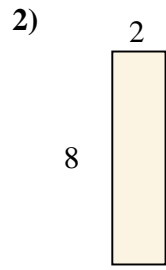
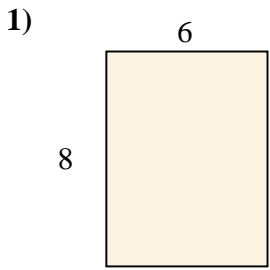
**Answers**



- 1. \_\_\_\_\_
- 2. \_\_\_\_\_
- 3. \_\_\_\_\_
- 4. \_\_\_\_\_
- 5. \_\_\_\_\_
- 6. \_\_\_\_\_
- 7. \_\_\_\_\_
- 8. \_\_\_\_\_
- 9. \_\_\_\_\_
- 10. \_\_\_\_\_
- 11. \_\_\_\_\_
- 12. \_\_\_\_\_



Find the area (in cm) of the rectangle shown.



Answers

1. 48

2. 16

3. 18

4. 9

5. 48

6. 16

7. 28

8. 36

9. 18

10. 42

11. 28

12. 8