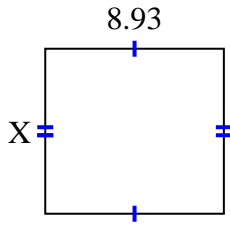


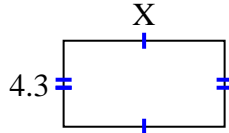


Find the value of X for each figure. Each figure is in centimeters (cm). Not to scale.

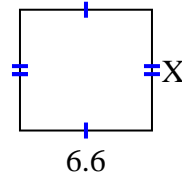
1) area = 73.6725 cm^2



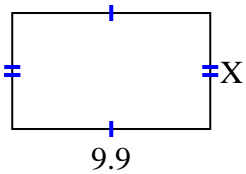
2) area = 34.615 cm^2



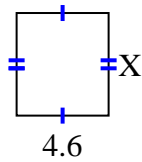
3) area = 39.864 cm^2



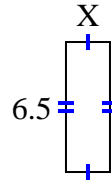
4) area = 57.42 cm^2



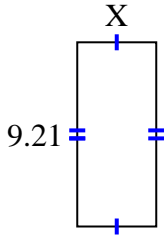
5) area = 23.598 cm^2



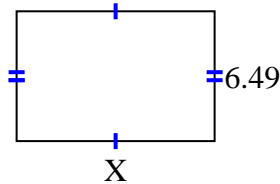
6) area = 14.3 cm^2



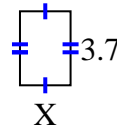
7) area = 36.3795 cm^2



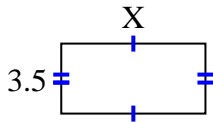
8) area = 64.251 cm^2



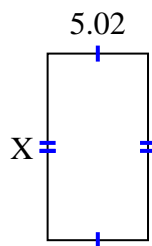
9) area = 9.361 cm^2



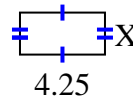
10) area = 25.235 cm^2



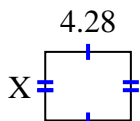
11) area = 46.8366 cm^2



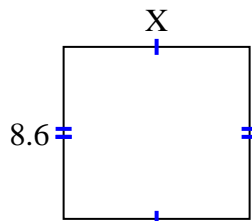
12) area = 8.925 cm^2



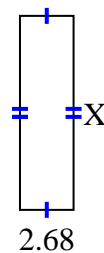
13) area = 14.6804 cm^2



14) area = 79.98 cm^2



15) area = 25.996 cm^2



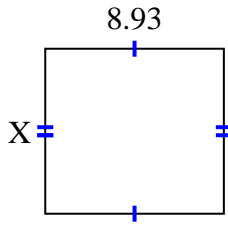
Answers

1. _____
2. _____
3. _____
4. _____
5. _____
6. _____
7. _____
8. _____
9. _____
10. _____
11. _____
12. _____
13. _____
14. _____
15. _____

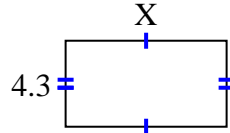


Find the value of X for each figure. Each figure is in centimeters (cm). Not to scale.

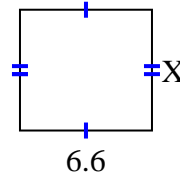
1) area = 73.6725 cm^2



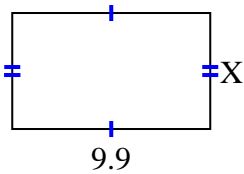
2) area = 34.615 cm^2



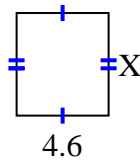
3) area = 39.864 cm^2



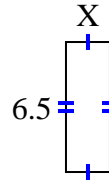
4) area = 57.42 cm^2



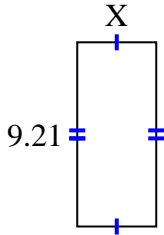
5) area = 23.598 cm^2



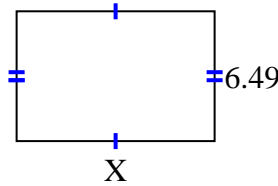
6) area = 14.3 cm^2



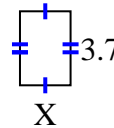
7) area = 36.3795 cm^2



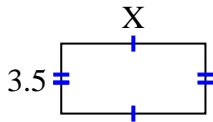
8) area = 64.251 cm^2



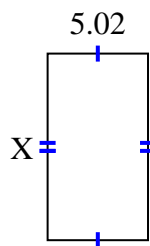
9) area = 9.361 cm^2



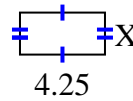
10) area = 25.235 cm^2



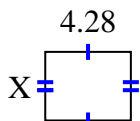
11) area = 46.8366 cm^2



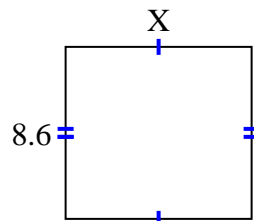
12) area = 8.925 cm^2



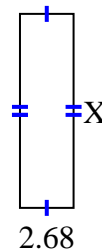
13) area = 14.6804 cm^2



14) area = 79.98 cm^2



15) area = 25.996 cm^2



Answers

1. 8.25

2. 8.05

3. 6.04

4. 5.8

5. 5.13

6. 2.2

7. 3.95

8. 9.9

9. 2.53

10. 7.21

11. 9.33

12. 2.1

13. 3.43

14. 9.3

15. 9.7