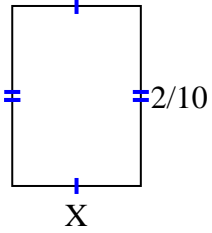


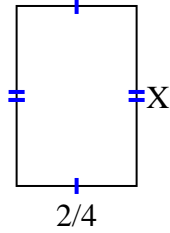


Find the value of X for each figure. Each figure is in centimeters (cm). Not to scale.

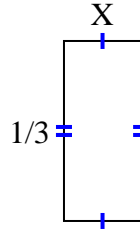
1) area = $\frac{2}{70} \text{ cm}^2$



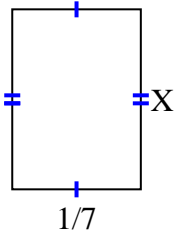
2) area = $\frac{12}{32} \text{ cm}^2$



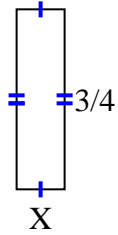
3) area = $\frac{1}{21} \text{ cm}^2$



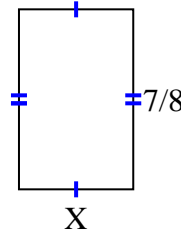
4) area = $\frac{2}{70} \text{ cm}^2$



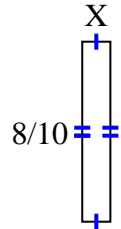
5) area = $\frac{3}{20} \text{ cm}^2$



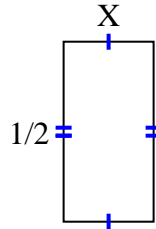
6) area = $\frac{35}{72} \text{ cm}^2$



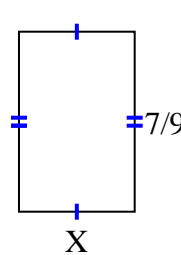
7) area = $\frac{8}{80} \text{ cm}^2$



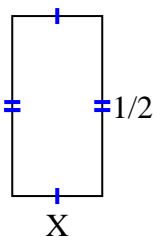
8) area = $\frac{2}{16} \text{ cm}^2$



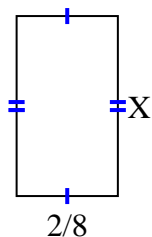
9) area = $\frac{14}{36} \text{ cm}^2$



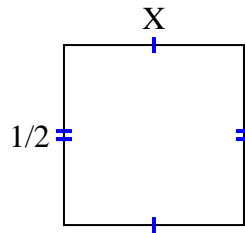
10) area = $\frac{1}{8} \text{ cm}^2$



11) area = $\frac{8}{72} \text{ cm}^2$



12) area = $\frac{1}{4} \text{ cm}^2$



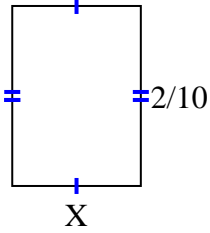
Answers

1. _____
2. _____
3. _____
4. _____
5. _____
6. _____
7. _____
8. _____
9. _____
10. _____
11. _____
12. _____

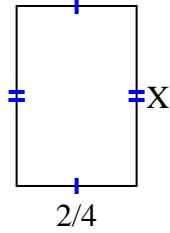


Find the value of X for each figure. Each figure is in centimeters (cm). Not to scale.

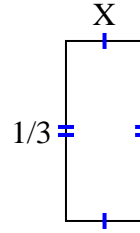
1) area = $\frac{2}{70}$ cm²



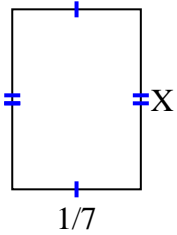
2) area = $\frac{12}{32}$ cm²



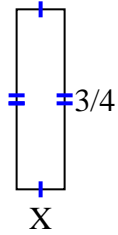
3) area = $\frac{1}{21}$ cm²



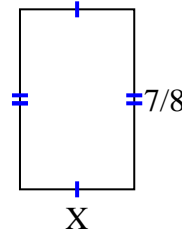
4) area = $\frac{2}{70}$ cm²



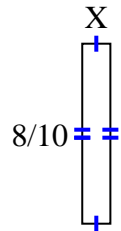
5) area = $\frac{3}{20}$ cm²



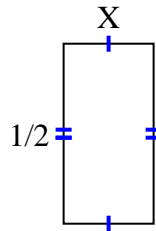
6) area = $\frac{35}{72}$ cm²



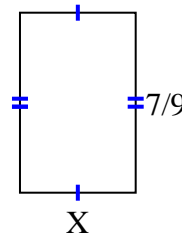
7) area = $\frac{8}{80}$ cm²



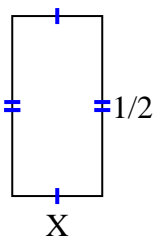
8) area = $\frac{2}{16}$ cm²



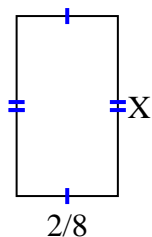
9) area = $\frac{14}{36}$ cm²



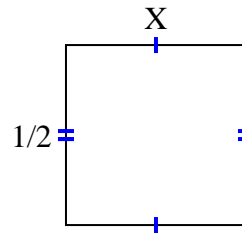
10) area = $\frac{1}{8}$ cm²



11) area = $\frac{8}{72}$ cm²



12) area = $\frac{1}{4}$ cm²



Answers

1. $\frac{1}{7}$
2. $\frac{6}{8}$
3. $\frac{1}{7}$
4. $\frac{2}{10}$
5. $\frac{1}{5}$
6. $\frac{5}{9}$
7. $\frac{1}{8}$
8. $\frac{2}{8}$
9. $\frac{2}{4}$
10. $\frac{1}{4}$
11. $\frac{4}{9}$
12. $\frac{1}{2}$