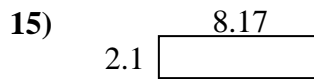

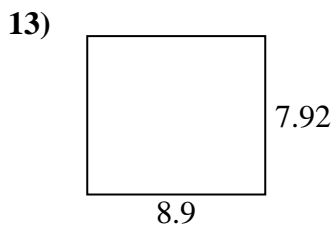
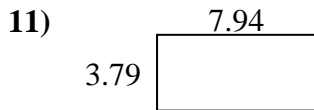
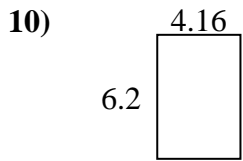
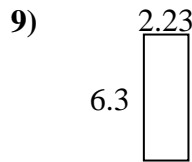
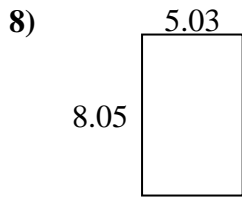
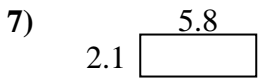
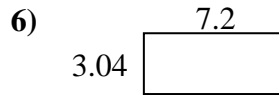
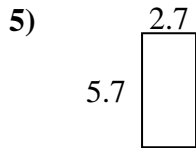
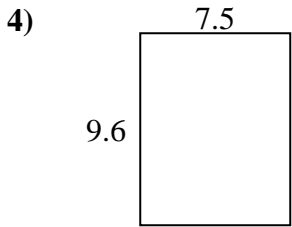
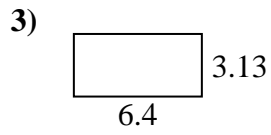
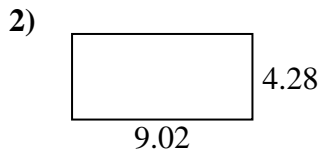




Find the perimeter and area of each figure. Answer to the nearest 10th.

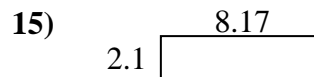
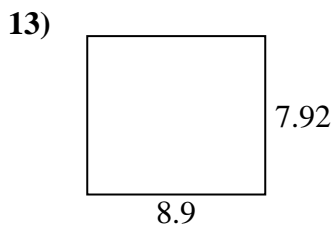
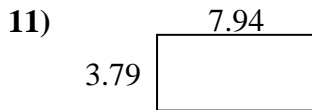
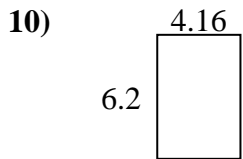
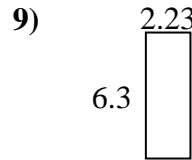
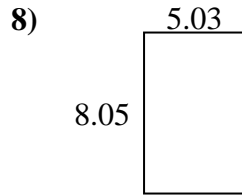
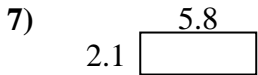
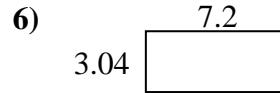
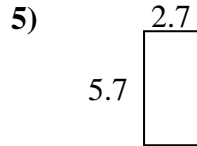
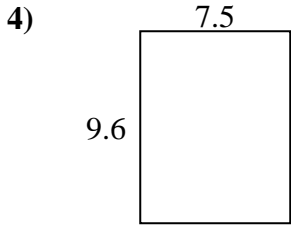
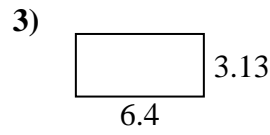
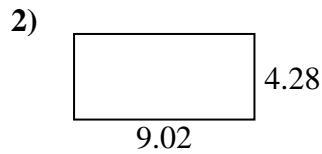


Answers

1. _____
2. _____
3. _____
4. _____
5. _____
6. _____
7. _____
8. _____
9. _____
10. _____
11. _____
12. _____
13. _____
14. _____
15. _____



Find the perimeter and area of each figure. Answer to the nearest 10th.



Answers

| | | |
|-----|-------------|-------------|
| 1. | <u>30.7</u> | <u>25.2</u> |
| 2. | <u>38.6</u> | <u>26.6</u> |
| 3. | <u>20.0</u> | <u>19.1</u> |
| 4. | <u>72.0</u> | <u>34.2</u> |
| 5. | <u>15.4</u> | <u>16.8</u> |
| 6. | <u>21.9</u> | <u>20.5</u> |
| 7. | <u>12.2</u> | <u>15.8</u> |
| 8. | <u>40.5</u> | <u>26.2</u> |
| 9. | <u>14.0</u> | <u>17.1</u> |
| 10. | <u>25.8</u> | <u>20.7</u> |
| 11. | <u>30.1</u> | <u>23.5</u> |
| 12. | <u>8.0</u> | <u>11.5</u> |
| 13. | <u>70.5</u> | <u>33.6</u> |
| 14. | <u>25.6</u> | <u>22.1</u> |
| 15. | <u>17.2</u> | <u>20.5</u> |