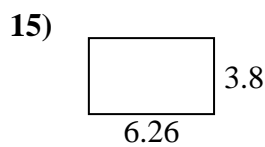
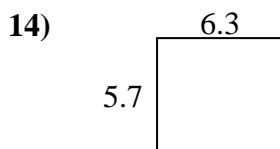

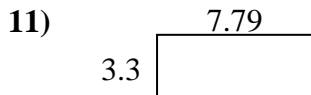
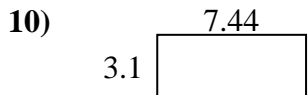
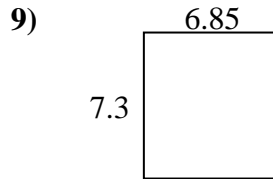
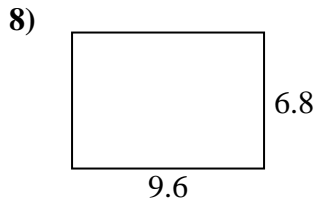
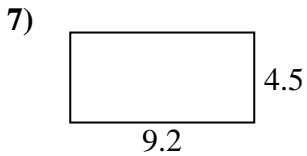
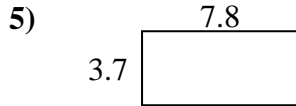
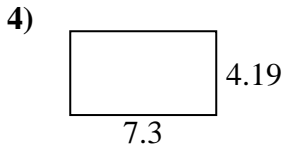
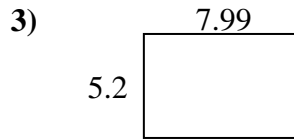
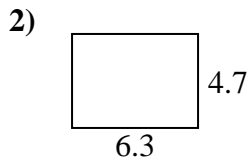
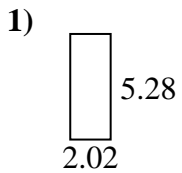




Find the perimeter and area of each figure. Answer to the nearest 10th.

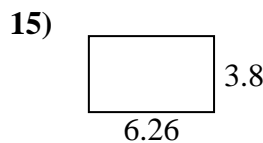
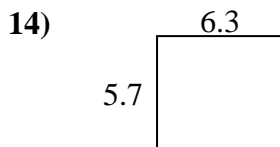
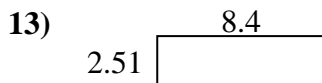
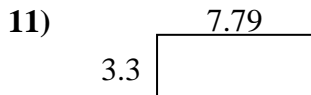
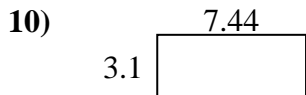
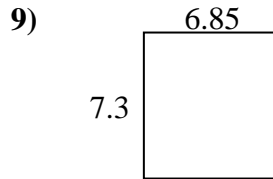
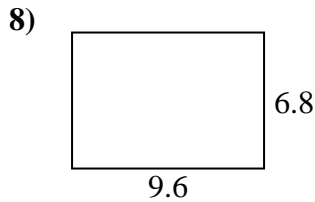
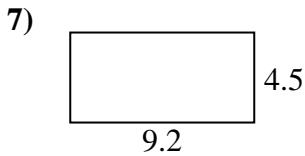
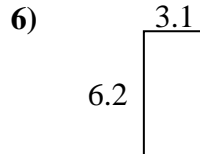
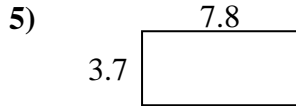
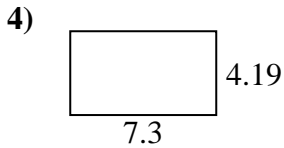
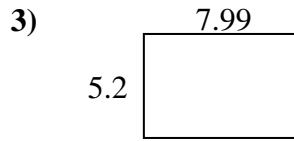
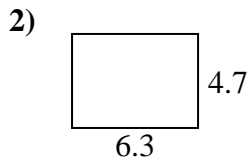
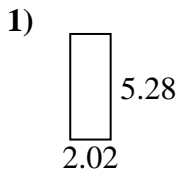
Answers



1. \_\_\_\_\_
2. \_\_\_\_\_
3. \_\_\_\_\_
4. \_\_\_\_\_
5. \_\_\_\_\_
6. \_\_\_\_\_
7. \_\_\_\_\_
8. \_\_\_\_\_
9. \_\_\_\_\_
10. \_\_\_\_\_
11. \_\_\_\_\_
12. \_\_\_\_\_
13. \_\_\_\_\_
14. \_\_\_\_\_
15. \_\_\_\_\_



Find the perimeter and area of each figure. Answer to the nearest 10th.



Answers

1.	<u>10.7</u>	<u>14.6</u>
2.	<u>29.6</u>	<u>22.0</u>
3.	<u>41.5</u>	<u>26.4</u>
4.	<u>30.6</u>	<u>23.0</u>
5.	<u>28.9</u>	<u>23.0</u>
6.	<u>19.2</u>	<u>18.6</u>
7.	<u>41.4</u>	<u>27.4</u>
8.	<u>65.3</u>	<u>32.8</u>
9.	<u>50.0</u>	<u>28.3</u>
10.	<u>23.1</u>	<u>21.1</u>
11.	<u>25.7</u>	<u>22.2</u>
12.	<u>35.6</u>	<u>26.0</u>
13.	<u>21.1</u>	<u>21.8</u>
14.	<u>35.9</u>	<u>24.0</u>
15.	<u>23.8</u>	<u>20.1</u>