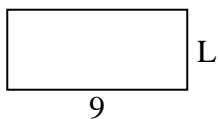


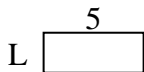


Determine the value of 'L'.

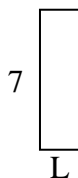
1) Area =  $36u^2$



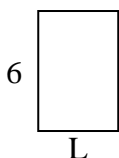
2) Area =  $10u^2$



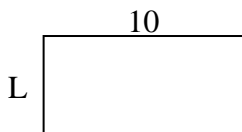
3) Area =  $14u^2$



4) Area =  $24u^2$



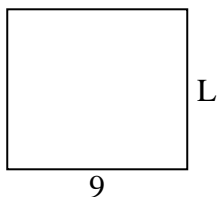
5) Area =  $50u^2$



6) Area =  $6u^2$




7) Area =  $72u^2$



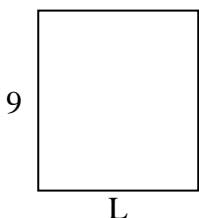
8) Area =  $27u^2$



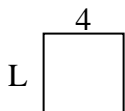
9) Area =  $70u^2$



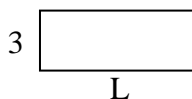
10) Area =  $72u^2$




11) Area =  $16u^2$



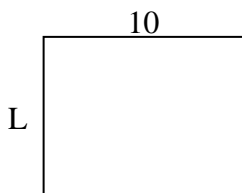
12) Area =  $24u^2$




13) Area =  $14u^2$



14) Area =  $80u^2$



15) Area =  $27u^2$



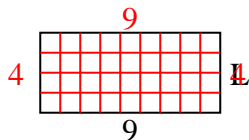
**Answers**

1. \_\_\_\_\_
2. \_\_\_\_\_
3. \_\_\_\_\_
4. \_\_\_\_\_
5. \_\_\_\_\_
6. \_\_\_\_\_
7. \_\_\_\_\_
8. \_\_\_\_\_
9. \_\_\_\_\_
10. \_\_\_\_\_
11. \_\_\_\_\_
12. \_\_\_\_\_
13. \_\_\_\_\_
14. \_\_\_\_\_
15. \_\_\_\_\_

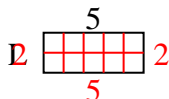


Determine the value of 'L'.

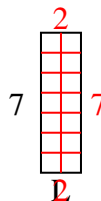
1) Area =  $36u^2$



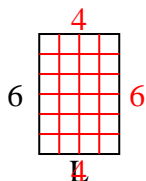
2) Area =  $10u^2$



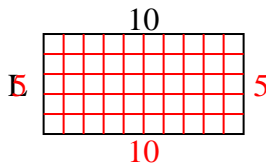
3) Area =  $14u^2$



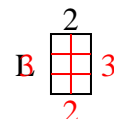
4) Area =  $24u^2$



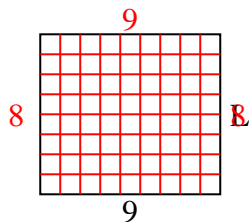
5) Area =  $50u^2$



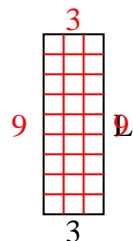
6) Area =  $6u^2$



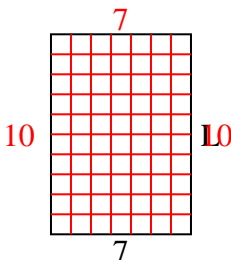
7) Area =  $72u^2$



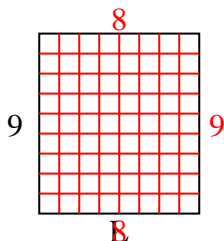
8) Area =  $27u^2$



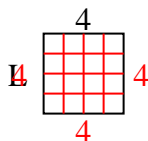
9) Area =  $70u^2$



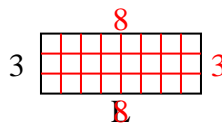
10) Area =  $72u^2$



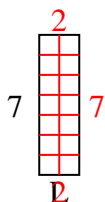
11) Area =  $16u^2$



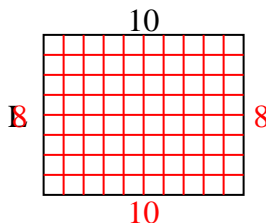
12) Area =  $24u^2$



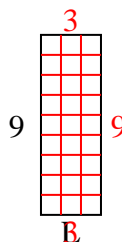
13) Area =  $14u^2$



14) Area =  $80u^2$



15) Area =  $27u^2$



Answers

1. 4

2. 2

3. 2

4. 4

5. 5

6. 3

7. 8

8. 9

9. 10

10. 8

11. 4

12. 8

13. 2

14. 8

15. 3