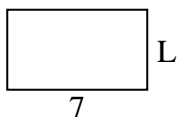


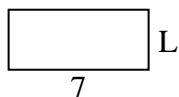


Determine the value of 'L'.

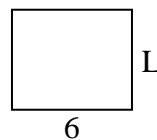
1) Area = $28u^2$



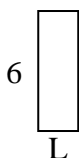
2) Area = $21u^2$



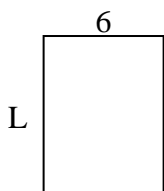
3) Area = $30u^2$



4) Area = $12u^2$



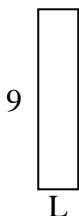
5) Area = $48u^2$



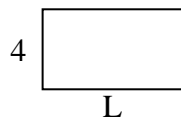
6) Area = $6u^2$



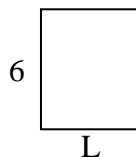
7) Area = $18u^2$



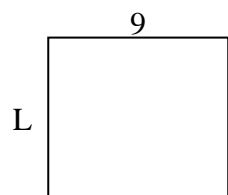
8) Area = $28u^2$



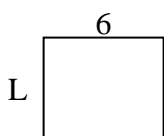
9) Area = $30u^2$



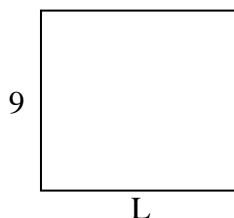
10) Area = $72u^2$



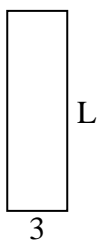
11) Area = $30u^2$



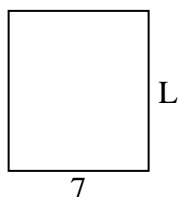
12) Area = $90u^2$



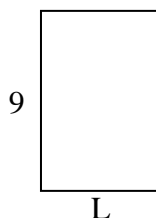
13) Area = $30u^2$



14) Area = $56u^2$



15) Area = $54u^2$



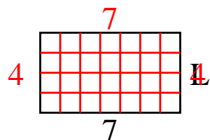
Answers

1. _____
2. _____
3. _____
4. _____
5. _____
6. _____
7. _____
8. _____
9. _____
10. _____
11. _____
12. _____
13. _____
14. _____
15. _____

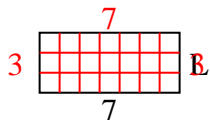


Determine the value of 'L'.

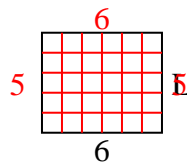
1) Area = $28u^2$



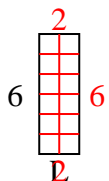
2) Area = $21u^2$



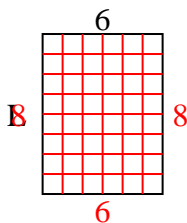
3) Area = $30u^2$



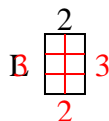
4) Area = $12u^2$



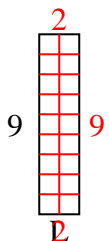
5) Area = $48u^2$



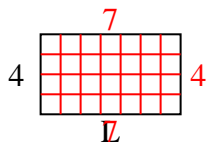
6) Area = $6u^2$



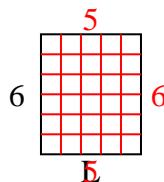
7) Area = $18u^2$



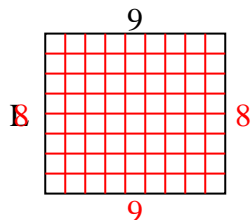
8) Area = $28u^2$



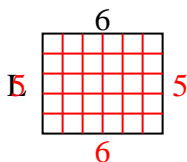
9) Area = $30u^2$



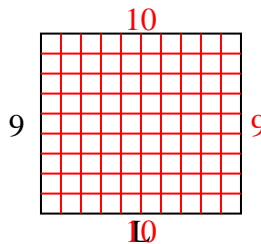
10) Area = $72u^2$



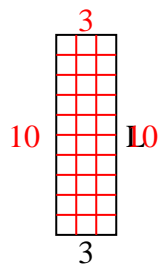
11) Area = $30u^2$



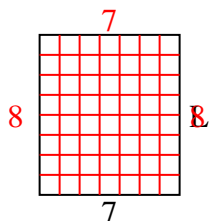
12) Area = $90u^2$



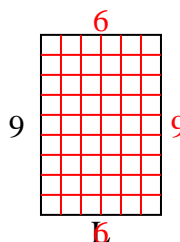
13) Area = $30u^2$



14) Area = $56u^2$



15) Area = $54u^2$



Answers

1. 4

2. 3

3. 5

4. 2

5. 8

6. 3

7. 2

8. 7

9. 5

10. 8

11. 5

12. 10

13. 10

14. 8

15. 6