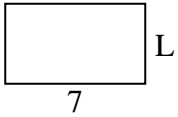


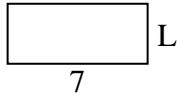


Determine the value of 'L'. Lengths are in cm (not to scale).

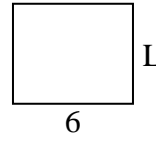
1) perimeter = 22



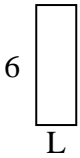
2) perimeter = 20



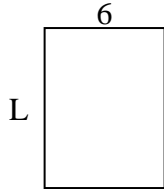
3) perimeter = 22



4) perimeter = 16




5) perimeter = 28



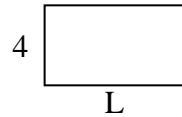
6) perimeter = 10



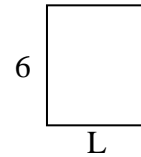
7) perimeter = 22



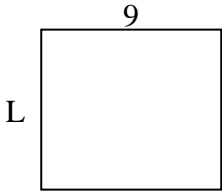
8) perimeter = 22



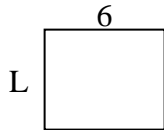
9) perimeter = 22



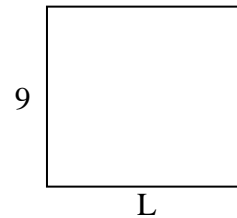
10) perimeter = 34



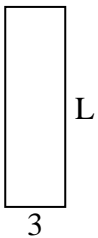
11) perimeter = 22



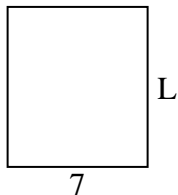
12) perimeter = 38



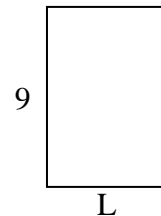
13) perimeter = 26



14) perimeter = 30



15) perimeter = 30



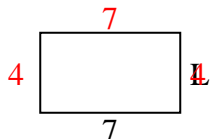
Answers

1. _____
2. _____
3. _____
4. _____
5. _____
6. _____
7. _____
8. _____
9. _____
10. _____
11. _____
12. _____
13. _____
14. _____
15. _____

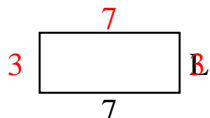


Determine the value of 'L'. Lengths are in cm (not to scale).

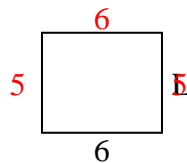
1) perimeter = 22



2) perimeter = 20



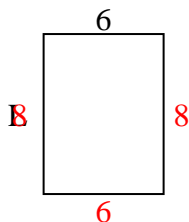
3) perimeter = 22



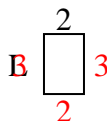
4) perimeter = 16



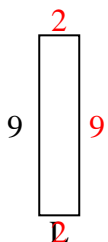
5) perimeter = 28



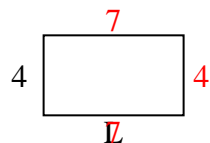
6) perimeter = 10



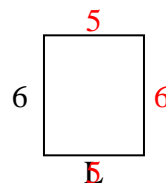
7) perimeter = 22



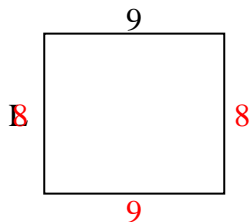
8) perimeter = 22



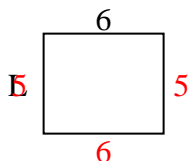
9) perimeter = 22



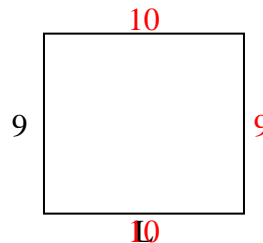
10) perimeter = 34



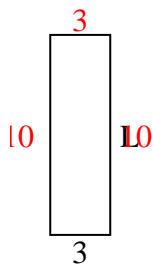
11) perimeter = 22



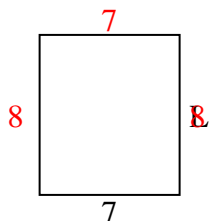
12) perimeter = 38



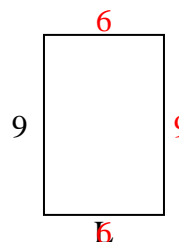
13) perimeter = 26



14) perimeter = 30



15) perimeter = 30



Answers

1. 4 cm

2. 3 cm

3. 5 cm

4. 2 cm

5. 8 cm

6. 3 cm

7. 2 cm

8. 7 cm

9. 5 cm

10. 8 cm

11. 5 cm

12. 10 cm

13. 10 cm

14. 8 cm

15. 6 cm