

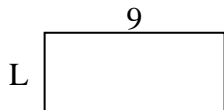


Determine the value of 'L'. Lengths are in cm (not to scale).

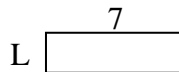
1) perimeter = 12



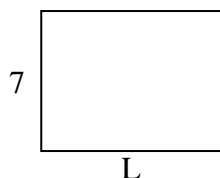
2) perimeter = 26



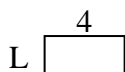
3) perimeter = 18



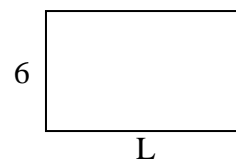
4) perimeter = 32



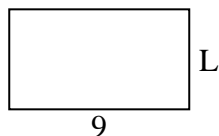
5) perimeter = 12



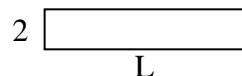
6) perimeter = 32



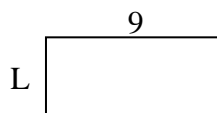
7) perimeter = 28



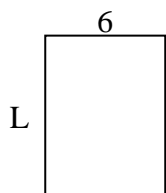
8) perimeter = 24



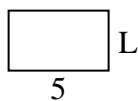
9) perimeter = 26



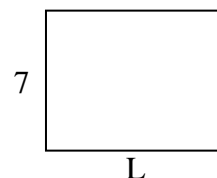
10) perimeter = 28



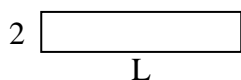
11) perimeter = 16



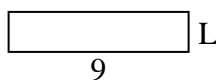
12) perimeter = 32



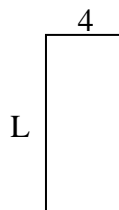
13) perimeter = 24



14) perimeter = 22



15) perimeter = 26



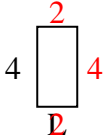
Answers

1. _____
2. _____
3. _____
4. _____
5. _____
6. _____
7. _____
8. _____
9. _____
10. _____
11. _____
12. _____
13. _____
14. _____
15. _____

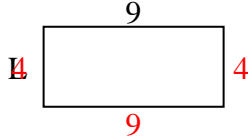


Determine the value of 'L'. Lengths are in cm (not to scale).

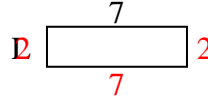
1) perimeter = 12



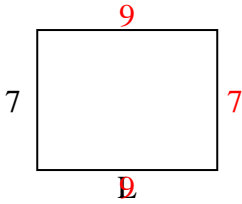
2) perimeter = 26



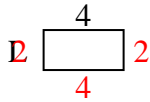
3) perimeter = 18



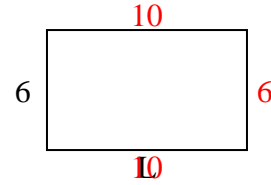
4) perimeter = 32



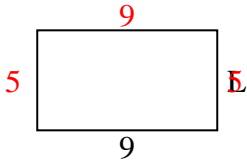
5) perimeter = 12



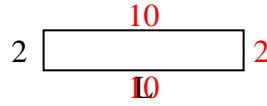
6) perimeter = 32



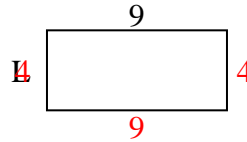
7) perimeter = 28



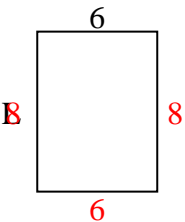
8) perimeter = 24



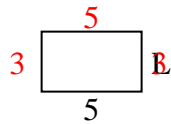
9) perimeter = 26



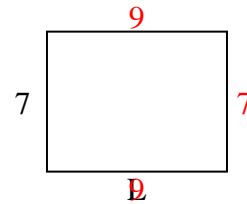
10) perimeter = 28



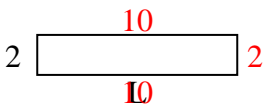
11) perimeter = 16



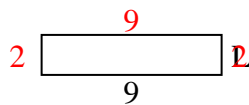
12) perimeter = 32



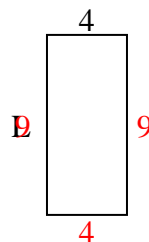
13) perimeter = 24



14) perimeter = 22



15) perimeter = 26



Answers

1. **2 cm**

2. **4 cm**

3. **2 cm**

4. **9 cm**

5. **2 cm**

6. **10 cm**

7. **5 cm**

8. **10 cm**

9. **4 cm**

10. **8 cm**

11. **3 cm**

12. **9 cm**

13. **10 cm**

14. **2 cm**

15. **9 cm**