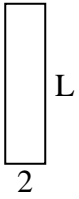




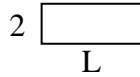
Determine the value of 'L'. Lengths are in cm (not to scale).

Answers

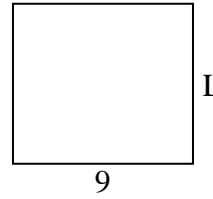
1) perimeter = 20



2) perimeter = 14



3) perimeter = 34



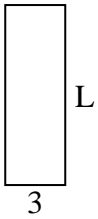
1. _____

2. _____

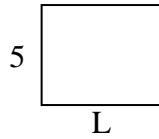
3. _____

4. _____

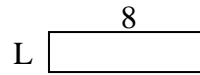
4) perimeter = 24



5) perimeter = 22



6) perimeter = 20



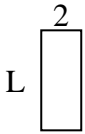
5. _____

6. _____

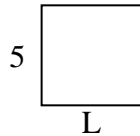
7. _____

8. _____

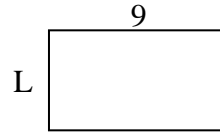
7) perimeter = 14



8) perimeter = 20



9) perimeter = 28

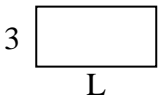


9. _____

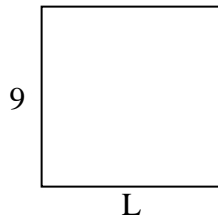
10. _____

11. _____

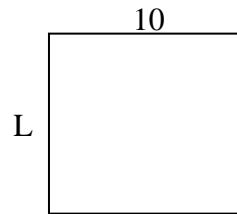
10) perimeter = 18



11) perimeter = 36



12) perimeter = 38



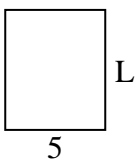
12. _____

13. _____

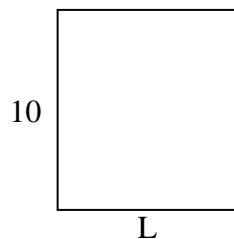
14. _____

15. _____

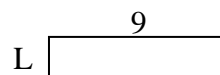
13) perimeter = 22



14) perimeter = 38



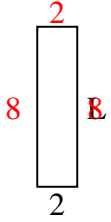
15) perimeter = 22



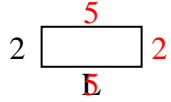


Determine the value of 'L'. Lengths are in cm (not to scale).

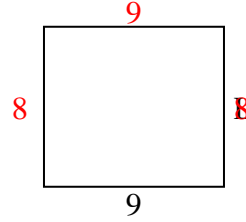
1) perimeter = 20



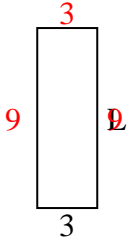
2) perimeter = 14



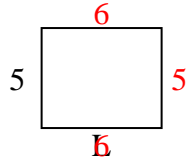
3) perimeter = 34



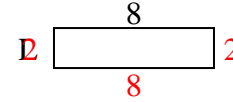
4) perimeter = 24



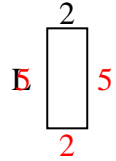
5) perimeter = 22



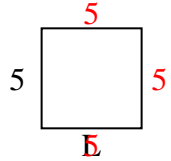
6) perimeter = 20



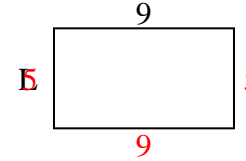
7) perimeter = 14



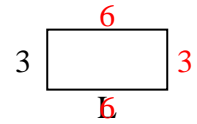
8) perimeter = 20



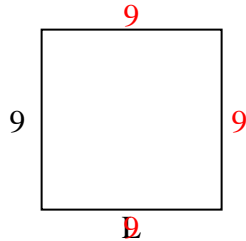
9) perimeter = 28



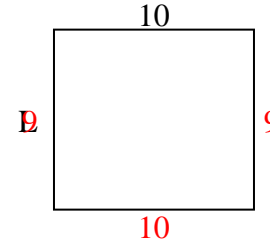
10) perimeter = 18



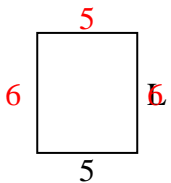
11) perimeter = 36



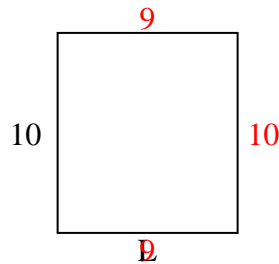
12) perimeter = 38



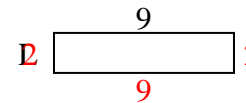
13) perimeter = 22



14) perimeter = 38



15) perimeter = 22



Answers

1. 8 cm

2. 5 cm

3. 8 cm

4. 9 cm

5. 6 cm

6. 2 cm

7. 5 cm

8. 5 cm

9. 5 cm

10. 6 cm

11. 9 cm

12. 9 cm

13. 6 cm

14. 9 cm

15. 2 cm