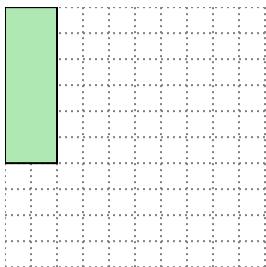


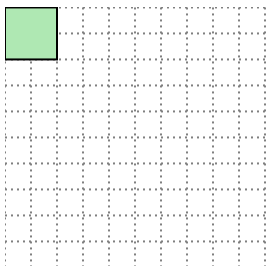


Solve each problem.

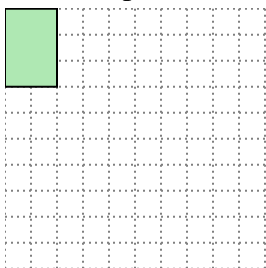
- 1) The rectangle below has the dimensions 2×6 . Create a rectangle with the same area, but a different perimeter.



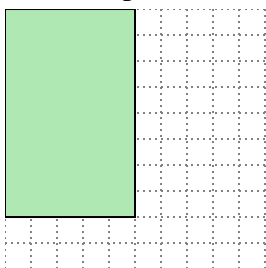
- 2) The rectangle below has the dimensions 2×2 . Create a rectangle with the same area, but a different perimeter.



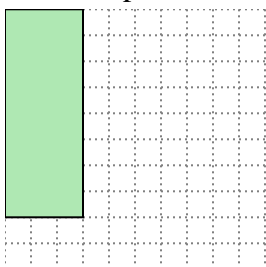
- 3) The rectangle below has the dimensions 2×3 . Create a rectangle with the same area, but a different perimeter.



- 4) The rectangle below has the dimensions 5×8 . Create a rectangle with the same area, but a different perimeter.



- 5) The rectangle below has the dimensions 3×8 . Create a rectangle with the same area, but a different perimeter.

**Answers**

1. _____

2. _____

3. _____


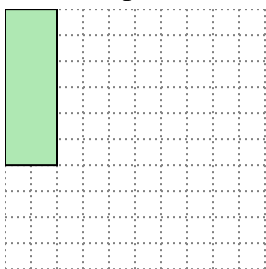
4. _____

5. _____



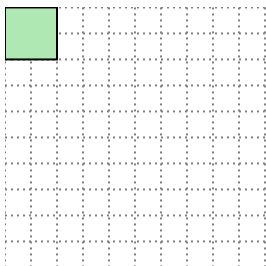
Solve each problem.

- 1) The rectangle below has the dimensions 2×6 . Create a rectangle with the same area, but a different perimeter.




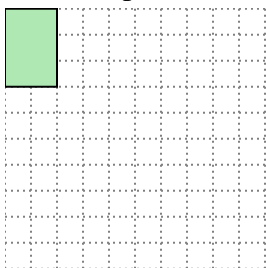
3×4

- 2) The rectangle below has the dimensions 2×2 . Create a rectangle with the same area, but a different perimeter.



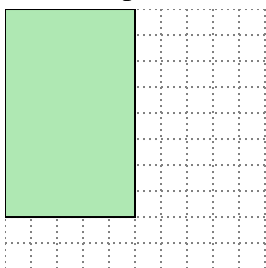
1×4

- 3) The rectangle below has the dimensions 2×3 . Create a rectangle with the same area, but a different perimeter.



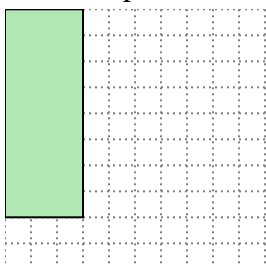
1×6

- 4) The rectangle below has the dimensions 5×8 . Create a rectangle with the same area, but a different perimeter.



4×10

- 5) The rectangle below has the dimensions 3×8 . Create a rectangle with the same area, but a different perimeter.



4×6

Answers

1. 3×4

2. 1×4

3. 1×6

4. 4×10

5. 4×6