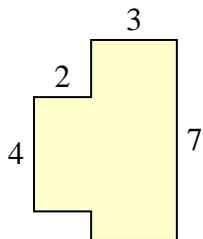


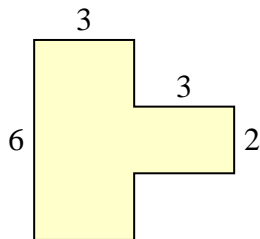


Find the total area of each shape. Measurement is in millimeters (mm). Not to scale.

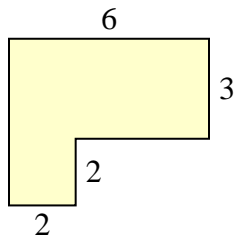
1)



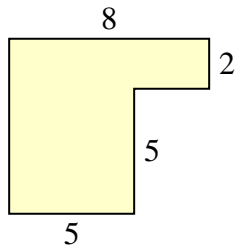
2)



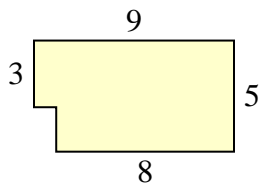
3)



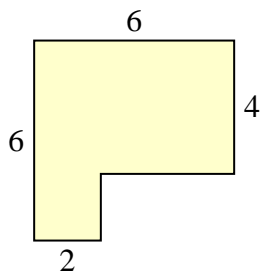
4)



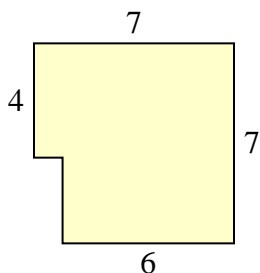
5)



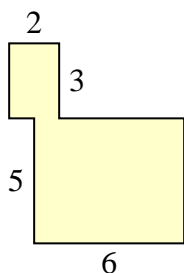
6)



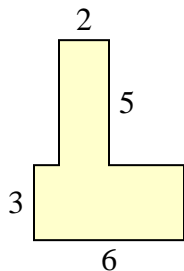
7)



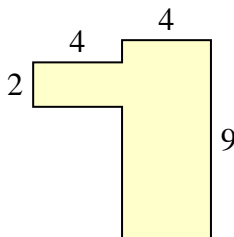
8)



9)



10)



Answers

1. \_\_\_\_\_

2. \_\_\_\_\_

3. \_\_\_\_\_

4. \_\_\_\_\_

5. \_\_\_\_\_

6. \_\_\_\_\_

7. \_\_\_\_\_

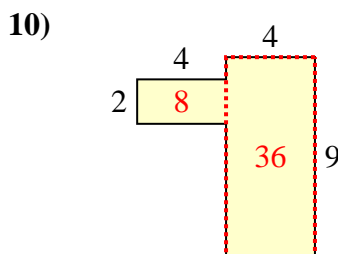
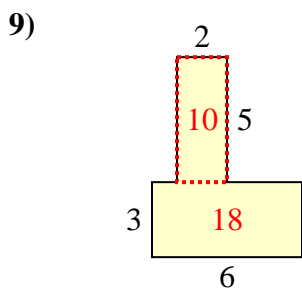
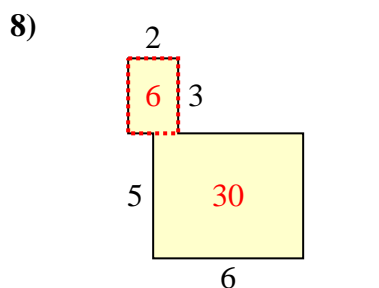
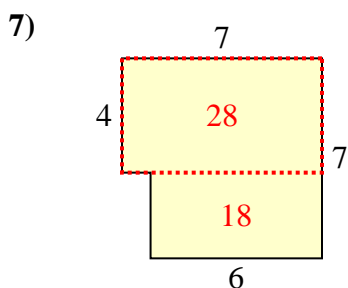
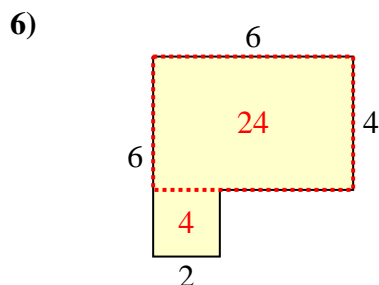
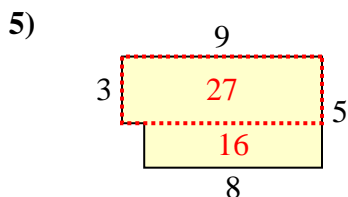
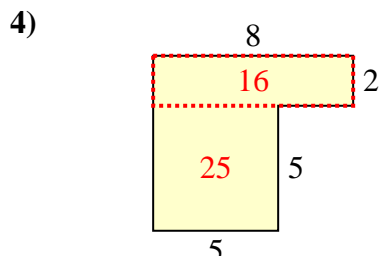
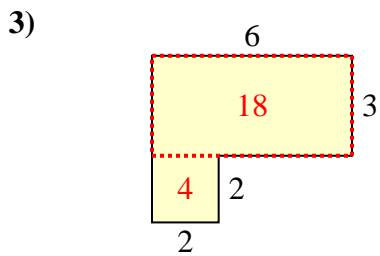
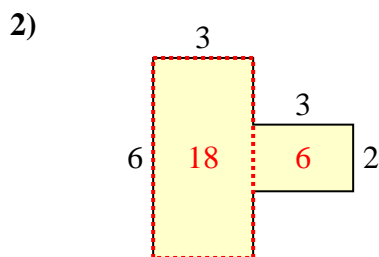
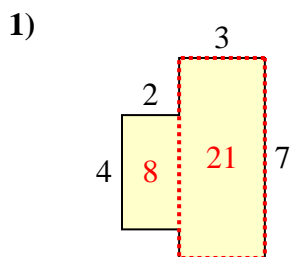
8. \_\_\_\_\_

9. \_\_\_\_\_

10. \_\_\_\_\_



Find the total area of each shape. Measurement is in millimeters (mm). Not to scale.



Answers

1. 29 mm<sup>2</sup>
2. 24 mm<sup>2</sup>
3. 22 mm<sup>2</sup>
4. 41 mm<sup>2</sup>
5. 43 mm<sup>2</sup>
6. 28 mm<sup>2</sup>
7. 46 mm<sup>2</sup>
8. 36 mm<sup>2</sup>
9. 28 mm<sup>2</sup>
10. 44 mm<sup>2</sup>