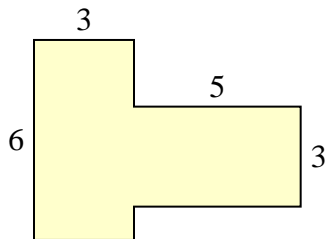




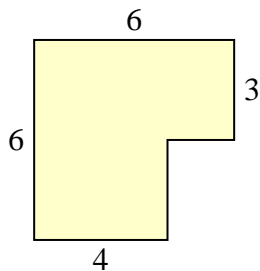
Find the total area of each shape. Measurement is in millimeters (mm). Not to scale.

Answers

1)



2)



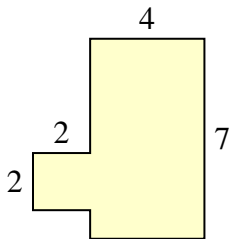
1. \_\_\_\_\_

2. \_\_\_\_\_

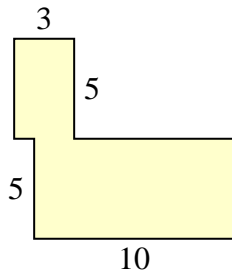
3. \_\_\_\_\_

4. \_\_\_\_\_

3)



4)



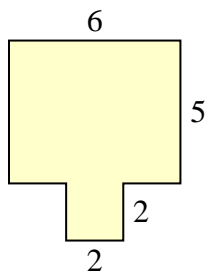
5. \_\_\_\_\_

6. \_\_\_\_\_

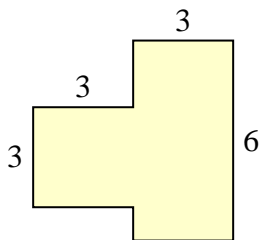
7. \_\_\_\_\_

8. \_\_\_\_\_

5)



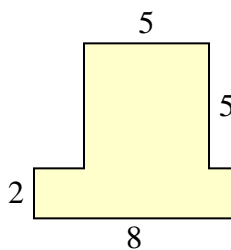
6)



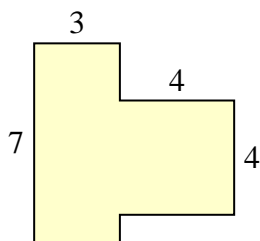
9. \_\_\_\_\_

10. \_\_\_\_\_

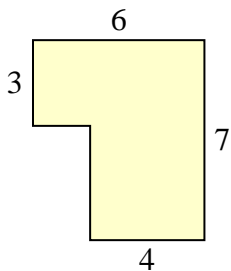
7)



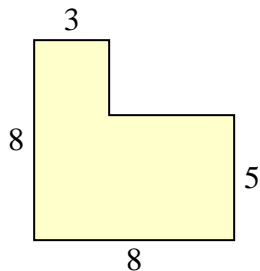
8)



9)

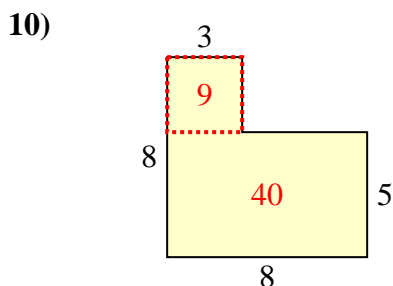
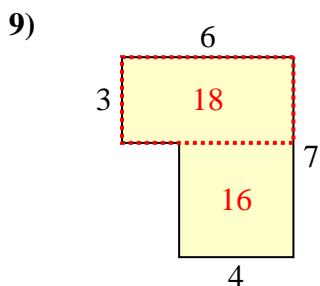
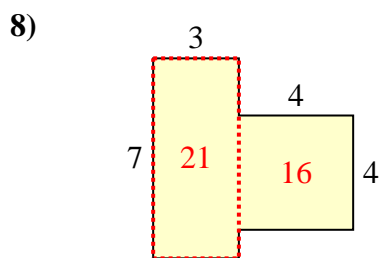
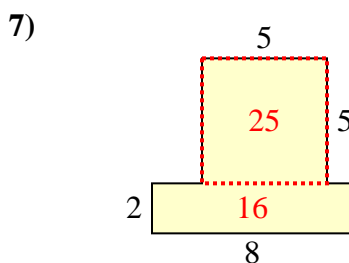
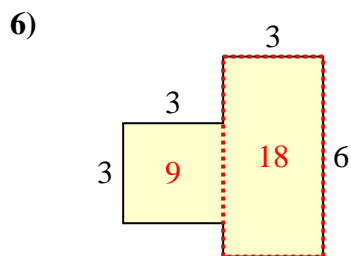
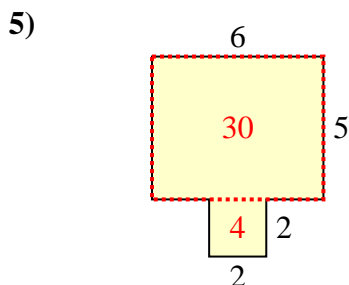
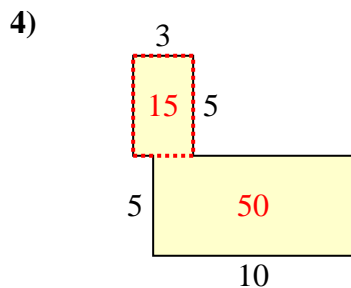
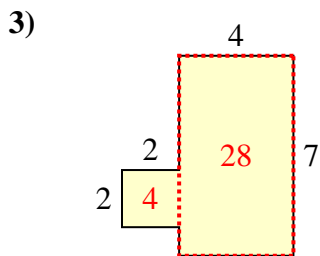
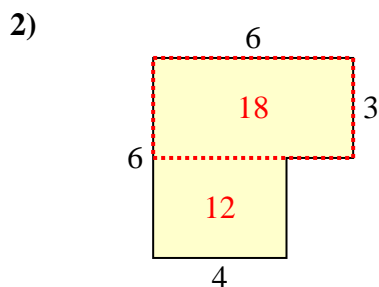
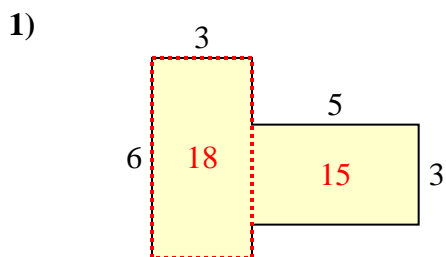


10)





Find the total area of each shape. Measurement is in millimeters (mm). Not to scale.



**Answers**

1. 33 mm<sup>2</sup>
2. 30 mm<sup>2</sup>
3. 32 mm<sup>2</sup>
4. 65 mm<sup>2</sup>
5. 34 mm<sup>2</sup>
6. 27 mm<sup>2</sup>
7. 41 mm<sup>2</sup>
8. 37 mm<sup>2</sup>
9. 34 mm<sup>2</sup>
10. 49 mm<sup>2</sup>