

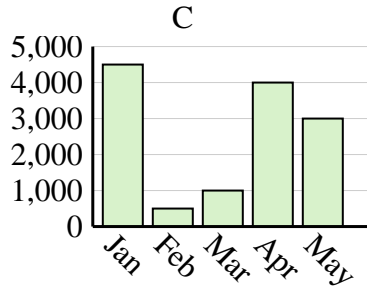
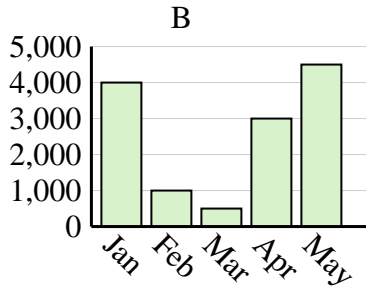
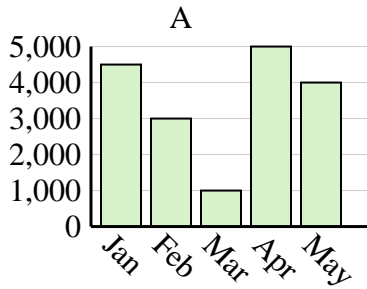


Determine which graph (A, B or C) best represents the information in the table.

Answers

1)

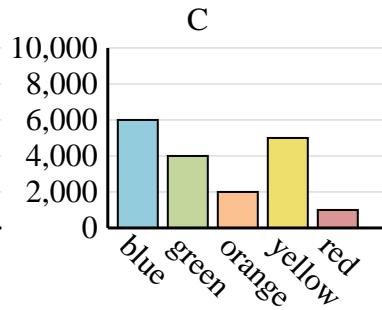
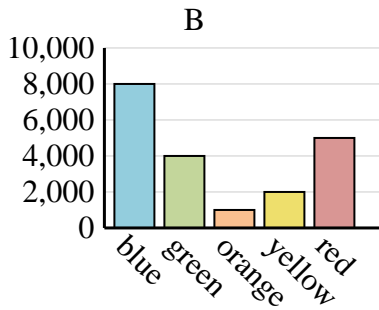
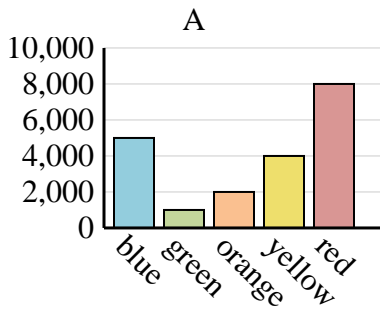
| Sales | Jan | Feb | Mar | Apr | May |
|-------|-------|-------|-----|-------|-------|
| Month | 4,000 | 1,000 | 500 | 3,000 | 4,500 |



1. _____
2. _____
3. _____
4. _____

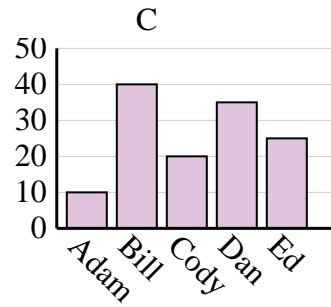
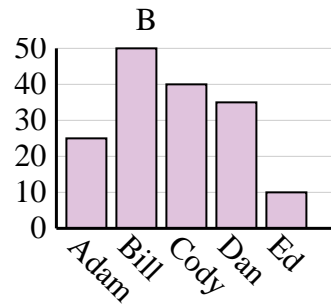
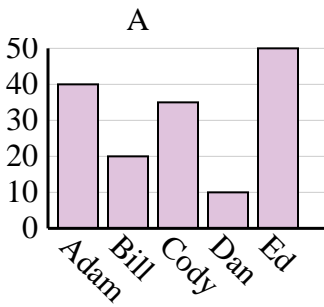
2)

| Favorite Color | blue | green | orange | yellow | red |
|----------------|-------|-------|--------|--------|-------|
| People | 5,000 | 1,000 | 2,000 | 4,000 | 8,000 |



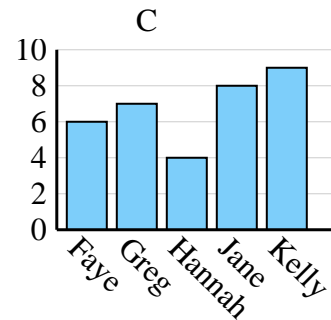
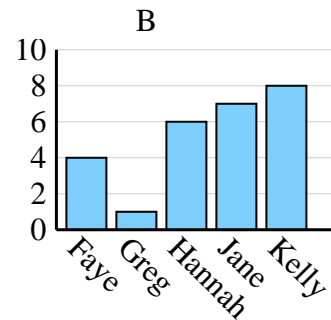
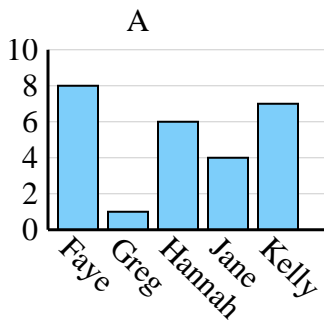
3)

| Name | Adam | Bill | Cody | Dan | Ed |
|--------|------|------|------|-----|----|
| Points | 25 | 50 | 40 | 35 | 10 |



4)

| Name | Faye | Greg | Hannah | Jane | Kelly |
|-----------------|------|------|--------|------|-------|
| States Lived In | 8 | 1 | 6 | 4 | 7 |



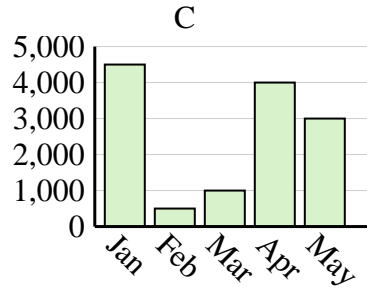
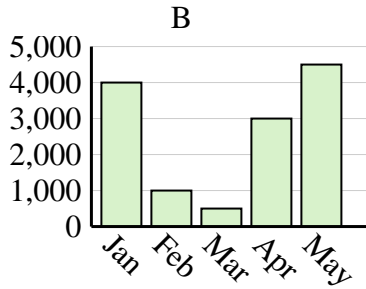
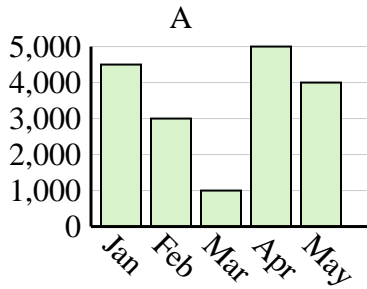


Determine which graph (A, B or C) best represents the information in the table.

Answers

1)

| Sales | Jan | Feb | Mar | Apr | May |
|-------|-------|-------|-----|-------|-------|
| Month | 4,000 | 1,000 | 500 | 3,000 | 4,500 |



1. **B**

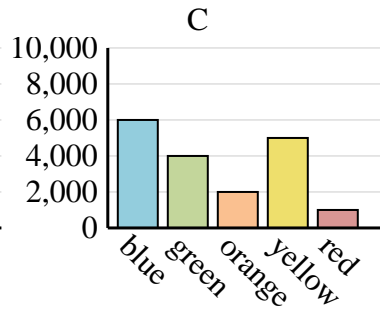
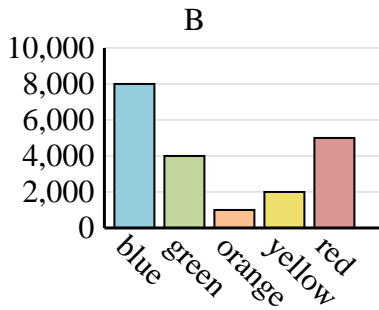
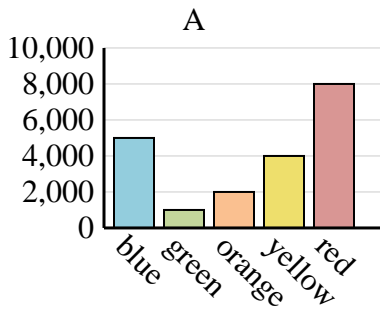
2. **A**

3. **B**

4. **A**

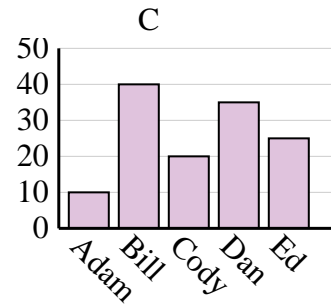
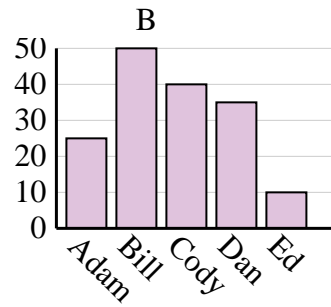
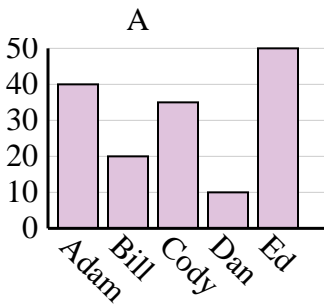
2)

| Favorite Color | blue | green | orange | yellow | red |
|----------------|-------|-------|--------|--------|-------|
| People | 5,000 | 1,000 | 2,000 | 4,000 | 8,000 |



3)

| Name | Adam | Bill | Cody | Dan | Ed |
|--------|------|------|------|-----|----|
| Points | 25 | 50 | 40 | 35 | 10 |



4)

| Name | Faye | Greg | Hannah | Jane | Kelly |
|-----------------|------|------|--------|------|-------|
| States Lived In | 8 | 1 | 6 | 4 | 7 |

