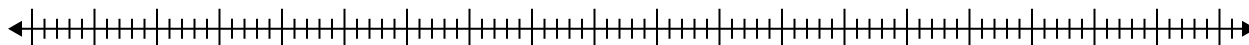


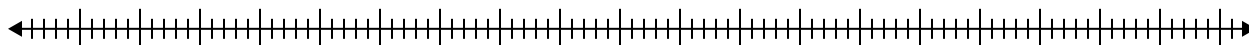


Create a box plot from the set of numbers.

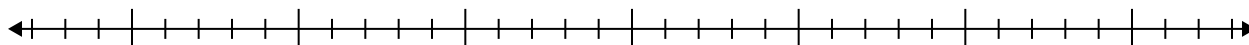
- 1) 55 , 99 , 50 , 53 , 53 , 22 , 62 , 48 , 75



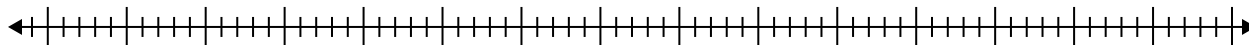
- 2) 98 , 20 , 38 , 66 , 43 , 41 , 91 , 79 , 35 , 42 , 37



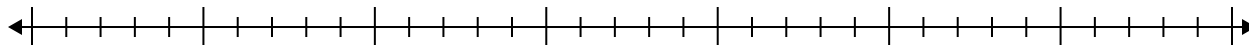
- 3) 15 , 16 , 17 , 20 , 18 , 7



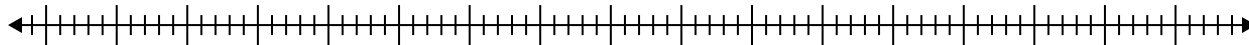
- 4) 34 , 74 , 55 , 82 , 39 , 64 , 73 , 40 , 24 , 64 , 66



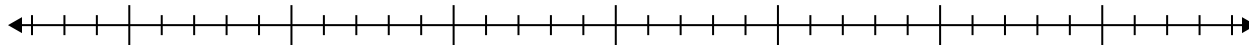
- 5) 11 , 18 , 8 , 14 , 18 , 10 , 9 , 20 , 6



- 6) 37 , 54 , 24 , 84 , 35 , 58 , 84



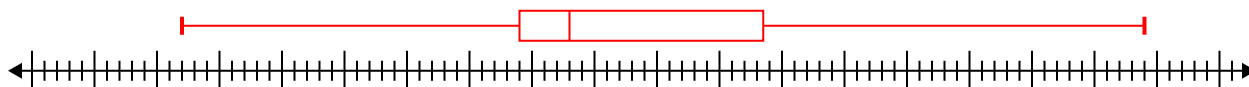
- 7) 10 , 10 , 20 , 5 , 17 , 15 , 5



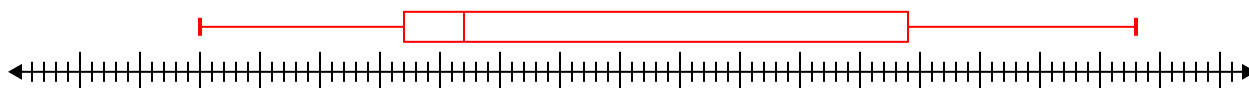


Create a box plot from the set of numbers.

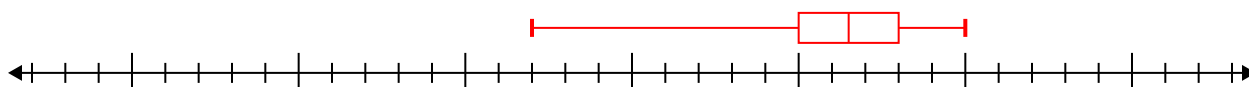
1) 55, 99, 50, 53, 53, 22, 62, 48, 75 **Min=22 Max=99 q1=49 Q2=53 q3=68.5**



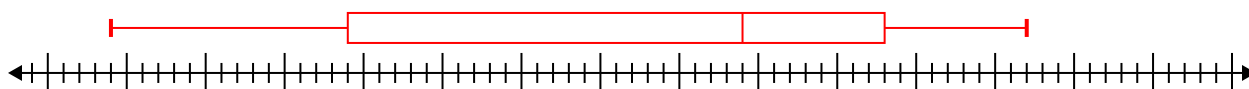
2) 98, 20, 38, 66, 43, 41, 91, 79, 35, 42, 37 **Min=20 Max=98 q1=37 Q2=42 q3=79**



3) 15, 16, 17, 20, 18, 7 **Min=7 Max=20 q1=15 Q2=16.5 q3=18**



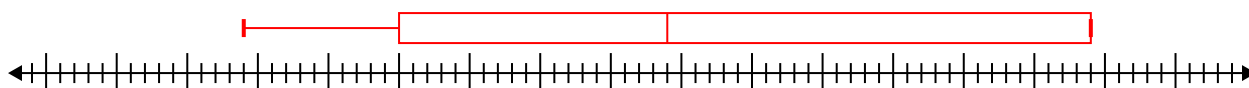
4) 34, 74, 55, 82, 39, 64, 73, 40, 24, 64, 66 **Min=24 Max=82 q1=39 Q2=64 q3=73**



5) 11, 18, 8, 14, 18, 10, 9, 20, 6 **Min=6 Max=20 q1=8.5 Q2=11 q3=18**



6) 37, 54, 24, 84, 35, 58, 84 **Min=24 Max=84 q1=35 Q2=54 q3=84**



7) 10, 10, 20, 5, 17, 15, 5 **Min=5 Max=20 q1=5 Q2=10 q3=17**

