



Determine which letter best represents the volume.

Answers

Cup

A cup is about the amount of milk you get from the cafeteria.

Pint

A pint is about the amount you get in a large glass.

1 pint = 2 cups

Quart

A quart is about the amount you get in a large milk container.

1 quart = 2 pints

Gallon

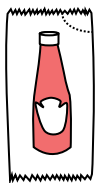
A gallon is the amount that comes in the large plastic container.

1 gallon = 4 quarts



1. _____
2. _____
3. _____
4. _____
5. _____
6. _____
7. _____
8. _____
9. _____


1)



Ketchup in a packet

- A. 1.5 pints
- B. 2 quarts
- C. 0.5 gallons
- D. less than 1 cup

2)



Ice Chest

- A. 2 quarts
- B. 16 cups
- C. 100 quarts
- D. 5 gallons


3)



Sand in a pail

- A. 1 cup
- B. 1 gallon
- C. 32 gallons
- D. 7 fluid ounces


4)



Water a barrel holds

- A. 20 cups
- B. 3 inches
- C. 50 gallons
- D. 10 pints

5)



Cereal Bowl

- A. 4 pints
- B. 0.5 gallons
- C. 1 pint
- D. 2 gallons

6)



2 liter of Soda

- A. 5 gallons
- B. 0.5 gallons
- C. 2 cups
- D. 1 pint

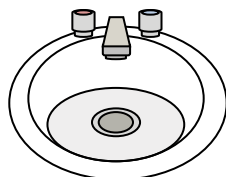
7)



Ink in a pen

- A. 2 pints
- B. 1 gallon
- C. less than 1 cup
- D. 1 quart

8)



Water in bathroom sink

- A. 2 cups
- B. 2 gallons
- C. 2 pints
- D. 2 fluid ounces

9)



Liquid a spoon holds

- A. 1 quart
- B. 1 cup
- C. 1 pint
- D. Less than a cup



Determine which letter best represents the volume.

Cup

A cup is about the amount of milk you get from the cafeteria.

Pint

A pint is about the amount you get in a large glass.

1 pint = 2 cups

Quart

A quart is about the amount you get in a large milk container.

1 quart = 2 pints

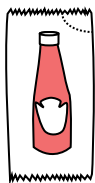
Gallon

A gallon is the amount that comes in the large plastic container.

1 gallon = 4 quarts




1)



Ketchup in a packet

- A. 1.5 pints
- B. 2 quarts
- C. 0.5 gallons
- D. less than 1 cup

2)



Ice Chest

- A. 2 quarts
- B. 16 cups
- C. 100 quarts
- D. 5 gallons


3)



Sand in a pail

- A. 1 cup
- B. 1 gallon
- C. 32 gallons
- D. 7 fluid ounces


4)



Water a barrel holds

- A. 20 cups
- B. 3 inches
- C. 50 gallons
- D. 10 pints

5)



Cereal Bowl

- A. 4 pints
- B. 0.5 gallons
- C. 1 pint
- D. 2 gallons

6)



2 liter of Soda

- A. 5 gallons
- B. 0.5 gallons
- C. 2 cups
- D. 1 pint

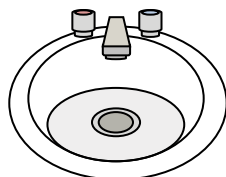
7)



Ink in a pen

- A. 2 pints
- B. 1 gallon
- C. less than 1 cup
- D. 1 quart

8)



Water in bathroom sink

- A. 2 cups
- B. 2 gallons
- C. 2 pints
- D. 2 fluid ounces

9)



Liquid a spoon holds

- A. 1 quart
- B. 1 cup
- C. 1 pint
- D. Less than a cup

Answers

1. **D**

2. **C**

3. **B**

4. **C**

5. **C**

6. **B**

7. **C**

8. **B**

9. **D**