



Determine which letter best represents the volume.

Answers

**Cup**

A cup is about the amount of milk you get from the cafeteria.

**Pint**

A pint is about the amount you get in a large glass.

1 pint = 2 cups

**Quart**

A quart is about the amount you get in a large milk container.

1 quart = 2 pints


**Gallon**

A gallon is the amount that comes in the large plastic container.

1 gallon = 4 quarts



1)



Bathtub

- A. 40 cups
- B. 20 pints
- C. 45 gallons
- D. 8 quarts


2)



Sand in a pail

- A. 32 gallons
- B. 1 gallon
- C. 1 cup
- D. 7 fluid ounces

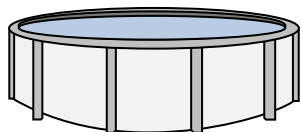
3)



Eyedropper holds

- A. 3 gallons
- B. 1 cup
- C. less than 1 cup
- D. 1 pint


4)



Water in a pool

- A. 5000 feet
- B. 25 cups
- C. 20 gallons
- D. 3000 gallons

5)



Liquid in a pitcher

- A. 1 pint
- B. 8 gallons
- C. 2 cups
- D. 2 quarts

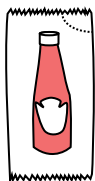
6)



Shampoo in a bottle

- A. 0.5 gallons
- B. 100 cups
- C. 1 cup
- D. 2 pints

7)



Ketchup in a packet

- A. 0.5 gallons
- B. 1.5 pints
- C. less than 1 cup
- D. 2 quarts


8)



Water for a house plant

- A. 6 quarts
- B. 4 pounds
- C. 2 cups
- D. 3 gallons

9)



Water a barrel holds

- A. 3 inches
- B. 10 pints
- C. 20 cups
- D. 50 gallons

- 1. \_\_\_\_\_
- 2. \_\_\_\_\_
- 3. \_\_\_\_\_
- 4. \_\_\_\_\_
- 5. \_\_\_\_\_
- 6. \_\_\_\_\_
- 7. \_\_\_\_\_
- 8. \_\_\_\_\_
- 9. \_\_\_\_\_



Determine which letter best represents the volume.

**Cup**

A cup is about the amount of milk you get from the cafeteria.

**Pint**

A pint is about the amount you get in a large glass.

1 pint = 2 cups

**Quart**

A quart is about the amount you get in a large milk container.

1 quart = 2 pints


**Gallon**

A gallon is the amount that comes in the large plastic container.

1 gallon = 4 quarts



1)



Bathtub

- A. 40 cups
- B. 20 pints
- C. 45 gallons
- D. 8 quarts


2)



Sand in a pail

- A. 32 gallons
- B. 1 gallon
- C. 1 cup
- D. 7 fluid ounces

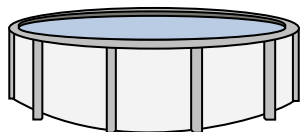
3)



Eyedropper holds

- A. 3 gallons
- B. 1 cup
- C. less than 1 cup
- D. 1 pint


4)



Water in a pool

- A. 5000 feet
- B. 25 cups
- C. 20 gallons
- D. 3000 gallons

5)



Liquid in a pitcher

- A. 1 pint
- B. 8 gallons
- C. 2 cups
- D. 2 quarts

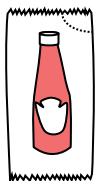
6)



Shampoo in a bottle

- A. 0.5 gallons
- B. 100 cups
- C. 1 cup
- D. 2 pints

7)



Ketchup in a packet

- A. 0.5 gallons
- B. 1.5 pints
- C. less than 1 cup
- D. 2 quarts


8)



Water for a house plant

- A. 6 quarts
- B. 4 pounds
- C. 2 cups
- D. 3 gallons

9)



Water a barrel holds

- A. 3 inches
- B. 10 pints
- C. 20 cups
- D. 50 gallons

**Answers**

- 1. **C**
- 2. **B**
- 3. **C**
- 4. **D**
- 5. **D**
- 6. **D**
- 7. **C**
- 8. **C**
- 9. **D**