



Determine which letter best represents the volume.

Answers

Cup

A cup is about the amount of milk you get from the cafeteria.

Pint

A pint is about the amount you get in a large glass.

1 pint = 2 cups

Quart

A quart is about the amount you get in a large milk container.

1 quart = 2 pints

Gallon

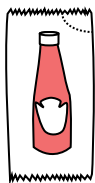
A gallon is the amount that comes in the large plastic container.

1 gallon = 4 quarts



1. _____
2. _____
3. _____
4. _____
5. _____
6. _____
7. _____
8. _____
9. _____


1)



Ketchup in a packet

- A. 1.5 pints
- B. 2 quarts
- C. 0.5 gallons
- D. less than 1 cup

2)



Ice Chest

- A. 2 quarts
- B. 16 cups
- C. 100 quarts
- D. 5 gallons


3)



Sand in a pail

- A. 1 cup
- B. 1 gallon
- C. 32 gallons
- D. 7 fluid ounces

4)



Water a barrel holds

- A. 20 cups
- B. 3 inches
- C. 50 gallons
- D. 10 pints

5)



Cereal Bowl

- A. 4 pints
- B. 0.5 gallons
- C. 1 pint
- D. 2 gallons

6)



2 liter of Soda

- A. 5 gallons
- B. 0.5 gallons
- C. 2 cups
- D. 1 pint

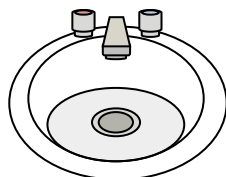
7)



Ink in a pen

- A. 2 pints
- B. 1 gallon
- C. less than 1 cup
- D. 1 quart

8)



Water in bathroom sink

- A. 2 cups
- B. 2 gallons
- C. 2 pints
- D. 2 fluid ounces

9)



Liquid a spoon holds

- A. 1 quart
- B. 1 cup
- C. 1 pint
- D. Less than a cup



Determine which letter best represents the volume.

Cup

A cup is about the amount of milk you get from the cafeteria.

Pint

A pint is about the amount you get in a large glass.

1 pint = 2 cups

Quart

A quart is about the amount you get in a large milk container.

1 quart = 2 pints

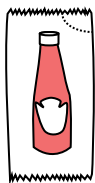
Gallon

A gallon is the amount that comes in the large plastic container.

1 gallon = 4 quarts




1)



Ketchup in a packet

- A. 1.5 pints
- B. 2 quarts
- C. 0.5 gallons
- D. less than 1 cup

2)



Ice Chest

- A. 2 quarts
- B. 16 cups
- C. 100 quarts
- D. 5 gallons


3)



Sand in a pail

- A. 1 cup
- B. 1 gallon
- C. 32 gallons
- D. 7 fluid ounces


4)



Water a barrel holds

- A. 20 cups
- B. 3 inches
- C. 50 gallons
- D. 10 pints

5)



Cereal Bowl

- A. 4 pints
- B. 0.5 gallons
- C. 1 pint
- D. 2 gallons

6)



2 liter of Soda

- A. 5 gallons
- B. 0.5 gallons
- C. 2 cups
- D. 1 pint

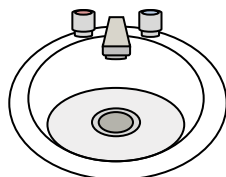
7)



Ink in a pen

- A. 2 pints
- B. 1 gallon
- C. less than 1 cup
- D. 1 quart

8)



Water in bathroom sink

- A. 2 cups
- B. 2 gallons
- C. 2 pints
- D. 2 fluid ounces

9)



Liquid a spoon holds

- A. 1 quart
- B. 1 cup
- C. 1 pint
- D. Less than a cup

Answers

1. **D**

2. **C**

3. **B**

4. **C**

5. **C**

6. **B**

7. **C**

8. **B**

9. **D**



Determine which letter best represents the volume.

Answers

Cup

Pint

Quart

Gallon

A cup is about the amount of milk you get from the cafeteria.

A pint is about the amount you get in a large glass.

A quart is about the amount you get in a large milk container.

A gallon is the amount that comes in the large plastic container.


1 pint = 2 cups

1 quart = 2 pints

1 gallon = 4 quarts




1)



Water a barrel holds

- A. 50 gallons
- B. 20 cups
- C. 3 inches
- D. 10 pints

2)



Soda in a can

- A. 4 cups
- B. 1 gallon
- C. 4 pints
- D. 1.5 cups

3)



Flour in a batch of cookies

- A. 5 gallons
- B. 2 quarts
- C. 1.5 cups
- D. 2 gallons

4)



Sand in a pail

- A. 7 fluid ounces
- B. 1 cup
- C. 1 gallon
- D. 32 gallons

5)



Measuring Cup

- A. 1 cup
- B. 1 gallon
- C. 1 quart
- D. 1 pint


6)



Flour in a pan of brownies

- A. 3 gallons
- B. 2 cups
- C. 8 gallons
- D. 16 quarts

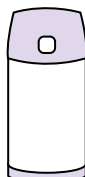
7)



Sand a wheel barrow holds

- A. 8 quarts
- B. 45 gallons
- C. 1000 grams
- D. 4 cups

8)



Liquid in a thermos

- A. 1 cup
- B. 1 gallon
- C. 2 pounds
- D. 4 quarts

9)



Water for a house plant

- A. 3 gallons
- B. 6 quarts
- C. 4 pounds
- D. 2 cups

- 1. _____
- 2. _____
- 3. _____
- 4. _____
- 5. _____
- 6. _____
- 7. _____
- 8. _____
- 9. _____



Determine which letter best represents the volume.

Cup

A cup is about the amount of milk you get from the cafeteria.

Pint

A pint is about the amount you get in a large glass.

1 pint = 2 cups

Quart

A quart is about the amount you get in a large milk container.

1 quart = 2 pints


Gallon

A gallon is the amount that comes in the large plastic container.

1 gallon = 4 quarts




1)



Water a barrel holds

- A. 50 gallons
- B. 20 cups
- C. 3 inches
- D. 10 pints

2)



Soda in a can

- A. 4 cups
- B. 1 gallon
- C. 4 pints
- D. 1.5 cups

3)



Flour in a batch of cookies

- A. 5 gallons
- B. 2 quarts
- C. 1.5 cups
- D. 2 gallons

4)



Sand in a pail

- A. 7 fluid ounces
- B. 1 cup
- C. 1 gallon
- D. 32 gallons

5)



Measuring Cup

- A. 1 cup
- B. 1 gallon
- C. 1 quart
- D. 1 pint


6)



Flour in a pan of brownies

- A. 3 gallons
- B. 2 cups
- C. 8 gallons
- D. 16 quarts

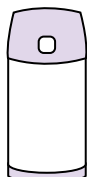
7)



Sand a wheel barrow holds

- A. 8 quarts
- B. 45 gallons
- C. 1000 grams
- D. 4 cups

8)



Liquid in a thermos

- A. 1 cup
- B. 1 gallon
- C. 2 pounds
- D. 4 quarts

9)



Water for a house plant

- A. 3 gallons
- B. 6 quarts
- C. 4 pounds
- D. 2 cups

Answers

1. **A**

2. **D**

3. **C**

4. **C**

5. **A**

6. **B**

7. **B**

8. **A**

9. **D**



Determine which letter best represents the volume.

Answers

Cup

A cup is about the amount of milk you get from the cafeteria.

Pint

A pint is about the amount you get in a large glass.

1 pint = 2 cups

Quart

A quart is about the amount you get in a large milk container.

1 quart = 2 pints

Gallon

A gallon is the amount that comes in the large plastic container.

1 gallon = 4 quarts



1. _____
2. _____
3. _____
4. _____
5. _____
6. _____
7. _____
8. _____
9. _____

1)



Toothpaste in a tube

- A. 0.5 cups
- B. 0.5 gallons
- C. 5 quarts
- D. 5 grams

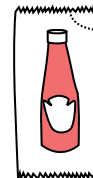
2)



Paint in a can

- A. 0.5 pints
- B. 3 fluid ounces
- C. 1 gallon
- D. 1 cup

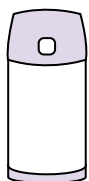
3)



Ketchup in a packet

- A. 2 quarts
- B. less than 1 cup
- C. 1.5 pints
- D. 0.5 gallons

4)



Liquid in a thermos

- A. 1 gallon
- B. 1 cup
- C. 2 pounds
- D. 4 quarts

5)



Shampoo in a bottle

- A. 2 pints
- B. 0.5 gallons
- C. 100 cups
- D. 1 cup

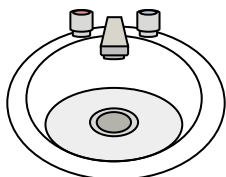
6)



Glue in a bottle

- A. 0.5 cups
- B. 2 quarts
- C. 1 pint
- D. 3 gallons

7)



Water in bathroom sink

- A. 2 gallons
- B. 2 fluid ounces
- C. 2 pints
- D. 2 cups


8)



Liquid in a tea cup

- A. 1 cup
- B. 1 gallon
- C. 1 quart
- D. 1 pint

9)



Sand a wheel barrow holds

- A. 45 gallons
- B. 1000 grams
- C. 4 cups
- D. 8 quarts



Determine which letter best represents the volume.

Cup

A cup is about the amount of milk you get from the cafeteria.



Pint

A pint is about the amount you get in a large glass.

1 pint = 2 cups



Quart

A quart is about the amount you get in a large milk container.

1 quart = 2 pints



Gallon

A gallon is the amount that comes in the large plastic container.

1 gallon = 4 quarts



Answers

1. **A**

2. **C**

3. **B**

4. **B**

5. **A**

6. **A**

7. **A**

8. **A**

9. **A**

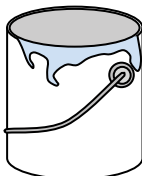
1)



Toothpaste in a tube

- A. 0.5 cups
- B. 0.5 gallons
- C. 5 quarts
- D. 5 grams

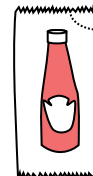
2)



Paint in a can

- A. 0.5 pints
- B. 3 fluid ounces
- C. 1 gallon
- D. 1 cup

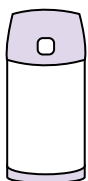
3)



Ketchup in a packet

- A. 2 quarts
- B. less than 1 cup
- C. 1.5 pints
- D. 0.5 gallons

4)



Liquid in a thermos

- A. 1 gallon
- B. 1 cup
- C. 2 pounds
- D. 4 quarts

5)



Shampoo in a bottle

- A. 2 pints
- B. 0.5 gallons
- C. 100 cups
- D. 1 cup

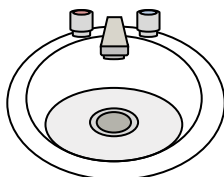
6)



Glue in a bottle

- A. 0.5 cups
- B. 2 quarts
- C. 1 pint
- D. 3 gallons

7)



Water in bathroom sink

- A. 2 gallons
- B. 2 fluid ounces
- C. 2 pints
- D. 2 cups


8)



Liquid in a tea cup

- A. 1 cup
- B. 1 gallon
- C. 1 quart
- D. 1 pint

9)



Sand a wheel barrow holds

- A. 45 gallons
- B. 1000 grams
- C. 4 cups
- D. 8 quarts



Determine which letter best represents the volume.

Answers

Cup

A cup is about the amount of milk you get from the cafeteria.



Pint

A pint is about the amount you get in a large glass.

1 pint = 2 cups



Quart

A quart is about the amount you get in a large milk container.

1 quart = 2 pints



Gallon

A gallon is the amount that comes in the large plastic container.

1 gallon = 4 quarts



1. _____
2. _____
3. _____
4. _____
5. _____
6. _____
7. _____
8. _____
9. _____


1)



Water for a house plant

- A. 3 gallons
- B. 2 cups
- C. 6 quarts
- D. 4 pounds

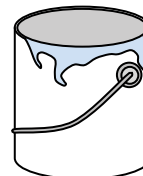
2)



Water a barrel holds

- A. 20 cups
- B. 50 gallons
- C. 3 inches
- D. 10 pints

3)



Paint in a can

- A. 3 fluid ounces
- B. 1 cup
- C. 1 gallon
- D. 0.5 pints

4)



Ink in a pen

- A. 1 quart
- B. less than 1 cup
- C. 1 gallon
- D. 2 pints


5)



Cereal Bowl

- A. 2 gallons
- B. 1 pint
- C. 4 pints
- D. 0.5 gallons

6)



Liquid in a thermos

- A. 2 pounds
- B. 4 quarts
- C. 1 gallon
- D. 1 cup

7)



Liquid in a tea cup

- A. 1 pint
- B. 1 quart
- C. 1 cup
- D. 1 gallon


8)



Flour in a batch of cookies

- A. 2 quarts
- B. 1.5 cups
- C. 2 gallons
- D. 5 gallons

9)



Liquid in a pitcher

- A. 1 pint
- B. 2 quarts
- C. 8 gallons
- D. 2 cups



Determine which letter best represents the volume.

Cup

A cup is about the amount of milk you get from the cafeteria.

Pint

A pint is about the amount you get in a large glass.

1 pint = 2 cups

Quart

A quart is about the amount you get in a large milk container.

1 quart = 2 pints

Gallon

A gallon is the amount that comes in the large plastic container.

1 gallon = 4 quarts




1)



Water for a house plant

- A. 3 gallons
- B. 2 cups
- C. 6 quarts
- D. 4 pounds

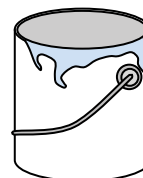
2)



Water a barrel holds

- A. 20 cups
- B. 50 gallons
- C. 3 inches
- D. 10 pints

3)



Paint in a can

- A. 3 fluid ounces
- B. 1 cup
- C. 1 gallon
- D. 0.5 pints

4)



Ink in a pen

- A. 1 quart
- B. less than 1 cup
- C. 1 gallon
- D. 2 pints


5)



Cereal Bowl

- A. 2 gallons
- B. 1 pint
- C. 4 pints
- D. 0.5 gallons

6)



Liquid in a thermos

- A. 2 pounds
- B. 4 quarts
- C. 1 gallon
- D. 1 cup

7)



Liquid in a tea cup

- A. 1 pint
- B. 1 quart
- C. 1 cup
- D. 1 gallon


8)



Flour in a batch of cookies

- A. 2 quarts
- B. 1.5 cups
- C. 2 gallons
- D. 5 gallons

9)



Liquid in a pitcher

- A. 1 pint
- B. 2 quarts
- C. 8 gallons
- D. 2 cups

Answers

1. **B**

2. **B**

3. **C**

4. **B**

5. **B**

6. **D**

7. **C**

8. **B**

9. **B**



Determine which letter best represents the volume.

Answers

Cup

A cup is about the amount of milk you get from the cafeteria.

Pint

A pint is about the amount you get in a large glass.

1 pint = 2 cups

Quart

A quart is about the amount you get in a large milk container.

1 quart = 2 pints


Gallon

A gallon is the amount that comes in the large plastic container.

1 gallon = 4 quarts



1)



Gas tank in a car

- A. 16 cups
- B. 4 pints
- C. 3 quarts
- D. 15 gallons

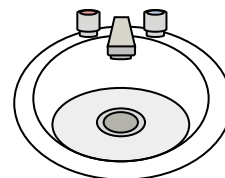
2)



Toothpaste in a tube

- A. 0.5 gallons
- B. 5 grams
- C. 5 quarts
- D. 0.5 cups

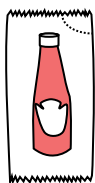
3)



Water in bathroom sink

- A. 2 pints
- B. 2 fluid ounces
- C. 2 gallons
- D. 2 cups

4)



Ketchup in a packet

- A. 2 quarts
- B. 0.5 gallons
- C. less than 1 cup
- D. 1.5 pints


5)



Glue in a bottle

- A. 1 pint
- B. 3 gallons
- C. 0.5 cups
- D. 2 quarts

6)



Sand a wheel barrow holds

- A. 45 gallons
- B. 1000 grams
- C. 8 quarts
- D. 4 cups

7)



Sand in a pail

- A. 7 fluid ounces
- B. 1 gallon
- C. 32 gallons
- D. 1 cup

8)



Liquid a spoon holds

- A. Less than a cup
- B. 1 cup
- C. 1 pint
- D. 1 quart

9)



Soda in a can

- A. 1 gallon
- B. 1.5 cups
- C. 4 cups
- D. 4 pints

- 1. _____
- 2. _____
- 3. _____
- 4. _____
- 5. _____
- 6. _____
- 7. _____
- 8. _____
- 9. _____



Determine which letter best represents the volume.

Cup

A cup is about the amount of milk you get from the cafeteria.



Pint

A pint is about the amount you get in a large glass.

1 pint = 2 cups



Quart

A quart is about the amount you get in a large milk container.

1 quart = 2 pints



Gallon


A gallon is the amount that comes in the large plastic container.

1 gallon = 4 quarts



Answers

1)



Gas tank in a car

- A. 16 cups
- B. 4 pints
- C. 3 quarts
- D. 15 gallons

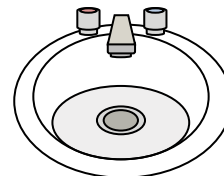
2)



Toothpaste in a tube

- A. 0.5 gallons
- B. 5 grams
- C. 5 quarts
- D. 0.5 cups

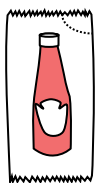
3)



Water in bathroom sink

- A. 2 pints
- B. 2 fluid ounces
- C. 2 gallons
- D. 2 cups

4)



Ketchup in a packet

- A. 2 quarts
- B. 0.5 gallons
- C. less than 1 cup
- D. 1.5 pints


5)



Glue in a bottle

- A. 1 pint
- B. 3 gallons
- C. 0.5 cups
- D. 2 quarts

6)



Sand a wheel barrow holds

- A. 45 gallons
- B. 1000 grams
- C. 8 quarts
- D. 4 cups

7)



Sand in a pail

- A. 7 fluid ounces
- B. 1 gallon
- C. 32 gallons
- D. 1 cup

8)



Liquid a spoon holds

- A. Less than a cup
- B. 1 cup
- C. 1 pint
- D. 1 quart

9)



Soda in a can

- A. 1 gallon
- B. 1.5 cups
- C. 4 cups
- D. 4 pints

- 1. **D**
- 2. **D**
- 3. **C**
- 4. **C**
- 5. **C**
- 6. **A**
- 7. **B**
- 8. **A**
- 9. **B**



Determine which letter best represents the volume.

Answers

Cup

A cup is about the amount of milk you get from the cafeteria.

Pint

A pint is about the amount you get in a large glass.

1 pint = 2 cups

Quart

A quart is about the amount you get in a large milk container.

1 quart = 2 pints

Gallon

A gallon is the amount that comes in the large plastic container.

1 gallon = 4 quarts



1. _____
2. _____
3. _____
4. _____
5. _____
6. _____
7. _____
8. _____
9. _____


1)



Glue in a bottle

- A. 1 pint
- B. 3 gallons
- C. 2 quarts
- D. 0.5 cups


2)



Sand a wheel barrow holds

- A. 8 quarts
- B. 45 gallons
- C. 4 cups
- D. 1000 grams

3)



Ice Chest

- A. 16 cups
- B. 2 quarts
- C. 100 quarts
- D. 5 gallons


4)



Paint in a can

- A. 3 fluid ounces
- B. 1 cup
- C. 0.5 pints
- D. 1 gallon

5)



Eyedropper holds

- A. 3 gallons
- B. 1 pint
- C. less than 1 cup
- D. 1 cup

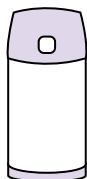
6)



Toothpaste in a tube

- A. 0.5 cups
- B. 5 grams
- C. 5 quarts
- D. 0.5 gallons

7)



Liquid in a thermos

- A. 1 gallon
- B. 1 cup
- C. 4 quarts
- D. 2 pounds

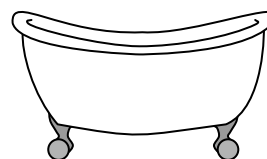
8)



Sand in a pail

- A. 32 gallons
- B. 1 cup
- C. 1 gallon
- D. 7 fluid ounces

9)



Bathtub

- A. 20 pints
- B. 45 gallons
- C. 40 cups
- D. 8 quarts



Determine which letter best represents the volume.

Cup

A cup is about the amount of milk you get from the cafeteria.

Pint

A pint is about the amount you get in a large glass.

1 pint = 2 cups

Quart

A quart is about the amount you get in a large milk container.

1 quart = 2 pints

Gallon

A gallon is the amount that comes in the large plastic container.

1 gallon = 4 quarts




1)



Glue in a bottle

- A. 1 pint
- B. 3 gallons
- C. 2 quarts
- D. 0.5 cups


2)



Sand a wheel barrow holds

- A. 8 quarts
- B. 45 gallons
- C. 4 cups
- D. 1000 grams

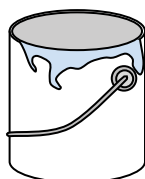
3)



Ice Chest

- A. 16 cups
- B. 2 quarts
- C. 100 quarts
- D. 5 gallons


4)



Paint in a can

- A. 3 fluid ounces
- B. 1 cup
- C. 0.5 pints
- D. 1 gallon

5)



Eyedropper holds

- A. 3 gallons
- B. 1 pint
- C. less than 1 cup
- D. 1 cup

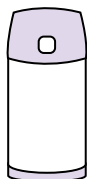
6)



Toothpaste in a tube

- A. 0.5 cups
- B. 5 grams
- C. 5 quarts
- D. 0.5 gallons

7)



Liquid in a thermos

- A. 1 gallon
- B. 1 cup
- C. 4 quarts
- D. 2 pounds

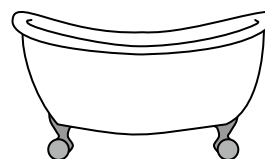
8)



Sand in a pail

- A. 32 gallons
- B. 1 cup
- C. 1 gallon
- D. 7 fluid ounces

9)



Bathtub

- A. 20 pints
- B. 45 gallons
- C. 40 cups
- D. 8 quarts

Answers

1. **D**

2. **B**

3. **C**

4. **D**

5. **C**

6. **A**

7. **B**

8. **C**

9. **B**



Determine which letter best represents the volume.

Answers

Cup

A cup is about the amount of milk you get from the cafeteria.



Pint

A pint is about the amount you get in a large glass.

1 pint = 2 cups



Quart

A quart is about the amount you get in a large milk container.

1 quart = 2 pints



Gallon

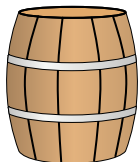
A gallon is the amount that comes in the large plastic container.

1 gallon = 4 quarts



1. _____
2. _____
3. _____
4. _____
5. _____
6. _____
7. _____
8. _____
9. _____


1)



Water a barrel holds

- A. 20 cups
- B. 10 pints
- C. 3 inches
- D. 50 gallons


2)



Gas tank in a car

- A. 3 quarts
- B. 4 pints
- C. 15 gallons
- D. 16 cups

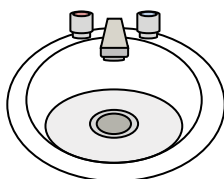
3)



Sand a wheel barrow holds

- A. 8 quarts
- B. 45 gallons
- C. 1000 grams
- D. 4 cups

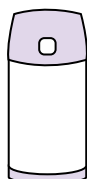
4)



Water in bathroom sink

- A. 2 fluid ounces
- B. 2 gallons
- C. 2 cups
- D. 2 pints

5)



Liquid in a thermos

- A. 1 cup
- B. 1 gallon
- C. 2 pounds
- D. 4 quarts


6)



Liquid a spoon holds

- A. 1 cup
- B. Less than a cup
- C. 1 pint
- D. 1 quart

7)



Liquid in a pitcher

- A. 1 pint
- B. 2 quarts
- C. 2 cups
- D. 8 gallons

8)



Ink in a pen

- A. 1 gallon
- B. 2 pints
- C. less than 1 cup
- D. 1 quart

9)



Soda in a can

- A. 4 cups
- B. 1.5 cups
- C. 4 pints
- D. 1 gallon



Determine which letter best represents the volume.

Cup

A cup is about the amount of milk you get from the cafeteria.



Pint

A pint is about the amount you get in a large glass.

1 pint = 2 cups



Quart

A quart is about the amount you get in a large milk container.

1 quart = 2 pints



Gallon


A gallon is the amount that comes in the large plastic container.

1 gallon = 4 quarts



Answers


1)



Water a barrel holds

- A. 20 cups
- B. 10 pints
- C. 3 inches
- D. 50 gallons


2)



Gas tank in a car

- A. 3 quarts
- B. 4 pints
- C. 15 gallons
- D. 16 cups

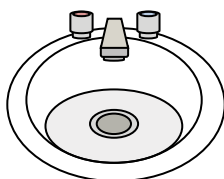
3)



Sand a wheel barrow holds

- A. 8 quarts
- B. 45 gallons
- C. 1000 grams
- D. 4 cups

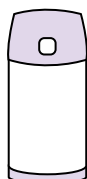
4)



Water in bathroom sink

- A. 2 fluid ounces
- B. 2 gallons
- C. 2 cups
- D. 2 pints

5)



Liquid in a thermos

- A. 1 cup
- B. 1 gallon
- C. 2 pounds
- D. 4 quarts


6)



Liquid a spoon holds

- A. 1 cup
- B. Less than a cup
- C. 1 pint
- D. 1 quart

7)



Liquid in a pitcher

- A. 1 pint
- B. 2 quarts
- C. 2 cups
- D. 8 gallons

8)



Ink in a pen

- A. 1 gallon
- B. 2 pints
- C. less than 1 cup
- D. 1 quart

9)



Soda in a can

- A. 4 cups
- B. 1.5 cups
- C. 4 pints
- D. 1 gallon

- 1. **D**
- 2. **C**
- 3. **B**
- 4. **B**
- 5. **A**
- 6. **B**
- 7. **B**
- 8. **C**
- 9. **B**



Determine which letter best represents the volume.

Answers

Cup

A cup is about the amount of milk you get from the cafeteria.

Pint

A pint is about the amount you get in a large glass.

1 pint = 2 cups

Quart

A quart is about the amount you get in a large milk container.

1 quart = 2 pints


Gallon

A gallon is the amount that comes in the large plastic container.

1 gallon = 4 quarts



1)



Bathtub

- A. 40 cups
- B. 20 pints
- C. 45 gallons
- D. 8 quarts


2)



Sand in a pail

- A. 32 gallons
- B. 1 gallon
- C. 1 cup
- D. 7 fluid ounces

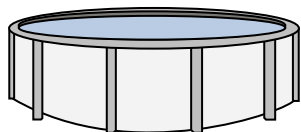
3)



Eyedropper holds

- A. 3 gallons
- B. 1 cup
- C. less than 1 cup
- D. 1 pint


4)



Water in a pool

- A. 5000 feet
- B. 25 cups
- C. 20 gallons
- D. 3000 gallons

5)



Liquid in a pitcher

- A. 1 pint
- B. 8 gallons
- C. 2 cups
- D. 2 quarts

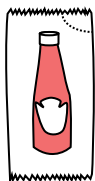
6)



Shampoo in a bottle

- A. 0.5 gallons
- B. 100 cups
- C. 1 cup
- D. 2 pints

7)



Ketchup in a packet

- A. 0.5 gallons
- B. 1.5 pints
- C. less than 1 cup
- D. 2 quarts


8)



Water for a house plant

- A. 6 quarts
- B. 4 pounds
- C. 2 cups
- D. 3 gallons

9)



Water a barrel holds

- A. 3 inches
- B. 10 pints
- C. 20 cups
- D. 50 gallons

- 1. _____
- 2. _____
- 3. _____
- 4. _____
- 5. _____
- 6. _____
- 7. _____
- 8. _____
- 9. _____



Determine which letter best represents the volume.

Cup

A cup is about the amount of milk you get from the cafeteria.

Pint

A pint is about the amount you get in a large glass.

1 pint = 2 cups

Quart

A quart is about the amount you get in a large milk container.

1 quart = 2 pints

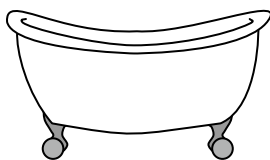
Gallon

A gallon is the amount that comes in the large plastic container.

1 gallon = 4 quarts



1)



Bathtub

- A. 40 cups
- B. 20 pints
- C. 45 gallons
- D. 8 quarts


2)



Sand in a pail

- A. 32 gallons
- B. 1 gallon
- C. 1 cup
- D. 7 fluid ounces

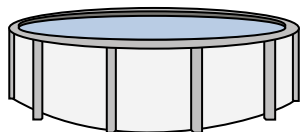
3)



Eyedropper holds

- A. 3 gallons
- B. 1 cup
- C. less than 1 cup
- D. 1 pint


4)



Water in a pool

- A. 5000 feet
- B. 25 cups
- C. 20 gallons
- D. 3000 gallons

5)



Liquid in a pitcher

- A. 1 pint
- B. 8 gallons
- C. 2 cups
- D. 2 quarts

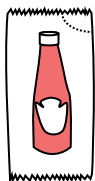
6)



Shampoo in a bottle

- A. 0.5 gallons
- B. 100 cups
- C. 1 cup
- D. 2 pints

7)



Ketchup in a packet

- A. 0.5 gallons
- B. 1.5 pints
- C. less than 1 cup
- D. 2 quarts


8)



Water for a house plant

- A. 6 quarts
- B. 4 pounds
- C. 2 cups
- D. 3 gallons

9)



Water a barrel holds

- A. 3 inches
- B. 10 pints
- C. 20 cups
- D. 50 gallons

Answers

- 1. **C**
- 2. **B**
- 3. **C**
- 4. **D**
- 5. **D**
- 6. **D**
- 7. **C**
- 8. **C**
- 9. **D**



Determine which letter best represents the volume.

Answers

Cup

A cup is about the amount of milk you get from the cafeteria.

Pint

A pint is about the amount you get in a large glass.

1 pint = 2 cups

Quart

A quart is about the amount you get in a large milk container.

1 quart = 2 pints

Gallon

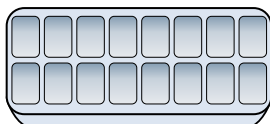
A gallon is the amount that comes in the large plastic container.

1 gallon = 4 quarts



1. _____
2. _____
3. _____
4. _____
5. _____
6. _____
7. _____
8. _____
9. _____


1)



Water in an ice tray

- A. 10 gallons
- B. 1 pint
- C. 4 pints
- D. 1 gallon

2)



Soda in a can

- A. 1.5 cups
- B. 4 cups
- C. 4 pints
- D. 1 gallon


3)



Measuring Cup

- A. 1 quart
- B. 1 pint
- C. 1 gallon
- D. 1 cup


4)



Sand a wheel barrow holds

- A. 4 cups
- B. 1000 grams
- C. 45 gallons
- D. 8 quarts


5)



Gas tank in a car

- A. 16 cups
- B. 4 pints
- C. 15 gallons
- D. 3 quarts

6)



Eyedropper holds

- A. less than 1 cup
- B. 1 cup
- C. 3 gallons
- D. 1 pint

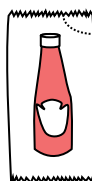
7)



2 liter of Soda

- A. 2 cups
- B. 1 pint
- C. 0.5 gallons
- D. 5 gallons

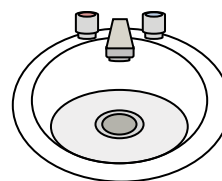
8)



Ketchup in a packet

- A. 0.5 gallons
- B. less than 1 cup
- C. 1.5 pints
- D. 2 quarts

9)



Water in bathroom sink

- A. 2 cups
- B. 2 gallons
- C. 2 pints
- D. 2 fluid ounces



Determine which letter best represents the volume.

Cup

A cup is about the amount of milk you get from the cafeteria.

Pint

A pint is about the amount you get in a large glass.

1 pint = 2 cups

Quart

A quart is about the amount you get in a large milk container.

1 quart = 2 pints


Gallon

A gallon is the amount that comes in the large plastic container.

1 gallon = 4 quarts




1)



Water in an ice tray

- A. 10 gallons
- B. 1 pint
- C. 4 pints
- D. 1 gallon

2)



Soda in a can

- A. 1.5 cups
- B. 4 cups
- C. 4 pints
- D. 1 gallon


3)



Measuring Cup

- A. 1 quart
- B. 1 pint
- C. 1 gallon
- D. 1 cup


4)



Sand a wheel barrow holds

- A. 4 cups
- B. 1000 grams
- C. 45 gallons
- D. 8 quarts


5)



Gas tank in a car

- A. 16 cups
- B. 4 pints
- C. 15 gallons
- D. 3 quarts

6)



Eyedropper holds

- A. less than 1 cup
- B. 1 cup
- C. 3 gallons
- D. 1 pint

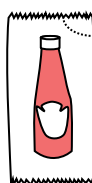
7)



2 liter of Soda

- A. 2 cups
- B. 1 pint
- C. 0.5 gallons
- D. 5 gallons

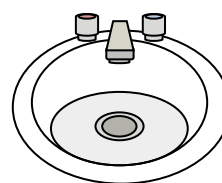
8)



Ketchup in a packet

- A. 0.5 gallons
- B. less than 1 cup
- C. 1.5 pints
- D. 2 quarts

9)



Water in bathroom sink

- A. 2 cups
- B. 2 gallons
- C. 2 pints
- D. 2 fluid ounces

Answers

1. **B**

2. **A**

3. **D**

4. **C**

5. **C**

6. **A**

7. **C**

8. **B**

9. **B**



Determine which letter best represents the volume.

Answers

Cup

A cup is about the amount of milk you get from the cafeteria.

Pint

A pint is about the amount you get in a large glass.

1 pint = 2 cups

Quart

A quart is about the amount you get in a large milk container.

1 quart = 2 pints


Gallon

A gallon is the amount that comes in the large plastic container.

1 gallon = 4 quarts




1)



Bathtub

- A. 40 cups
- B. 8 quarts
- C. 20 pints
- D. 45 gallons


2)



Eyedropper holds

- A. 1 pint
- B. 3 gallons
- C. less than 1 cup
- D. 1 cup

3)



Liquid in a pitcher

- A. 2 cups
- B. 1 pint
- C. 2 quarts
- D. 8 gallons

4)



Cereal Bowl

- A. 0.5 gallons
- B. 4 pints
- C. 2 gallons
- D. 1 pint

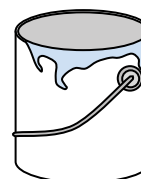
5)



Liquid a spoon holds

- A. Less than a cup
- B. 1 cup
- C. 1 pint
- D. 1 quart

6)



Paint in a can

- A. 3 fluid ounces
- B. 1 gallon
- C. 1 cup
- D. 0.5 pints


7)



2 liter of Soda

- A. 0.5 gallons
- B. 5 gallons
- C. 1 pint
- D. 2 cups


8)



Soda in a can

- A. 4 cups
- B. 1.5 cups
- C. 4 pints
- D. 1 gallon

9)



Ice Chest

- A. 100 quarts
- B. 16 cups
- C. 5 gallons
- D. 2 quarts

- 1. _____
- 2. _____
- 3. _____
- 4. _____
- 5. _____
- 6. _____
- 7. _____
- 8. _____
- 9. _____



Determine which letter best represents the volume.

Cup

A cup is about the amount of milk you get from the cafeteria.

Pint

A pint is about the amount you get in a large glass.

1 pint = 2 cups

Quart

A quart is about the amount you get in a large milk container.

1 quart = 2 pints


Gallon

A gallon is the amount that comes in the large plastic container.

1 gallon = 4 quarts




1)



Bathtub

- A. 40 cups
- B. 8 quarts
- C. 20 pints
- D. 45 gallons


2)



Eyedropper holds

- A. 1 pint
- B. 3 gallons
- C. less than 1 cup
- D. 1 cup

3)



Liquid in a pitcher

- A. 2 cups
- B. 1 pint
- C. 2 quarts
- D. 8 gallons

4)



Cereal Bowl

- A. 0.5 gallons
- B. 4 pints
- C. 2 gallons
- D. 1 pint

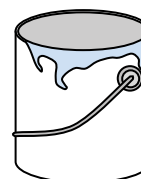
5)



Liquid a spoon holds

- A. Less than a cup
- B. 1 cup
- C. 1 pint
- D. 1 quart

6)



Paint in a can

- A. 3 fluid ounces
- B. 1 gallon
- C. 1 cup
- D. 0.5 pints

7)



2 liter of Soda

- A. 0.5 gallons
- B. 5 gallons
- C. 1 pint
- D. 2 cups


8)



Soda in a can

- A. 4 cups
- B. 1.5 cups
- C. 4 pints
- D. 1 gallon

9)



Ice Chest

- A. 100 quarts
- B. 16 cups
- C. 5 gallons
- D. 2 quarts

Answers

1. **D**

2. **C**

3. **C**

4. **D**

5. **A**

6. **B**

7. **A**

8. **B**

9. **A**