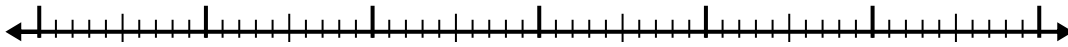


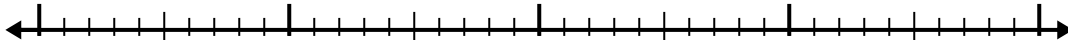


Use the number line to solve each problem.

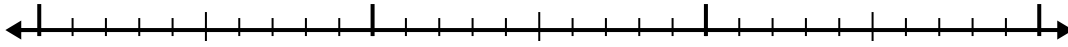
1)  $2.1 + 3.4 =$



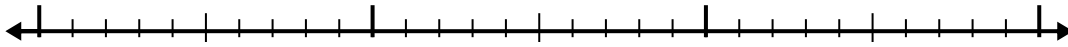
2)  $2.5 + 2.1 =$



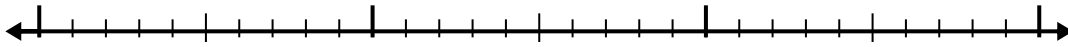
3)  $6.9 + 1.2 =$




4)  $6.8 + 1.3 =$




5)  $7.1 + 1.8 =$




6)  $3.8 + 2.1 =$



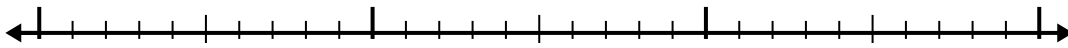
7)  $7.2 + 2.1 =$



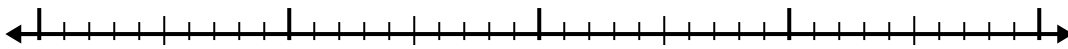
8)  $6 + 1.8 =$



9)  $4.5 + 1.1 =$



10)  $3.3 + 2.7 =$



Answers

1. \_\_\_\_\_

2. \_\_\_\_\_

3. \_\_\_\_\_

4. \_\_\_\_\_

5. \_\_\_\_\_

6. \_\_\_\_\_

7. \_\_\_\_\_

8. \_\_\_\_\_

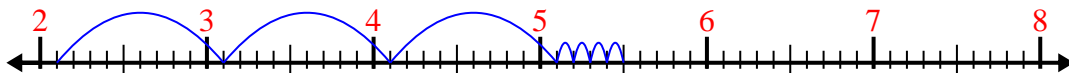
9. \_\_\_\_\_

10. \_\_\_\_\_

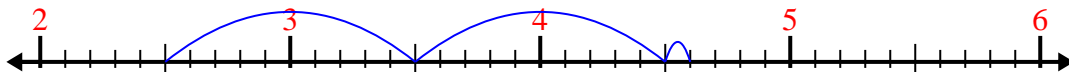


Use the number line to solve each problem.

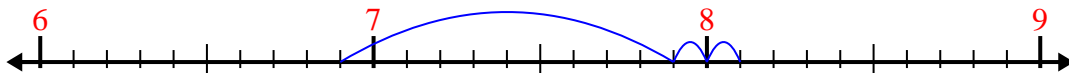
1)  $2.1 + 3.4 =$




2)  $2.5 + 2.1 =$



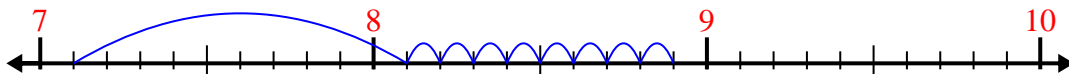
3)  $6.9 + 1.2 =$



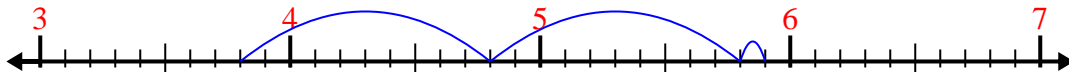
4)  $6.8 + 1.3 =$



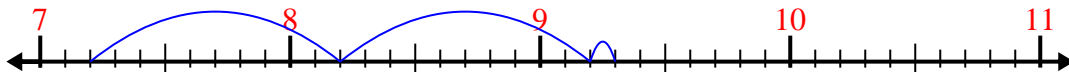
5)  $7.1 + 1.8 =$



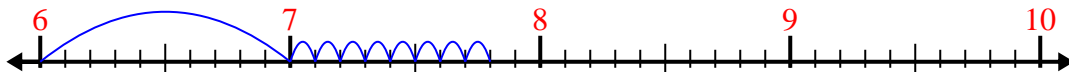
6)  $3.8 + 2.1 =$



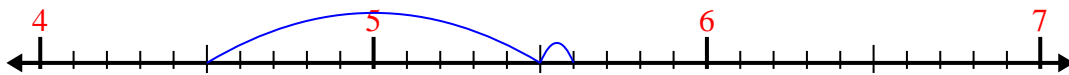
7)  $7.2 + 2.1 =$



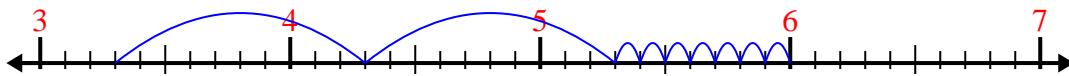
8)  $6 + 1.8 =$



9)  $4.5 + 1.1 =$



10)  $3.3 + 2.7 =$



Answers

1. 5.5

2. 4.6

3. 8.1

4. 8.1

5. 8.9

6. 5.9

7. 9.3

8. 7.8


9. 5.6

10. 6.0

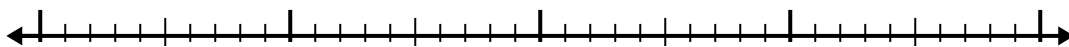


Use the number line to solve each problem.

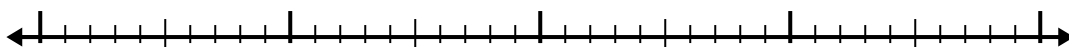
1)  $6.1 + 1.7 =$



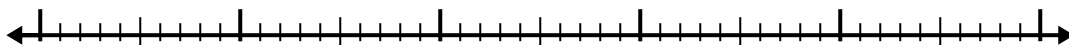
2)  $2.8 + 1.3 =$



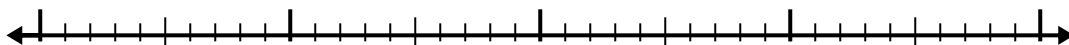
3)  $5.6 + 1.3 =$



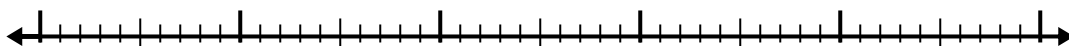
4)  $7.5 + 3.7 =$



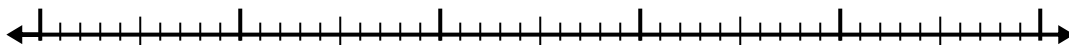
5)  $7.8 + 2.9 =$



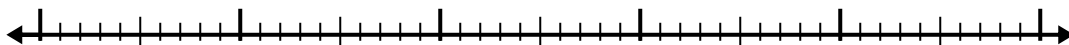
6)  $3.4 + 2.5 =$



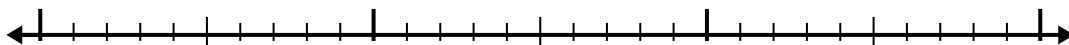
7)  $6.7 + 2.7 =$



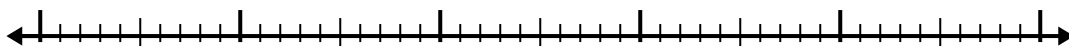
8)  $2.1 + 3.3 =$



9)  $1 + 1.7 =$



10)  $3 + 3.1 =$

**Answers**

1. \_\_\_\_\_

2. \_\_\_\_\_

3. \_\_\_\_\_

4. \_\_\_\_\_

5. \_\_\_\_\_

6. \_\_\_\_\_

7. \_\_\_\_\_

8. \_\_\_\_\_

9. \_\_\_\_\_

10. \_\_\_\_\_

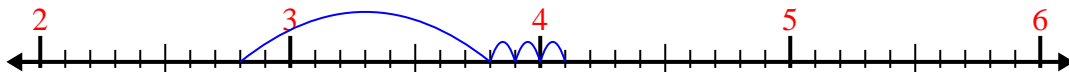


Use the number line to solve each problem.

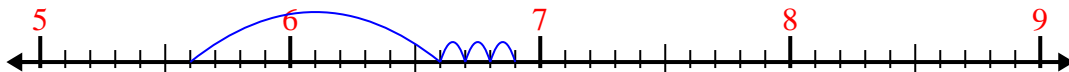
1)  $6.1 + 1.7 =$



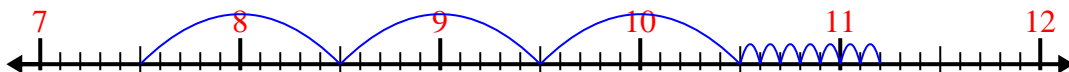
2)  $2.8 + 1.3 =$



3)  $5.6 + 1.3 =$



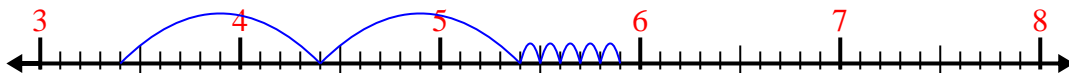
4)  $7.5 + 3.7 =$



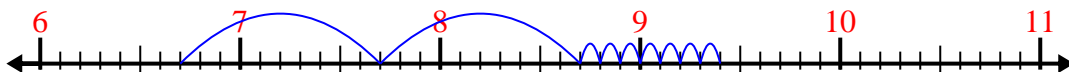
5)  $7.8 + 2.9 =$



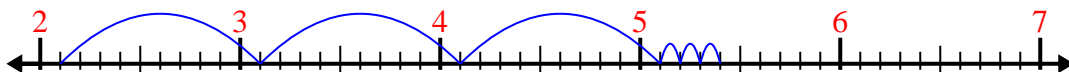
6)  $3.4 + 2.5 =$



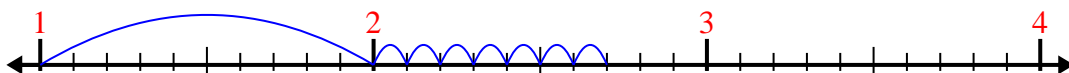
7)  $6.7 + 2.7 =$



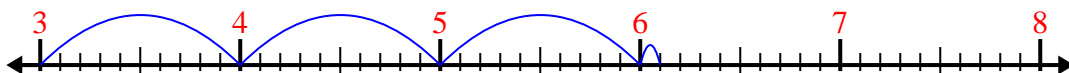
8)  $2.1 + 3.3 =$



9)  $1 + 1.7 =$



10)  $3 + 3.1 =$



Answers

1. 7.8

2. 4.1

3. 6.9

4. 11.2

5. 10.7

6. 5.9

7. 9.4

8. 5.4

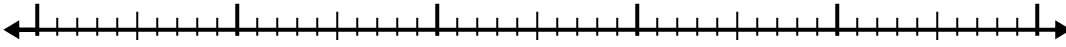
9. 2.7

10. 6.1

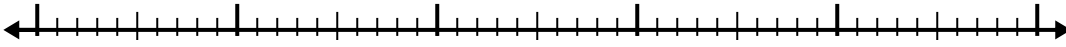


Use the number line to solve each problem.

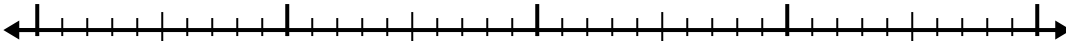
1)  $2.6 + 3.6 =$



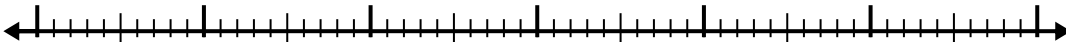
2)  $3 + 2.2 =$



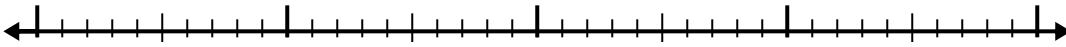
3)  $1.1 + 2.2 =$



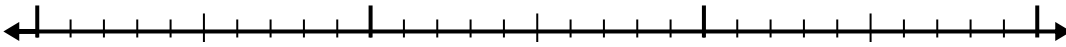
4)  $3.7 + 3.9 =$



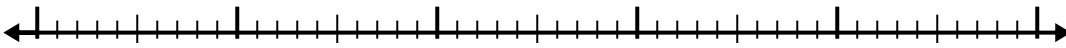
5)  $8.2 + 2.2 =$



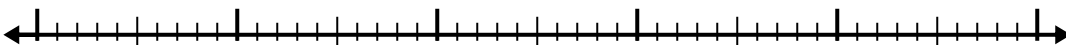
6)  $5.4 + 1.8 =$



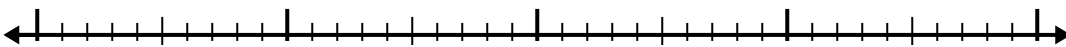
7)  $2.2 + 3.6 =$



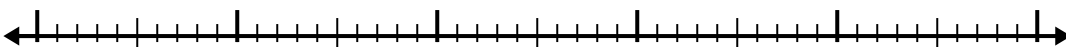
8)  $5.4 + 2.8 =$



9)  $3.5 + 2.2 =$



10)  $1.9 + 2.2 =$



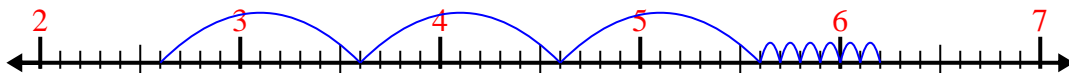
Answers

- 1. \_\_\_\_\_
- 2. \_\_\_\_\_
- 3. \_\_\_\_\_
- 4. \_\_\_\_\_
- 5. \_\_\_\_\_
- 6. \_\_\_\_\_
- 7. \_\_\_\_\_
- 8. \_\_\_\_\_
- 9. \_\_\_\_\_
- 10. \_\_\_\_\_

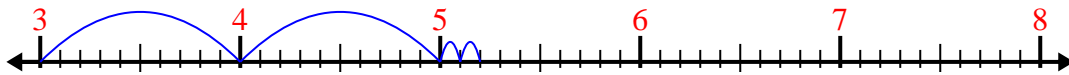


Use the number line to solve each problem.

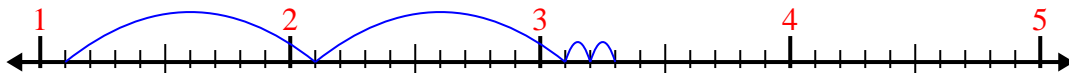
1)  $2.6 + 3.6 =$



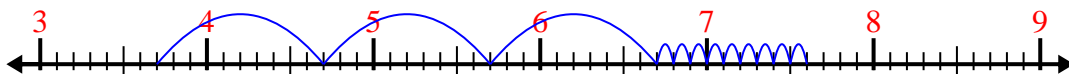
2)  $3 + 2.2 =$



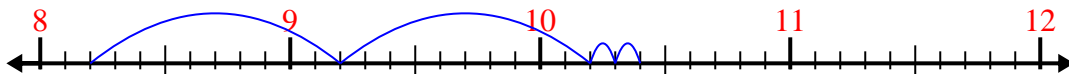
3)  $1.1 + 2.2 =$



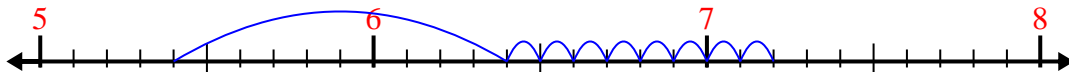
4)  $3.7 + 3.9 =$



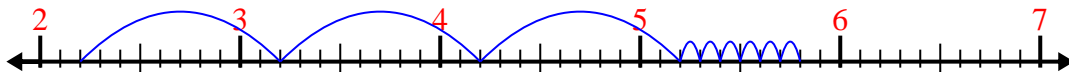
5)  $8.2 + 2.2 =$



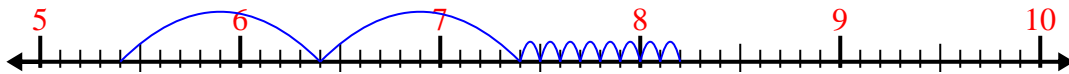
6)  $5.4 + 1.8 =$



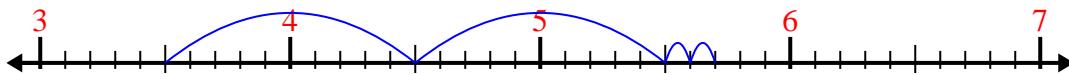
7)  $2.2 + 3.6 =$



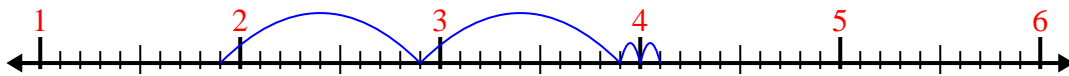
8)  $5.4 + 2.8 =$



9)  $3.5 + 2.2 =$



10)  $1.9 + 2.2 =$



Answers

1. 6.2

2. 5.2

3. 3.3

4. 7.6

5. 10.4

6. 7.2

7. 5.8

8. 8.2

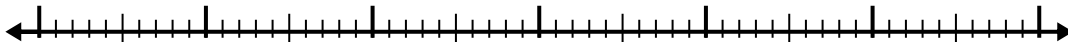
9. 5.7

10. 4.1

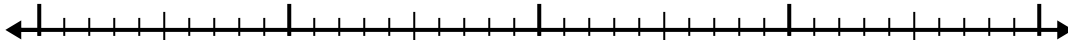


Use the number line to solve each problem.

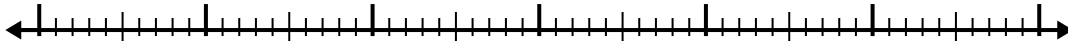
1)  $2.7 + 3.1 =$



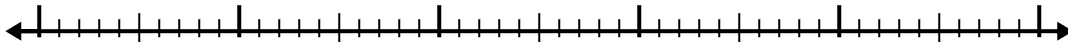
2)  $5.1 + 2.3 =$



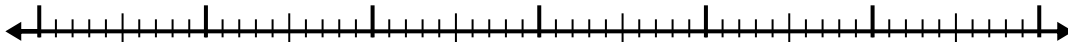
3)  $7.2 + 3.1 =$




4)  $3.2 + 3.7 =$



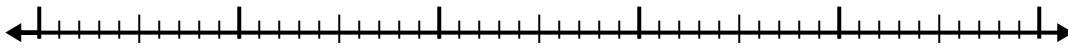
5)  $7.6 + 3.6 =$



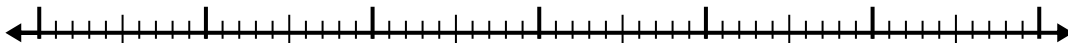
6)  $1.8 + 2.7 =$



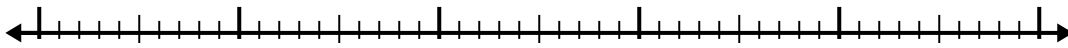
7)  $1.7 + 2.4 =$



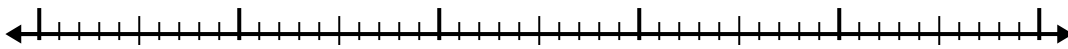
8)  $8.8 + 3.6 =$



9)  $8.9 + 2.6 =$



10)  $5.3 + 3.9 =$



Answers

1. \_\_\_\_\_

2. \_\_\_\_\_

3. \_\_\_\_\_

4. \_\_\_\_\_

5. \_\_\_\_\_

6. \_\_\_\_\_

7. \_\_\_\_\_

8. \_\_\_\_\_

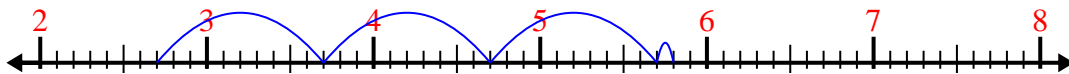
9. \_\_\_\_\_

10. \_\_\_\_\_

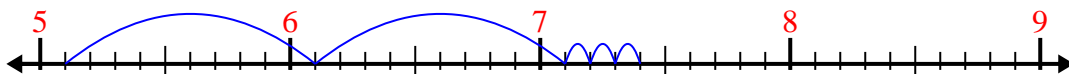


Use the number line to solve each problem.

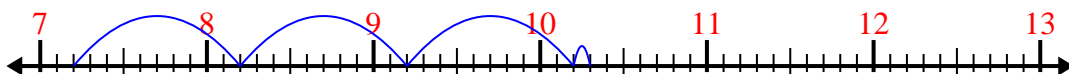
1)  $2.7 + 3.1 =$



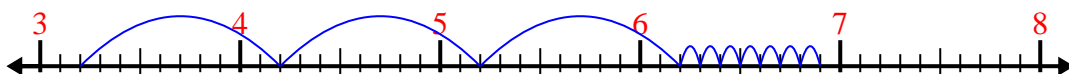
2)  $5.1 + 2.3 =$



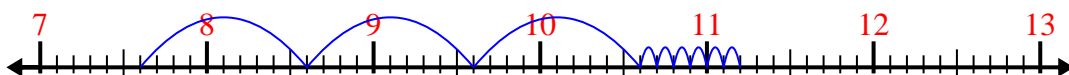
3)  $7.2 + 3.1 =$



4)  $3.2 + 3.7 =$



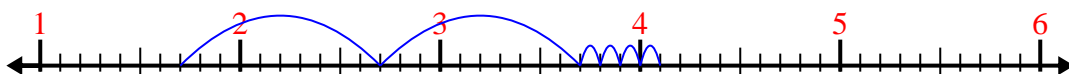
5)  $7.6 + 3.6 =$



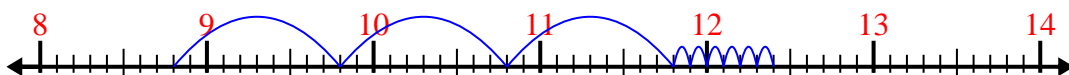
6)  $1.8 + 2.7 =$



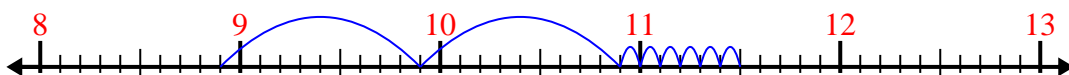
7)  $1.7 + 2.4 =$



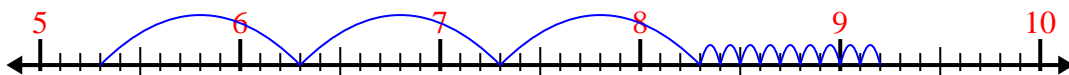
8)  $8.8 + 3.6 =$



9)  $8.9 + 2.6 =$



10)  $5.3 + 3.9 =$



Answers

1. 5.8

2. 7.4

3. 10.3

4. 6.9

5. 11.2

6. 4.5

7. 4.1

8. 12.4

9. 11.5

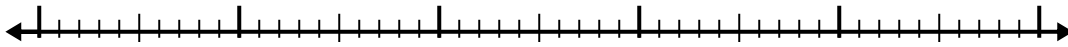
10. 9.2



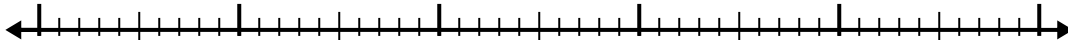


Use the number line to solve each problem.

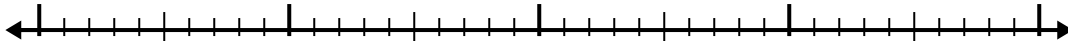
1)  $4.8 + 3.8 =$



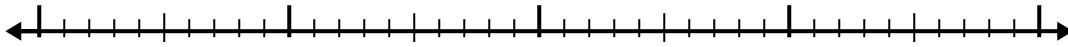
2)  $6.1 + 2.7 =$



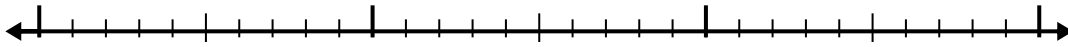
3)  $5.5 + 1.3 =$



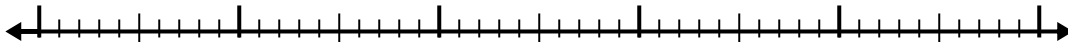
4)  $2.8 + 2.4 =$




5)  $1.4 + 1.3 =$



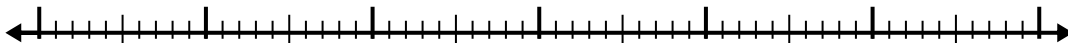
6)  $4.6 + 2.4 =$



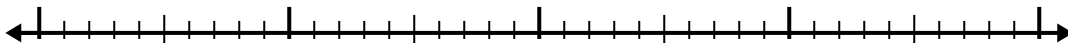
7)  $8 + 2.5 =$



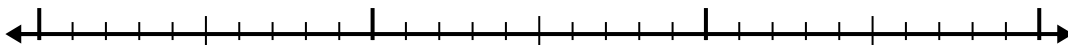
8)  $8.5 + 3.8 =$



9)  $1.5 + 2.7 =$



10)  $1.7 + 1.3 =$



Answers

1. \_\_\_\_\_

2. \_\_\_\_\_

3. \_\_\_\_\_

4. \_\_\_\_\_

5. \_\_\_\_\_

6. \_\_\_\_\_

7. \_\_\_\_\_

8. \_\_\_\_\_


9. \_\_\_\_\_

10. \_\_\_\_\_

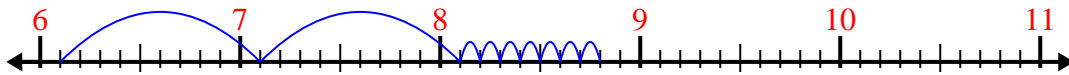


Use the number line to solve each problem.

1)  $4.8 + 3.8 =$



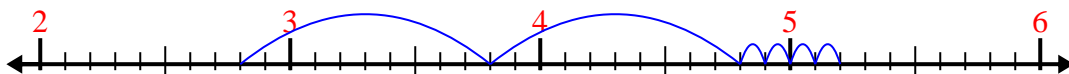
2)  $6.1 + 2.7 =$



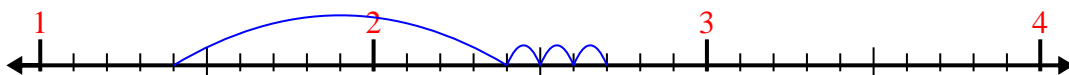
3)  $5.5 + 1.3 =$



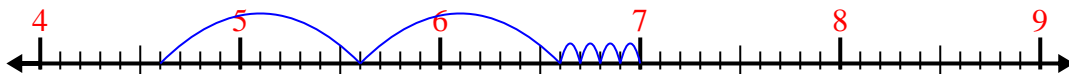
4)  $2.8 + 2.4 =$



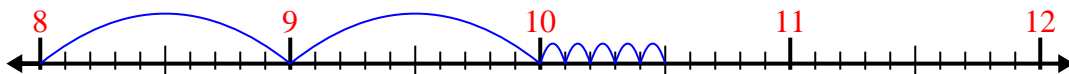
5)  $1.4 + 1.3 =$



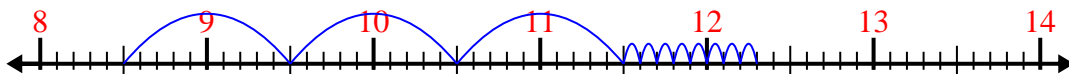
6)  $4.6 + 2.4 =$



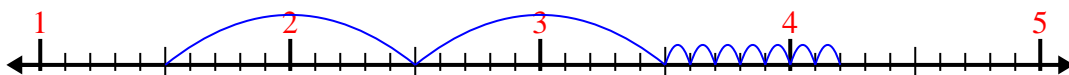
7)  $8 + 2.5 =$



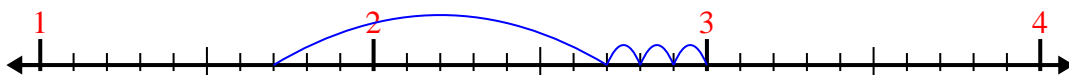
8)  $8.5 + 3.8 =$



9)  $1.5 + 2.7 =$



10)  $1.7 + 1.3 =$



Answers

1. 8.6

2. 8.8

3. 6.8

4. 5.2

5. 2.7

6. 7.0

7. 10.5

8. 12.3

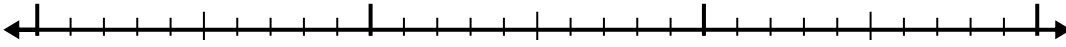
9. 4.2

10. 3.0

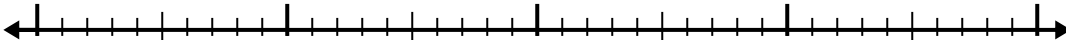


Use the number line to solve each problem.

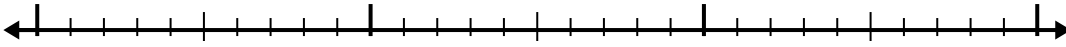
1)  $1.2 + 1.3 =$



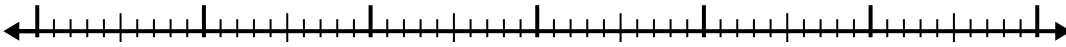
2)  $8.4 + 2.4 =$



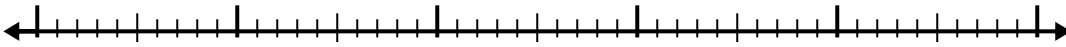
3)  $2.8 + 1.7 =$



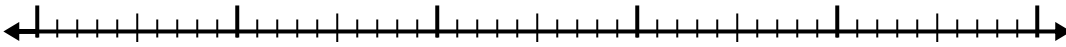
4)  $6.1 + 3.8 =$



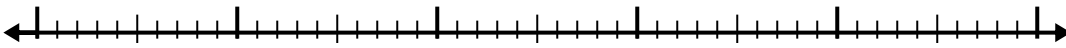
5)  $1.9 + 2.5 =$



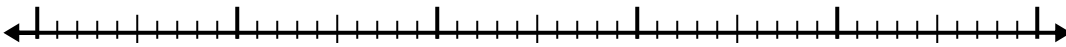
6)  $7.3 + 2.4 =$



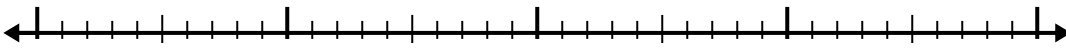
7)  $8.9 + 3.7 =$



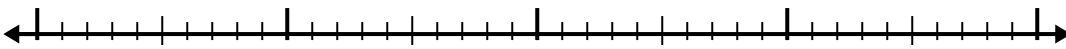
8)  $3.5 + 2.7 =$



9)  $6.1 + 1.6 =$



10)  $4.4 + 2.1 =$



Answers

1. \_\_\_\_\_

2. \_\_\_\_\_

3. \_\_\_\_\_

4. \_\_\_\_\_

5. \_\_\_\_\_

6. \_\_\_\_\_

7. \_\_\_\_\_

8. \_\_\_\_\_

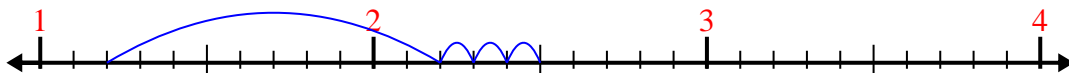
9. \_\_\_\_\_

10. \_\_\_\_\_

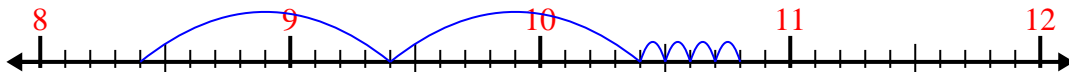


Use the number line to solve each problem.

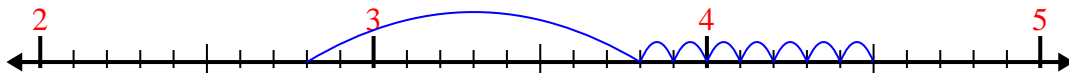
1)  $1.2 + 1.3 =$



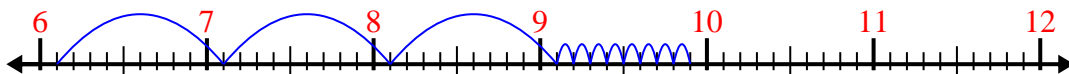
2)  $8.4 + 2.4 =$



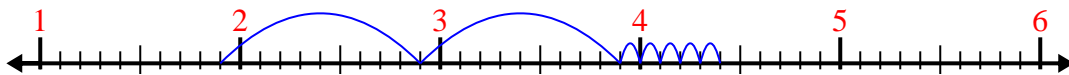
3)  $2.8 + 1.7 =$



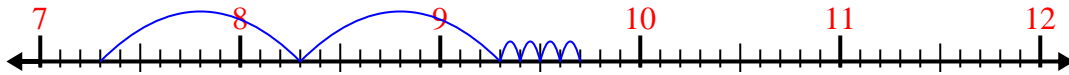
4)  $6.1 + 3.8 =$



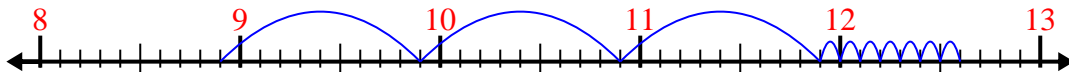
5)  $1.9 + 2.5 =$



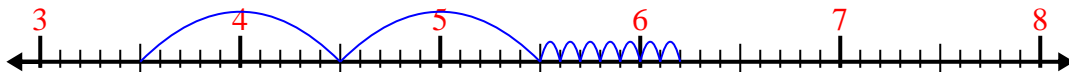
6)  $7.3 + 2.4 =$



7)  $8.9 + 3.7 =$



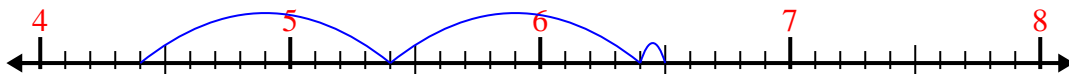
8)  $3.5 + 2.7 =$



9)  $6.1 + 1.6 =$



10)  $4.4 + 2.1 =$



Answers

1. 2.5

2. 10.8

3. 4.5

4. 9.9

5. 4.4

6. 9.7

7. 12.6

8. 6.2


9. 7.7

10. 6.5

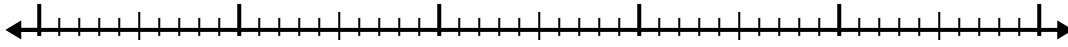


Use the number line to solve each problem.

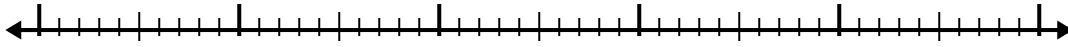
1)  $7.4 + 2.2 =$



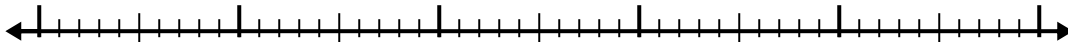
2)  $5.4 + 2.3 =$




3)  $4.7 + 2.9 =$



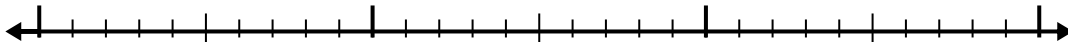
4)  $4.4 + 3.7 =$




5)  $2.2 + 2.3 =$




6)  $3.9 + 1.3 =$



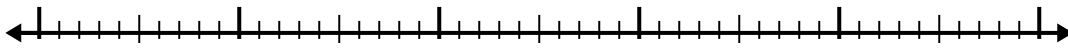
7)  $1 + 3.9 =$



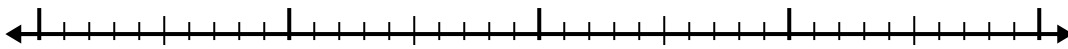
8)  $5.8 + 2.1 =$



9)  $6.3 + 2.3 =$



10)  $7.3 + 2.9 =$



Answers

1. \_\_\_\_\_

2. \_\_\_\_\_

3. \_\_\_\_\_

4. \_\_\_\_\_

5. \_\_\_\_\_

6. \_\_\_\_\_

7. \_\_\_\_\_

8. \_\_\_\_\_

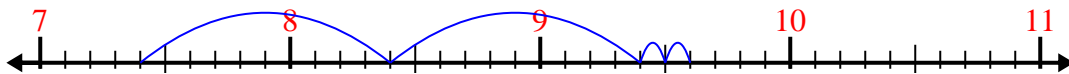
9. \_\_\_\_\_

10. \_\_\_\_\_

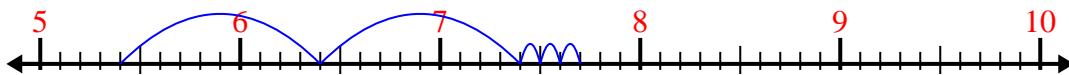


Use the number line to solve each problem.

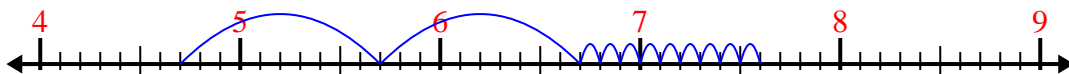
1)  $7.4 + 2.2 =$



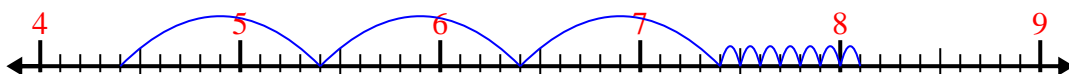
2)  $5.4 + 2.3 =$



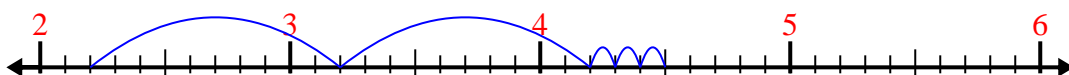
3)  $4.7 + 2.9 =$




4)  $4.4 + 3.7 =$



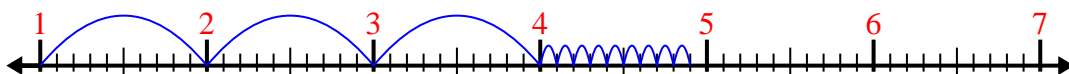
5)  $2.2 + 2.3 =$



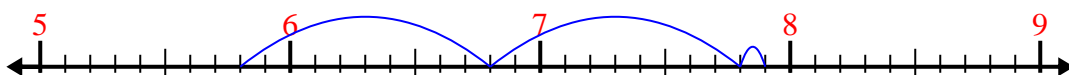
6)  $3.9 + 1.3 =$



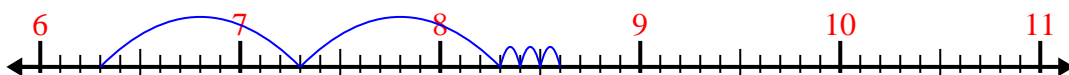
7)  $1 + 3.9 =$



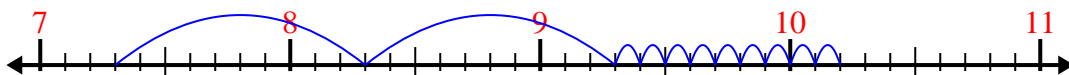
8)  $5.8 + 2.1 =$



9)  $6.3 + 2.3 =$



10)  $7.3 + 2.9 =$



Answers

1. 9.6

2. 7.7

3. 7.6

4. 8.1

5. 4.5

6. 5.2

7. 4.9

8. 7.9

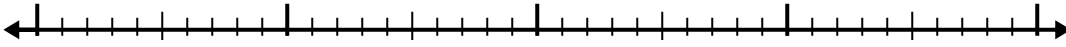
9. 8.6

10. 10.2

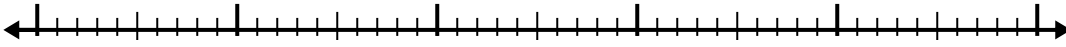


Use the number line to solve each problem.

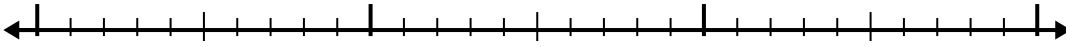
1)  $4.4 + 2.6 =$



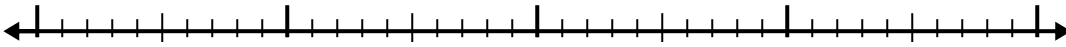
2)  $3.5 + 2.7 =$



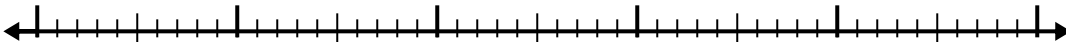
3)  $1.3 + 1.2 =$



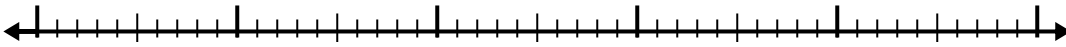
4)  $3.3 + 1.9 =$



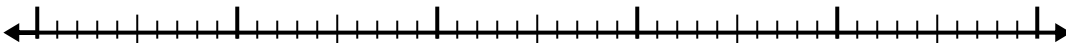
5)  $8.9 + 3.4 =$



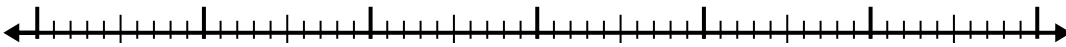
6)  $8.3 + 2.7 =$



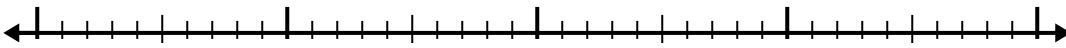
7)  $5.3 + 2.7 =$



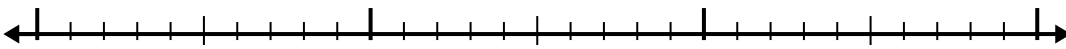
8)  $1.9 + 3.1 =$



9)  $8.6 + 2.3 =$



10)  $4 + 1.1 =$



Answers

1. \_\_\_\_\_

2. \_\_\_\_\_

3. \_\_\_\_\_

4. \_\_\_\_\_

5. \_\_\_\_\_

6. \_\_\_\_\_

7. \_\_\_\_\_

8. \_\_\_\_\_

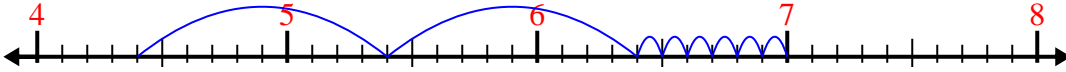
9. \_\_\_\_\_

10. \_\_\_\_\_

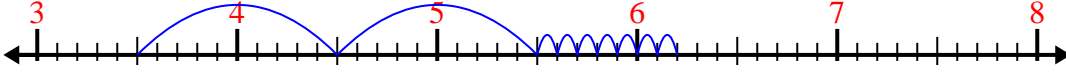


Use the number line to solve each problem.

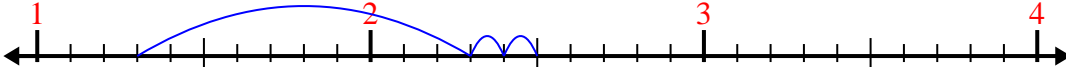
1)  $4.4 + 2.6 =$



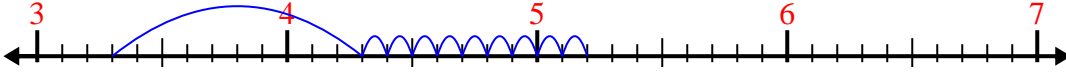
2)  $3.5 + 2.7 =$



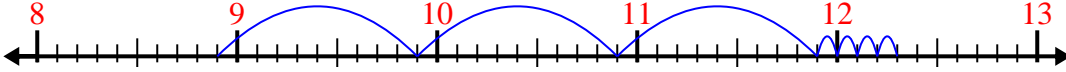
3)  $1.3 + 1.2 =$



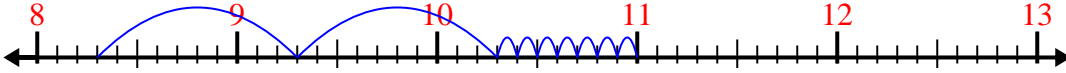
4)  $3.3 + 1.9 =$



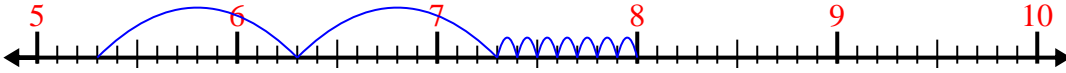
5)  $8.9 + 3.4 =$



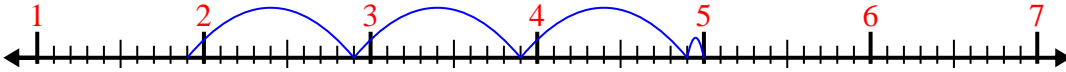
6)  $8.3 + 2.7 =$



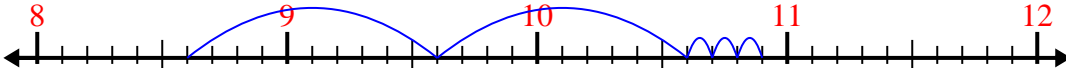
7)  $5.3 + 2.7 =$



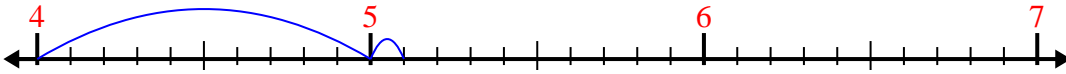
8)  $1.9 + 3.1 =$



9)  $8.6 + 2.3 =$



10)  $4 + 1.1 =$



Answers

1. 7.0

2. 6.2

3. 2.5

4. 5.2

5. 12.3

6. 11.0

7. 8.0

8. 5.0

9. 10.9


10. 5.1



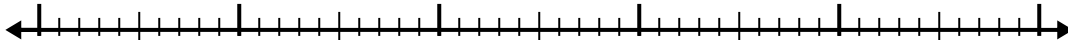


Use the number line to solve each problem.

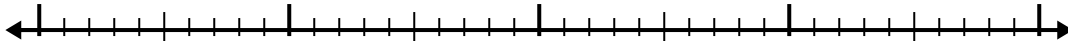
1)  $6.5 + 3.2 =$



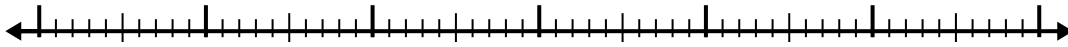
2)  $5.3 + 3.8 =$




3)  $3.1 + 1.1 =$



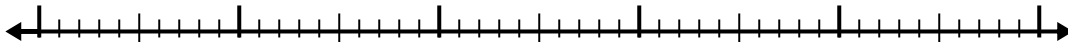
4)  $8.4 + 3.2 =$




5)  $5.7 + 1.2 =$




6)  $2 + 2.8 =$



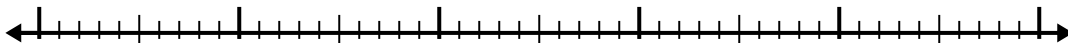
7)  $4.2 + 1.8 =$



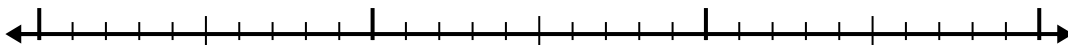
8)  $6.6 + 1.4 =$



9)  $4.3 + 3.9 =$



10)  $1.1 + 1.4 =$



Answers

1. \_\_\_\_\_

2. \_\_\_\_\_

3. \_\_\_\_\_

4. \_\_\_\_\_

5. \_\_\_\_\_

6. \_\_\_\_\_

7. \_\_\_\_\_

8. \_\_\_\_\_

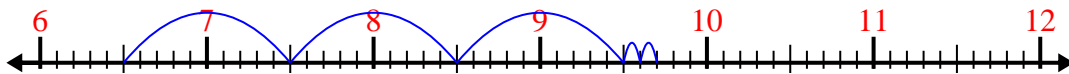
9. \_\_\_\_\_

10. \_\_\_\_\_

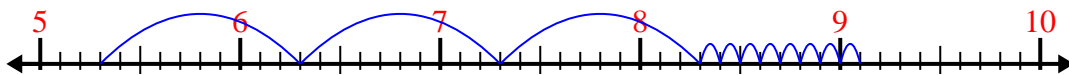


Use the number line to solve each problem.

1)  $6.5 + 3.2 =$



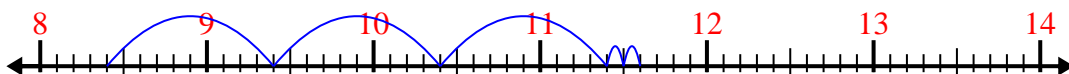
2)  $5.3 + 3.8 =$



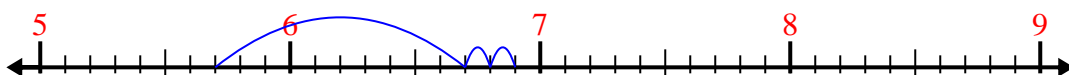
3)  $3.1 + 1.1 =$



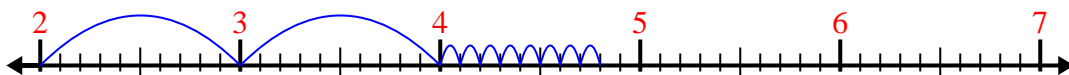
4)  $8.4 + 3.2 =$



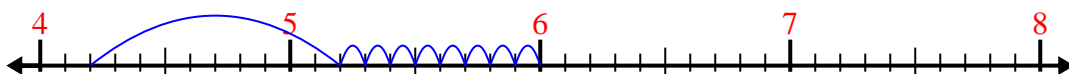
5)  $5.7 + 1.2 =$



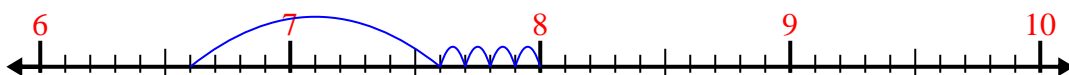
6)  $2 + 2.8 =$



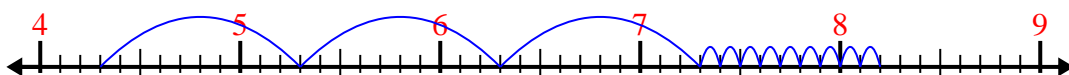
7)  $4.2 + 1.8 =$



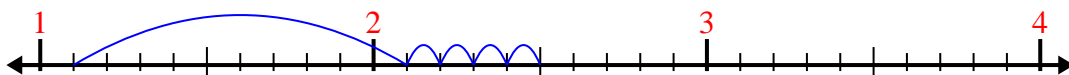
8)  $6.6 + 1.4 =$



9)  $4.3 + 3.9 =$



10)  $1.1 + 1.4 =$



Answers

1. 9.7

2. 9.1

3. 4.2

4. 11.6

5. 6.9

6. 4.8

7. 6.0

8. 8.0

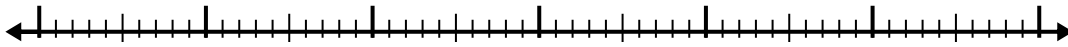
9. 8.2

10. 2.5

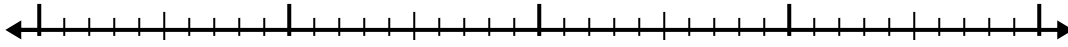


Use the number line to solve each problem.

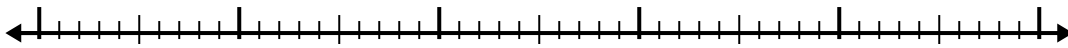
1)  $5.5 + 3.6 =$



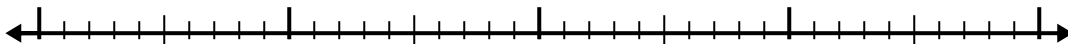
2)  $6.5 + 1.6 =$



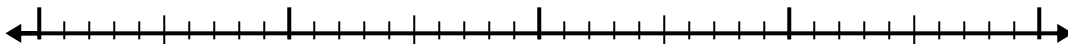
3)  $3.5 + 3.2 =$



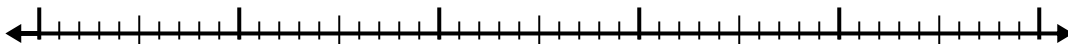
4)  $7.7 + 2.6 =$



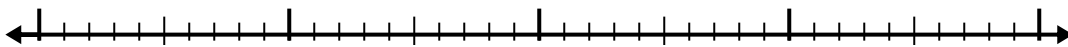
5)  $3.9 + 1.9 =$



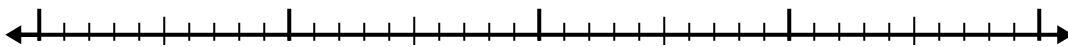
6)  $5.9 + 2.3 =$



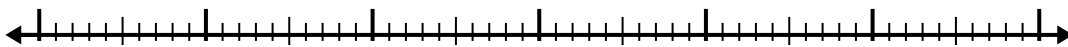
7)  $4.3 + 1.6 =$



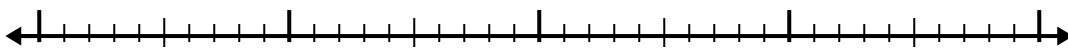
8)  $8.3 + 2.9 =$



9)  $7 + 3.5 =$



10)  $5.6 + 2.4 =$



Answers

1. \_\_\_\_\_

2. \_\_\_\_\_

3. \_\_\_\_\_

4. \_\_\_\_\_

5. \_\_\_\_\_

6. \_\_\_\_\_

7. \_\_\_\_\_

8. \_\_\_\_\_

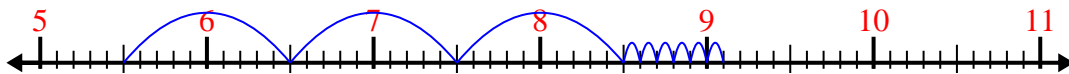
9. \_\_\_\_\_

10. \_\_\_\_\_

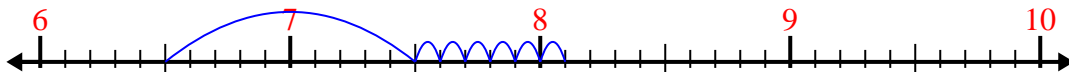


Use the number line to solve each problem.

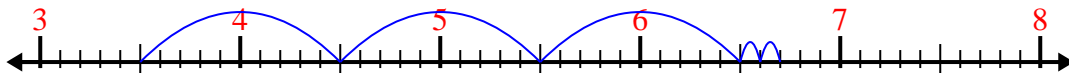
1)  $5.5 + 3.6 =$



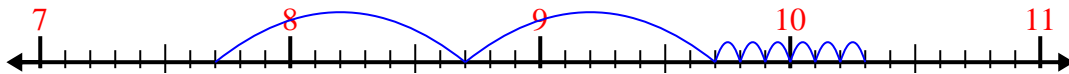
2)  $6.5 + 1.6 =$



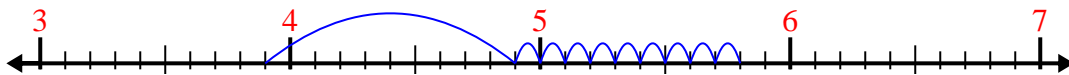
3)  $3.5 + 3.2 =$



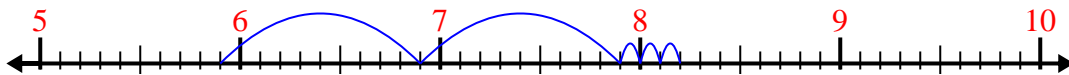
4)  $7.7 + 2.6 =$



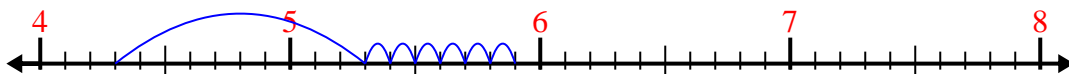
5)  $3.9 + 1.9 =$



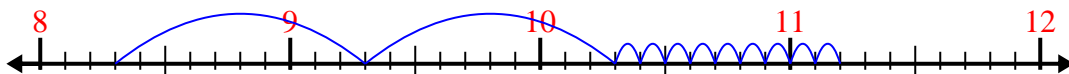
6)  $5.9 + 2.3 =$



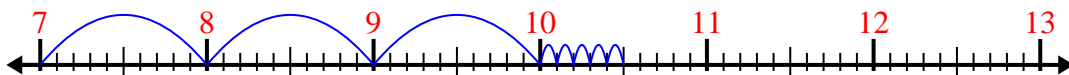
7)  $4.3 + 1.6 =$



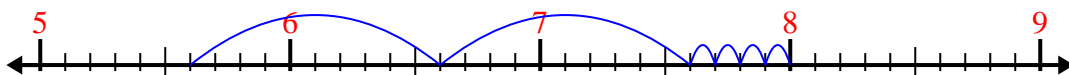
8)  $8.3 + 2.9 =$



9)  $7 + 3.5 =$



10)  $5.6 + 2.4 =$



Answers

1. 9.1

2. 8.1

3. 6.7

4. 10.3

5. 5.8

6. 8.2

7. 5.9

8. 11.2

9. 10.5

10. 8.0