


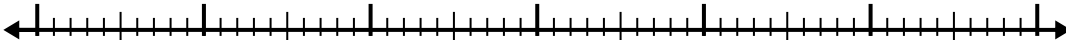


Use the number line to solve each problem.

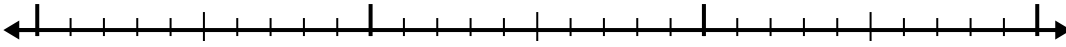
1) $4.5 + 3.9 =$



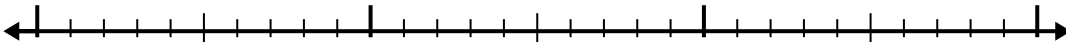
2) $1.6 + 3.6 =$



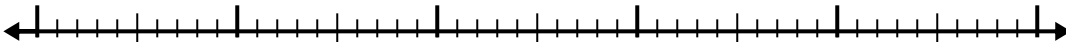
3) $4.3 + 1.3 =$



4) $7.3 + 1.7 =$



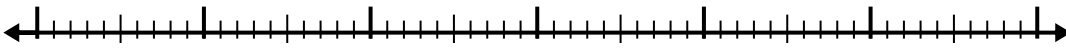
5) $5.8 + 3.5 =$



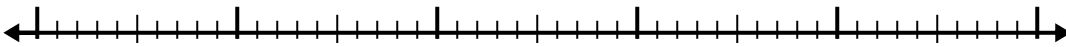
6) $6.6 + 3.2 =$



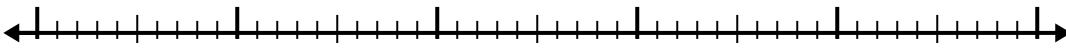
7) $2.5 + 3.6 =$



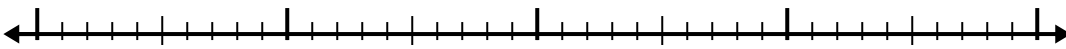
8) $8.7 + 2.6 =$



9) $3.6 + 3.1 =$



10) $4.8 + 1.3 =$



Answers

1. _____

2. _____

3. _____

4. _____

5. _____

6. _____

7. _____

8. _____

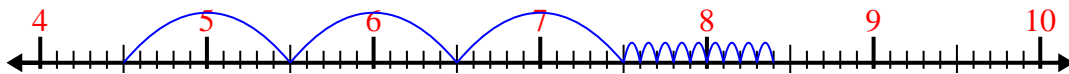
9. _____

10. _____

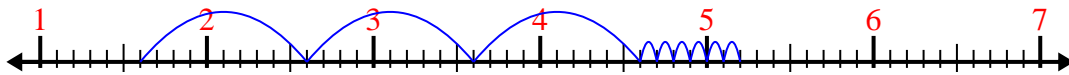


Use the number line to solve each problem.

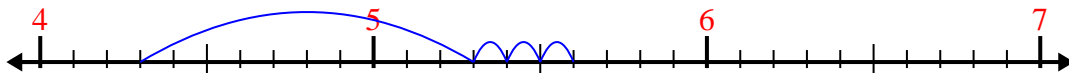
1) $4.5 + 3.9 =$



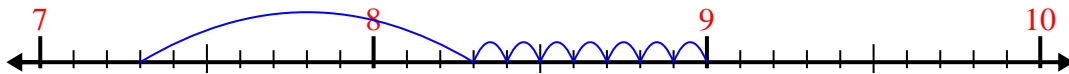
2) $1.6 + 3.6 =$




3) $4.3 + 1.3 =$



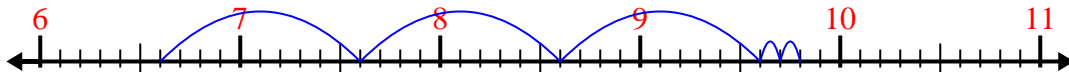
4) $7.3 + 1.7 =$



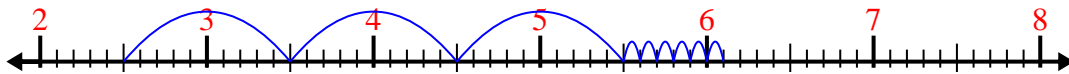
5) $5.8 + 3.5 =$



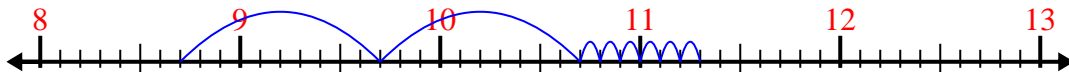
6) $6.6 + 3.2 =$



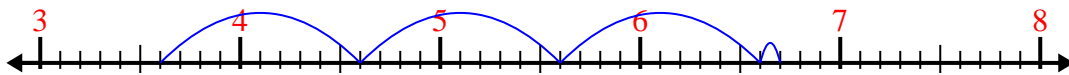
7) $2.5 + 3.6 =$



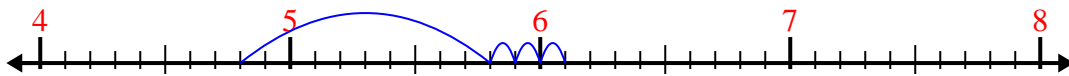
8) $8.7 + 2.6 =$



9) $3.6 + 3.1 =$



10) $4.8 + 1.3 =$



Answers

1. 8.4

2. 5.2

3. 5.6

4. 9.0

5. 9.3

6. 9.8

7. 6.1

8. 11.3

9. 6.7

10. 6.1