





Use the visual model to solve each problem.


1)  $0.1 \times 0.7 =$




2)  $0.8 \times 0.5 =$




3)  $0.6 \times 0.2 =$



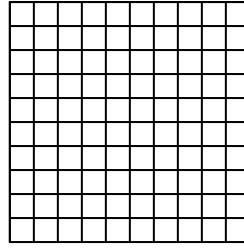
4)  $0.8 \times 0.1 =$




5)  $0.3 \times 0.2 =$




6)  $0.9 \times 0.7 =$



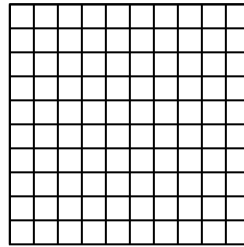
7)  $0.8 \times 0.9 =$




8)  $0.9 \times 0.1 =$




9)  $0.1 \times 0.3 =$



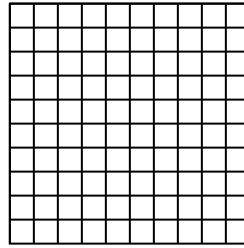
10)  $0.5 \times 0.2 =$




11)  $0.4 \times 0.9 =$




12)  $0.8 \times 0.7 =$




13)  $0.9 \times 0.4 =$



14)  $0.8 \times 0.3 =$



15)  $0.3 \times 0.5 =$



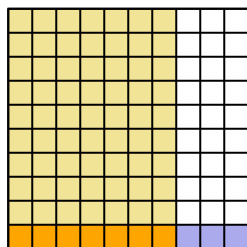
Answers

1. \_\_\_\_\_
2. \_\_\_\_\_
3. \_\_\_\_\_
4. \_\_\_\_\_
5. \_\_\_\_\_
6. \_\_\_\_\_
7. \_\_\_\_\_
8. \_\_\_\_\_
9. \_\_\_\_\_
10. \_\_\_\_\_
11. \_\_\_\_\_
12. \_\_\_\_\_
13. \_\_\_\_\_
14. \_\_\_\_\_
15. \_\_\_\_\_

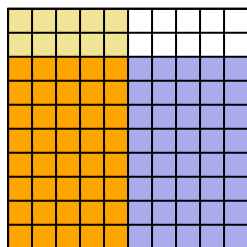


Use the visual model to solve each problem.

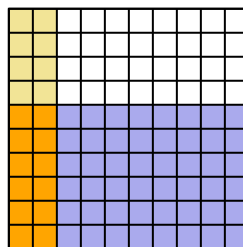
1)  $0.1 \times 0.7 =$



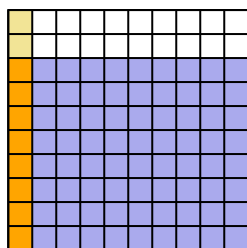
2)  $0.8 \times 0.5 =$



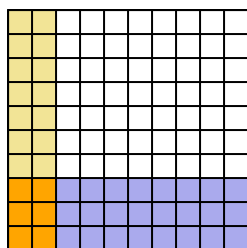
3)  $0.6 \times 0.2 =$



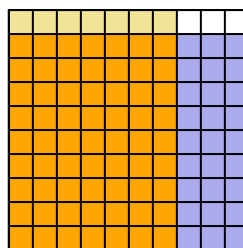
4)  $0.8 \times 0.1 =$



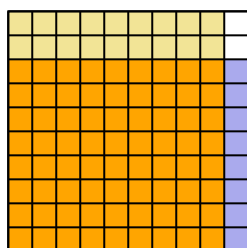
5)  $0.3 \times 0.2 =$



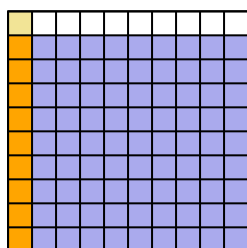
6)  $0.9 \times 0.7 =$



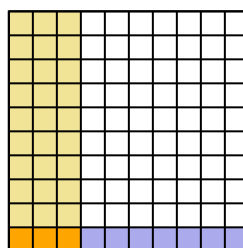
7)  $0.8 \times 0.9 =$



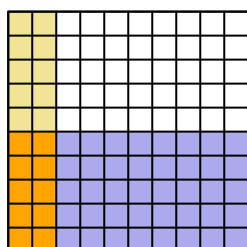
8)  $0.9 \times 0.1 =$



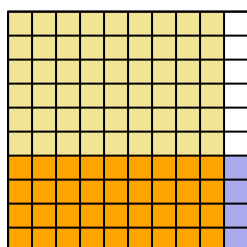
9)  $0.1 \times 0.3 =$



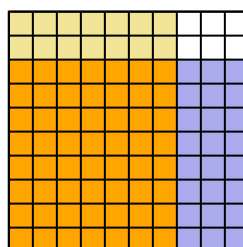
10)  $0.5 \times 0.2 =$



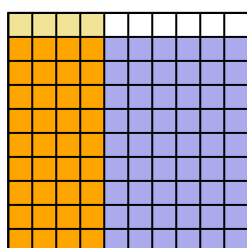
11)  $0.4 \times 0.9 =$



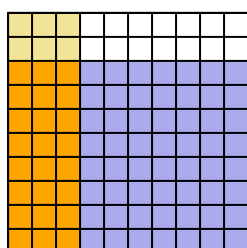
12)  $0.8 \times 0.7 =$



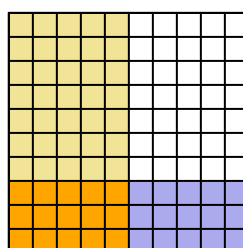
13)  $0.9 \times 0.4 =$



14)  $0.8 \times 0.3 =$



15)  $0.3 \times 0.5 =$



**Answers**

1.  $\frac{7}{100} = 0.07$
2.  $\frac{40}{100} = 0.4$
3.  $\frac{12}{100} = 0.12$
4.  $\frac{8}{100} = 0.08$
5.  $\frac{6}{100} = 0.06$
6.  $\frac{63}{100} = 0.63$
7.  $\frac{72}{100} = 0.72$
8.  $\frac{9}{100} = 0.09$
9.  $\frac{3}{100} = 0.03$
10.  $\frac{10}{100} = 0.1$
11.  $\frac{36}{100} = 0.36$
12.  $\frac{56}{100} = 0.56$
13.  $\frac{36}{100} = 0.36$
14.  $\frac{24}{100} = 0.24$
15.  $\frac{15}{100} = 0.15$