



Put the boxes in order from least to greatest based on the shaded amount.

**Answers**

Ex) A B C D

small 0.2 - B  
0.6 - D  
0.86 - C  
large 0.91 - A

Ex. B,D,C,A

1. \_\_\_\_\_

2. \_\_\_\_\_

3. \_\_\_\_\_

4. \_\_\_\_\_

5. \_\_\_\_\_

6. \_\_\_\_\_

7. \_\_\_\_\_

8. \_\_\_\_\_

1) A B C D

small \_\_\_\_\_  
\_\_\_\_\_  
\_\_\_\_\_  
large \_\_\_\_\_

2) A B C D

small \_\_\_\_\_  
\_\_\_\_\_  
\_\_\_\_\_  
large \_\_\_\_\_

3) A B C D

small \_\_\_\_\_  
\_\_\_\_\_  
\_\_\_\_\_  
large \_\_\_\_\_

4) A B C D

small \_\_\_\_\_  
\_\_\_\_\_  
\_\_\_\_\_  
large \_\_\_\_\_

5) A B C D

small \_\_\_\_\_  
\_\_\_\_\_  
\_\_\_\_\_  
large \_\_\_\_\_

6) A B C D

small \_\_\_\_\_  
\_\_\_\_\_  
\_\_\_\_\_  
large \_\_\_\_\_

7) A B C D





small \_\_\_\_\_  
\_\_\_\_\_  
\_\_\_\_\_  
large \_\_\_\_\_

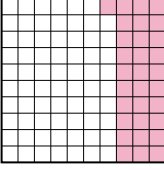
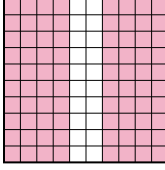
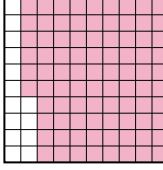
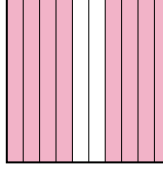
8) A B C D


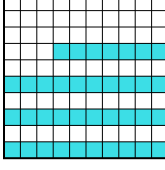

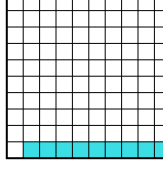
small \_\_\_\_\_  
\_\_\_\_\_  
\_\_\_\_\_  
large \_\_\_\_\_

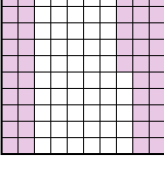

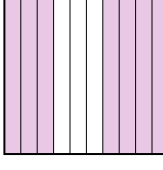
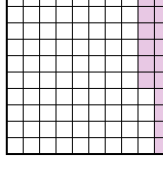




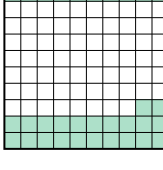

Put the boxes in order from least to greatest based on the shaded amount.




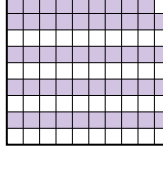
Ex) A  B  C  D  small  $\frac{0.2 - B}{0.6 - D}$   
large  $\frac{0.86 - C}{0.91 - A}$


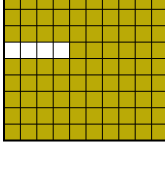


1) A  B  C  D  small  $\frac{0.31 - A}{0.8 - B}$   
large  $\frac{0.86 - C}{0.8 - B}$

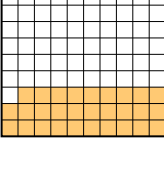


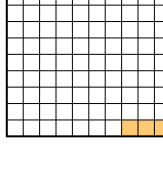
2) A  B  C  D  small  $\frac{0.09 - D}{0.37 - B}$   
large  $\frac{0.6 - A}{0.8 - C}$

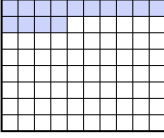
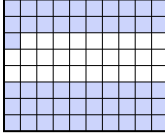
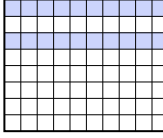

3) A  B  C  D  small  $\frac{0.16 - D}{0.45 - A}$   
large  $\frac{0.58 - B}{0.7 - C}$

4) A  B  C  D  small  $\frac{0.2 - D}{0.32 - C}$   
large  $\frac{0.5 - A}{0.8 - B}$

5) A  B  C  D  small  $\frac{0.5 - C}{0.59 - D}$   
large  $\frac{0.6 - B}{0.7 - A}$

6) A  B  C  D  small  $\frac{0.1 - C}{0.7 - D}$   
large  $\frac{0.9 - A}{0.96 - B}$

7) A  B  C  D  small  $\frac{0.03 - D}{0.08 - C}$   
large  $\frac{0.1 - B}{0.29 - A}$

8) A  B  C  D  small  $\frac{0.3 - C}{0.34 - A}$   
large  $\frac{0.71 - B}{0.8 - D}$

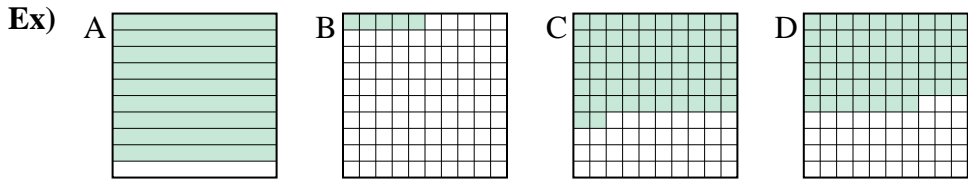
Answers

- Ex. B,D,C,A
1. A,B,B,C
2. D,B,A,C
3. D,A,B,C
4. D,C,A,B
5. C,D,B,A
6. C,D,A,B
7. D,C,B,A
8. C,A,B,D



Put the boxes in order from least to greatest based on the shaded amount.

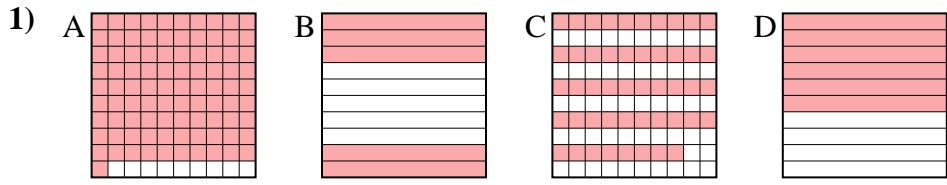
**Answers**



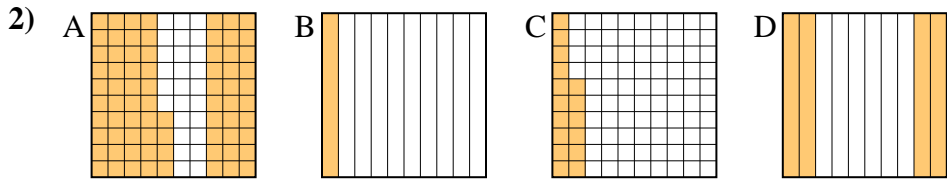
small 0.05 - B  
0.57 - D  
0.62 - C  
 large 0.9 - A

Ex. B,D,C,A

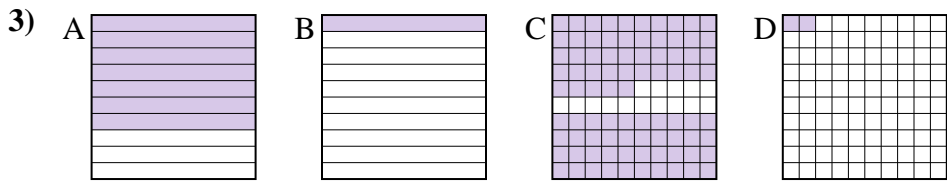
1. \_\_\_\_\_
2. \_\_\_\_\_
3. \_\_\_\_\_
4. \_\_\_\_\_
5. \_\_\_\_\_
6. \_\_\_\_\_
7. \_\_\_\_\_
8. \_\_\_\_\_



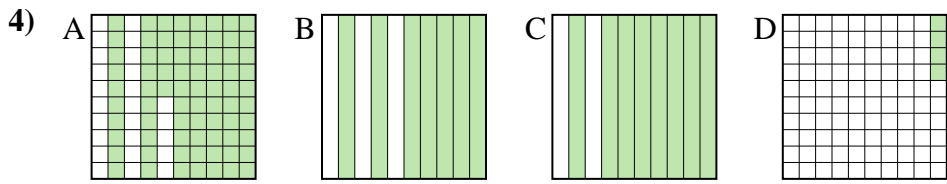
small \_\_\_\_\_  
 \_\_\_\_\_  
 \_\_\_\_\_  
 large \_\_\_\_\_



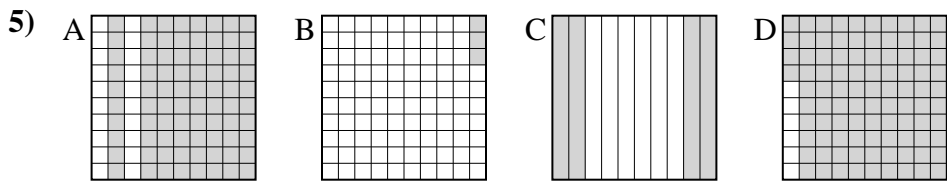
small \_\_\_\_\_  
 \_\_\_\_\_  
 large \_\_\_\_\_



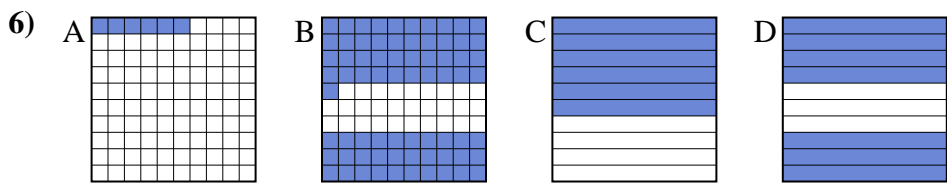
small \_\_\_\_\_  
 \_\_\_\_\_  
 large \_\_\_\_\_



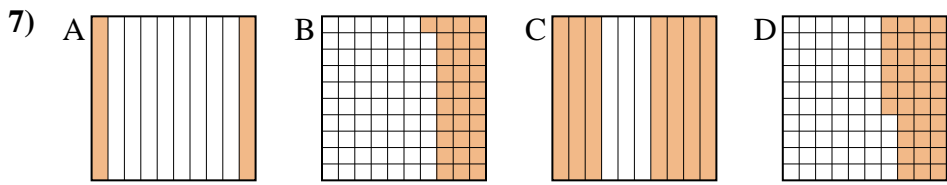
small \_\_\_\_\_  
 \_\_\_\_\_  
 large \_\_\_\_\_



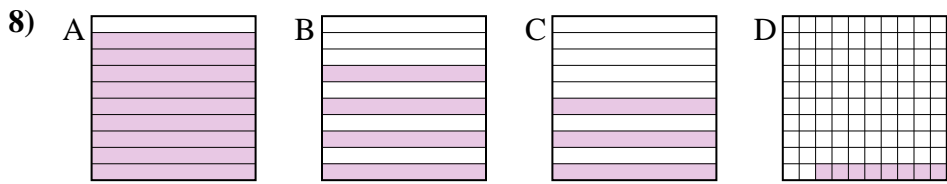
small \_\_\_\_\_  
 \_\_\_\_\_  
 large \_\_\_\_\_



small \_\_\_\_\_  
 \_\_\_\_\_  
 large \_\_\_\_\_




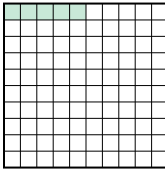


small \_\_\_\_\_  
 \_\_\_\_\_  
 large \_\_\_\_\_

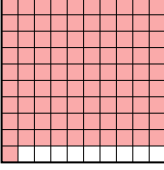

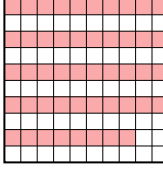



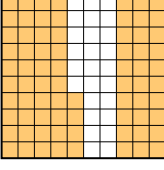
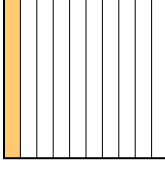
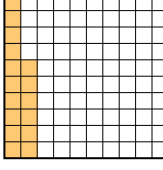
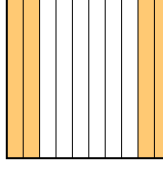
small \_\_\_\_\_  
 \_\_\_\_\_  
 large \_\_\_\_\_

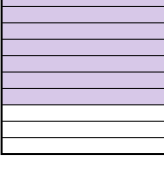

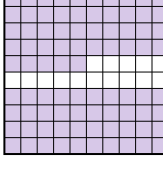






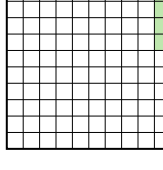
Put the boxes in order from least to greatest based on the shaded amount.



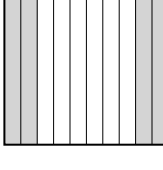

Ex) A  B  C  D  small  $\frac{0.05}{0.57}$  - B  
 $\frac{0.62}{0.9}$  - C  
large  $\frac{0.9}{0.05}$  - A


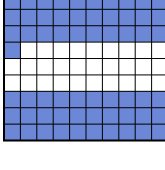


1) A  B  C  D  small  $\frac{0.48}{0.5}$  - C  
 $\frac{0.6}{0.91}$  - D  
large  $\frac{0.91}{0.48}$  - A

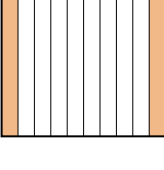
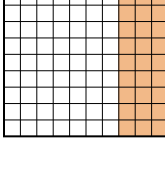
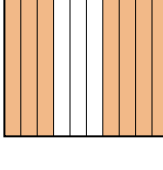
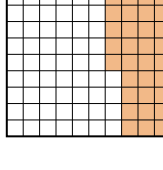
2) A  B  C  D  small  $\frac{0.1}{0.16}$  - B  
 $\frac{0.4}{0.74}$  - D  
large  $\frac{0.74}{0.1}$  - A




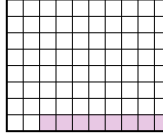
3) A  B  C  D  small  $\frac{0.02}{0.1}$  - D  
 $\frac{0.7}{0.85}$  - A  
large  $\frac{0.85}{0.02}$  - C

4) A  B  C  D  small  $\frac{0.04}{0.7}$  - D  
 $\frac{0.75}{0.8}$  - A  
large  $\frac{0.8}{0.04}$  - C

5) A  B  C  D  small  $\frac{0.03}{0.4}$  - B  
 $\frac{0.8}{0.94}$  - A  
large  $\frac{0.94}{0.03}$  - D

6) A  B  C  D  small  $\frac{0.06}{0.6}$  - A  
 $\frac{0.7}{0.71}$  - D  
large  $\frac{0.71}{0.06}$  - B

7) A  B  C  D  small  $\frac{0.2}{0.31}$  - A  
 $\frac{0.36}{0.7}$  - D  
large  $\frac{0.7}{0.2}$  - C

8) A  B  C  D  small  $\frac{0.08}{0.3}$  - D  
 $\frac{0.4}{0.9}$  - A  
large  $\frac{0.9}{0.08}$  - A

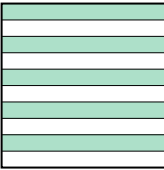
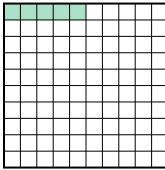
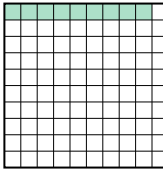

Answers

- Ex. B,D,C,A
1. C,B,D,A
2. B,C,D,A
3. D,B,A,C
4. D,B,A,C
5. B,C,A,D
6. A,C,D,B
7. A,B,D,C
8. D,C,B,A



Put the boxes in order from least to greatest based on the shaded amount.


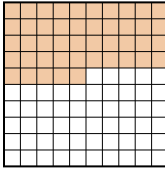
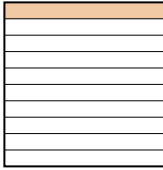
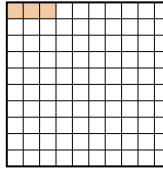
**Answers**

Ex) A  B  C  D 



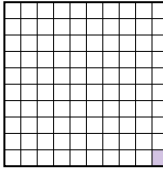
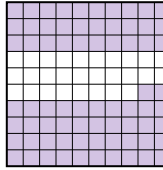
small 0.05 - B  
0.09 - C  
0.5 - A  
large 0.6 - D

Ex. **B,C,A,D**

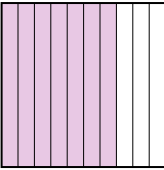
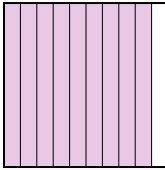

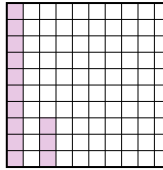
1. \_\_\_\_\_
2. \_\_\_\_\_
3. \_\_\_\_\_
4. \_\_\_\_\_
5. \_\_\_\_\_
6. \_\_\_\_\_
7. \_\_\_\_\_
8. \_\_\_\_\_

1) A  B  C  D 




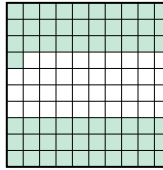
small \_\_\_\_\_  
large \_\_\_\_\_

2) A  B  C  D 


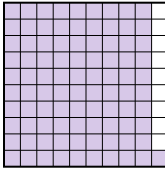
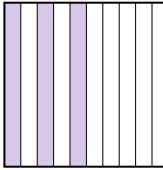
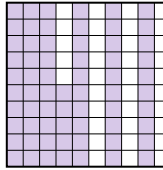
small \_\_\_\_\_  
large \_\_\_\_\_

3) A  B  C  D 





small \_\_\_\_\_  
large \_\_\_\_\_

4) A  B  C  D 

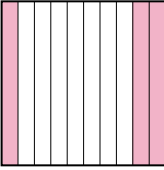
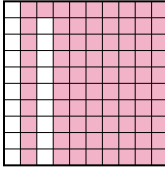
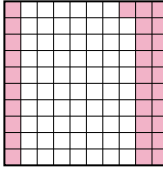
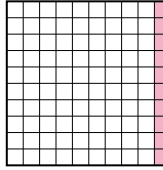
small \_\_\_\_\_  
large \_\_\_\_\_

5) A  B  C  D 


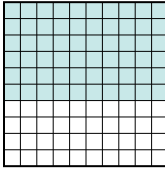

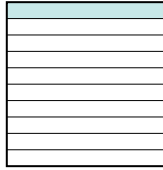
small \_\_\_\_\_  
large \_\_\_\_\_

6) A  B  C  D 

small \_\_\_\_\_  
large \_\_\_\_\_

7) A  B  C  D 

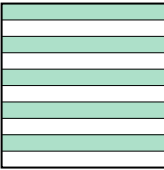
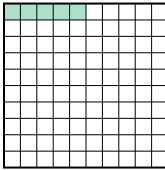
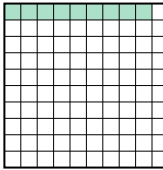

small \_\_\_\_\_  
large \_\_\_\_\_


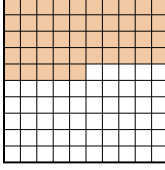

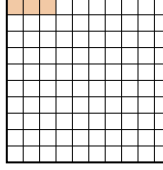
8) A  B  C  D 

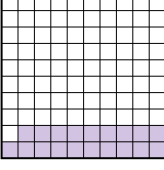

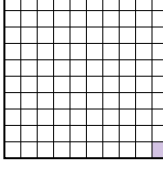
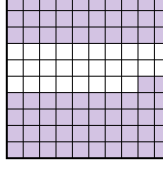
small \_\_\_\_\_  
large \_\_\_\_\_

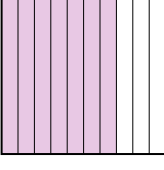

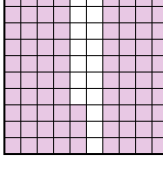
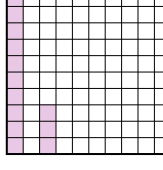





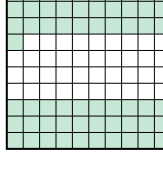
Put the boxes in order from least to greatest based on the shaded amount.

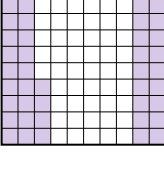



Ex) A  B  C  D  small  $\frac{0.05}{0.09} - B$   
large  $\frac{0.5}{0.6} - D$

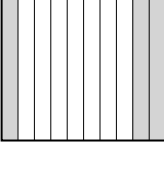

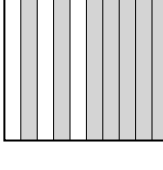

1) A  B  C  D  small  $\frac{0.03}{0.1} - D$   
large  $\frac{0.4}{0.45} - B$

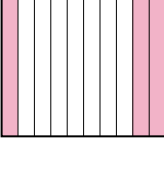

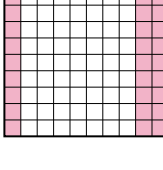
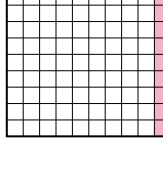
2) A  B  C  D  small  $\frac{0.01}{0.19} - C$   
large  $\frac{0.72}{0.8} - B$





3) A  B  C  D  small  $\frac{0.13}{0.7} - D$   
large  $\frac{0.83}{0.9} - B$

4) A  B  C  D  small  $\frac{0.39}{0.61} - A$   
large  $\frac{0.8}{0.92} - C$

5) A  B  C  D  small  $\frac{0.3}{0.44} - C$   
large  $\frac{0.65}{0.91} - B$

6) A  B  C  D  small  $\frac{0.03}{0.14} - D$   
large  $\frac{0.3}{0.7} - C$

7) A  B  C  D  small  $\frac{0.1}{0.3} - D$   
large  $\frac{0.31}{0.81} - B$

8) A  B  C  D  small  $\frac{0.1}{0.6} - D$   
large  $\frac{0.7}{0.9} - C$

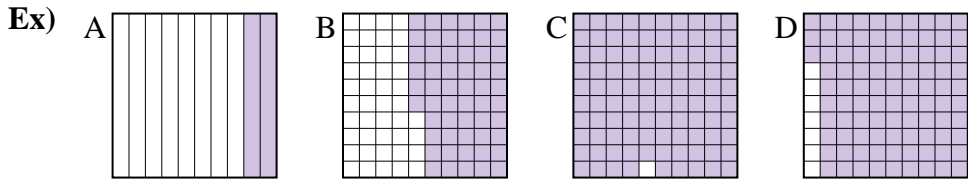
Answers

- Ex. B,C,A,D
1. D,C,A,B
2. C,A,D,B
3. D,A,C,B
4. A,D,B,C
5. C,A,D,B
6. D,B,A,C
7. D,A,C,B
8. D,B,A,C



Put the boxes in order from least to greatest based on the shaded amount.

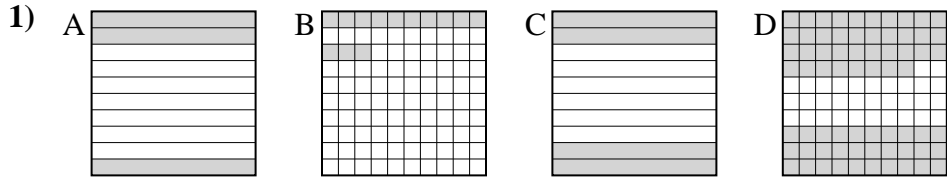
**Answers**



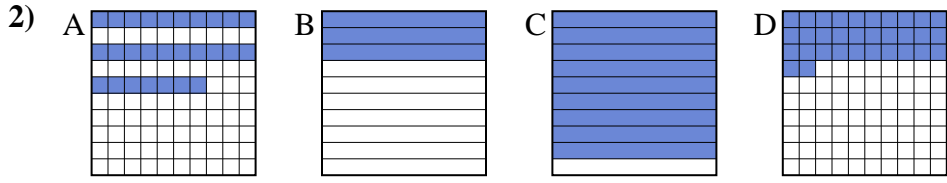
small 0.2 - A  
0.56 - B  
0.93 - D  
 large 0.99 - C

Ex. A,B,D,C

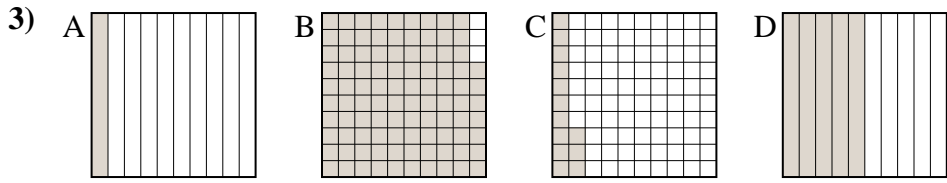
1. \_\_\_\_\_
2. \_\_\_\_\_
3. \_\_\_\_\_
4. \_\_\_\_\_
5. \_\_\_\_\_
6. \_\_\_\_\_
7. \_\_\_\_\_
8. \_\_\_\_\_



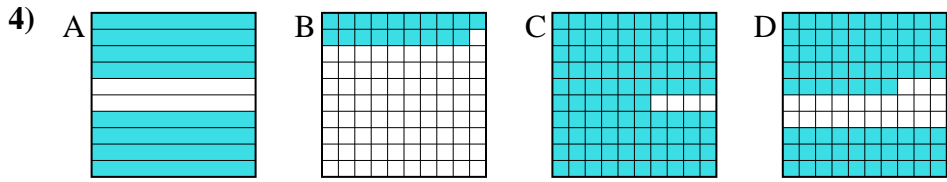
small \_\_\_\_\_  
 \_\_\_\_\_  
 \_\_\_\_\_  
 large \_\_\_\_\_



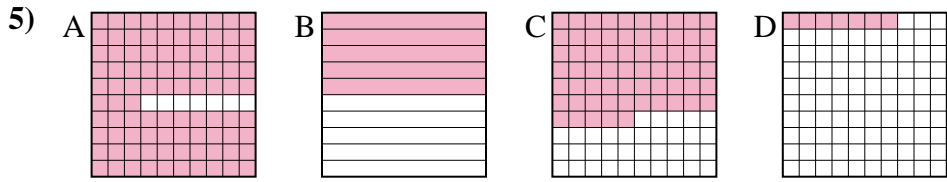
small \_\_\_\_\_  
 \_\_\_\_\_  
 \_\_\_\_\_  
 large \_\_\_\_\_



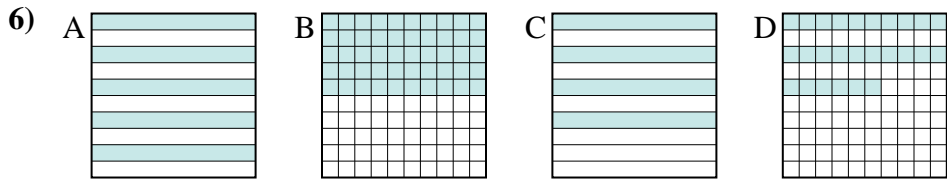
small \_\_\_\_\_  
 \_\_\_\_\_  
 \_\_\_\_\_  
 large \_\_\_\_\_



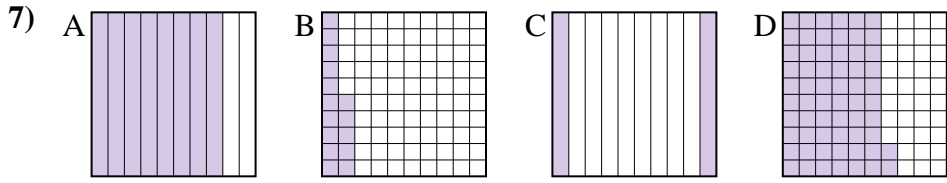
small \_\_\_\_\_  
 \_\_\_\_\_  
 \_\_\_\_\_  
 large \_\_\_\_\_



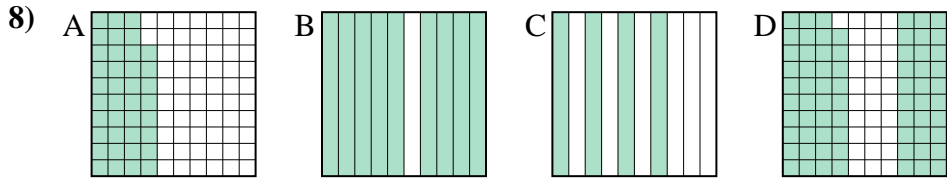
small \_\_\_\_\_  
 \_\_\_\_\_  
 \_\_\_\_\_  
 large \_\_\_\_\_



small \_\_\_\_\_  
 \_\_\_\_\_  
 \_\_\_\_\_  
 large \_\_\_\_\_



small \_\_\_\_\_  
 \_\_\_\_\_  
 \_\_\_\_\_  
 large \_\_\_\_\_



small \_\_\_\_\_  
 \_\_\_\_\_  
 \_\_\_\_\_  
 large \_\_\_\_\_



Put the boxes in order from least to greatest based on the shaded amount.

Ex) A B C D small  $\frac{0.2}{0.56} - A$   
large  $\frac{0.93}{0.99} - C$

1) A B C D small  $\frac{0.13}{0.3} - B$   
large  $\frac{0.4}{0.68} - D$

2) A B C D small  $\frac{0.27}{0.3} - A$   
large  $\frac{0.32}{0.9} - C$

3) A B C D small  $\frac{0.1}{0.13} - A$   
large  $\frac{0.5}{0.97} - B$

4) A B C D small  $\frac{0.19}{0.77} - B$   
large  $\frac{0.8}{0.96} - A$

5) A B C D small  $\frac{0.07}{0.5} - D$   
large  $\frac{0.65}{0.93} - C$

6) A B C D small  $\frac{0.26}{0.4} - D$   
large  $\frac{0.5}{0.5} - A$

7) A B C D small  $\frac{0.15}{0.2} - B$   
large  $\frac{0.62}{0.8} - D$

8) A B C D small  $\frac{0.38}{0.4} - A$   
large  $\frac{0.69}{0.9} - B$

Answers

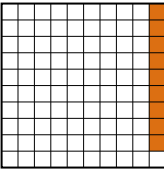
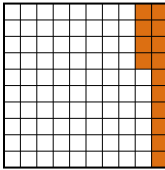

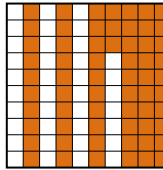
- Ex. A,B,D,C
1. B,A,C,D
2. A,B,D,C
3. A,C,D,B
4. B,D,A,C
5. D,B,C,A
6. D,C,A,A
7. B,C,D,A
8. A,C,D,B





Put the boxes in order from least to greatest based on the shaded amount.



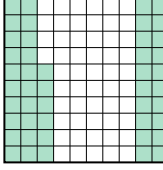

**Answers**

Ex) A  B  C  D 

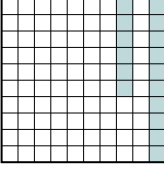
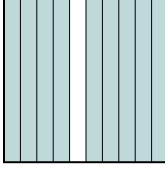
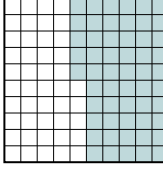
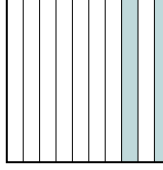
small 0.09 - A  
0.14 - B  
0.2 - C  
large 0.63 - D

Ex. A,B,C,D

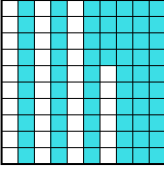
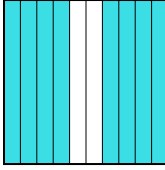
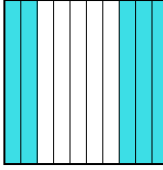
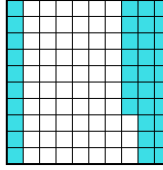
1. \_\_\_\_\_
2. \_\_\_\_\_
3. \_\_\_\_\_
4. \_\_\_\_\_
5. \_\_\_\_\_
6. \_\_\_\_\_
7. \_\_\_\_\_
8. \_\_\_\_\_

1) A  B  C  D 

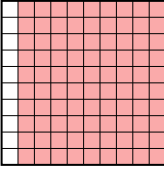
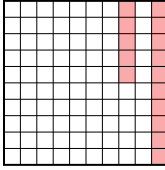
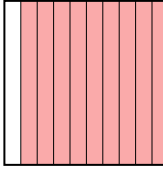
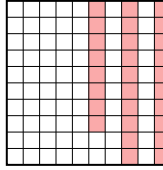
small \_\_\_\_\_  
 \_\_\_\_\_  
 large \_\_\_\_\_

2) A  B  C  D 

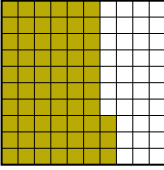
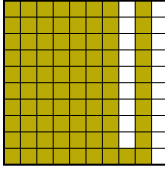
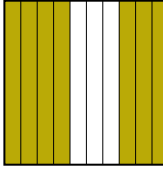
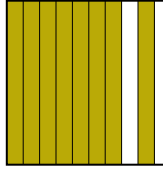
small \_\_\_\_\_  
 \_\_\_\_\_  
 large \_\_\_\_\_

3) A  B  C  D 

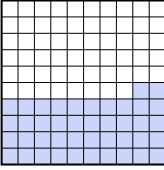

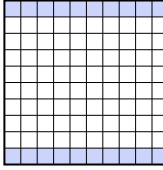

small \_\_\_\_\_  
 \_\_\_\_\_  
 large \_\_\_\_\_

4) A  B  C  D 

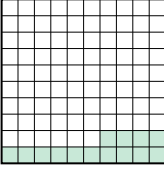

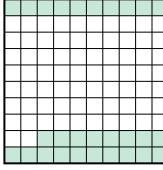

small \_\_\_\_\_  
 \_\_\_\_\_  
 large \_\_\_\_\_

5) A  B  C  D 

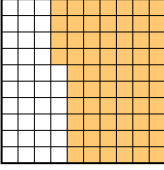
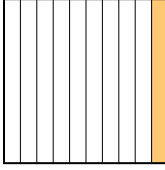
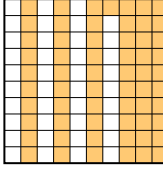
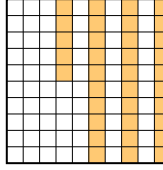
small \_\_\_\_\_  
 \_\_\_\_\_  
 large \_\_\_\_\_

6) A  B  C  D 

small \_\_\_\_\_  
 \_\_\_\_\_  
 large \_\_\_\_\_

7) A  B  C  D 

small \_\_\_\_\_  
 \_\_\_\_\_  
 large \_\_\_\_\_

8) A  B  C  D 

small \_\_\_\_\_  
 \_\_\_\_\_  
 large \_\_\_\_\_



Put the boxes in order from least to greatest based on the shaded amount.

Ex) A B C D small  $\frac{0.09 - A}{0.14 - B}$   
 $\frac{0.2 - C}{0.63 - D}$  large

1) A B C D small  $\frac{0.07 - B}{0.1 - D}$   
 $\frac{0.2 - A}{0.46 - C}$  large

2) A B C D small  $\frac{0.16 - A}{0.2 - D}$   
 $\frac{0.55 - C}{0.9 - B}$  large

3) A B C D small  $\frac{0.37 - D}{0.5 - C}$   
 $\frac{0.64 - A}{0.8 - B}$  large

4) A B C D small  $\frac{0.15 - B}{0.28 - D}$   
 $\frac{0.9 - A}{0.9 - A}$  large

5) A B C D small  $\frac{0.63 - A}{0.7 - C}$   
 $\frac{0.8 - D}{0.81 - B}$  large

6) A B C D small  $\frac{0.1 - B}{0.2 - C}$   
 $\frac{0.42 - A}{0.9 - D}$  large

7) A B C D small  $\frac{0.14 - A}{0.2 - B}$   
 $\frac{0.28 - C}{0.8 - D}$  large

8) A B C D small  $\frac{0.1 - B}{0.35 - D}$   
 $\frac{0.61 - C}{0.64 - A}$  large

**Answers**

- Ex. A,B,C,D
1. B,D,A,C
2. A,D,C,B
3. D,C,A,B
4. B,D,A,A
5. A,C,D,B
6. B,C,A,D
7. A,B,C,D
8. B,D,C,A



Put the boxes in order from least to greatest based on the shaded amount.

**Answers**

Ex) A B C D

small 0.07 - B  
0.1 - D  
0.4 - C  
large 0.98 - A

Ex. B,D,C,A

1. \_\_\_\_\_

2. \_\_\_\_\_

3. \_\_\_\_\_

4. \_\_\_\_\_

5. \_\_\_\_\_

6. \_\_\_\_\_

7. \_\_\_\_\_

8. \_\_\_\_\_

1) A B C D

small \_\_\_\_\_  
\_\_\_\_\_  
\_\_\_\_\_  
large \_\_\_\_\_

2) A B C D

small \_\_\_\_\_  
\_\_\_\_\_  
\_\_\_\_\_  
large \_\_\_\_\_

3) A B C D

small \_\_\_\_\_  
\_\_\_\_\_  
\_\_\_\_\_  
large \_\_\_\_\_

4) A B C D

small \_\_\_\_\_  
\_\_\_\_\_  
\_\_\_\_\_  
large \_\_\_\_\_

5) A B C D

small \_\_\_\_\_  
\_\_\_\_\_  
\_\_\_\_\_  
large \_\_\_\_\_

6) A B C D

small \_\_\_\_\_  
\_\_\_\_\_  
\_\_\_\_\_  
large \_\_\_\_\_

7) A B C D

small \_\_\_\_\_  
\_\_\_\_\_  
\_\_\_\_\_  
large \_\_\_\_\_

8) A B C D

small \_\_\_\_\_  
\_\_\_\_\_  
\_\_\_\_\_  
large \_\_\_\_\_



Put the boxes in order from least to greatest based on the shaded amount.

Ex) A B C D

small  $\frac{0.07 - B}{0.1 - D}$   
 $\frac{0.4 - C}{0.98 - A}$

large

1) A B C D

small  $\frac{0.01 - D}{0.3 - A}$   
 $\frac{0.86 - C}{0.9 - B}$

large

2) A B C D

small  $\frac{0.1 - D}{0.5 - A}$   
 $\frac{0.53 - B}{0.8 - C}$

large

3) A B C D

small  $\frac{0.2 - D}{0.4 - B}$   
 $\frac{0.5 - A}{0.52 - C}$

large

4) A B C D

small  $\frac{0.03 - A}{0.2 - C}$   
 $\frac{0.43 - B}{0.9 - D}$

large

5) A B C D

small  $\frac{0.1 - A}{0.48 - D}$   
 $\frac{0.6 - B}{0.71 - C}$

large

6) A B C D

small  $\frac{0.5 - D}{0.6 - C}$   
 $\frac{0.8 - B}{0.83 - A}$

large

7) A B C D

small  $\frac{0.69 - D}{0.7 - A}$   
 $\frac{0.8 - B}{0.9 - C}$

large

8) A B C D

small  $\frac{0.02 - B}{0.47 - C}$   
 $\frac{0.7 - A}{0.95 - D}$

large

Answers

Ex. B,D,C,A

1. D,A,C,B

2. D,A,B,C

3. D,B,A,C

4. A,C,B,D

5. A,D,B,C

6. D,C,B,A

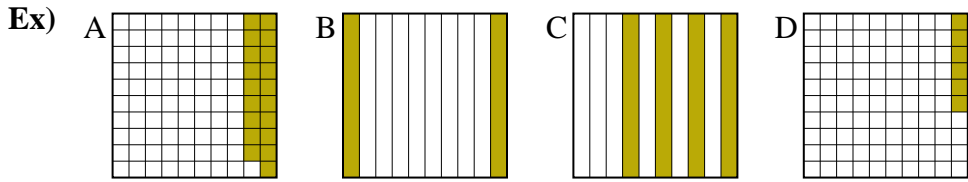
7. D,A,B,C

8. B,C,A,D



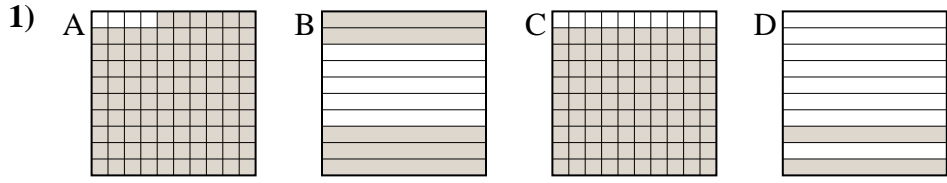
Put the boxes in order from least to greatest based on the shaded amount.

**Answers**



small 0.06 - D  
0.19 - A  
0.2 - B  
 large 0.4 - C

Ex. D,A,B,C

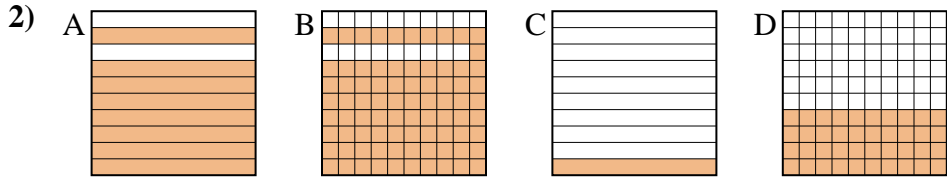


small \_\_\_\_\_  
 \_\_\_\_\_  
 \_\_\_\_\_  
 large \_\_\_\_\_

1. \_\_\_\_\_

2. \_\_\_\_\_

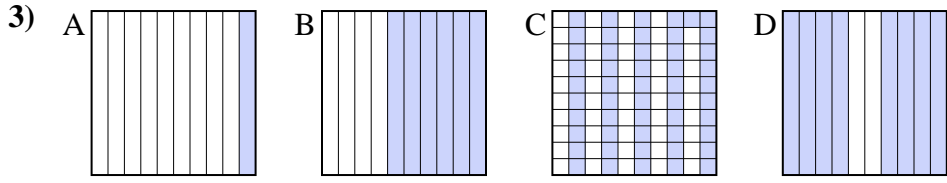
3. \_\_\_\_\_



small \_\_\_\_\_  
 \_\_\_\_\_  
 \_\_\_\_\_  
 large \_\_\_\_\_

4. \_\_\_\_\_

5. \_\_\_\_\_

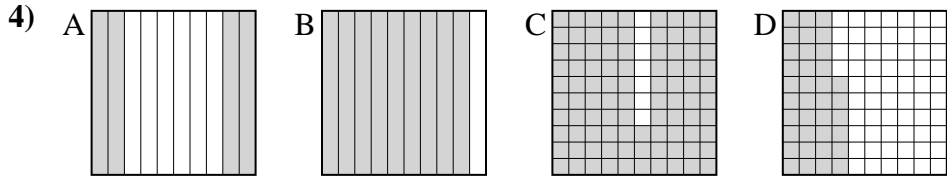


small \_\_\_\_\_  
 \_\_\_\_\_  
 \_\_\_\_\_  
 large \_\_\_\_\_

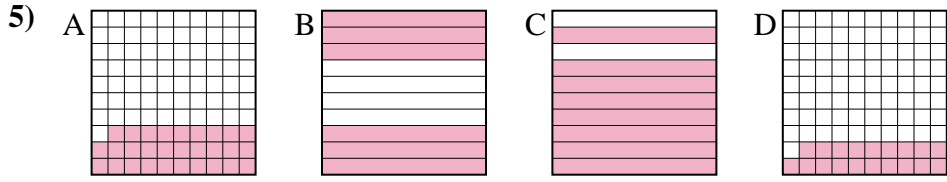
6. \_\_\_\_\_

7. \_\_\_\_\_

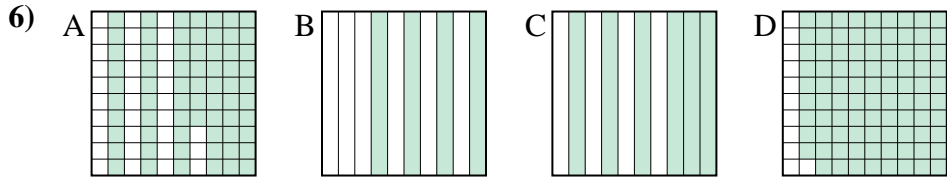
8. \_\_\_\_\_



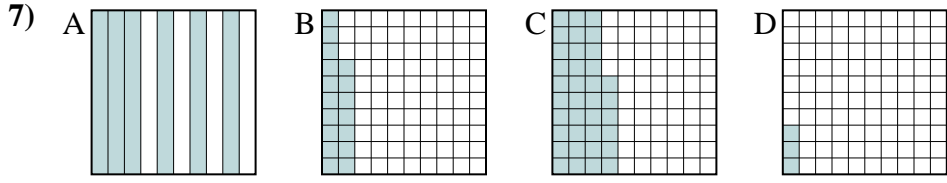
small \_\_\_\_\_  
 \_\_\_\_\_  
 \_\_\_\_\_  
 large \_\_\_\_\_



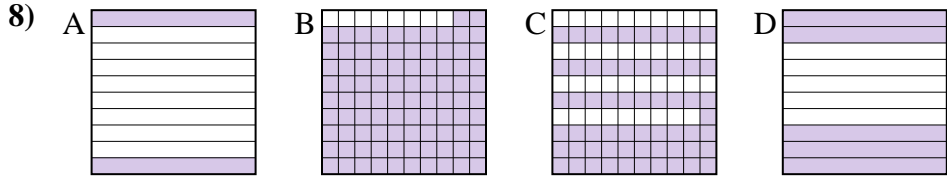
small \_\_\_\_\_  
 \_\_\_\_\_  
 \_\_\_\_\_  
 large \_\_\_\_\_



small \_\_\_\_\_  
 \_\_\_\_\_  
 \_\_\_\_\_  
 large \_\_\_\_\_



small \_\_\_\_\_  
 \_\_\_\_\_  
 \_\_\_\_\_  
 large \_\_\_\_\_



small \_\_\_\_\_  
 \_\_\_\_\_  
 \_\_\_\_\_  
 large \_\_\_\_\_



Put the boxes in order from least to greatest based on the shaded amount.

Ex) A B C D

small  $\frac{0.06 - D}{0.19 - A}$   
large  $\frac{0.2 - B}{0.4 - C}$

1) A B C D

small  $\frac{0.2 - D}{0.5 - B}$   
large  $\frac{0.9 - C}{0.96 - A}$

2) A B C D

small  $\frac{0.1 - C}{0.4 - D}$   
large  $\frac{0.8 - A}{0.81 - B}$

3) A B C D

small  $\frac{0.1 - A}{0.51 - C}$   
large  $\frac{0.6 - B}{0.8 - D}$

4) A B C D

small  $\frac{0.36 - D}{0.4 - A}$   
large  $\frac{0.9 - B}{0.93 - C}$

5) A B C D

small  $\frac{0.19 - D}{0.29 - A}$   
large  $\frac{0.6 - B}{0.8 - C}$

6) A B C D

small  $\frac{0.4 - B}{0.6 - C}$   
large  $\frac{0.67 - A}{0.89 - D}$

7) A B C D

small  $\frac{0.03 - D}{0.17 - B}$   
large  $\frac{0.36 - C}{0.6 - A}$

8) A B C D

small  $\frac{0.2 - A}{0.5 - D}$   
large  $\frac{0.61 - C}{0.92 - B}$

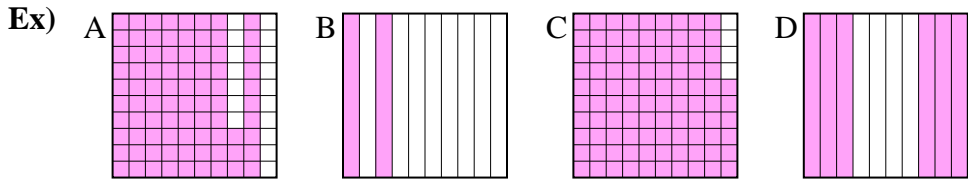
Answers

- Ex. D,A,B,C
1. D,B,C,A
2. C,D,A,B
3. A,C,B,D
4. D,A,B,C
5. D,A,B,C
6. B,C,A,D
7. D,B,C,A
8. A,D,C,B



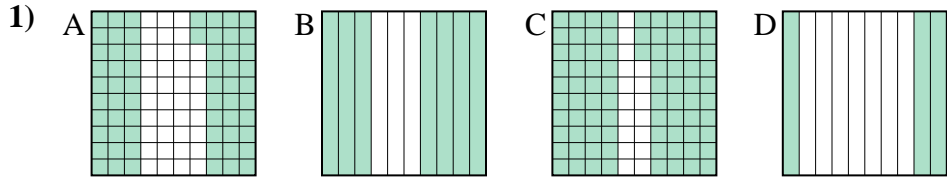
Put the boxes in order from least to greatest based on the shaded amount.

**Answers**



small 0.2 - B  
0.6 - D  
0.83 - A  
 large 0.96 - C

Ex. B,D,A,C

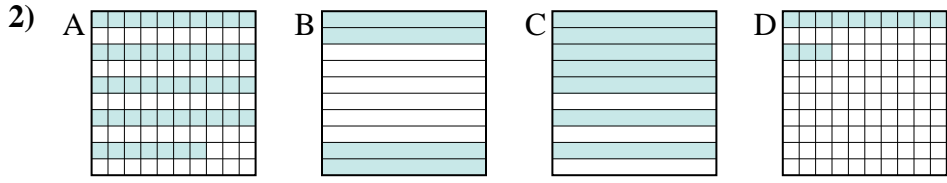


small \_\_\_\_\_  
 \_\_\_\_\_  
 \_\_\_\_\_  
 large \_\_\_\_\_

1. \_\_\_\_\_

2. \_\_\_\_\_

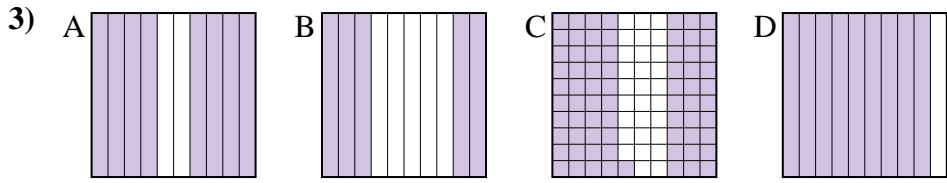
3. \_\_\_\_\_



small \_\_\_\_\_  
 \_\_\_\_\_  
 \_\_\_\_\_  
 large \_\_\_\_\_

4. \_\_\_\_\_

5. \_\_\_\_\_

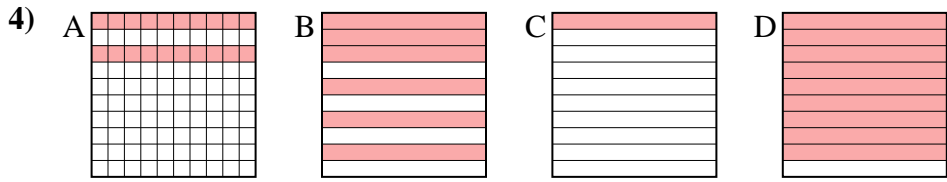


small \_\_\_\_\_  
 \_\_\_\_\_  
 \_\_\_\_\_  
 large \_\_\_\_\_

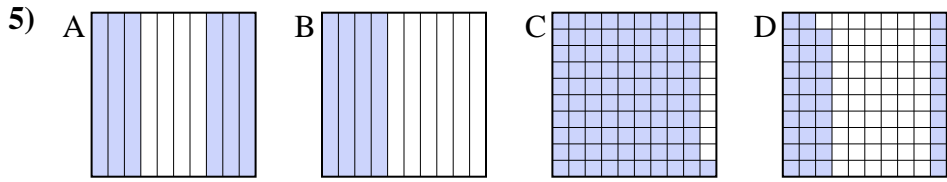
6. \_\_\_\_\_

7. \_\_\_\_\_

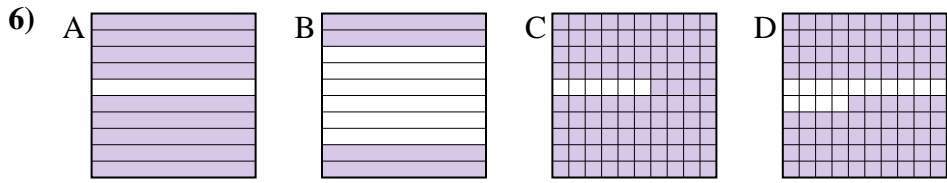
8. \_\_\_\_\_



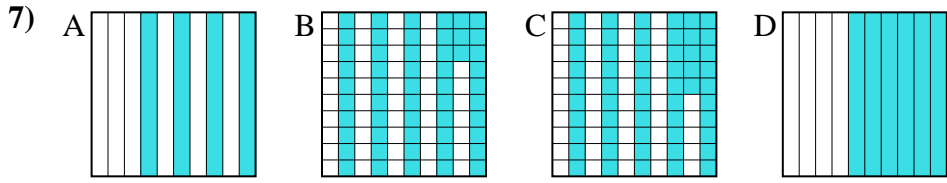
small \_\_\_\_\_  
 \_\_\_\_\_  
 \_\_\_\_\_  
 large \_\_\_\_\_



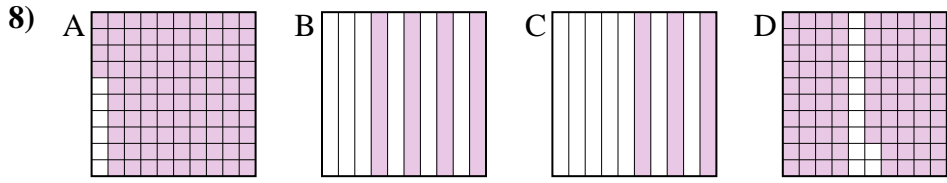
small \_\_\_\_\_  
 \_\_\_\_\_  
 \_\_\_\_\_  
 large \_\_\_\_\_



small \_\_\_\_\_  
 \_\_\_\_\_  
 \_\_\_\_\_  
 large \_\_\_\_\_




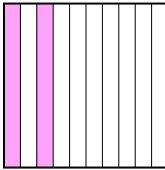

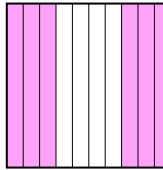
small \_\_\_\_\_  
 \_\_\_\_\_  
 \_\_\_\_\_  
 large \_\_\_\_\_

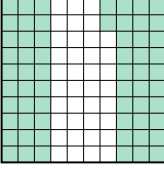
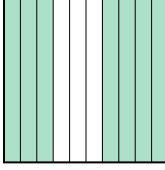
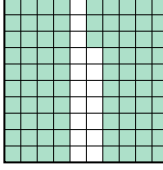
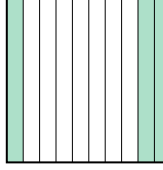


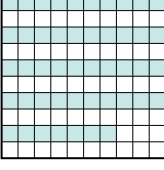


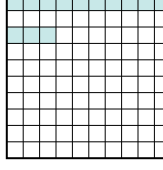
small \_\_\_\_\_  
 \_\_\_\_\_  
 \_\_\_\_\_  
 large \_\_\_\_\_


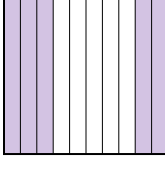
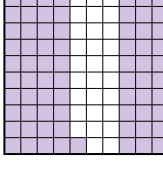
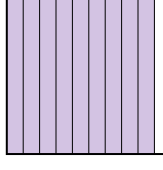






Put the boxes in order from least to greatest based on the shaded amount.

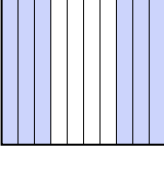
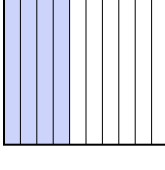

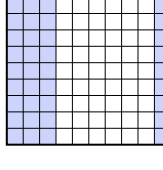
Ex) A  B  C  D  small  $\frac{0.2}{0.6} - B$   
large  $\frac{0.83}{0.96} - C$



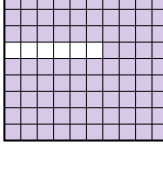
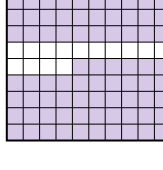
1) A  B  C  D  small  $\frac{0.3}{0.62} - D$   
large  $\frac{0.7}{0.83} - C$



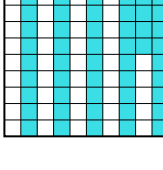

2) A  B  C  D  small  $\frac{0.13}{0.4} - D$   
large  $\frac{0.47}{0.7} - C$


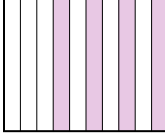
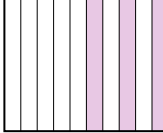
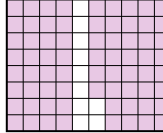
3) A  B  C  D  small  $\frac{0.5}{0.71} - B$   
large  $\frac{0.8}{0.9} - D$

4) A  B  C  D  small  $\frac{0.1}{0.2} - C$   
large  $\frac{0.6}{0.9} - D$

5) A  B  C  D  small  $\frac{0.39}{0.4} - D$   
large  $\frac{0.6}{0.91} - C$

6) A  B  C  D  small  $\frac{0.4}{0.86} - D$   
large  $\frac{0.9}{0.94} - C$

7) A  B  C  D  small  $\frac{0.4}{0.53} - A$   
large  $\frac{0.55}{0.6} - D$

8) A  B  C  D  small  $\frac{0.3}{0.4} - B$   
large  $\frac{0.88}{0.94} - A$

Answers


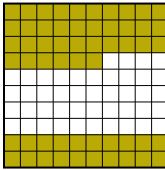


- Ex. B,D,A,C
1. D,A,B,C
2. D,B,A,C
3. B,C,A,D
4. C,A,B,D
5. D,B,A,C
6. B,D,A,C
7. A,B,C,D
8. C,B,D,A





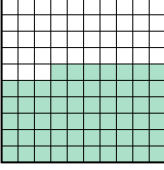

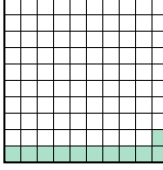

Put the boxes in order from least to greatest based on the shaded amount.

**Answers**

Ex) A  B  C  D 

small 0.12 - C  
0.56 - B  
0.7 - D  
large 0.8 - A

Ex. C,B,D,A

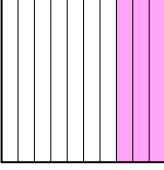
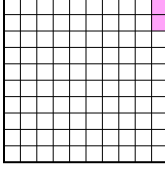
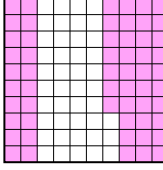
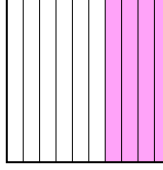
1) A  B  C  D 

small \_\_\_\_\_  
\_\_\_\_\_  
\_\_\_\_\_  
large \_\_\_\_\_

1. \_\_\_\_\_

2. \_\_\_\_\_

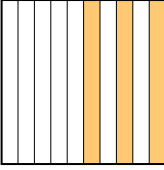
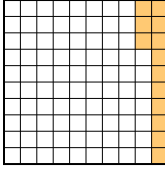
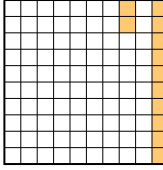
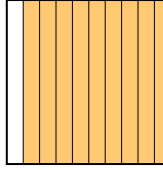
3. \_\_\_\_\_

2) A  B  C  D 

small \_\_\_\_\_  
\_\_\_\_\_  
\_\_\_\_\_  
large \_\_\_\_\_

4. \_\_\_\_\_

5. \_\_\_\_\_

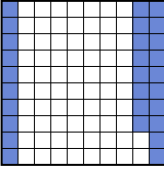
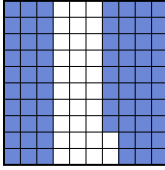
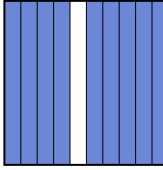
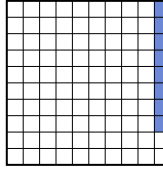
3) A  B  C  D 

small \_\_\_\_\_  
\_\_\_\_\_  
\_\_\_\_\_  
large \_\_\_\_\_


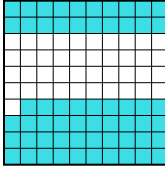


6. \_\_\_\_\_

7. \_\_\_\_\_




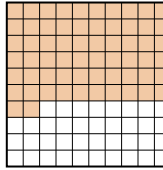
8. \_\_\_\_\_

4) A  B  C  D 


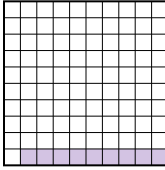

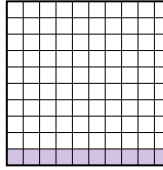
small \_\_\_\_\_  
\_\_\_\_\_  
\_\_\_\_\_  
large \_\_\_\_\_

5) A  B  C  D 




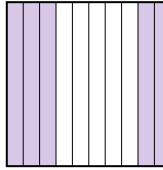
small \_\_\_\_\_  
\_\_\_\_\_  
\_\_\_\_\_  
large \_\_\_\_\_

6) A  B  C  D 

small \_\_\_\_\_  
\_\_\_\_\_  
\_\_\_\_\_  
large \_\_\_\_\_

7) A  B  C  D 

small \_\_\_\_\_  
\_\_\_\_\_  
\_\_\_\_\_  
large \_\_\_\_\_

8) A  B  C  D 

small \_\_\_\_\_  
\_\_\_\_\_  
\_\_\_\_\_  
large \_\_\_\_\_



Put the boxes in order from least to greatest based on the shaded amount.

Ex) A B C D

small  $\frac{0.12}{0.56} - C$   
 $\frac{0.7}{0.8} - D$

large  $\frac{0.8}{0.9} - A$

1) A B C D

small  $\frac{0.11}{0.57} - C$   
 $\frac{0.7}{0.9} - D$

large  $\frac{0.9}{0.9} - B$

2) A B C D

small  $\frac{0.02}{0.3} - B$   
 $\frac{0.4}{0.57} - C$

large  $\frac{0.57}{0.9} - C$

3) A B C D

small  $\frac{0.12}{0.13} - C$   
 $\frac{0.3}{0.4} - A$

large  $\frac{0.9}{0.9} - D$

4) A B C D

small  $\frac{0.08}{0.28} - D$   
 $\frac{0.68}{0.9} - B$

large  $\frac{0.9}{0.9} - C$

5) A B C D

small  $\frac{0.3}{0.4} - D$   
 $\frac{0.59}{0.9} - B$

large  $\frac{0.9}{0.9} - A$

6) A B C D

small  $\frac{0.2}{0.6} - C$   
 $\frac{0.62}{0.9} - D$

large  $\frac{0.9}{0.9} - A$

7) A B C D

small  $\frac{0.09}{0.1} - B$   
 $\frac{0.1}{0.1} - C$

large  $\frac{0.6}{0.6} - A$

8) A B C D

small  $\frac{0.5}{0.78} - D$   
 $\frac{0.8}{0.8} - C$

large  $\frac{0.98}{0.98} - A$

Answers

Ex. C,B,D,A

1. C,A,D,B

2. B,A,D,C

3. C,B,A,D

4. D,A,B,C

5. D,C,B,A

6. C,B,D,A

7. B,C,C,A


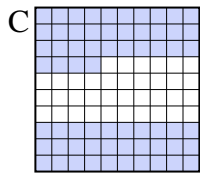

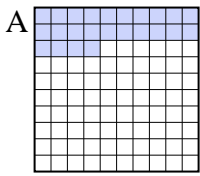
8. D,B,C,A



Put the boxes in order from least to greatest based on the shaded amount.

**Answers**

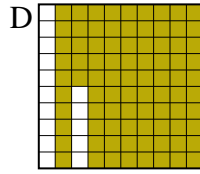
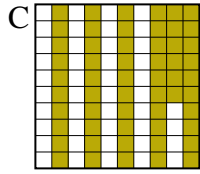
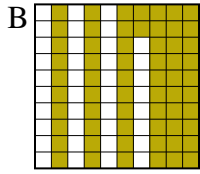
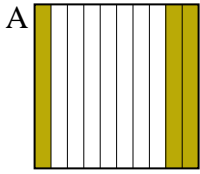
Ex)



small 0.2 - D  
0.24 - A  
0.4 - B  
large 0.64 - C

Ex. D,A,B,C

1)



small \_\_\_\_\_  
\_\_\_\_\_

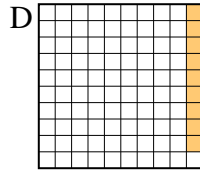
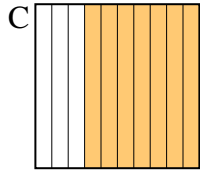
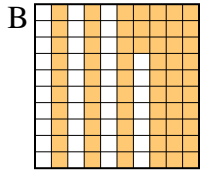
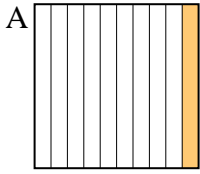
large \_\_\_\_\_

1. \_\_\_\_\_

2. \_\_\_\_\_

3. \_\_\_\_\_

2)



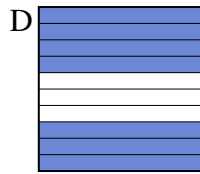
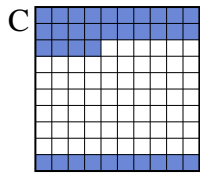

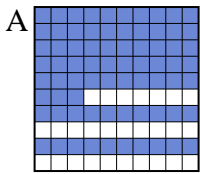
small \_\_\_\_\_

large \_\_\_\_\_

4. \_\_\_\_\_

5. \_\_\_\_\_

3)



small \_\_\_\_\_

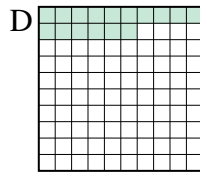
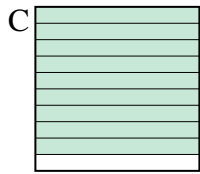

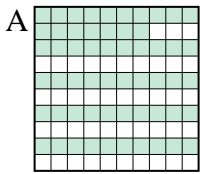
large \_\_\_\_\_

6. \_\_\_\_\_

7. \_\_\_\_\_

8. \_\_\_\_\_

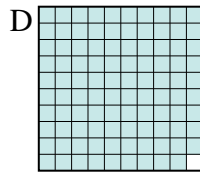
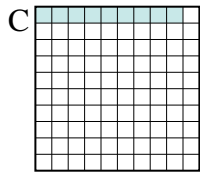
4)



small \_\_\_\_\_

large \_\_\_\_\_

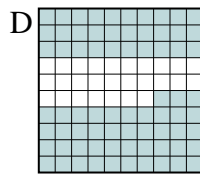
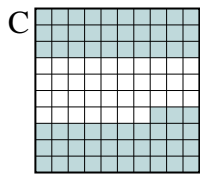
5)



small \_\_\_\_\_

large \_\_\_\_\_

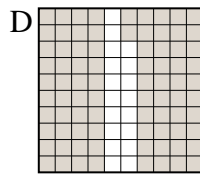
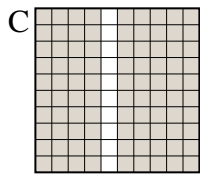
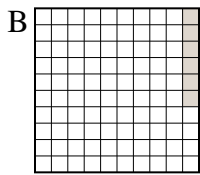
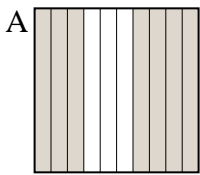
6)



small \_\_\_\_\_

large \_\_\_\_\_

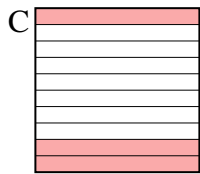
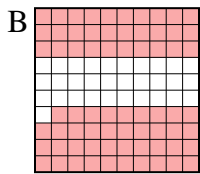
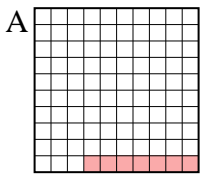
7)



small \_\_\_\_\_

large \_\_\_\_\_

8)



small \_\_\_\_\_

large \_\_\_\_\_



Put the boxes in order from least to greatest based on the shaded amount.

Ex) A B C D small  $\frac{0.2}{0.24} - D$   
large  $\frac{0.4}{0.64} - C$

1) A B C D small  $\frac{0.3}{0.56} - A$   
large  $\frac{0.62}{0.85} - D$

2) A B C D small  $\frac{0.09}{0.1} - D$   
large  $\frac{0.63}{0.7} - C$

3) A B C D small  $\frac{0.3}{0.34} - B$   
large  $\frac{0.7}{0.73} - A$

4) A B C D small  $\frac{0.16}{0.4} - D$   
large  $\frac{0.57}{0.9} - C$

5) A B C D small  $\frac{0.09}{0.3} - C$   
large  $\frac{0.9}{0.99} - D$

6) A B C D small  $\frac{0.3}{0.4} - A$   
large  $\frac{0.63}{0.73} - D$

7) A B C D small  $\frac{0.06}{0.7} - B$   
large  $\frac{0.82}{0.9} - C$

8) A B C D small  $\frac{0.07}{0.2} - A$   
large  $\frac{0.3}{0.69} - B$

**Answers**

- Ex. D,A,B,C
1. A,C,B,D
2. D,A,B,C
3. B,C,D,A
4. D,B,A,C
5. C,B,A,D
6. A,B,C,D
7. B,A,D,C
8. A,D,C,B